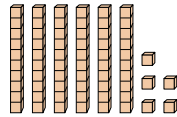
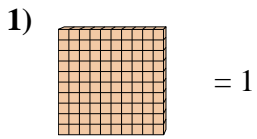


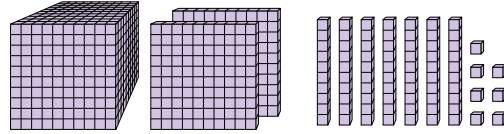
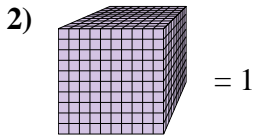


Utilisez le bloc de gauche pour trouver la valeur de l'ensemble de blocs de droite.

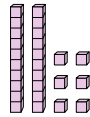
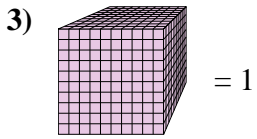
**Réponses**



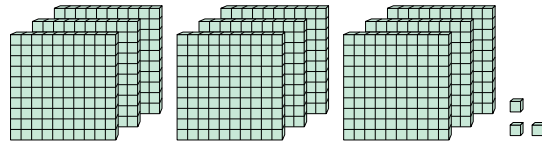
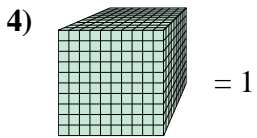
1. \_\_\_\_\_



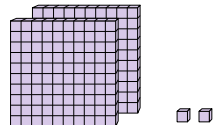
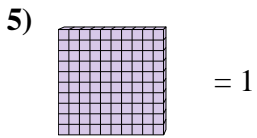
2. \_\_\_\_\_



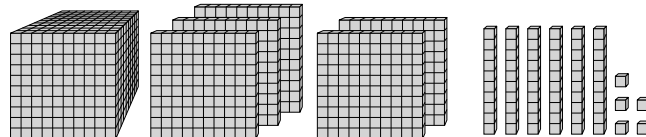
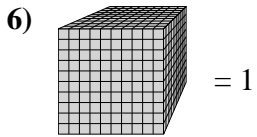
3. \_\_\_\_\_



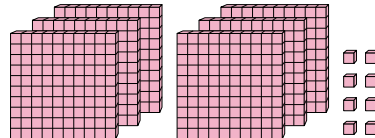
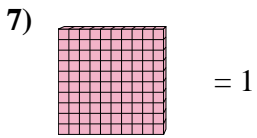
4. \_\_\_\_\_



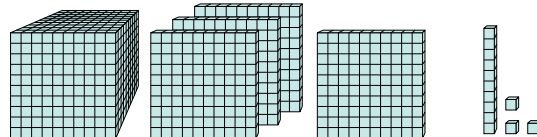
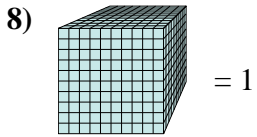
5. \_\_\_\_\_



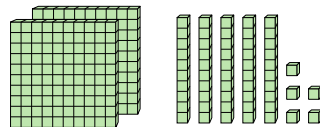
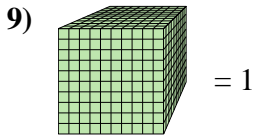
6. \_\_\_\_\_



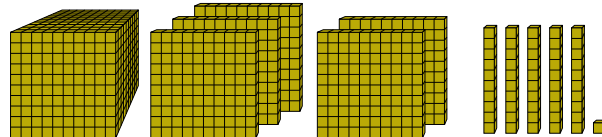
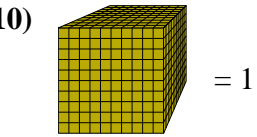
7. \_\_\_\_\_



8. \_\_\_\_\_



9. \_\_\_\_\_



10. \_\_\_\_\_



Utilisez le bloc de gauche pour trouver la valeur de l'ensemble de blocs de droite.

1) = 1

2) = 1

3) = 1

4) = 1

5) = 1

6) = 1

7) = 1

8) = 1

9) = 1

10) = 1

Réponses

1. 0,65
2. 1,277
3. 0,026
4. 0,903
5. 2,02
6. 1,565
7. 6,08
8. 1,413
9. 0,255
10. 1,551