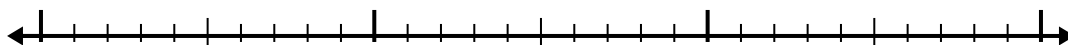





Utilisez la droite numérique pour résoudre chaque problème.

## Réponses

1)  $3,5 - 1,4 =$



2)  $6,4 - 1,4 =$



3)  $6,6 - 2,4 =$



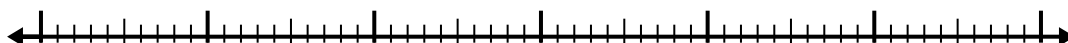
4)  $3,2 - 1,6 =$




5)  $3,6 - 2,2 =$



6)  $11,8 - 3,2 =$




7)  $10,8 - 2,8 =$



8)  $2,7 - 1,7 =$



9)  $4,1 - 2,9 =$



10)  $7,6 - 3,7 =$



1. \_\_\_\_\_

2. \_\_\_\_\_

3. \_\_\_\_\_

4. \_\_\_\_\_

5. \_\_\_\_\_

6. \_\_\_\_\_

7. \_\_\_\_\_

8. \_\_\_\_\_

9. \_\_\_\_\_

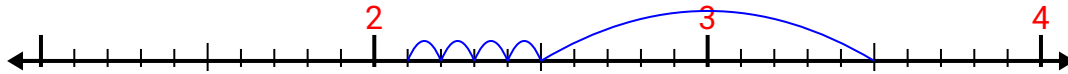
10. \_\_\_\_\_




Utilisez la droite numérique pour résoudre chaque problème.

## Réponses

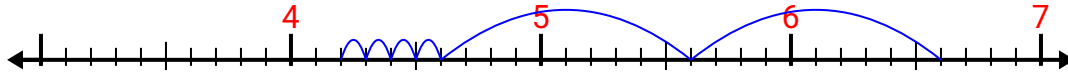
1)  $3,5 - 1,4 =$



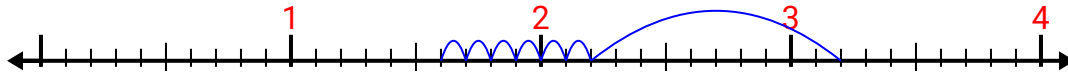
2)  $6,4 - 1,4 =$



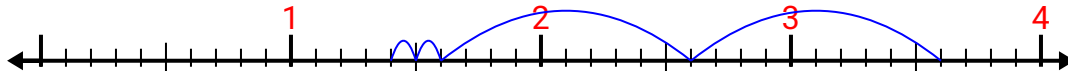
3)  $6,6 - 2,4 =$



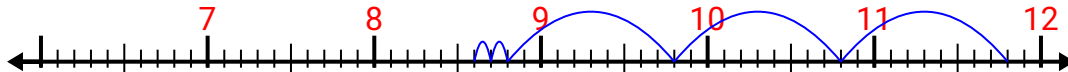
4)  $3,2 - 1,6 =$



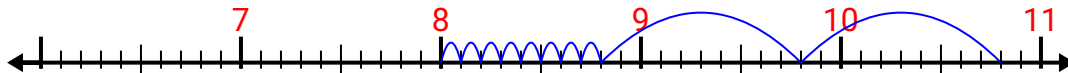
5)  $3,6 - 2,2 =$



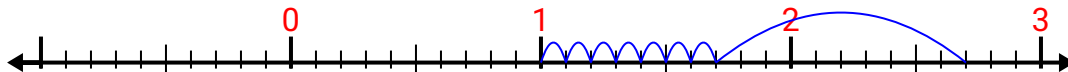
6)  $11,8 - 3,2 =$



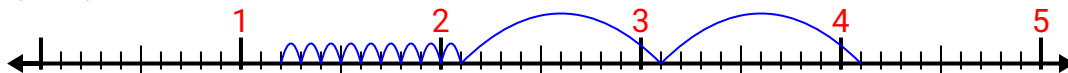
7)  $10,8 - 2,8 =$



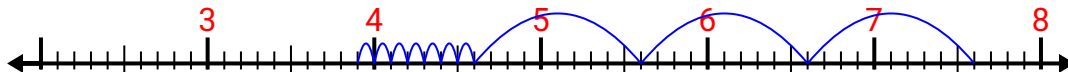
8)  $2,7 - 1,7 =$



9)  $4,1 - 2,9 =$



10)  $7,6 - 3,7 =$

1. 2,12. 53. 4,24. 1,65. 1,46. 8,67. 88. 19. 1,210. 3,9