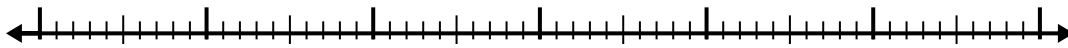


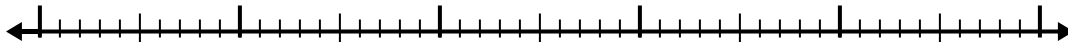


Utilisez la droite numérique pour résoudre chaque problème.


1) $9,7 - 3,2 =$



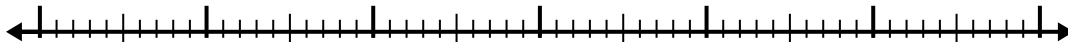
2) $9,1 - 3,8 =$



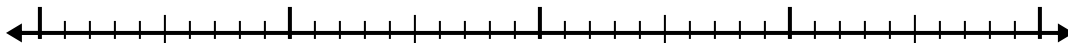
3) $4,2 - 1,1 =$



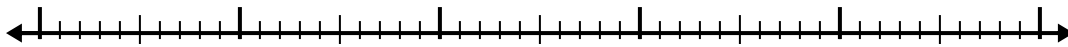
4) $11,6 - 3,2 =$



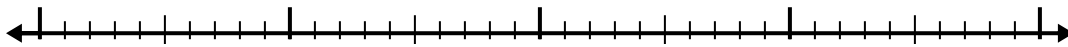
5) $6,9 - 1,2 =$



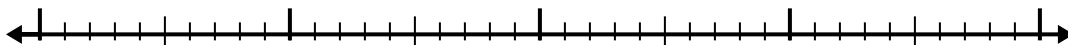
6) $4,8 - 2,8 =$



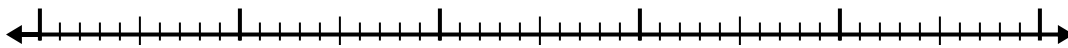
7) $6 - 1,8 =$



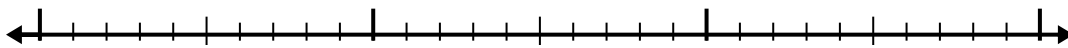
8) $8 - 1,4 =$



9) $8,2 - 3,9 =$



10) $2,5 - 1,4 =$



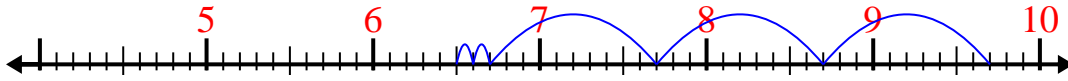
Réponses

- 1. _____
- 2. _____
- 3. _____
- 4. _____
- 5. _____
- 6. _____
- 7. _____
- 8. _____
- 9. _____
- 10. _____

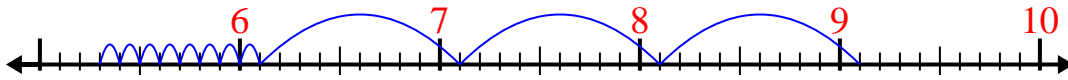


Utilisez la droite numérique pour résoudre chaque problème.

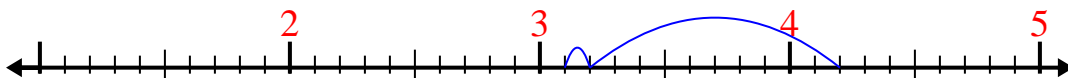
1) $9,7 - 3,2 =$



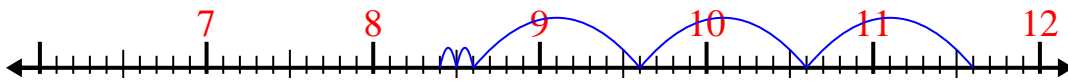
2) $9,1 - 3,8 =$



3) $4,2 - 1,1 =$



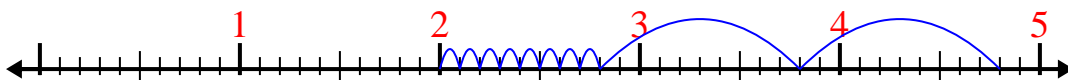
4) $11,6 - 3,2 =$



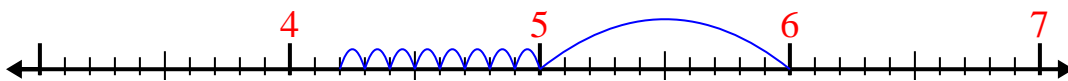
5) $6,9 - 1,2 =$



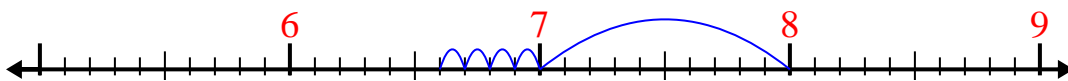
6) $4,8 - 2,8 =$



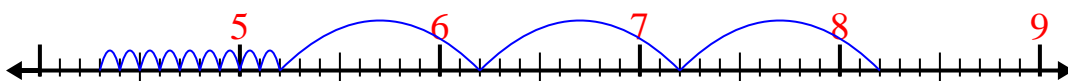
7) $6 - 1,8 =$



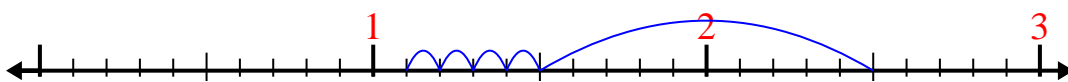
8) $8 - 1,4 =$



9) $8,2 - 3,9 =$



10) $2,5 - 1,4 =$

**Réponses**1. 6,52. 5,33. 3,14. 8,45. 5,76. 27. 4,28. 6,69. 4,310. 1,1