


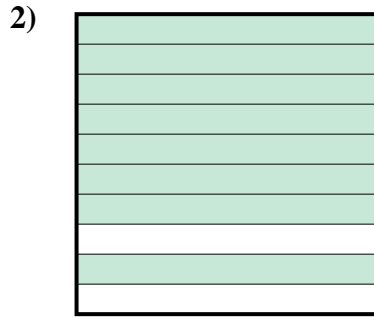


Déterminez quelle lettre représente le mieux la valeur colorée relative à la figure.

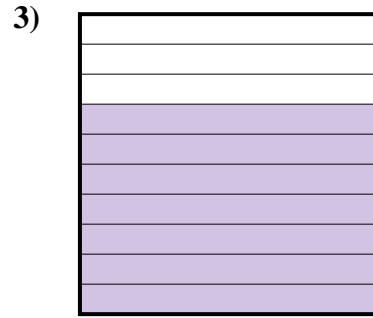
Réponses



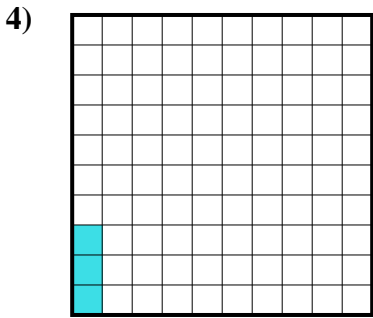
- A. 6
- B. 0,6
- C. 0,06
- D. 600,00



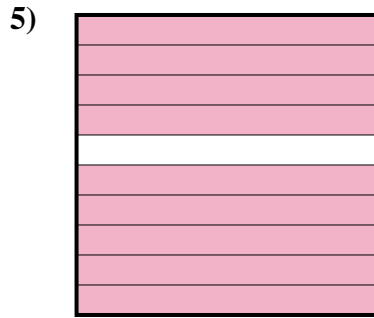
- A. 0,08
- B. 8
- C. 80
- D. 0,8



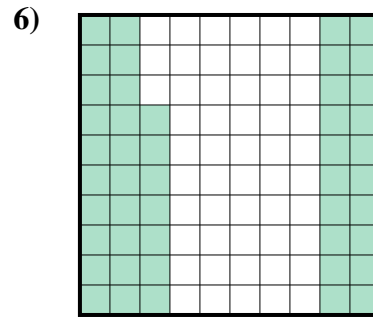
- A. 70
- B. 0,07
- C. 700,00
- D. 0,7



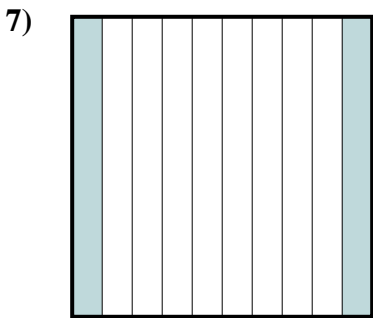
- A. 0,3
- B. 0,003
- C. 0,03
- D. 3



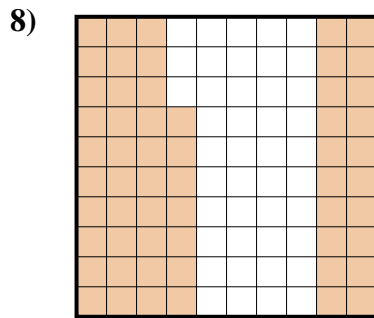
- A. 0,9
- B. 90
- C. 0,09
- D. 900,00




- A. 470,00
- B. 0,47
- C. 4,7
- D. 47



- A. 200,0
- B. 200,00
- C. 20
- D. 0,2



- A. 5,7
- B. 0,57
- C. 57
- D. 0,057



- A. 0,5
- B. 500,00
- C. 5
- D. 0,05

1. _____

2. _____

3. _____

4. _____

5. _____

6. _____


7. _____

8. _____

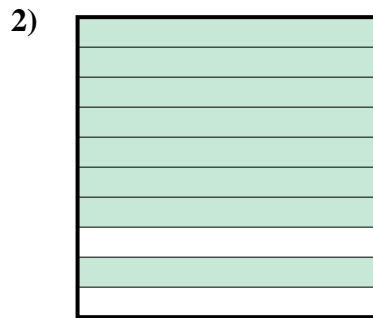
9. _____



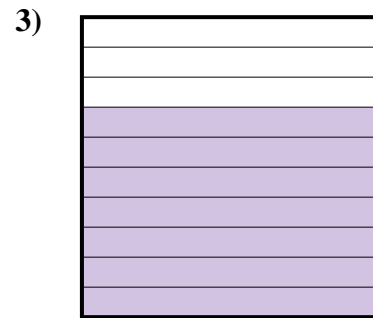
Déterminez quelle lettre représente le mieux la valeur colorée relative à la figure.



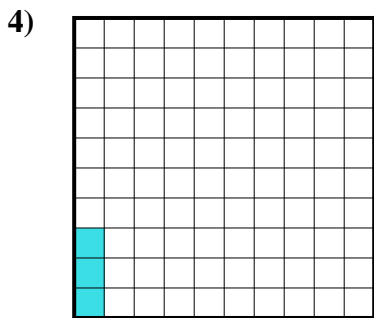
- A. 6
B. 0,6
C. 0,06
D. 600,00



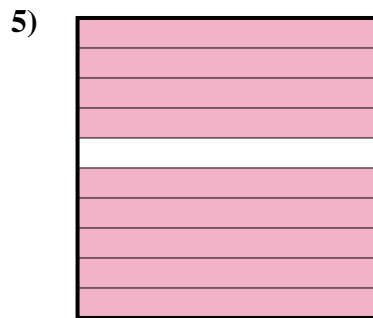
- A. 0,08
B. 8
C. 80
D. 0,8



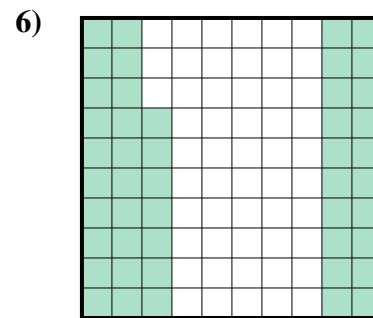
- A. 70
B. 0,07
C. 700,00
D. 0,7



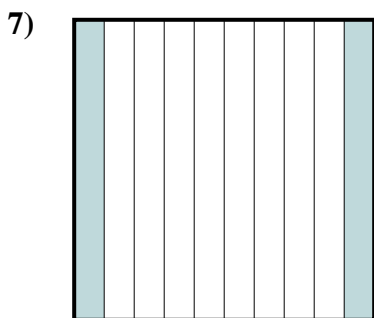
- A. 0,3
B. 0,003
C. 0,03
D. 3



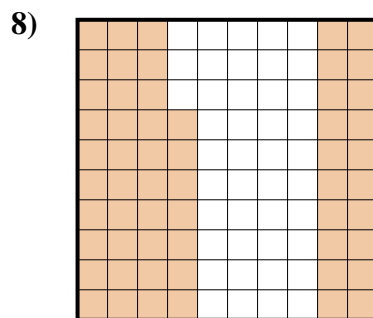
- A. 0,9
B. 90
C. 0,09
D. 900,00




- A. 470,00
B. 0,47
C. 4,7
D. 47



- A. 200,0
B. 200,00
C. 20
D. 0,2



- A. 5,7
B. 0,57
C. 57
D. 0,057



- A. 0,5
B. 500,00
C. 5
D. 0,05

Réponses

1. **B**
2. **D**
3. **D**
4. **C**
5. **A**
6. **B**
7. **D**
8. **B**
9. **A**