


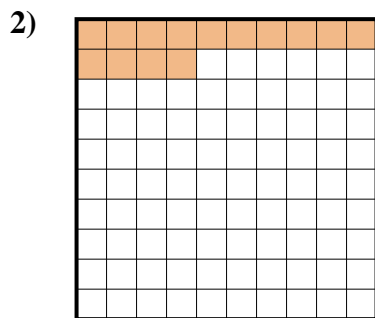


Déterminez quelle lettre représente le mieux la valeur colorée relative à la figure.

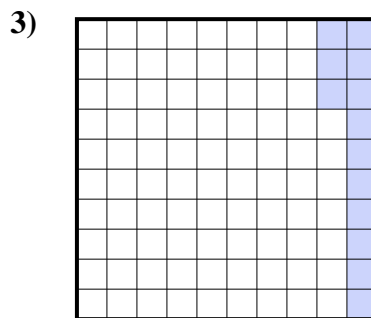
**Réponses**




- A. 0,7
- B. 0,07
- C. 700,0
- D. 7



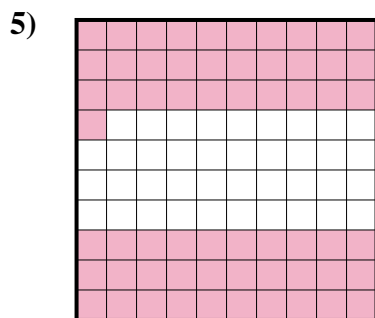
- A. 14
- B. 1,4
- C. 140,0
- D. 0,14



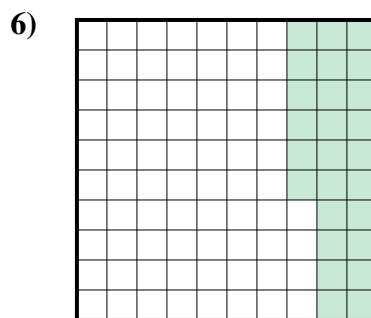
- A. 1,3
- B. 13
- C. 0,13
- D. 0,013



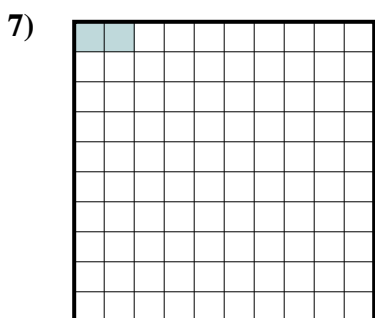
- A. 0,09
- B. 90
- C. 0,9
- D. 900,00



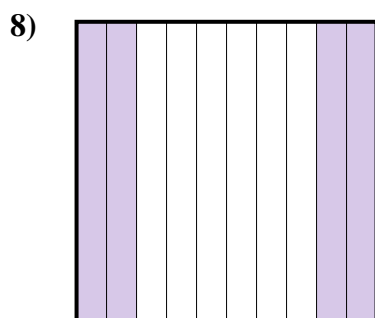
- A. 6,1
- B. 0,61
- C. 610,0
- D. 0,061



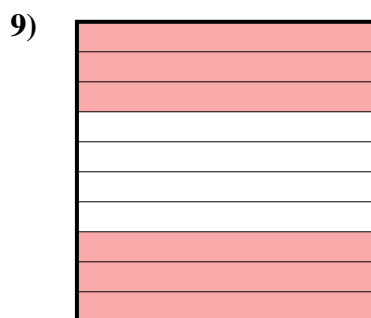
- A. 26
- B. 260,0
- C. 0,26
- D. 0,026



- A. 20,0
- B. 0,2
- C. 0,02
- D. 20,00



- A. 40
- B. 400,0
- C. 0,4
- D. 0,04



- A. 600,00
- B. 60
- C. 0,6
- D. 0,06

1. \_\_\_\_\_

2. \_\_\_\_\_

3. \_\_\_\_\_

4. \_\_\_\_\_

5. \_\_\_\_\_

6. \_\_\_\_\_

7. \_\_\_\_\_


8. \_\_\_\_\_

9. \_\_\_\_\_

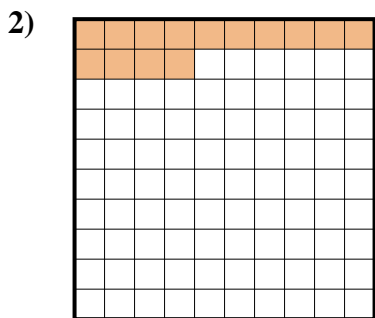


Déterminez quelle lettre représente le mieux la valeur colorée relative à la figure.

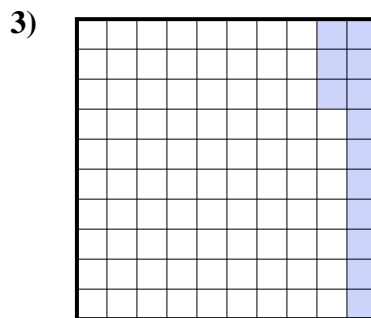
**Réponses**




- A. 0,7
- B. 0,07
- C. 700,0
- D. 7



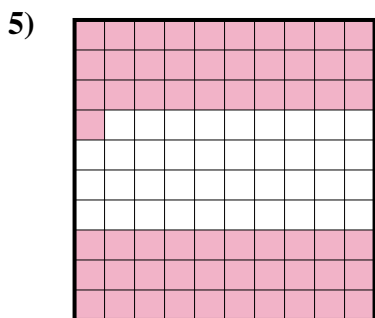
- A. 14
- B. 1,4
- C. 140,0
- D. 0,14



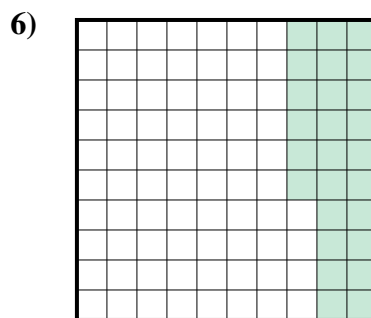
- A. 1,3
- B. 13
- C. 0,13
- D. 0,013



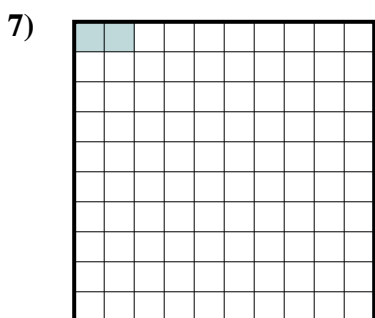
- A. 0,09
- B. 90
- C. 0,9
- D. 900,00



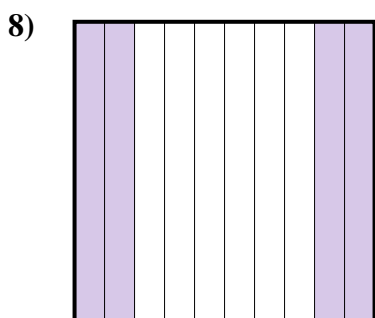
- A. 6,1
- B. 0,61
- C. 610,0
- D. 0,061



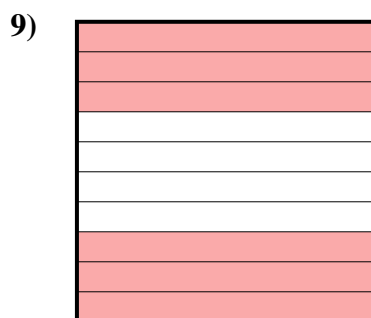
- A. 26
- B. 260,0
- C. 0,26
- D. 0,026



- A. 20,0
- B. 0,2
- C. 0,02
- D. 20,00



- A. 40
- B. 400,0
- C. 0,4
- D. 0,04



- A. 600,00
- B. 60
- C. 0,6
- D. 0,06

- 1. **A**
- 2. **D**
- 3. **C**
- 4. **C**
- 5. **B**
- 6. **C**
- 7. **C**
- 8. **C**
- 9. **C**