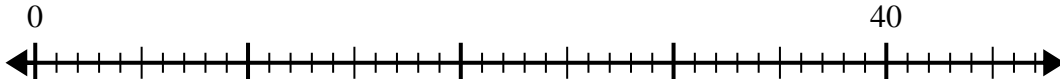




Utilisez la droite numérique pour résoudre le problème de division.

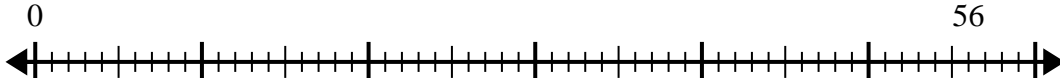
Réponses

1) $40 \div 5 =$
0



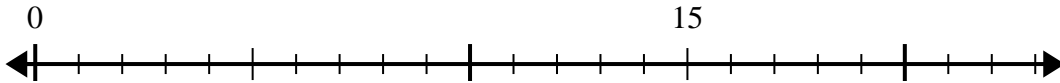
1. _____

2) $56 \div 7 =$
0



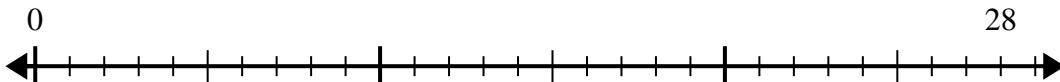
2. _____

3) $15 \div 5 =$
0



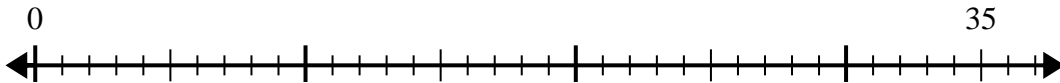
3. _____

4) $28 \div 4 =$
0



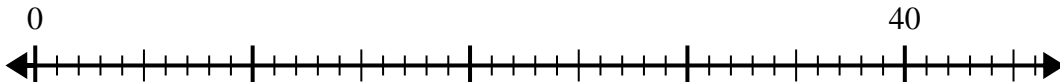
4. _____

5) $35 \div 7 =$
0



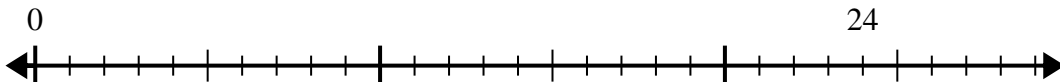
5. _____

6) $40 \div 8 =$
0



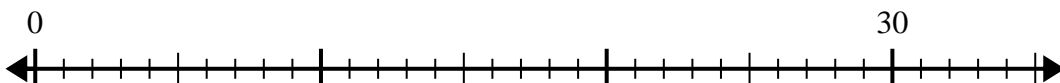
6. _____

7) $24 \div 4 =$
0



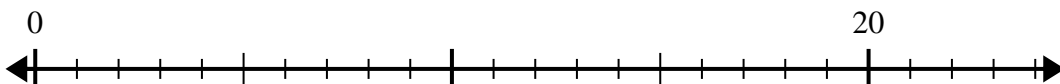
7. _____

8) $30 \div 5 =$
0



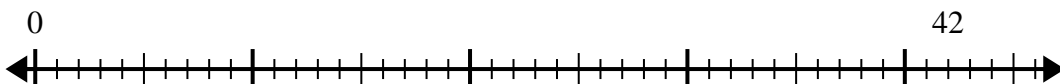
8. _____

9) $20 \div 4 =$
0



9. _____

10) $42 \div 6 =$
0

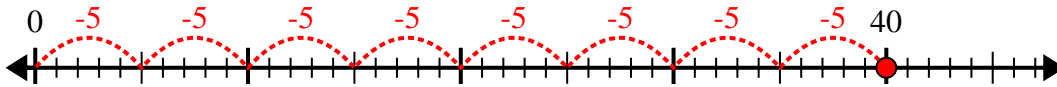


10. _____

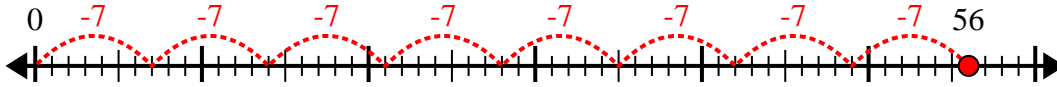


Utilisez la droite numérique pour résoudre le problème de division.

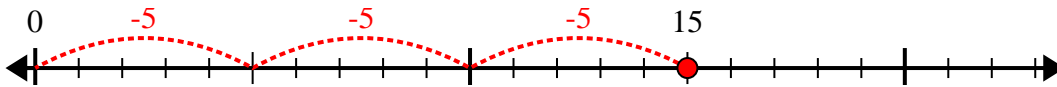
1) $40 \div 5 =$



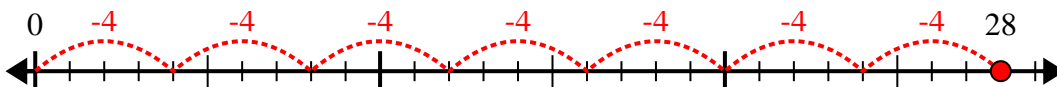
2) $56 \div 7 =$



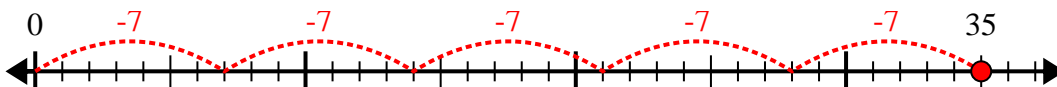
3) $15 \div 5 =$



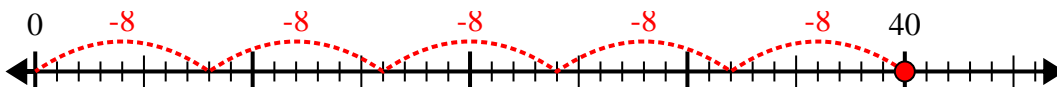
4) $28 \div 4 =$



5) $35 \div 7 =$



6) $40 \div 8 =$



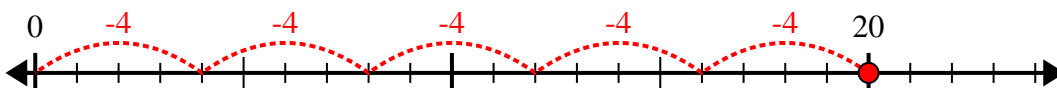
7) $24 \div 4 =$



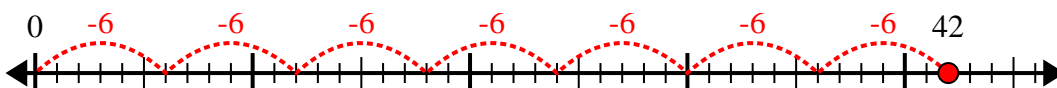
8) $30 \div 5 =$



9) $20 \div 4 =$



10) $42 \div 6 =$



Réponses

1. 8
2. 8
3. 3
4. 7
5. 5
6. 5
7. 6
8. 6
9. 5
10. 7