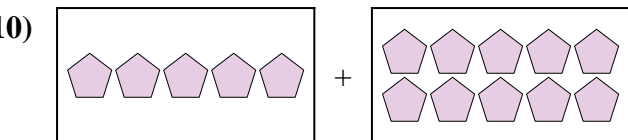
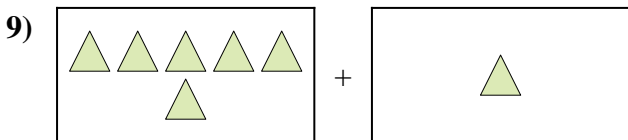
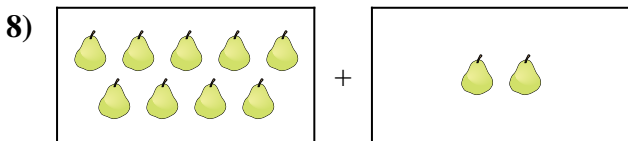
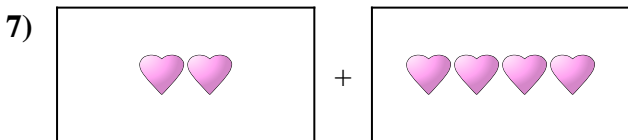
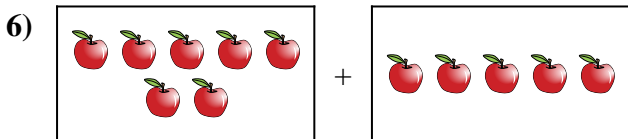
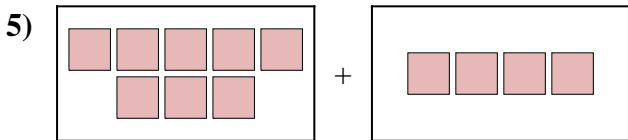
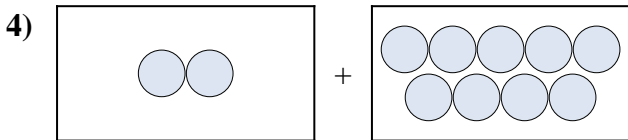
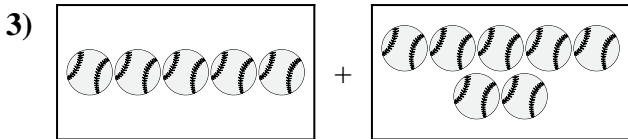

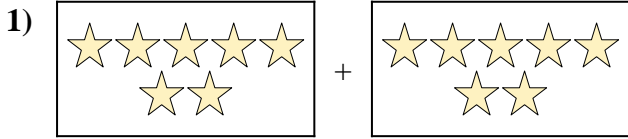




Exprimez le problème visuel sous forme d'équation avec réponse.

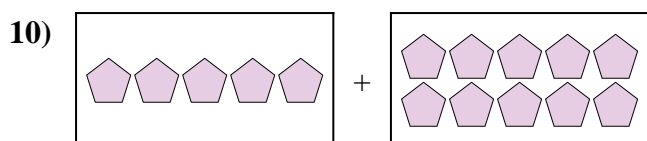
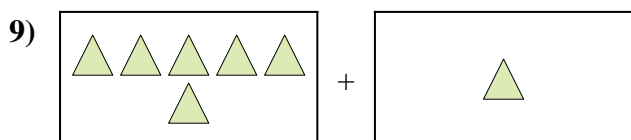
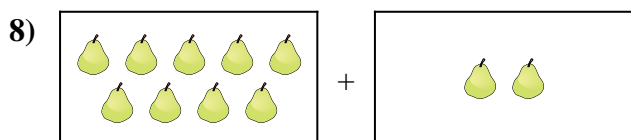
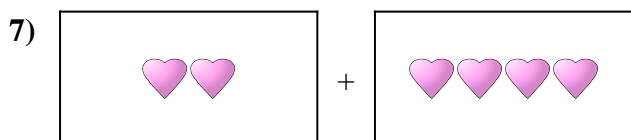
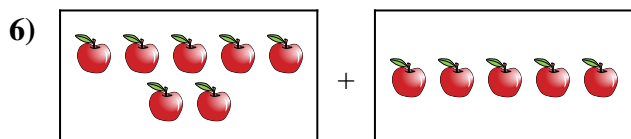
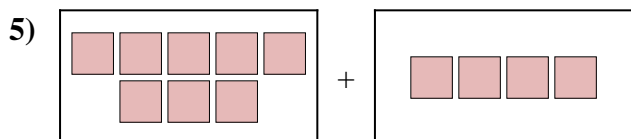
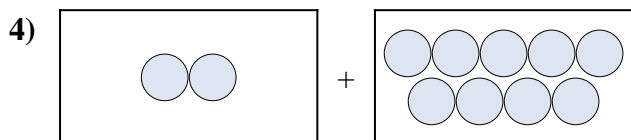
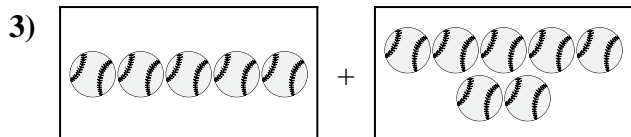

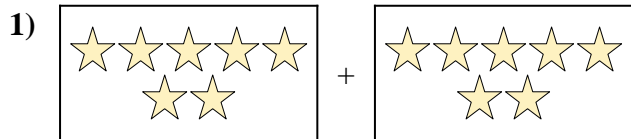
Réponses



1. _____
2. _____
3. _____
4. _____
5. _____
6. _____
7. _____
8. _____
9. _____
10. _____



Exprimez le problème visuel sous forme d'équation avec réponse.

**Réponses**

1. $7 + 7 = 14$

2. $6 + 1 = 7$

3. $5 + 7 = 12$

4. $2 + 9 = 11$

5. $8 + 4 = 12$

6. $7 + 5 = 12$

7. $2 + 4 = 6$

8. $9 + 2 = 11$

9. $6 + 1 = 7$

10. $5 + 10 = 15$