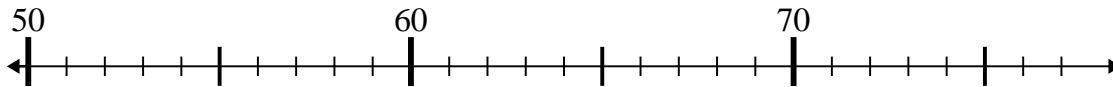




Utilisez les droites numériques pour répondre à chaque problème.

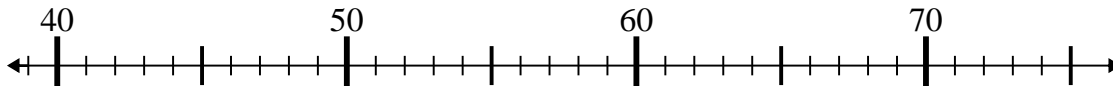
**Réponses**

1)  $70 - 16 =$



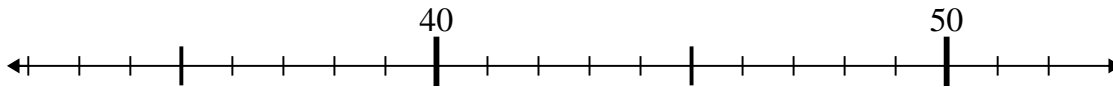
1. \_\_\_\_\_

2)  $39 + 6 =$



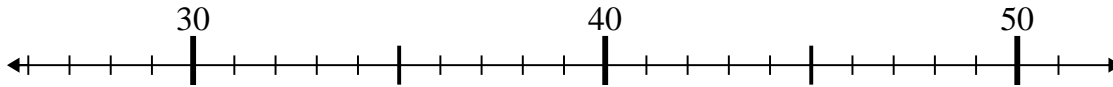
2. \_\_\_\_\_

3)  $46 + 3 =$



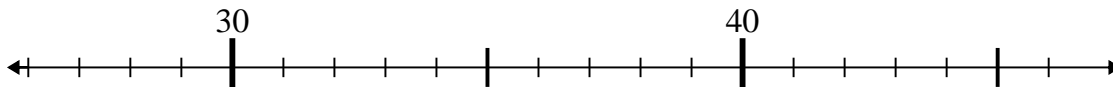
3. \_\_\_\_\_

4)  $31 + 8 =$



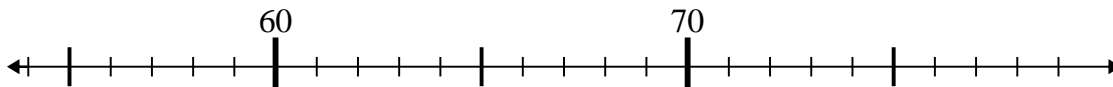
4. \_\_\_\_\_

5)  $36 - 1 =$



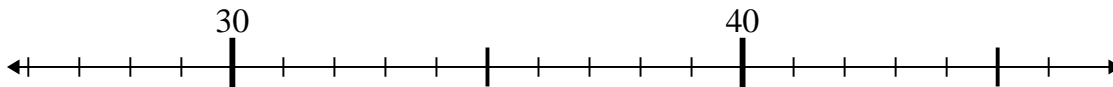
5. \_\_\_\_\_

6)  $70 + 8 =$



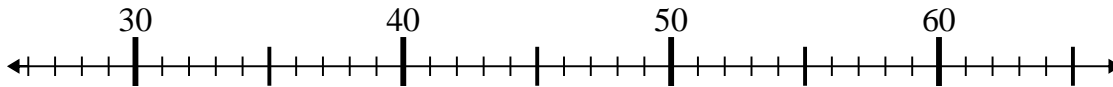
6. \_\_\_\_\_

7)  $46 - 1 =$



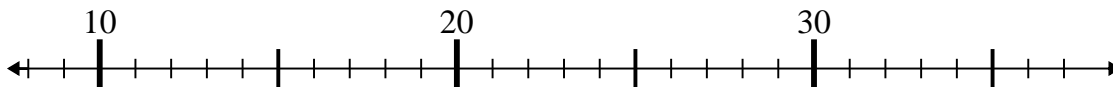
7. \_\_\_\_\_

8)  $27 + 8 =$



8. \_\_\_\_\_

9)  $18 + 1 =$



9. \_\_\_\_\_

10)  $25 + 3 =$



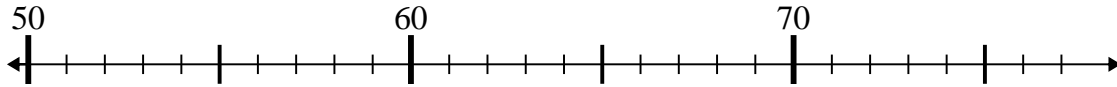
10. \_\_\_\_\_



Utilisez les droites numériques pour répondre à chaque problème.

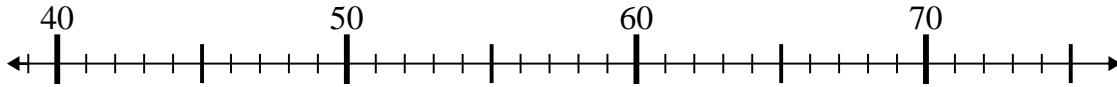
**Réponses**

1)  $70 - 16 =$



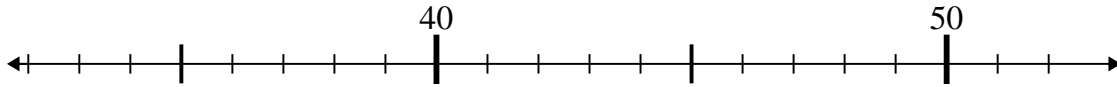
1. 54

2)  $39 + 6 =$



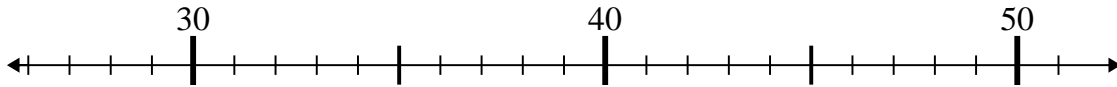
2. 45

3)  $46 + 3 =$



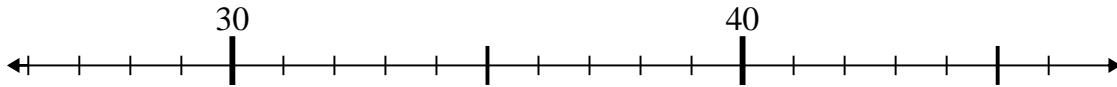
3. 49

4)  $31 + 8 =$



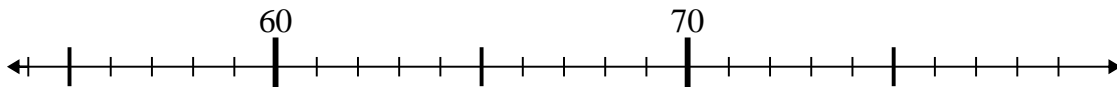
4. 39

5)  $36 - 1 =$



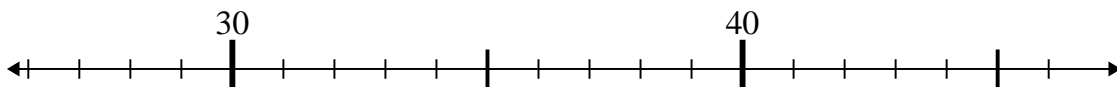
5. 35

6)  $70 + 8 =$



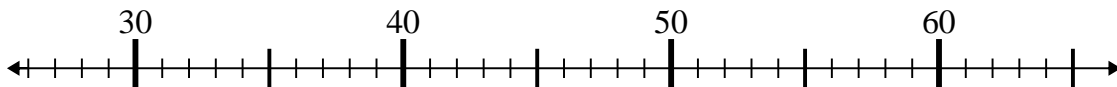
6. 78

7)  $46 - 1 =$



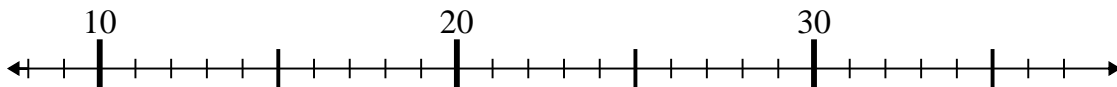
7. 45

8)  $27 + 8 =$



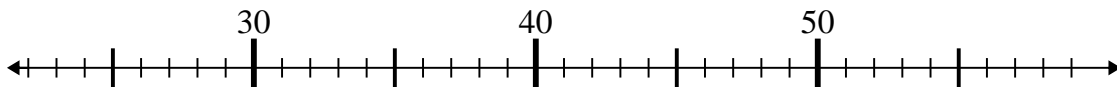
8. 35

9)  $18 + 1 =$



9. 19

10)  $25 + 3 =$



10. 28