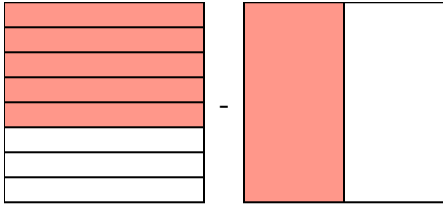


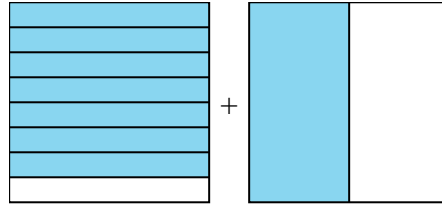


Résoudre chaque problème.

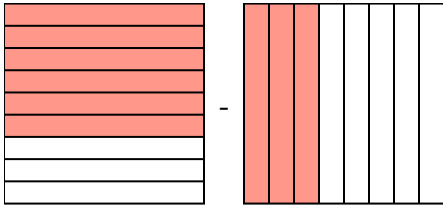
1)  $\frac{5}{8} - \frac{1}{2} =$



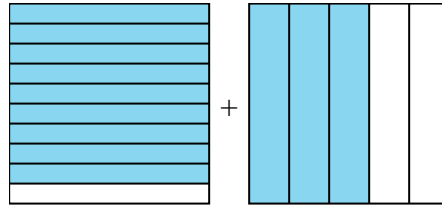
2)  $\frac{7}{8} + \frac{1}{2} =$



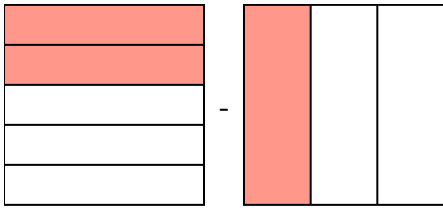
3)  $\frac{6}{9} - \frac{3}{8} =$



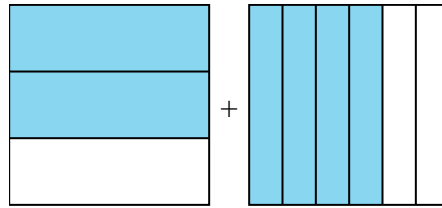
4)  $\frac{9}{10} + \frac{3}{5} =$



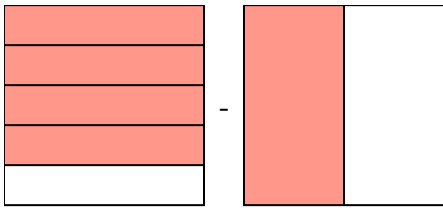
5)  $\frac{2}{5} - \frac{1}{3} =$



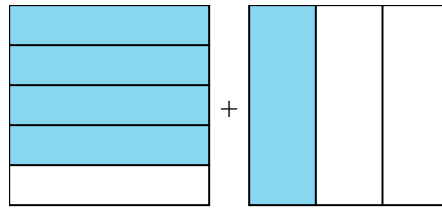
6)  $\frac{2}{3} + \frac{4}{6} =$



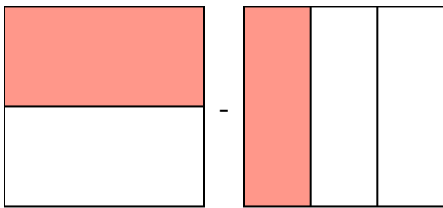
7)  $\frac{4}{5} - \frac{1}{2} =$



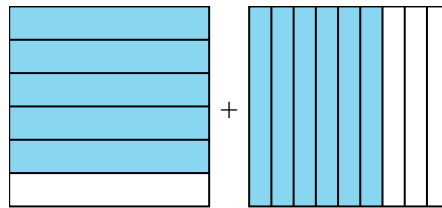
8)  $\frac{4}{5} + \frac{1}{3} =$



9)  $\frac{1}{2} - \frac{1}{3} =$



10)  $\frac{5}{6} + \frac{6}{9} =$

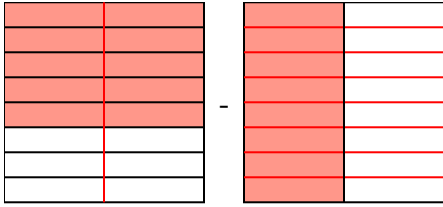


**Réponses**

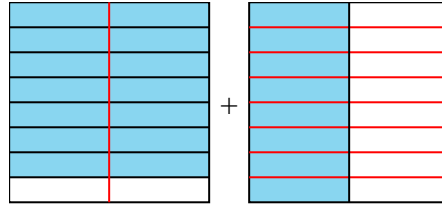
1. \_\_\_\_\_
2. \_\_\_\_\_
3. \_\_\_\_\_
4. \_\_\_\_\_
5. \_\_\_\_\_
6. \_\_\_\_\_
7. \_\_\_\_\_
8. \_\_\_\_\_
9. \_\_\_\_\_
10. \_\_\_\_\_

**Résoudre chaque problème.**

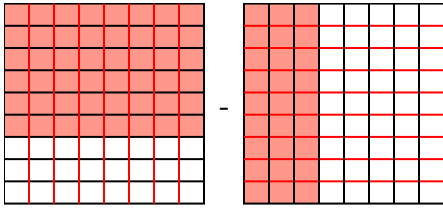
1)  $\frac{5}{8} - \frac{1}{2} = \frac{5}{8} - \frac{4}{8} = \frac{1}{8}$



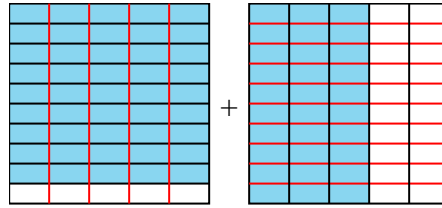
2)  $\frac{7}{8} + \frac{1}{2} = \frac{7}{8} + \frac{4}{8} = 1\frac{3}{8}$



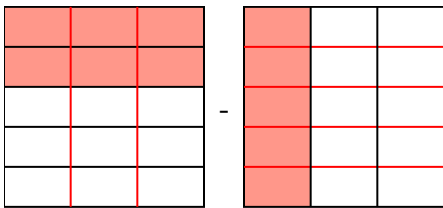
3)  $\frac{6}{9} - \frac{3}{8} = \frac{48}{72} - \frac{27}{72} = \frac{21}{72}$



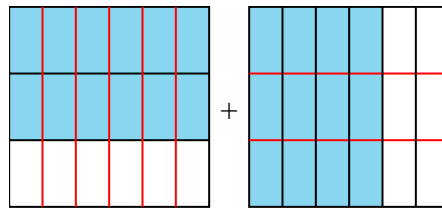
4)  $\frac{9}{10} + \frac{3}{5} = \frac{9}{10} + \frac{6}{10} = 1\frac{5}{10}$



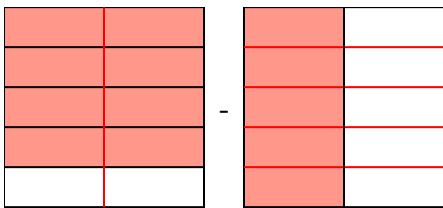
5)  $\frac{2}{5} - \frac{1}{3} = \frac{6}{15} - \frac{5}{15} = \frac{1}{15}$



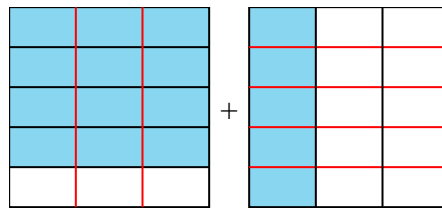
6)  $\frac{2}{3} + \frac{4}{6} = \frac{4}{6} + \frac{4}{6} = 1\frac{2}{6}$



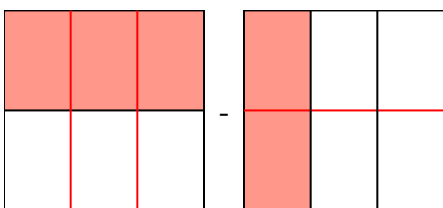
7)  $\frac{4}{5} - \frac{1}{2} = \frac{8}{10} - \frac{5}{10} = \frac{3}{10}$



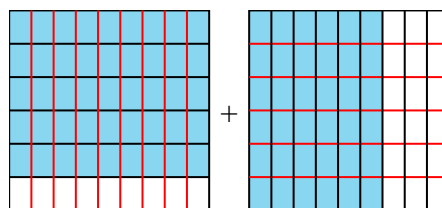
8)  $\frac{4}{5} + \frac{1}{3} = \frac{12}{15} + \frac{5}{15} = 1\frac{2}{15}$



9)  $\frac{1}{2} - \frac{1}{3} = \frac{3}{6} - \frac{2}{6} = \frac{1}{6}$



10)  $\frac{5}{6} + \frac{6}{9} = \frac{15}{18} + \frac{12}{18} = 1\frac{9}{18}$

**Réponses**

1.  $\frac{1}{8}$

2.  $1\frac{3}{8}$

3.  $\frac{21}{72}$

4.  $1\frac{5}{10}$

5.  $\frac{1}{15}$

6.  $1\frac{2}{6}$

7.  $\frac{3}{10}$

8.  $1\frac{2}{15}$

9.  $\frac{1}{6}$

10.  $1\frac{9}{18}$