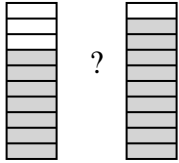


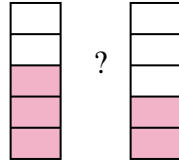


Comparez les fractions visuelles avec <, > ou =.

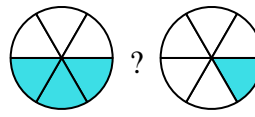
Ex)



1)



2)



Réponses

Ex. $\frac{7}{10}$ < $\frac{9}{10}$

1. _____

2. _____

3. _____

4. _____

5. _____

6. _____

7. _____

8. _____

9. _____

10. _____

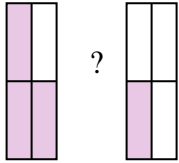
11. _____

12. _____

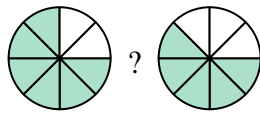
13. _____

14. _____

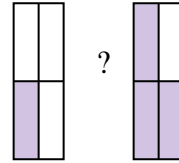
3)



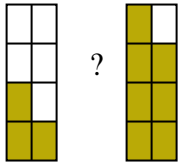
4)



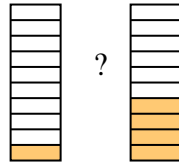
5)



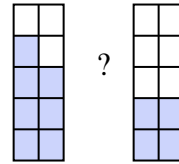
6)



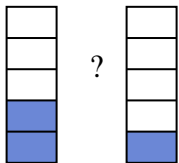
7)



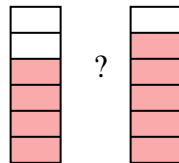
8)



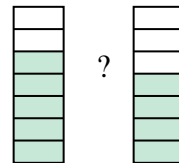
9)



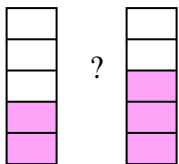
10)



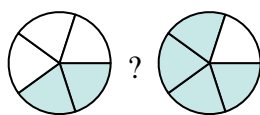
11)



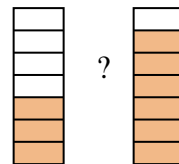
12)



13)

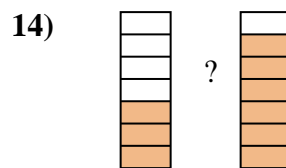
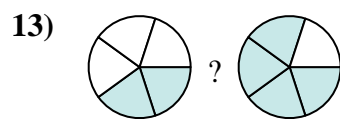
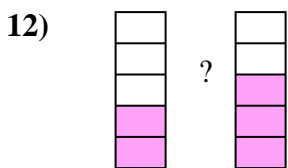
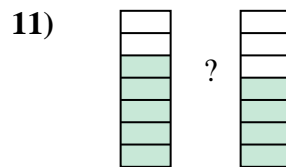
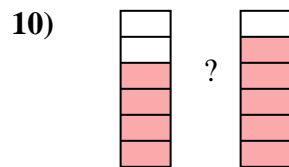
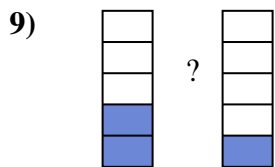
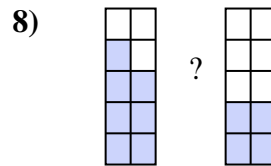
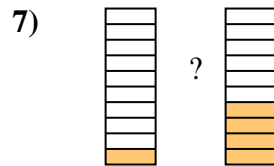
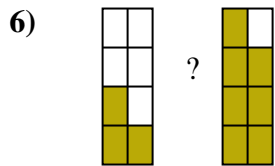
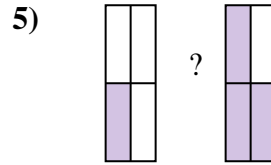
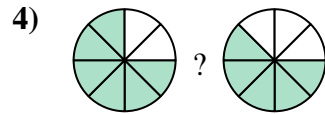
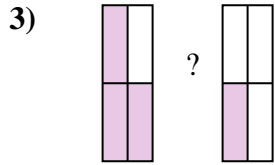
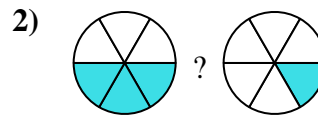
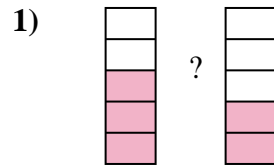
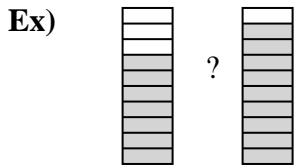


14)





Comparez les fractions visuelles avec $<$, $>$ ou $=$.



Réponses

Ex.	$\frac{7}{10}$	$<$	$\frac{9}{10}$
1.	$\frac{3}{5}$	$>$	$\frac{2}{5}$
2.	$\frac{3}{6}$	$>$	$\frac{1}{6}$
3.	$\frac{3}{4}$	$>$	$\frac{1}{4}$
4.	$\frac{6}{8}$	$>$	$\frac{5}{8}$
5.	$\frac{1}{4}$	$<$	$\frac{3}{4}$
6.	$\frac{3}{8}$	$<$	$\frac{7}{8}$
7.	$\frac{1}{10}$	$<$	$\frac{4}{10}$
8.	$\frac{7}{10}$	$>$	$\frac{4}{10}$
9.	$\frac{2}{5}$	$>$	$\frac{1}{5}$
10.	$\frac{4}{6}$	$<$	$\frac{5}{6}$
11.	$\frac{5}{7}$	$>$	$\frac{4}{7}$
12.	$\frac{2}{5}$	$<$	$\frac{3}{5}$
13.	$\frac{2}{5}$	$<$	$\frac{4}{5}$
14.	$\frac{3}{7}$	$<$	$\frac{6}{7}$