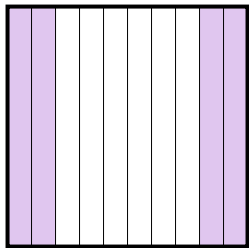






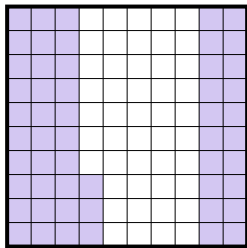
Exprimez la valeur en fraction , décimal &amp; pourcentage.

Ex)



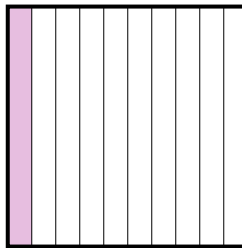
fraction  $\frac{4}{10}$   
décimal  $0,4$   
pourcentage  $40$

1)



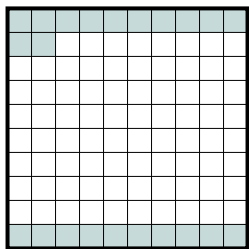
fraction  $\frac{53}{100}$   
décimal  $0,53$   
pourcentage  $53$

2)




fraction  $\frac{1}{10}$   
décimal  $0,1$   
pourcentage  $10$

3)



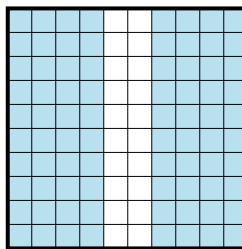
fraction  $\frac{22}{100}$   
décimal  $0,22$   
pourcentage  $22$

4)



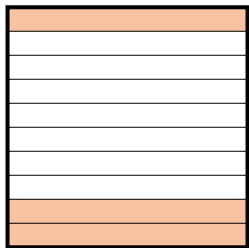
fraction  $\frac{7}{10}$   
décimal  $0,7$   
pourcentage  $70$

5)



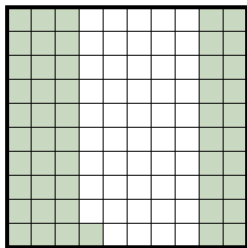
fraction  $\frac{80}{100}$   
décimal  $0,80$   
pourcentage  $80$

6)



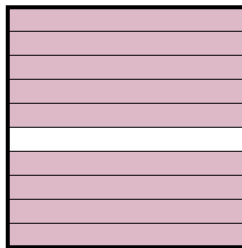
fraction  $\frac{3}{10}$   
décimal  $0,3$   
pourcentage  $30$

7)



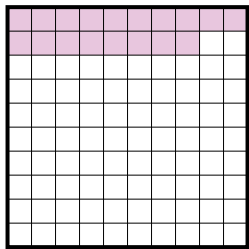
fraction  $\frac{51}{100}$   
décimal  $0,51$   
pourcentage  $51$

8)



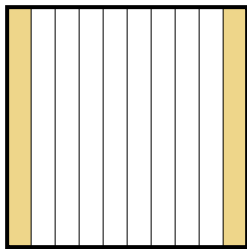
fraction  $\frac{9}{10}$   
décimal  $0,9$   
pourcentage  $90$

9)



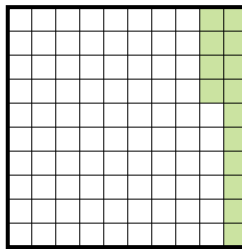
fraction  $\frac{18}{100}$   
décimal  $0,18$   
pourcentage  $18$

10)



fraction  $\frac{2}{10}$   
décimal  $0,2$   
pourcentage  $20$

11)



fraction  $\frac{14}{100}$   
décimal  $0,14$   
pourcentage  $14$

## Réponses

Ex.  $\frac{4}{10}$  **0,4** **40%**

1.  $\frac{53}{100}$  **0,53** **53%**

2.  $\frac{1}{10}$  **0,1** **10%**

3.  $\frac{22}{100}$  **0,22** **22%**

4.  $\frac{7}{10}$  **0,7** **70%**

5.  $\frac{80}{100}$  **0,80** **80%**

6.  $\frac{3}{10}$  **0,3** **30%**

7.  $\frac{51}{100}$  **0,51** **51%**

8.  $\frac{9}{10}$  **0,9** **90%**

9.  $\frac{18}{100}$  **0,18** **18%**

10.  $\frac{2}{10}$  **0,2** **20%**

11.  $\frac{14}{100}$  **0,14** **14%**