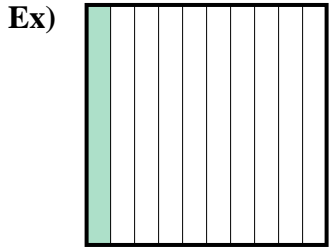
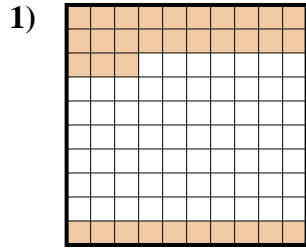




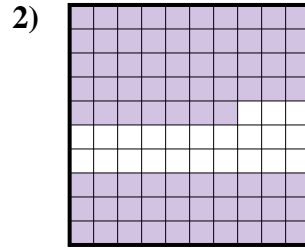
Exprimez la valeur en fraction , décimal & pourcentage.



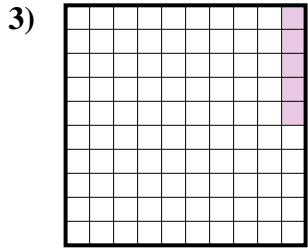
fraction $\frac{1}{10}$
 décimal $0,1$
 pourcentage 10



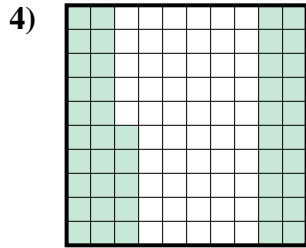
fraction $\frac{33}{100}$
 décimal $0,33$
 pourcentage 33



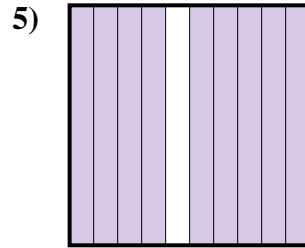
fraction $\frac{77}{100}$
 décimal $0,77$
 pourcentage 77



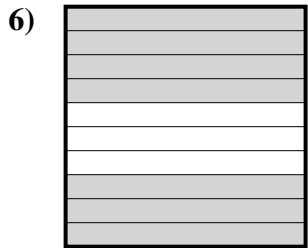
fraction $\frac{5}{100}$
 décimal $0,05$
 pourcentage 5



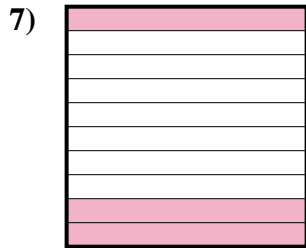
fraction $\frac{45}{100}$
 décimal $0,45$
 pourcentage 45



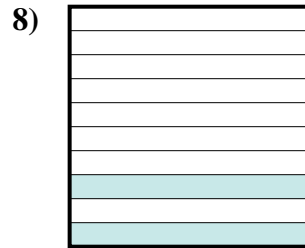
fraction $\frac{9}{10}$
 décimal $0,9$
 pourcentage 90



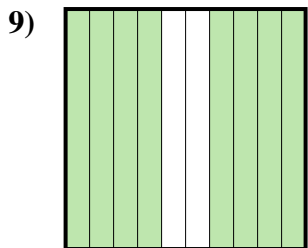
fraction $\frac{7}{10}$
 décimal $0,7$
 pourcentage 70



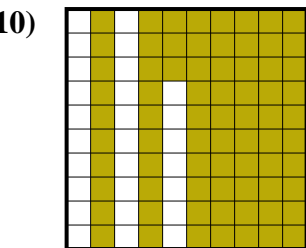
fraction $\frac{3}{10}$
 décimal $0,3$
 pourcentage 30



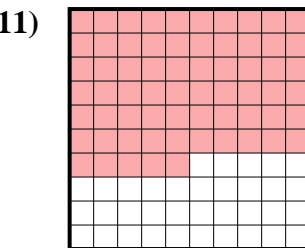
fraction $\frac{2}{10}$
 décimal $0,2$
 pourcentage 20



fraction $\frac{8}{10}$
 décimal $0,8$
 pourcentage 80



fraction $\frac{73}{100}$
 décimal $0,73$
 pourcentage 73



fraction $\frac{65}{100}$
 décimal $0,65$
 pourcentage 65

Réponses

Ex.	$\frac{1}{10}$	0,1	10%
1.	$\frac{33}{100}$	0,33	33%
2.	$\frac{77}{100}$	0,77	77%
3.	$\frac{5}{100}$	0,05	5%
4.	$\frac{45}{100}$	0,45	45%
5.	$\frac{9}{10}$	0,9	90%
6.	$\frac{7}{10}$	0,7	70%
7.	$\frac{3}{10}$	0,3	30%
8.	$\frac{2}{10}$	0,2	20%
9.	$\frac{8}{10}$	0,8	80%
10.	$\frac{73}{100}$	0,73	73%
11.	$\frac{65}{100}$	0,65	65%