




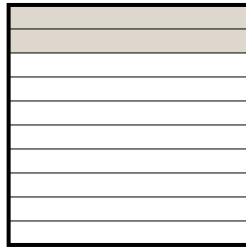
Exprimez la valeur en fraction , décimal & pourcentage.

Ex)



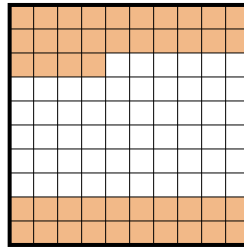
fraction $\frac{9}{10}$
décimal 0,9
pourcentage 90

1)



fraction _____
décimal _____
pourcentage _____

2)



fraction _____
décimal _____
pourcentage _____

Réponses

Ex. $\frac{9}{10}$ 0,9 90%

1. _____

2. _____

3. _____

4. _____

5. _____

6. _____

7. _____

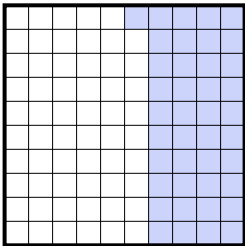
8. _____

9. _____

10. _____


11. _____

3)




fraction _____
décimal _____
pourcentage _____

4)



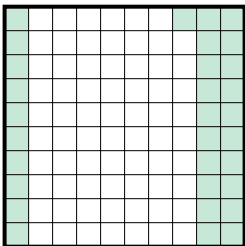
fraction _____
décimal _____
pourcentage _____

5)



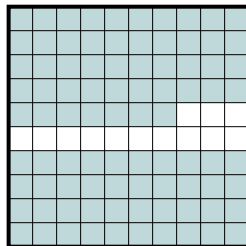
fraction _____
décimal _____
pourcentage _____

6)



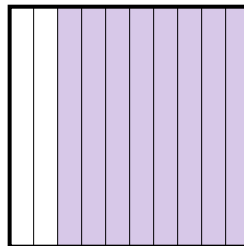
fraction _____
décimal _____
pourcentage _____

7)



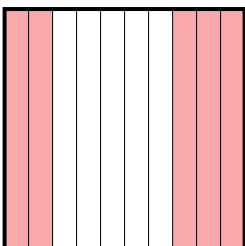
fraction _____
décimal _____
pourcentage _____

8)




fraction _____
décimal _____
pourcentage _____

9)




fraction _____
décimal _____
pourcentage _____

10)



fraction _____
décimal _____
pourcentage _____

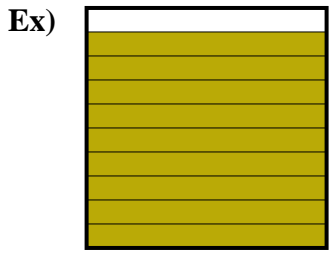
11)



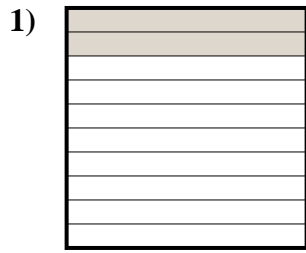
fraction _____
décimal _____
pourcentage _____



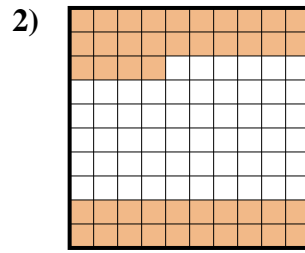
Exprimez la valeur en fraction , décimal & pourcentage.



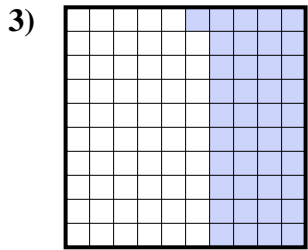
fraction $\frac{9}{10}$
 décimal $0,9$
 pourcentage 90



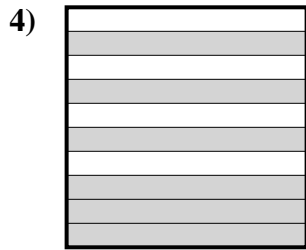
fraction $\frac{2}{10}$
 décimal $0,2$
 pourcentage 20



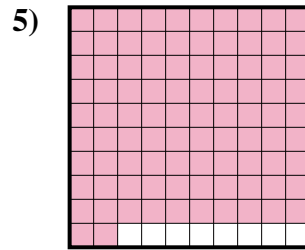
fraction $\frac{44}{100}$
 décimal $0,44$
 pourcentage 44



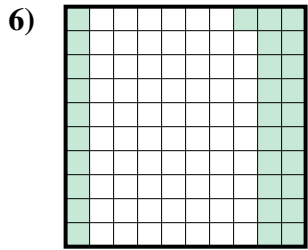
fraction $\frac{41}{100}$
 décimal $0,41$
 pourcentage 41



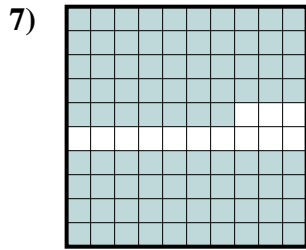
fraction $\frac{6}{10}$
 décimal $0,6$
 pourcentage 60



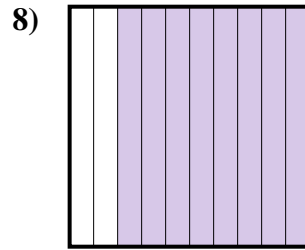
fraction $\frac{92}{100}$
 décimal $0,92$
 pourcentage 92



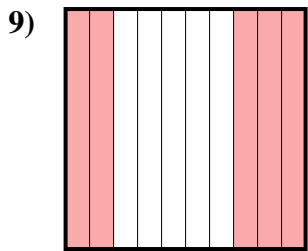
fraction $\frac{31}{100}$
 décimal $0,31$
 pourcentage 31



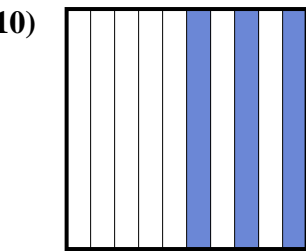
fraction $\frac{87}{100}$
 décimal $0,87$
 pourcentage 87



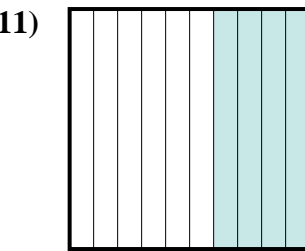
fraction $\frac{8}{10}$
 décimal $0,8$
 pourcentage 80



fraction $\frac{5}{10}$
 décimal $0,5$
 pourcentage 50



fraction $\frac{3}{10}$
 décimal $0,3$
 pourcentage 30



fraction $\frac{4}{10}$
 décimal $0,4$
 pourcentage 40

Réponses

Ex.	$\frac{9}{10}$	0,9	90%
1.	$\frac{2}{10}$	0,2	20%
2.	$\frac{44}{100}$	0,44	44%
3.	$\frac{41}{100}$	0,41	41%
4.	$\frac{6}{10}$	0,6	60%
5.	$\frac{92}{100}$	0,92	92%
6.	$\frac{31}{100}$	0,31	31%
7.	$\frac{87}{100}$	0,87	87%
8.	$\frac{8}{10}$	0,8	80%
9.	$\frac{5}{10}$	0,5	50%
10.	$\frac{3}{10}$	0,3	30%
11.	$\frac{4}{10}$	0,4	40%