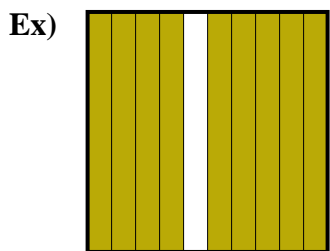
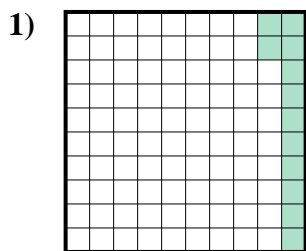




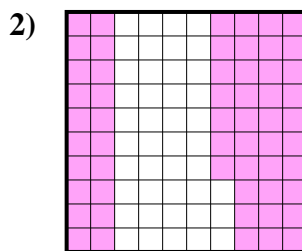
Exprimez la valeur en fraction , décimal & pourcentage.



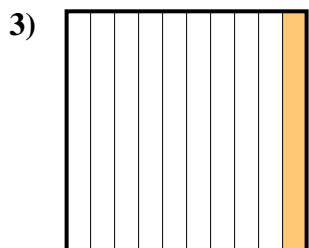
fraction $\frac{9}{10}$
 décimal $0,9$
 pourcentage 90



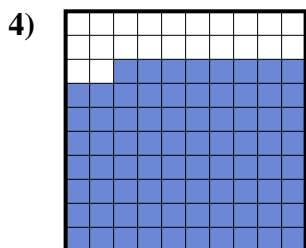
fraction $\frac{12}{100}$
 décimal $0,12$
 pourcentage 12



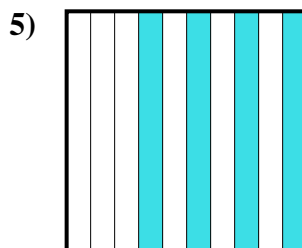
fraction $\frac{57}{100}$
 décimal $0,57$
 pourcentage 57



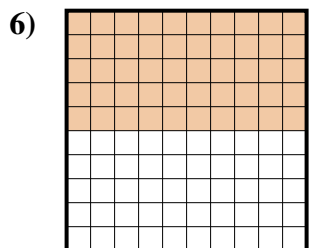
fraction $\frac{1}{10}$
 décimal $0,1$
 pourcentage 10



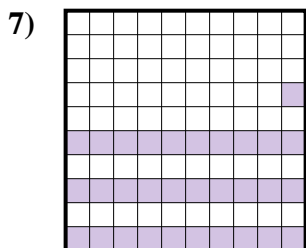
fraction $\frac{78}{100}$
 décimal $0,78$
 pourcentage 78



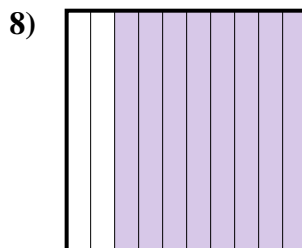
fraction $\frac{4}{10}$
 décimal $0,4$
 pourcentage 40



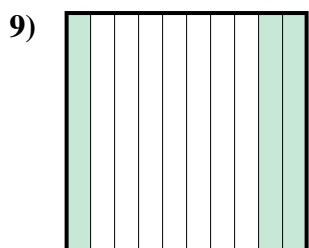
fraction $\frac{50}{100}$
 décimal $0,50$
 pourcentage 50



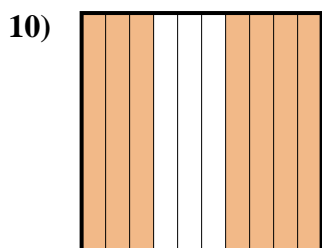
fraction $\frac{31}{100}$
 décimal $0,31$
 pourcentage 31



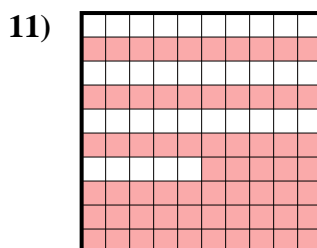
fraction $\frac{8}{10}$
 décimal $0,8$
 pourcentage 80



fraction $\frac{3}{10}$
 décimal $0,3$
 pourcentage 30



fraction $\frac{7}{10}$
 décimal $0,7$
 pourcentage 70



fraction $\frac{65}{100}$
 décimal $0,65$
 pourcentage 65

Réponses

- Ex. $\frac{9}{10}$ **0,9** **90%**
 1. $\frac{12}{100}$ **0,12** **12%**
 2. $\frac{57}{100}$ **0,57** **57%**
 3. $\frac{1}{10}$ **0,1** **10%**
 4. $\frac{78}{100}$ **0,78** **78%**
 5. $\frac{4}{10}$ **0,4** **40%**
 6. $\frac{50}{100}$ **0,50** **50%**
 7. $\frac{31}{100}$ **0,31** **31%**
 8. $\frac{8}{10}$ **0,8** **80%**
 9. $\frac{3}{10}$ **0,3** **30%**
 10. $\frac{7}{10}$ **0,7** **70%**
 11. $\frac{65}{100}$ **0,65** **65%**