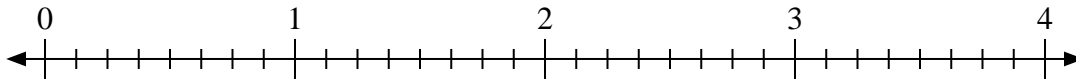




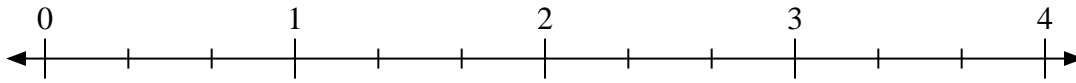
Utilisez la droite numérique pour résoudre les problèmes.

Réponses

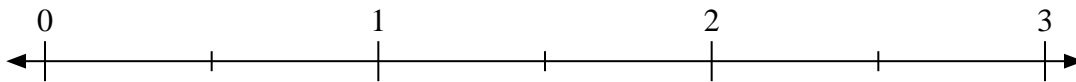
1) $2 \div \frac{1}{8}$



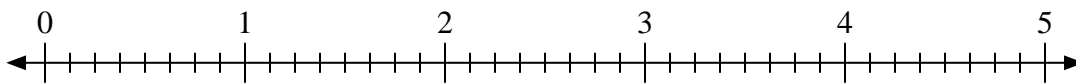
2) $2 \div \frac{2}{3}$



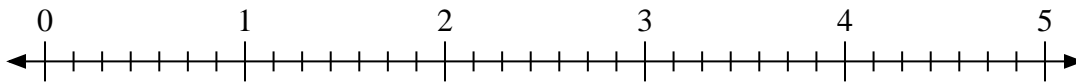
3) $2 \div \frac{1}{2}$



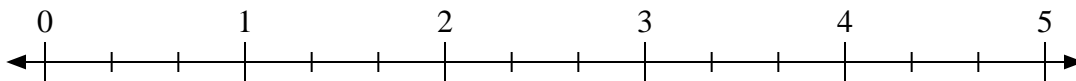
4) $3 \div \frac{5}{8}$



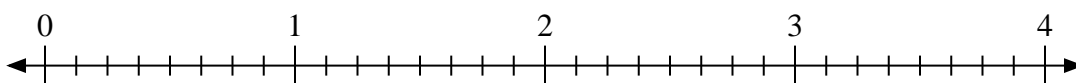
5) $2 \div \frac{6}{7}$



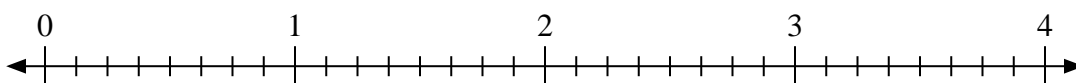
6) $4 \div \frac{1}{3}$



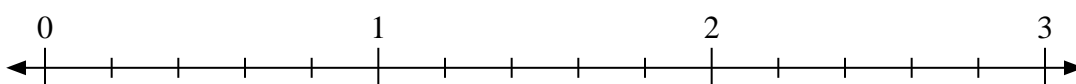
7) $2 \div \frac{3}{8}$



8) $2 \div \frac{2}{8}$



9) $2 \div \frac{3}{5}$



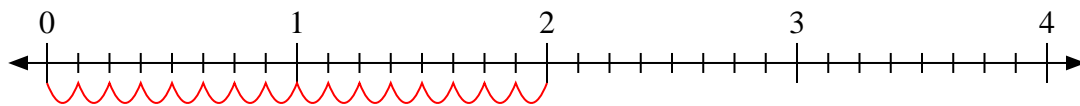
- 1. _____
- 2. _____
- 3. _____
- 4. _____
- 5. _____
- 6. _____
- 7. _____
- 8. _____
- 9. _____



Utilisez la droite numérique pour résoudre les problèmes.

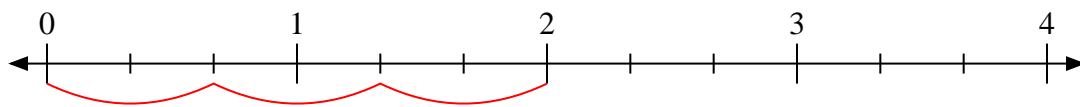
Réponses

1) $2 \div \frac{1}{8}$



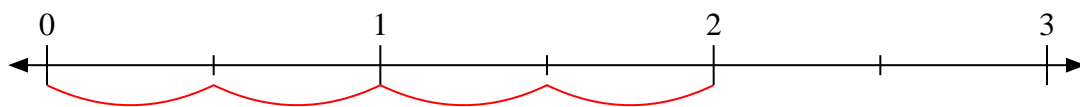
1. 16

2) $2 \div \frac{2}{3}$



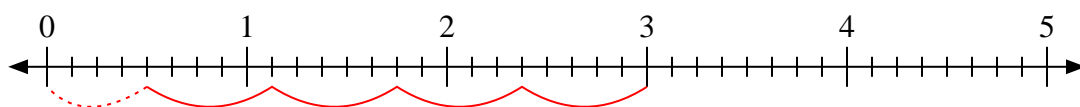
2. 3

3) $2 \div \frac{1}{2}$



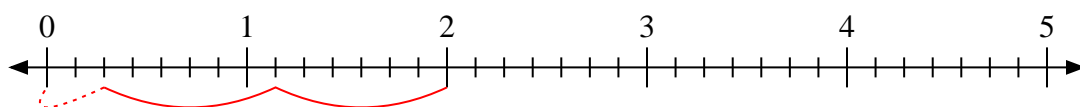
3. 4

4) $3 \div \frac{5}{8}$



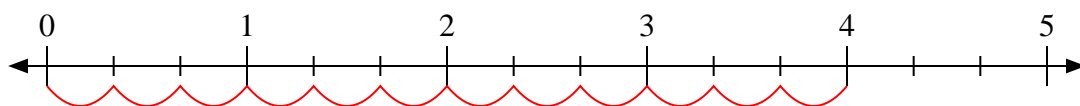
4. $4 \frac{4}{5}$

5) $2 \div \frac{6}{7}$



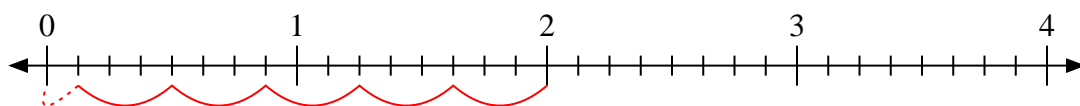
5. $2 \frac{2}{6}$

6) $4 \div \frac{1}{3}$



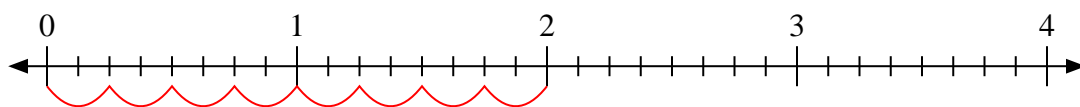
6. 12

7) $2 \div \frac{3}{8}$



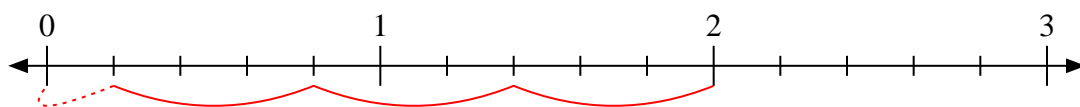
7. $5 \frac{1}{3}$

8) $2 \div \frac{2}{8}$



8. 8

9) $2 \div \frac{3}{5}$



9. $3 \frac{1}{3}$