




Utilisez la méthode visuelle pour résoudre chaque problème.

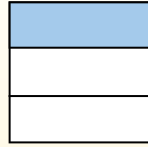
**Réponses**

$\frac{1}{3} \div 4 = ?$



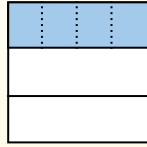
Para resolverlo, comience con un todo.

Divida el conjunto en 3 piezas y complete 1 sección.



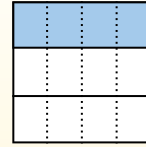
Ahora puedes ver el tamaño de  $\frac{1}{3}$

Em seguida, divide a  $\frac{1}{3}$  em 4 grupos.



Esto muestra el tamaño de cada pieza.

Para calcular el tamaño de cada pieza en comparación con el conjunto, divide el conjunto en 4 grupos.




Each piece is  $\frac{1}{12}$  of the whole.

Or:

$\frac{1}{3} \div 4 = \frac{1}{12}$


1)  $\frac{1}{8} \div 6 =$




2)  $\frac{1}{6} \div 2 =$




3)  $\frac{1}{5} \div 7 =$




4)  $\frac{1}{5} \div 4 =$




5)  $\frac{1}{3} \div 6 =$



6)  $\frac{1}{4} \div 7 =$



7)  $\frac{1}{2} \div 6 =$




8)  $\frac{1}{4} \div 3 =$




9)  $\frac{1}{7} \div 7 =$




10)  $\frac{1}{8} \div 3 =$



11)  $\frac{1}{2} \div 9 =$



12)  $\frac{1}{5} \div 3 =$




1. \_\_\_\_\_
2. \_\_\_\_\_
3. \_\_\_\_\_
4. \_\_\_\_\_
5. \_\_\_\_\_
6. \_\_\_\_\_
7. \_\_\_\_\_
8. \_\_\_\_\_
9. \_\_\_\_\_
10. \_\_\_\_\_
11. \_\_\_\_\_
12. \_\_\_\_\_



Utilisez la méthode visuelle pour résoudre chaque problème.

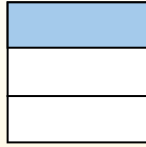
**Réponses**

$\frac{1}{3} \div 4 = ?$



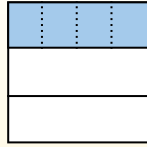
Para resolverlo, comience con un todo.

Divida el conjunto en 3 piezas y complete 1 sección.



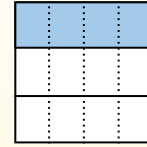
Ahora puedes ver el tamaño de  $\frac{1}{3}$

Em seguida, divide a  $\frac{1}{3}$  em 4 grupos.



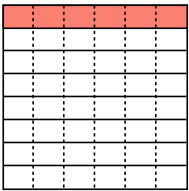
Esto muestra el tamaño de cada pieza.

Para calcular el tamaño de cada pieza en comparación con el conjunto, divide el conjunto en 4 grupos.

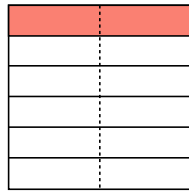


Each piece is  $\frac{1}{12}$  of the whole.  
Or:  
 $\frac{1}{3} \div 4 = \frac{1}{12}$

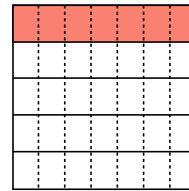
1)  $\frac{1}{8} \div 6 =$



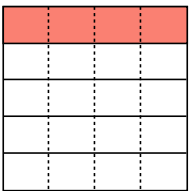
2)  $\frac{1}{6} \div 2 =$



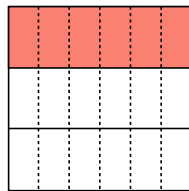
3)  $\frac{1}{5} \div 7 =$



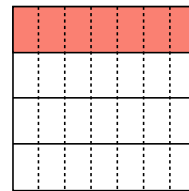
4)  $\frac{1}{5} \div 4 =$



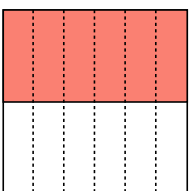
5)  $\frac{1}{3} \div 6 =$



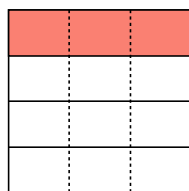
6)  $\frac{1}{4} \div 7 =$




7)  $\frac{1}{2} \div 6 =$



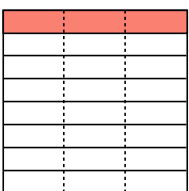
8)  $\frac{1}{4} \div 3 =$



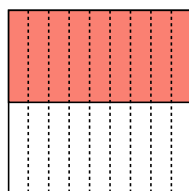
9)  $\frac{1}{7} \div 7 =$



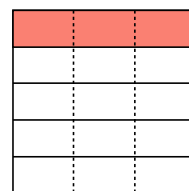
10)  $\frac{1}{8} \div 3 =$



11)  $\frac{1}{2} \div 9 =$



12)  $\frac{1}{5} \div 3 =$



1.  $\frac{1}{48}$
2.  $\frac{1}{12}$
3.  $\frac{1}{35}$
4.  $\frac{1}{20}$
5.  $\frac{1}{18}$
6.  $\frac{1}{28}$
7.  $\frac{1}{12}$
8.  $\frac{1}{12}$
9.  $\frac{1}{49}$
10.  $\frac{1}{24}$
11.  $\frac{1}{18}$
12.  $\frac{1}{15}$