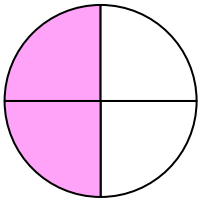


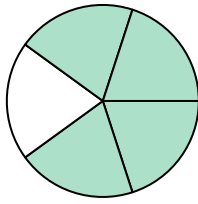


Écrivez le montant ombré sous forme de mot.

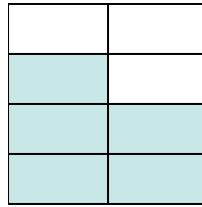
Ex)



1)



2)



Réponses

Ex. les deux quarts

1. _____

2. _____

3. _____

4. _____

5. _____

6. _____

7. _____

8. _____

9. _____

10. _____

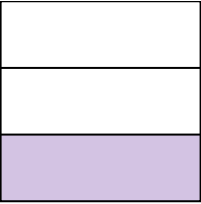
11. _____

12. _____


13. _____

14. _____

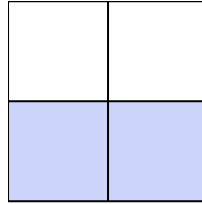
3)




4)



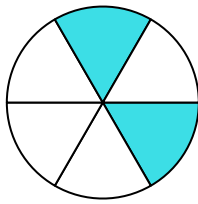
5)



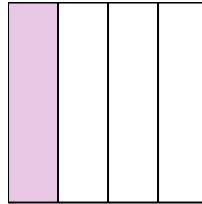
6)




7)



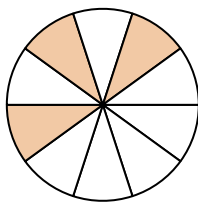
8)



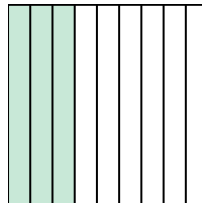
9)



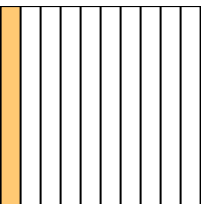
10)



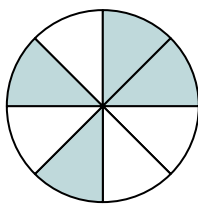
11)



12)



13)



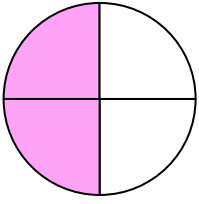
14)



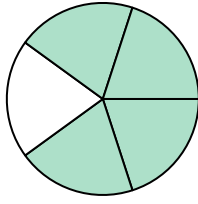


Écrivez le montant ombré sous forme de mot.

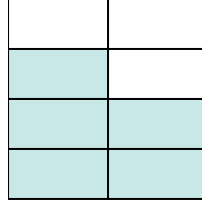
Ex)



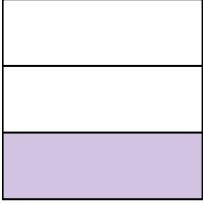
1)




2)

**Réponses**Ex. les deux quarts1. quatre cinquièmes2. cinq septièmes3. un tiers4. trois neuvièmes5. les deux tiers6. une moitié7. les deux sixièmes8. un quart9. une moitié10. les trois dixièmes11. trois neuvièmes12. un dixième13. quatre huitièmes14. cinq huitièmes

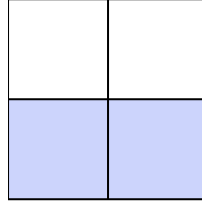
3)



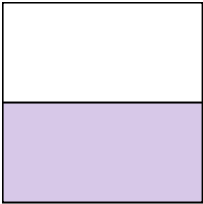
4)



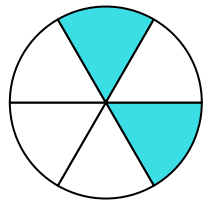
5)



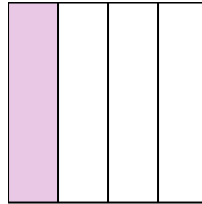
6)




7)



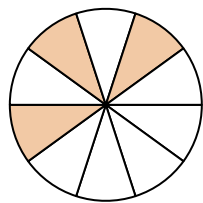
8)



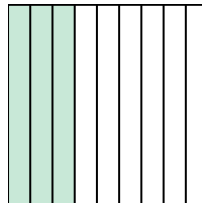
9)



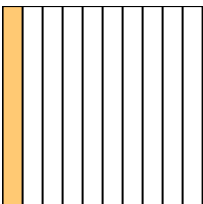
10)



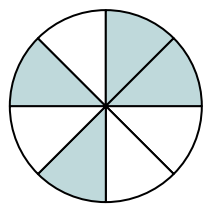
11)



12)



13)



14)

