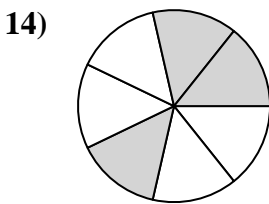
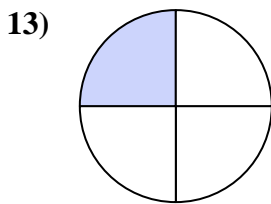
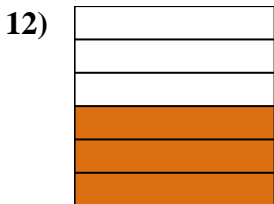
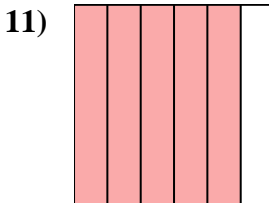

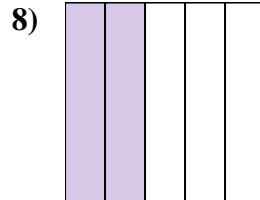

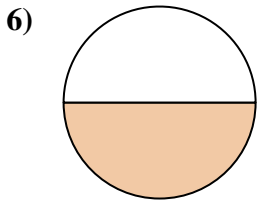
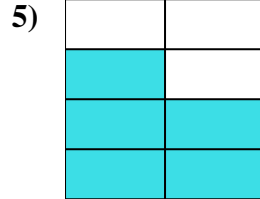
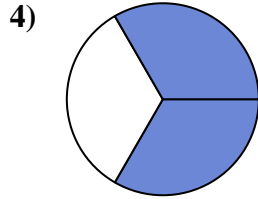
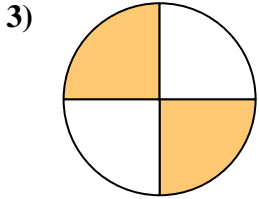
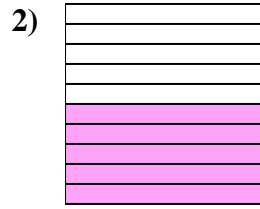
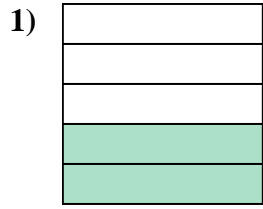
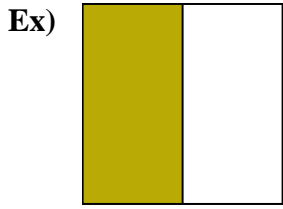




Écrivez le montant ombré sous forme de mot.



Réponses

Ex. une moitié

1. _____

2. _____

3. _____

4. _____

5. _____

6. _____

7. _____

8. _____

9. _____

10. _____

11. _____

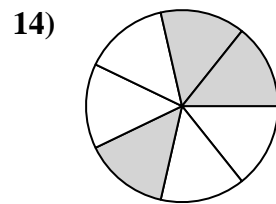
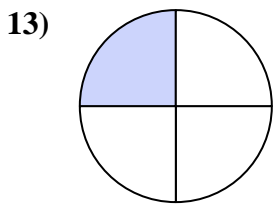
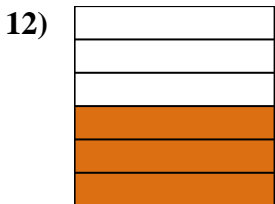
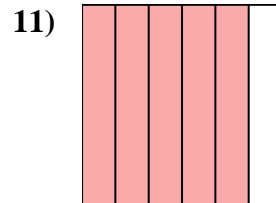

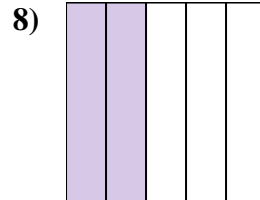

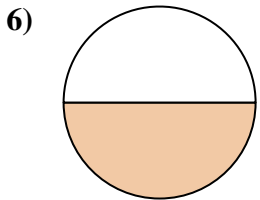
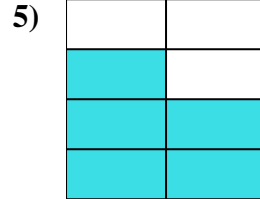
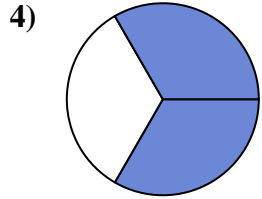
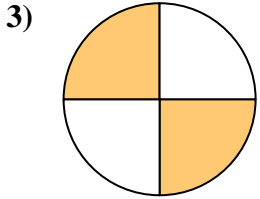
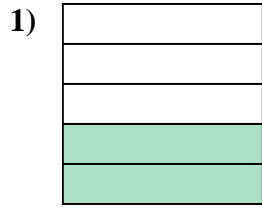
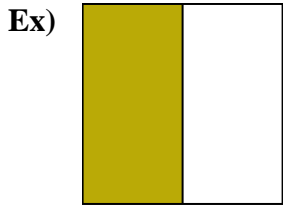
12. _____

13. _____

14. _____



Écrivez le montant ombré sous forme de mot.



Réponses

Ex. une moitié

1. deux cinquièmes

2. cinq dixièmes

3. les deux quarts

4. les deux tiers

5. cinq septièmes

6. une moitié

7. quatre huitièmes

8. deux cinquièmes

9. les deux tiers

10. un neuvième

11. cinq sixièmes

12. trois sixièmes

13. un quart

14. trois-septièmes