



Colorez la fraction visuelle pour obtenir la fraction équivalente.

Ex)  $\frac{1}{4} = \frac{3}{12}$

1)  $\frac{1}{2} =$

2)  $\frac{4}{6} =$

3)  $\frac{2}{6} =$

4)  $\frac{0}{6} =$

5)  $\frac{6}{8} =$

6)  $\frac{4}{8} =$

7)  $\frac{4}{4} =$

8)  $\frac{2}{8} =$

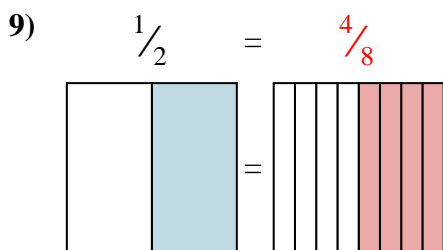
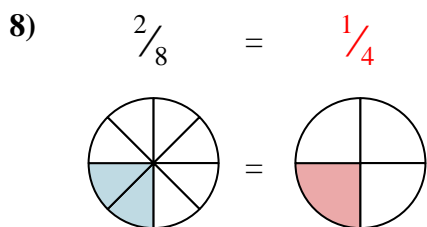
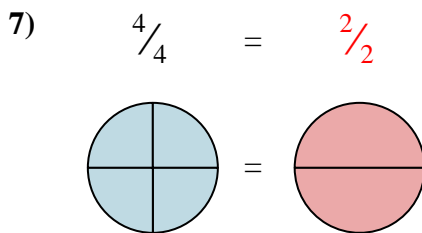
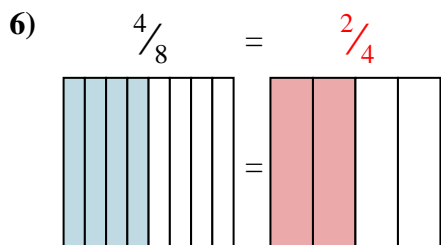
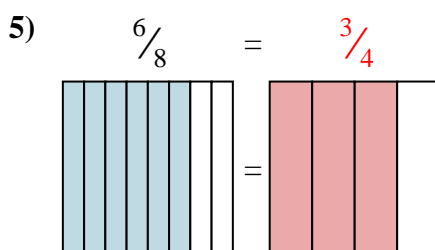
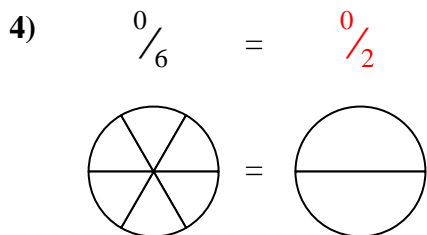
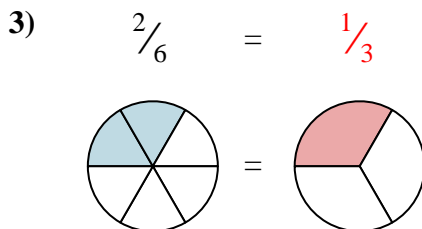
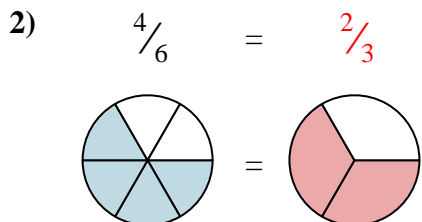
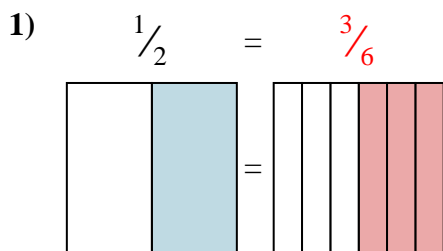
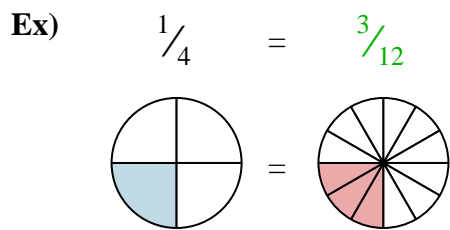
9)  $\frac{1}{2} =$

**Réponses**

- Ex.  $\frac{3}{12}$
1. \_\_\_\_\_
2. \_\_\_\_\_
3. \_\_\_\_\_
4. \_\_\_\_\_
5. \_\_\_\_\_
6. \_\_\_\_\_
7. \_\_\_\_\_
8. \_\_\_\_\_
9. \_\_\_\_\_



Colorez la fraction visuelle pour obtenir la fraction équivalente.



**Réponses**

- Ex.  $\frac{3}{12}$
1.  $\frac{3}{6}$
2.  $\frac{2}{3}$
3.  $\frac{1}{3}$
4.  $\frac{0}{2}$
5.  $\frac{3}{4}$
6.  $\frac{2}{4}$
7.  $\frac{2}{2}$
8.  $\frac{1}{4}$
9.  $\frac{4}{8}$