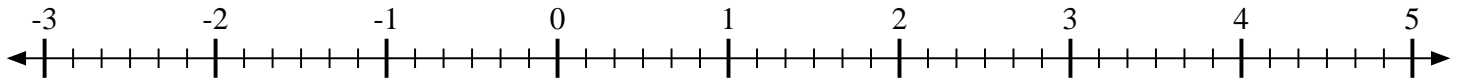


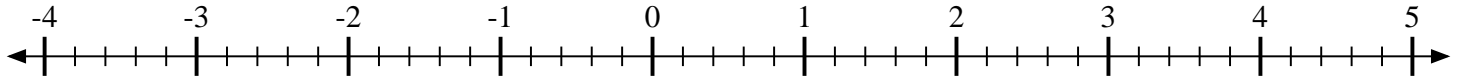


Indiquez la position de chaque fraction.

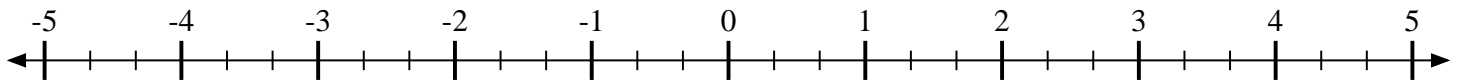
1) Indiquez la position de  $1\frac{5}{6}$



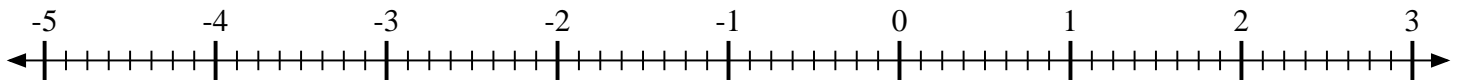
2) Indiquez la position de  $4\frac{2}{5}$



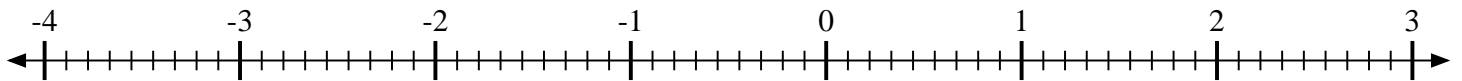
3) Indiquez la position de  $-3\frac{1}{3}$



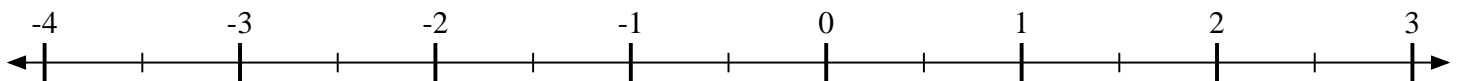
4) Indiquez la position de  $\frac{3}{8}$



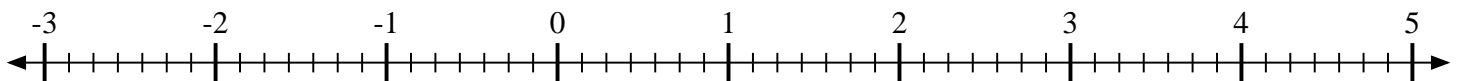
5) Indiquez la position de  $-1\frac{4}{9}$



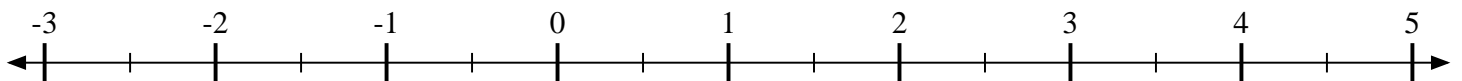
6) Indiquez la position de  $-1\frac{1}{2}$



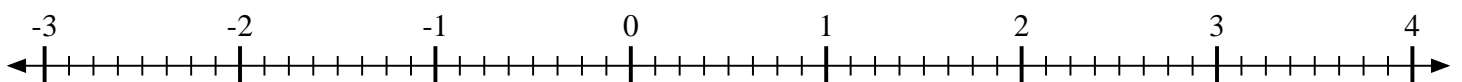
7) Indiquez la position de  $-2\frac{6}{7}$



8) Indiquez la position de  $4\frac{1}{2}$



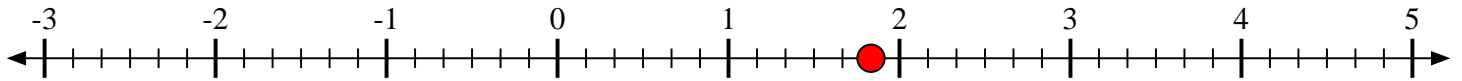
9) Indiquez la position de  $-1\frac{3}{8}$



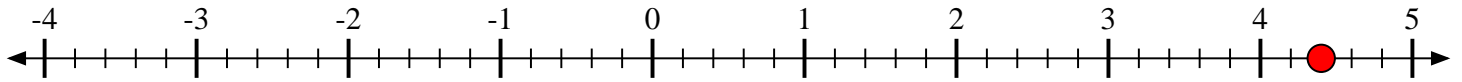


Indiquez la position de chaque fraction.

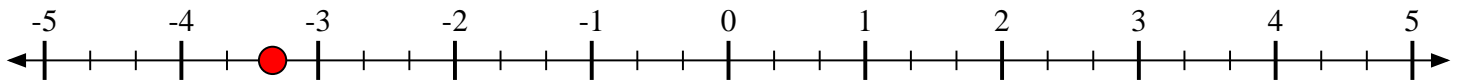
- 1) Indiquez la position de
- $1\frac{5}{6}$



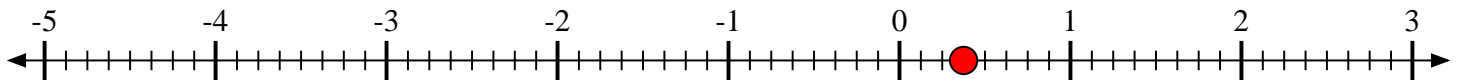
- 2) Indiquez la position de
- $4\frac{2}{5}$



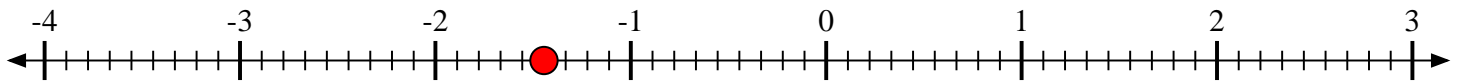
- 3) Indiquez la position de
- $-3\frac{1}{3}$



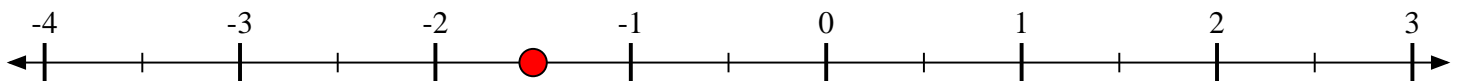
- 4) Indiquez la position de
- $\frac{3}{8}$



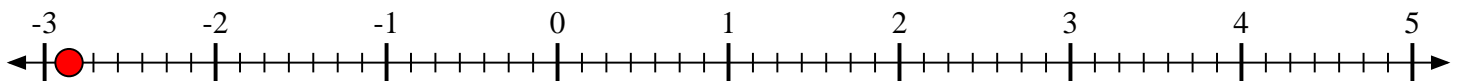
- 5) Indiquez la position de
- $-1\frac{4}{9}$



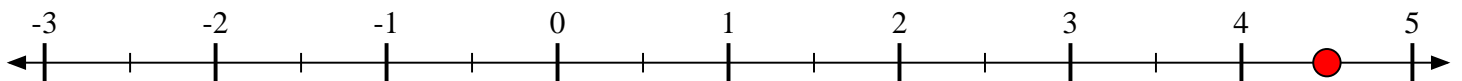
- 6) Indiquez la position de
- $-1\frac{1}{2}$



- 7) Indiquez la position de
- $-2\frac{6}{7}$



- 8) Indiquez la position de
- $4\frac{1}{2}$



- 9) Indiquez la position de
- $-1\frac{3}{8}$

