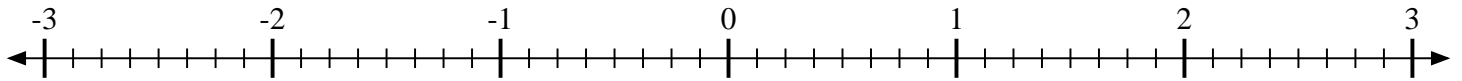





Indiquez la position de chaque fraction.

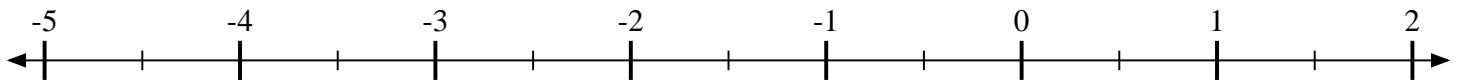
1) Indiquez la position de $-2\frac{6}{8}$



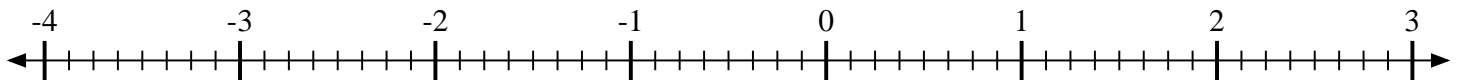
2) Indiquez la position de $-1\frac{2}{3}$



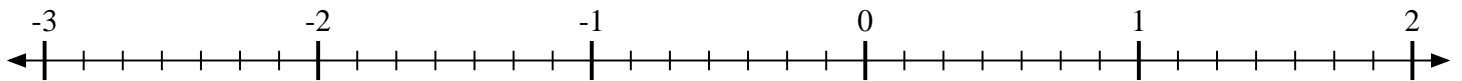
3) Indiquez la position de $1\frac{1}{2}$



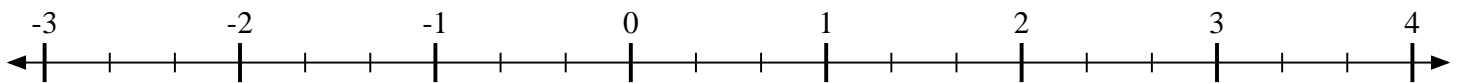
4) Indiquez la position de $-3\frac{6}{8}$



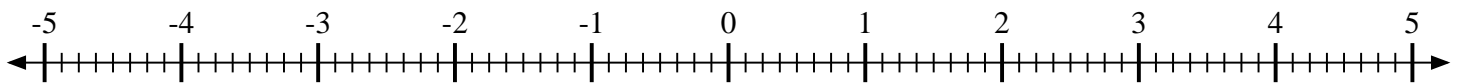
5) Indiquez la position de $1\frac{5}{7}$



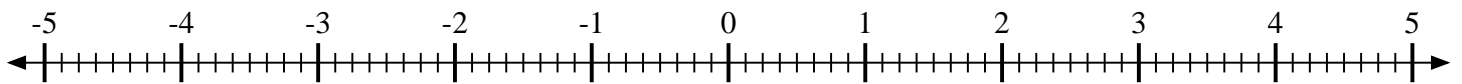
6) Indiquez la position de $2\frac{2}{3}$



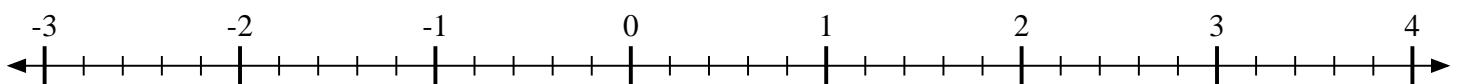
7) Indiquez la position de $2\frac{3}{8}$



8) Indiquez la position de $-2\frac{5}{8}$



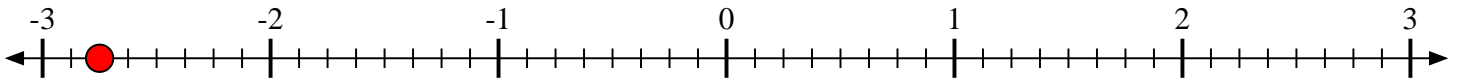
9) Indiquez la position de $-2\frac{1}{5}$



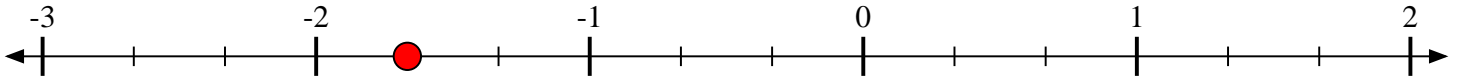


Indiquez la position de chaque fraction.

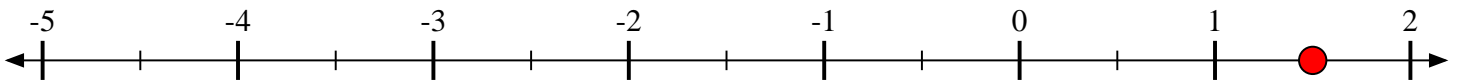
- 1) Indiquez la position de $-2\frac{6}{8}$



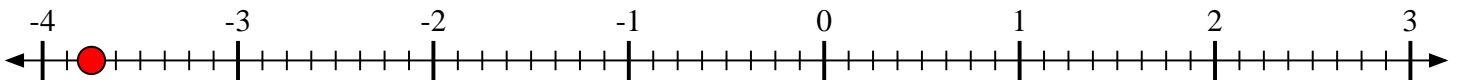
- 2) Indiquez la position de $-1\frac{2}{3}$



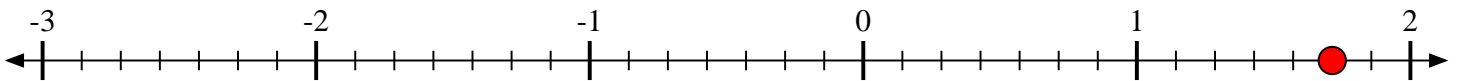
- 3) Indiquez la position de $1\frac{1}{2}$



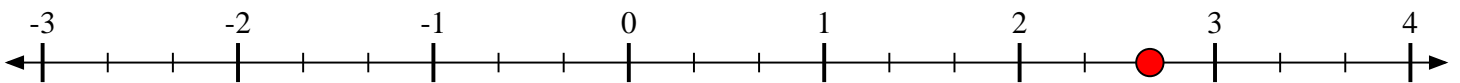
- 4) Indiquez la position de $-3\frac{6}{8}$



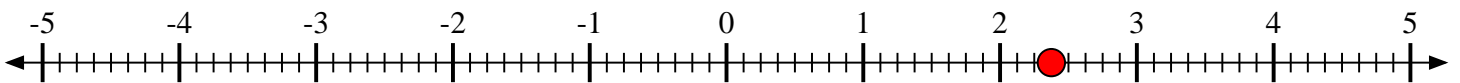
- 5) Indiquez la position de $1\frac{5}{7}$



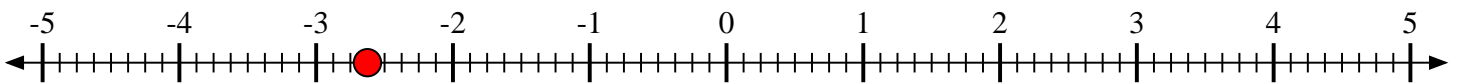
- 6) Indiquez la position de $2\frac{2}{3}$



- 7) Indiquez la position de $2\frac{3}{8}$



- 8) Indiquez la position de $-2\frac{5}{8}$



- 9) Indiquez la position de $-2\frac{1}{5}$

