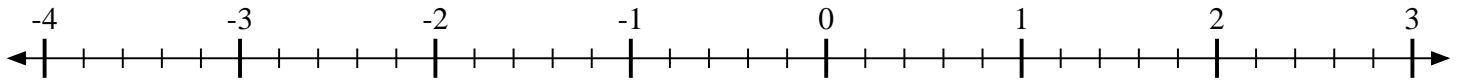


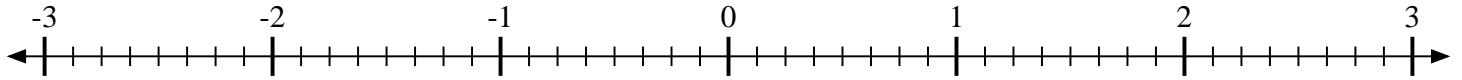


Indiquez la position de chaque fraction.

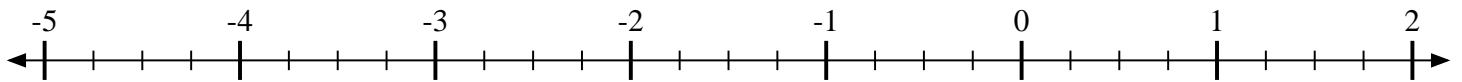
1) Indiquez la position de $-3\frac{4}{5}$



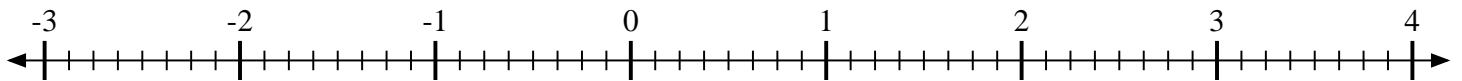
2) Indiquez la position de $2\frac{6}{8}$



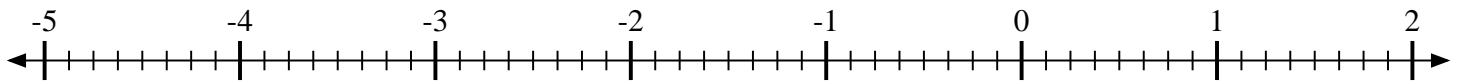
3) Indiquez la position de $-4\frac{2}{4}$



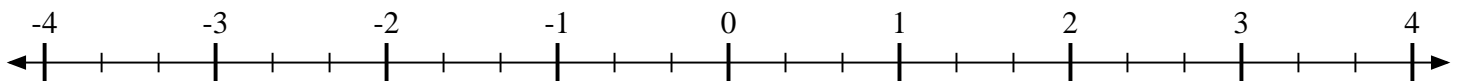
4) Indiquez la position de $1\frac{5}{8}$



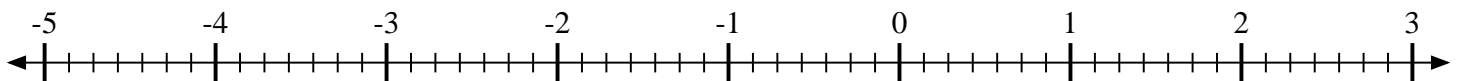
5) Indiquez la position de $-2\frac{6}{8}$



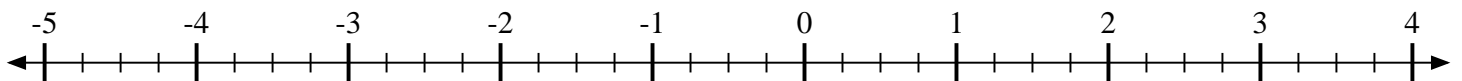
6) Indiquez la position de $-1\frac{1}{3}$



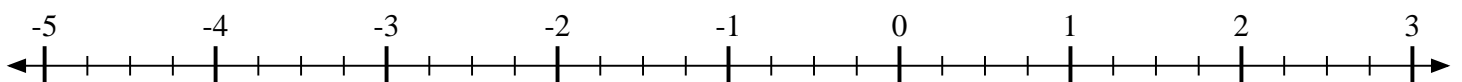
7) Indiquez la position de $-3\frac{2}{7}$



8) Indiquez la position de $3\frac{1}{4}$



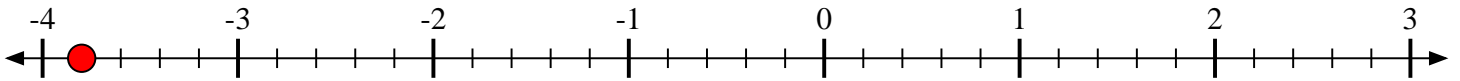
9) Indiquez la position de $-3\frac{3}{4}$



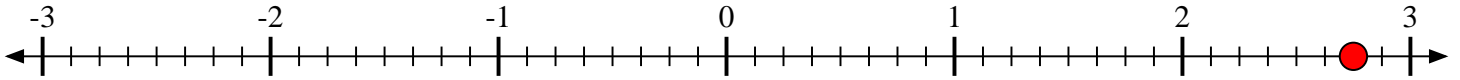


Indiquez la position de chaque fraction.

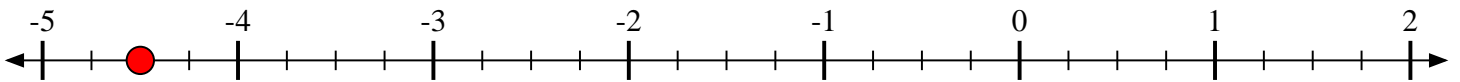
- 1) Indiquez la position de
- $-3\frac{4}{5}$



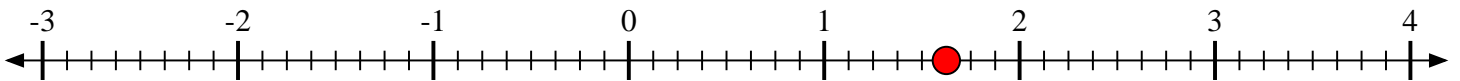
- 2) Indiquez la position de
- $2\frac{6}{8}$



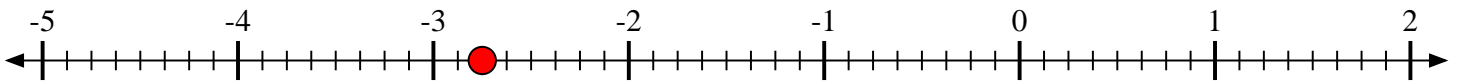
- 3) Indiquez la position de
- $-4\frac{2}{4}$



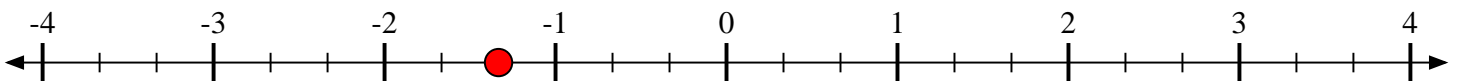
- 4) Indiquez la position de
- $1\frac{5}{8}$



- 5) Indiquez la position de
- $-2\frac{6}{8}$



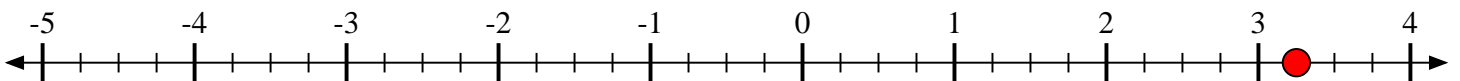
- 6) Indiquez la position de
- $-1\frac{1}{3}$



- 7) Indiquez la position de
- $-3\frac{2}{7}$



- 8) Indiquez la position de
- $3\frac{1}{4}$



- 9) Indiquez la position de
- $-3\frac{3}{4}$

