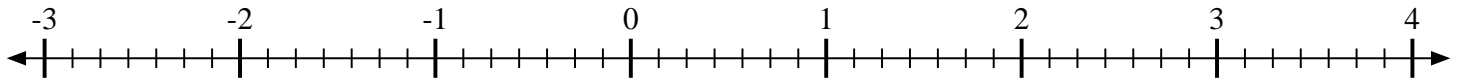


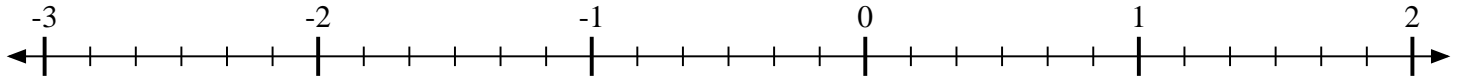


Indiquez la position de chaque fraction.

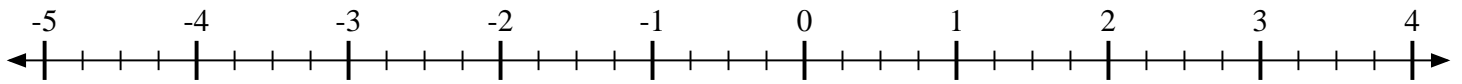
1) Indiquez la position de $\frac{5}{7}$



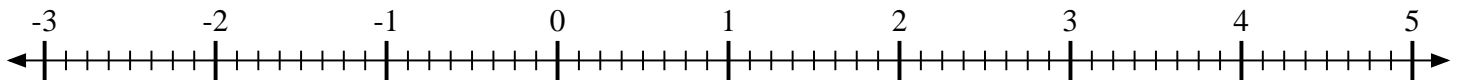
2) Indiquez la position de $\frac{5}{6}$



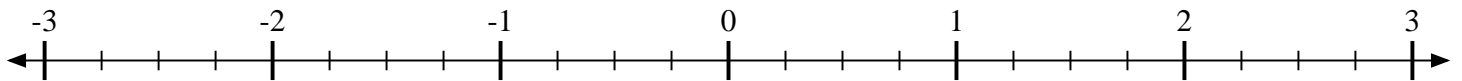
3) Indiquez la position de $-1\frac{2}{4}$



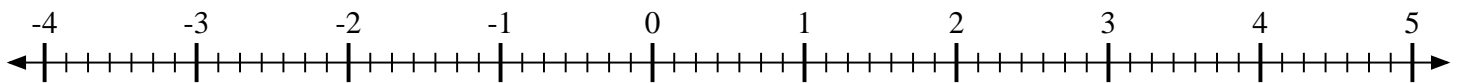
4) Indiquez la position de $-1\frac{1}{8}$



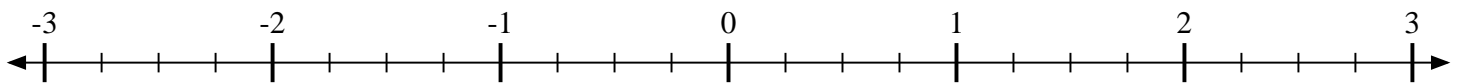
5) Indiquez la position de $1\frac{1}{4}$



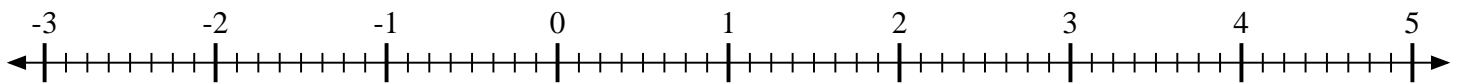
6) Indiquez la position de $-2\frac{2}{7}$



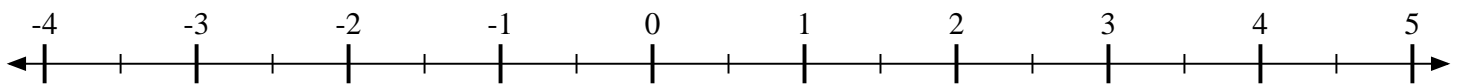
7) Indiquez la position de $1\frac{1}{4}$



8) Indiquez la position de $2\frac{3}{8}$



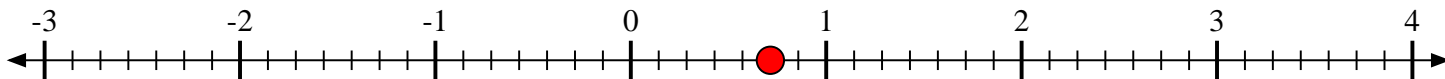
9) Indiquez la position de $\frac{1}{2}$



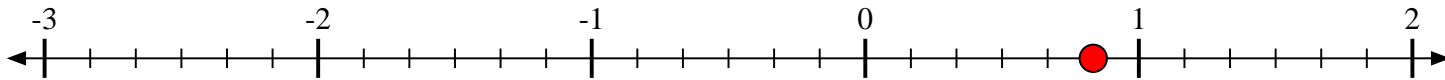


Indiquez la position de chaque fraction.

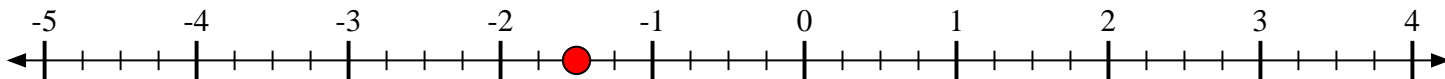
- 1) Indiquez la position de $\frac{5}{7}$



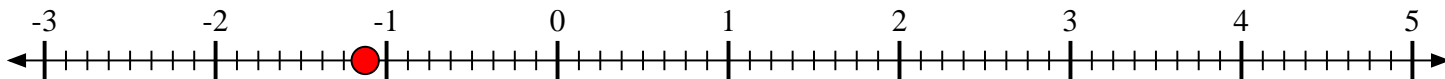
- 2) Indiquez la position de $\frac{5}{6}$



- 3) Indiquez la position de $-1\frac{2}{4}$



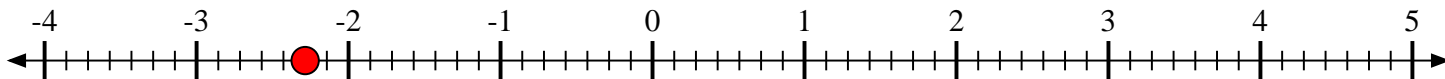
- 4) Indiquez la position de $-1\frac{1}{8}$



- 5) Indiquez la position de $1\frac{1}{4}$



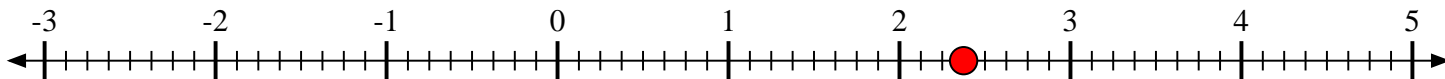
- 6) Indiquez la position de $-2\frac{2}{7}$



- 7) Indiquez la position de $1\frac{1}{4}$



- 8) Indiquez la position de $2\frac{3}{8}$



- 9) Indiquez la position de $\frac{1}{2}$

