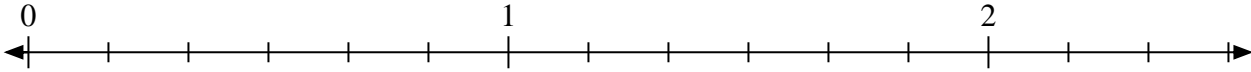
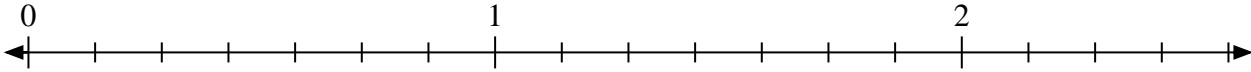


**Résoudre chaque problème.**

- 1) Marquer l'emplacement du
- $\frac{11}{6}$



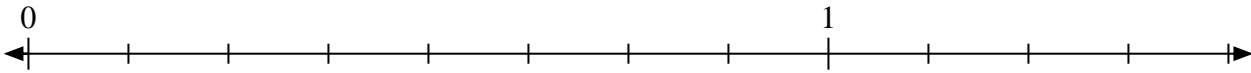
- 2) Marquer l'emplacement du
- $\frac{14}{7}$



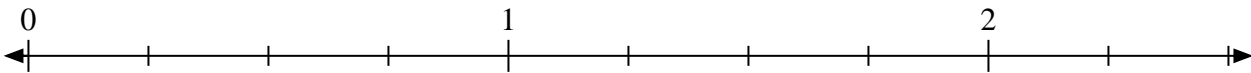
- 3) Marquer l'emplacement du
- $\frac{6}{4}$



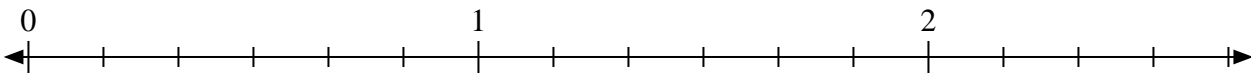
- 4) Marquer l'emplacement du
- $\frac{11}{8}$



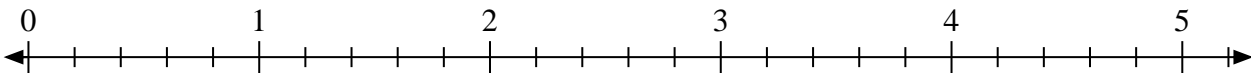
- 5) Marquer l'emplacement du
- $\frac{8}{4}$



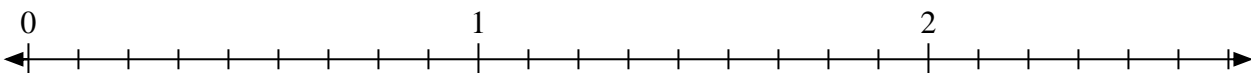
- 6) Marquer l'emplacement du
- $\frac{15}{6}$



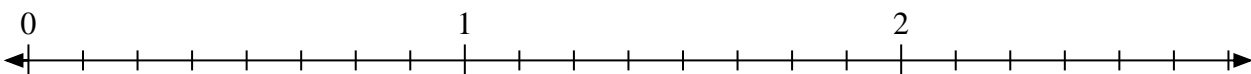
- 7) Marquer l'emplacement du
- $\frac{12}{5}$



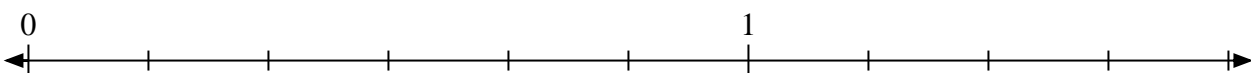
- 8) Marquer l'emplacement du
- $\frac{11}{9}$



- 9) Marquer l'emplacement du
- $\frac{14}{8}$



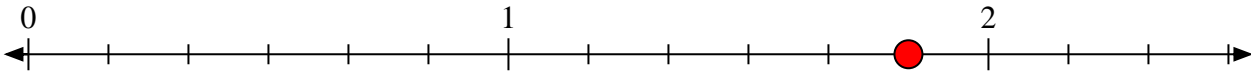
- 10) Marquer l'emplacement du
- $\frac{9}{6}$



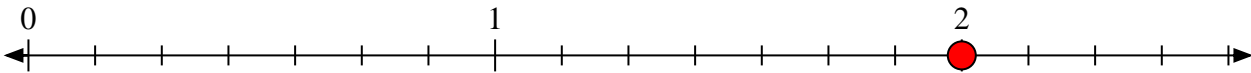


Résoudre chaque problème.

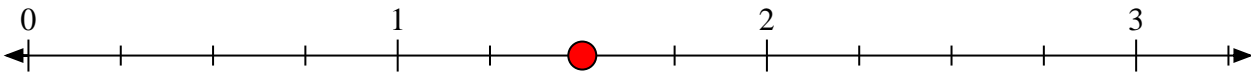
- 1) Marquer l'emplacement du
- $\frac{11}{6}$



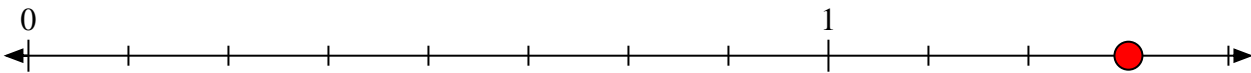
- 2) Marquer l'emplacement du
- $\frac{14}{7}$



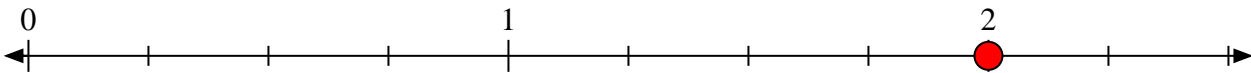
- 3) Marquer l'emplacement du
- $\frac{6}{4}$



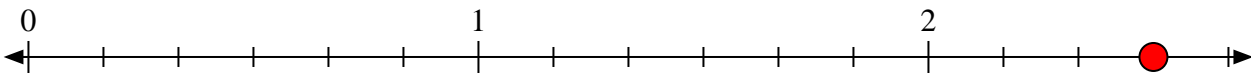
- 4) Marquer l'emplacement du
- $\frac{11}{8}$



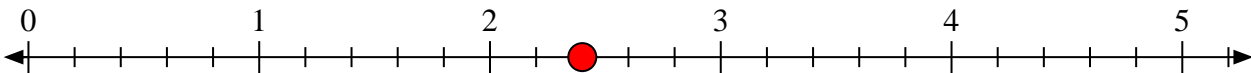
- 5) Marquer l'emplacement du
- $\frac{8}{4}$



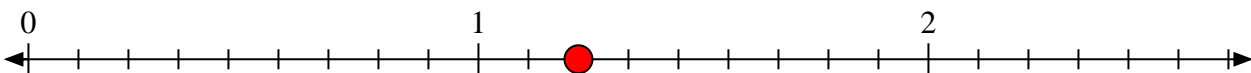
- 6) Marquer l'emplacement du
- $\frac{15}{6}$



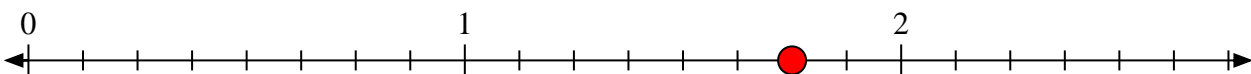
- 7) Marquer l'emplacement du
- $\frac{12}{5}$



- 8) Marquer l'emplacement du
- $\frac{11}{9}$



- 9) Marquer l'emplacement du
- $\frac{14}{8}$



- 10) Marquer l'emplacement du
- $\frac{9}{6}$

