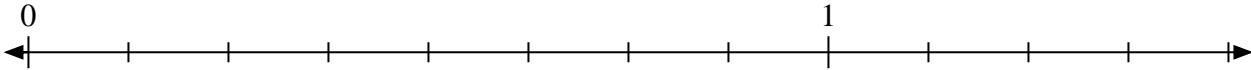
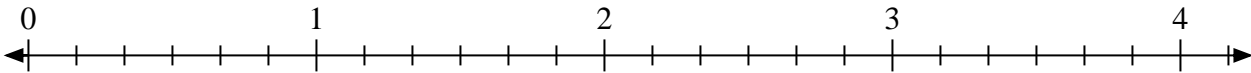


**Résoudre chaque problème.**

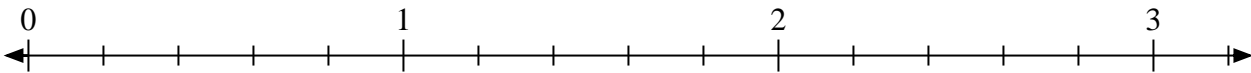
- 1) Marquer l'emplacement du
- $\frac{9}{8}$



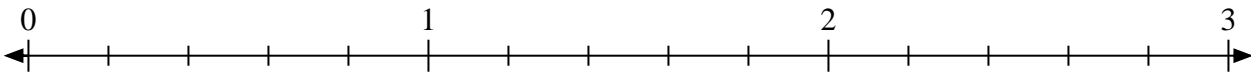
- 2) Marquer l'emplacement du
- $\frac{11}{6}$



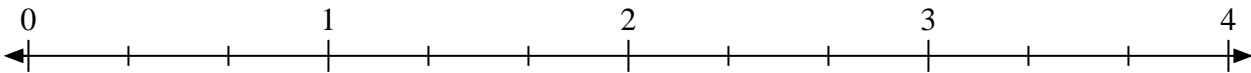
- 3) Marquer l'emplacement du
- $\frac{12}{5}$




- 4) Marquer l'emplacement du
- $\frac{11}{5}$



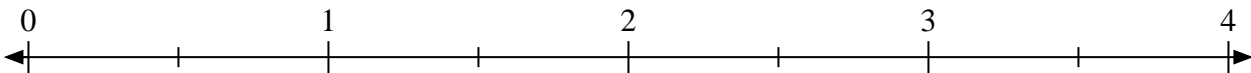
- 5) Marquer l'emplacement du
- $\frac{4}{3}$



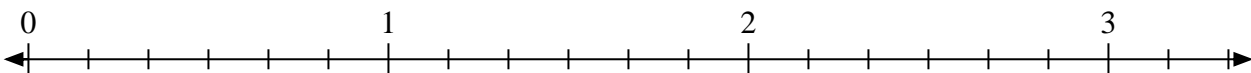
- 6) Marquer l'emplacement du
- $\frac{8}{4}$



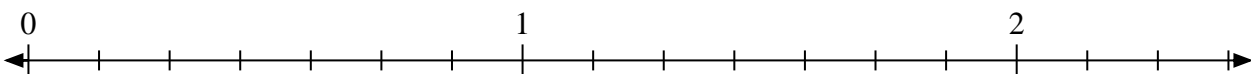
- 7) Marquer l'emplacement du
- $\frac{5}{2}$



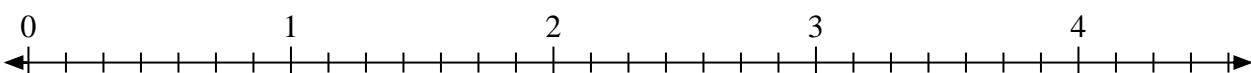
- 8) Marquer l'emplacement du
- $\frac{17}{6}$



- 9) Marquer l'emplacement du
- $\frac{11}{7}$



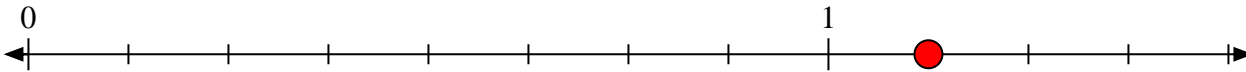
- 10) Marquer l'emplacement du
- $\frac{16}{7}$



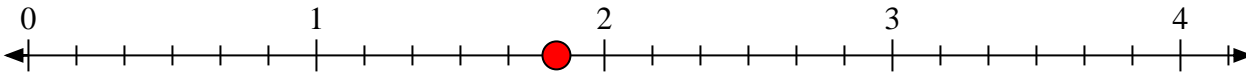


Résoudre chaque problème.

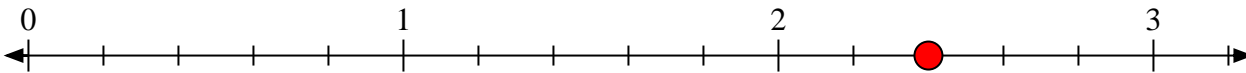
- 1) Marquer l'emplacement du
- $\frac{9}{8}$



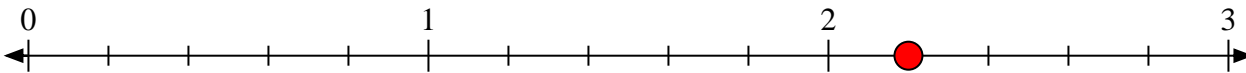
- 2) Marquer l'emplacement du
- $\frac{11}{6}$



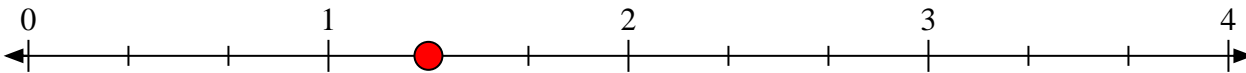
- 3) Marquer l'emplacement du
- $\frac{12}{5}$




- 4) Marquer l'emplacement du
- $\frac{11}{5}$



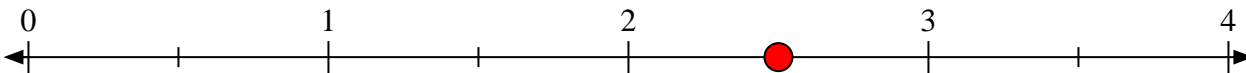
- 5) Marquer l'emplacement du
- $\frac{4}{3}$



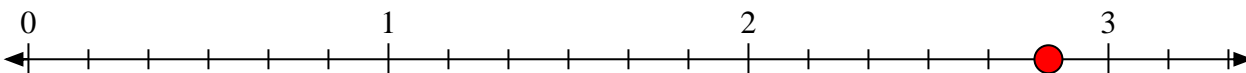
- 6) Marquer l'emplacement du
- $\frac{8}{4}$



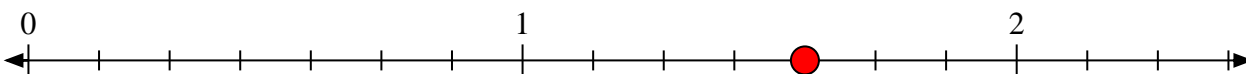
- 7) Marquer l'emplacement du
- $\frac{5}{2}$



- 8) Marquer l'emplacement du
- $\frac{17}{6}$



- 9) Marquer l'emplacement du
- $\frac{11}{7}$



- 10) Marquer l'emplacement du
- $\frac{16}{7}$

