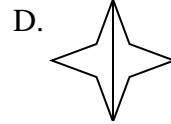
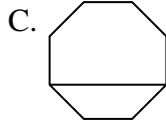
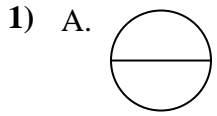




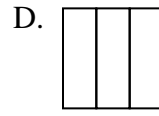
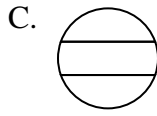
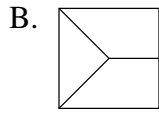
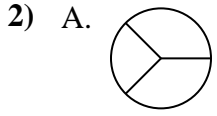
Quelle(s) figure(s) divisée(s) représente(nt) la même surface, si pas de réponse, écrire: 'aucune'

Réponses



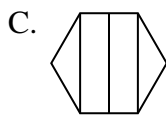
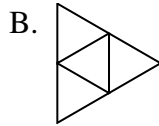
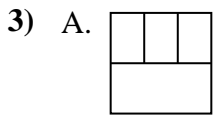
1. _____

2. _____



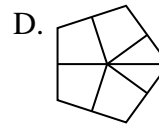
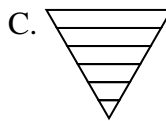
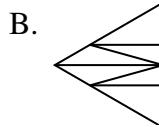
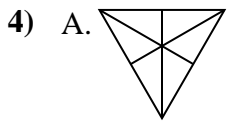
3. _____

4. _____



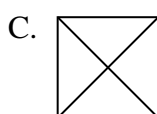
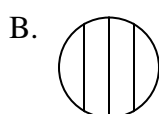
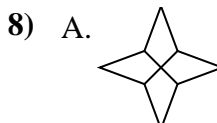
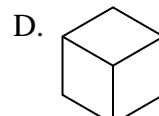
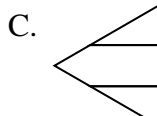
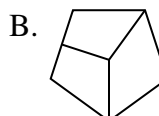
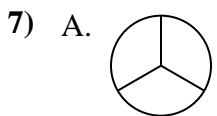
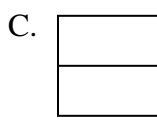
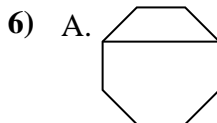
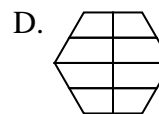
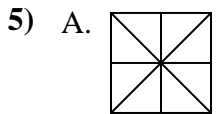
5. _____

6. _____



7. _____

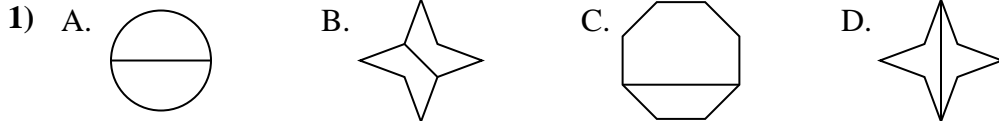
8. _____





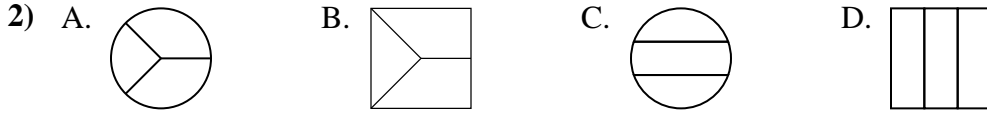
Quelle(s) figure(s) divisée(s) représente(nt) la même surface, si pas de réponse, écrire: 'aucune'

Réponses



1. **A,B,D**

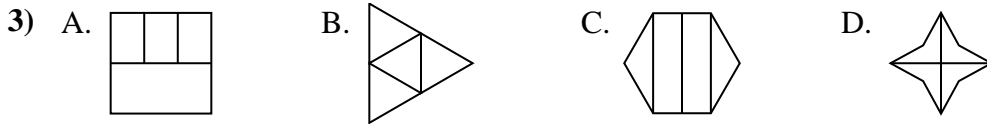
2. **D**



3. **B,D**

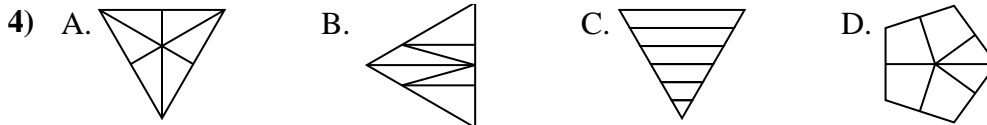
4. **A**

5. **A**



6. **B,C,D**

7. **A,D**



8. **A,C**

