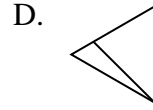
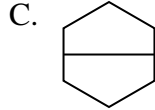
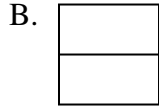




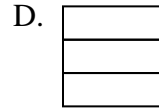
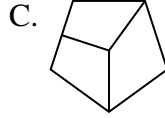
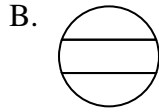
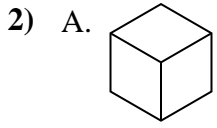
Quelle(s) figure(s) divisée(s) représente(nt) la même surface, si pas de réponse, écrire: 'aucune'

Réponses



1. _____

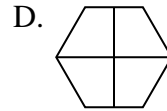
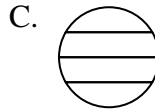
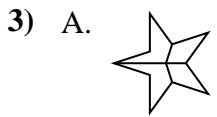
2. _____



3. _____

4. _____

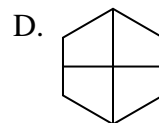
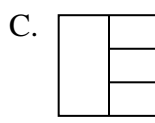
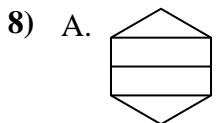
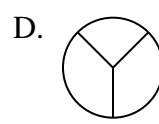
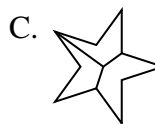
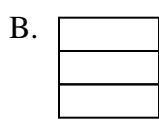
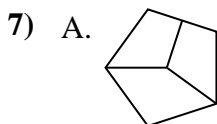
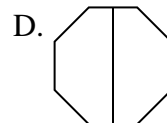
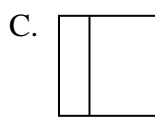
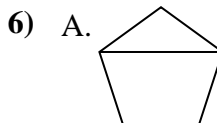
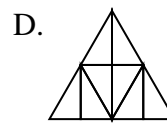
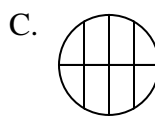
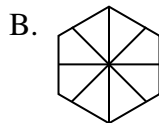
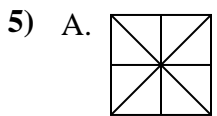
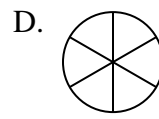
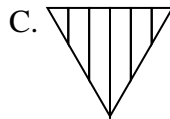
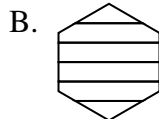
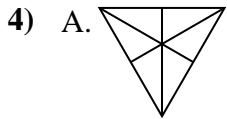
5. _____



6. _____

7. _____

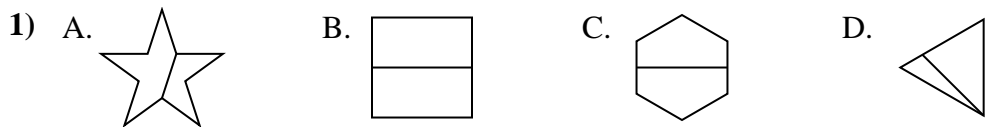
8. _____



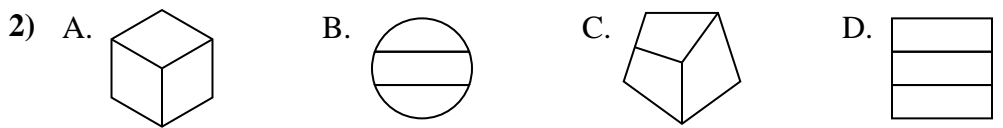


Quelle(s) figure(s) divisée(s) représente(nt) la même surface, si pas de réponse, écrire: 'aucune'

Réponses



1. **B,C**

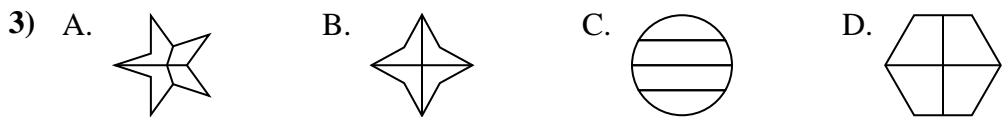


2. **A,D**

3. **B,D**

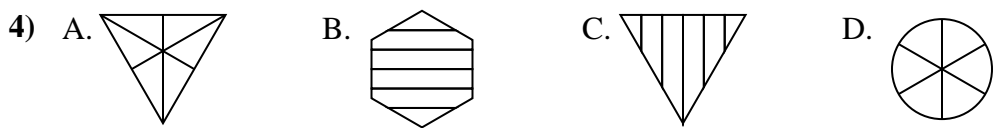
4. **A,D**

5. **A,D**



6. **B,D**

7. **B**



8. **D**

