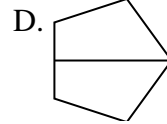

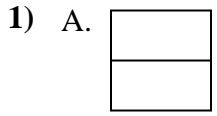




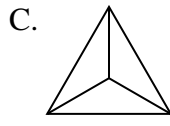
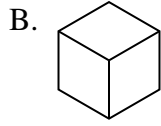
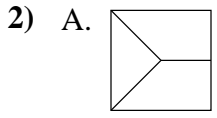
Quelle(s) figure(s) divisée(s) représente(nt) la même surface, si pas de réponse, écrire: 'aucune'

Réponses



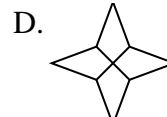
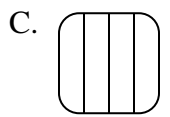
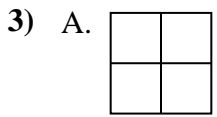
1. _____

2. _____



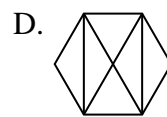
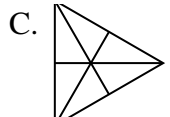
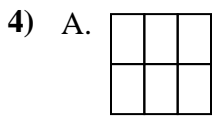
3. _____

4. _____



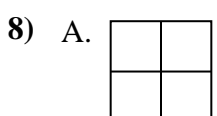
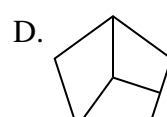
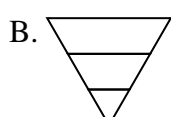
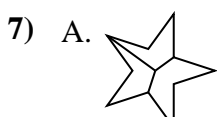
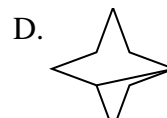
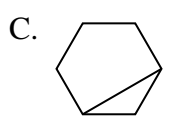
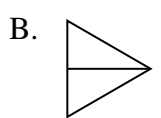
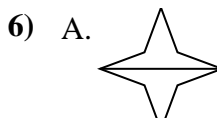
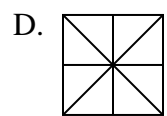
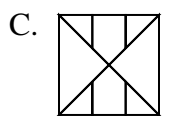
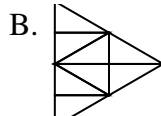
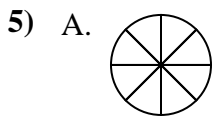
5. _____

6. _____



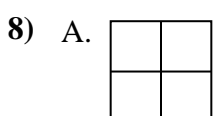
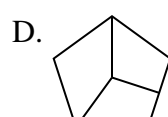
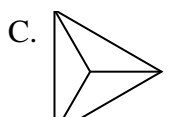
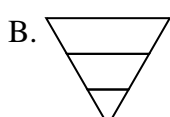
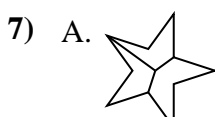
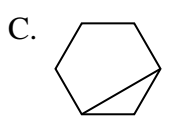
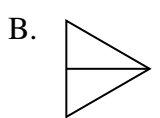
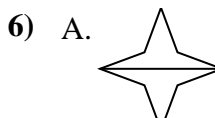
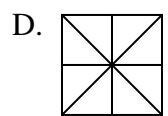
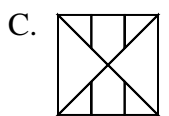
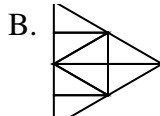
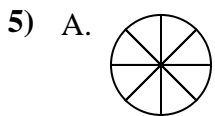
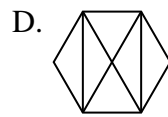
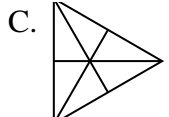
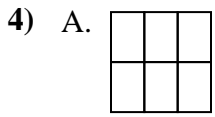
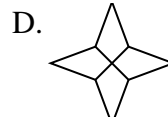
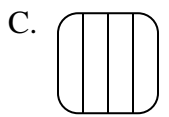
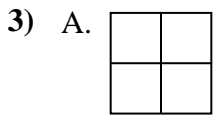
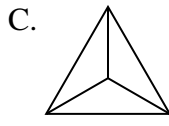
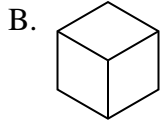
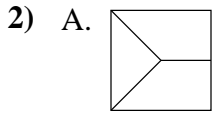
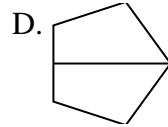
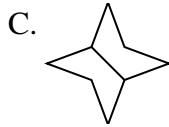

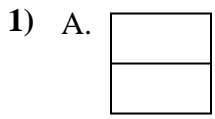
7. _____

8. _____





Quelle(s) figure(s) divisée(s) représente(nt) la même surface, si pas de réponse, écrire: 'aucune'



Réponses

1. **A,B,C,D**

2. **B,C**

3. **A,B,D**

4. **A,C**

5. **A,B,D**

6. **A,B**

7. **C**

8. **A,B**