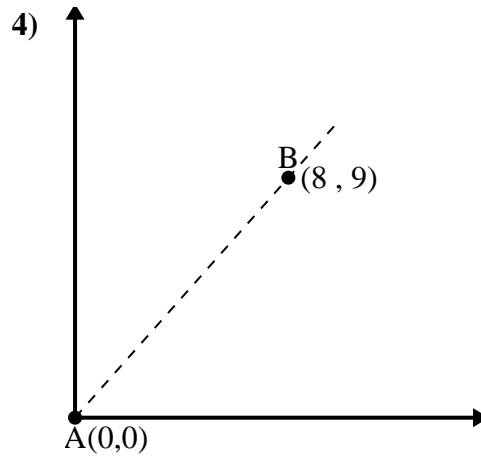
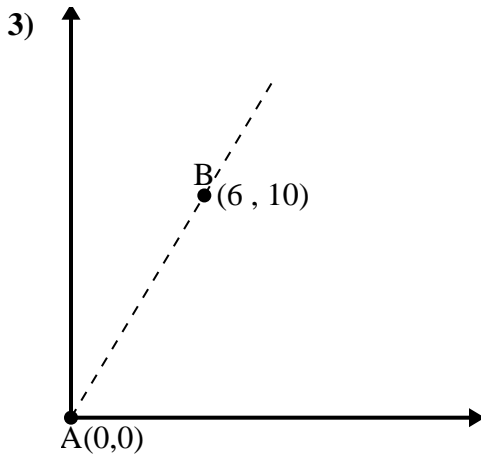
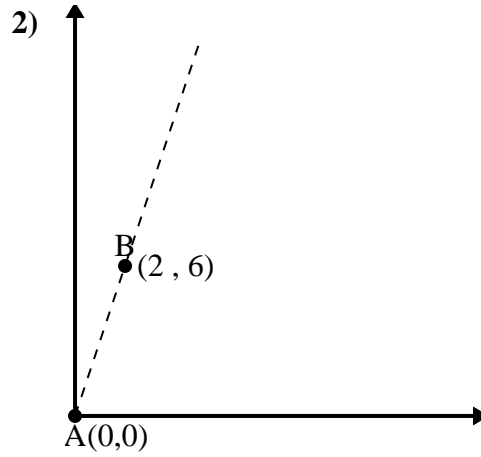
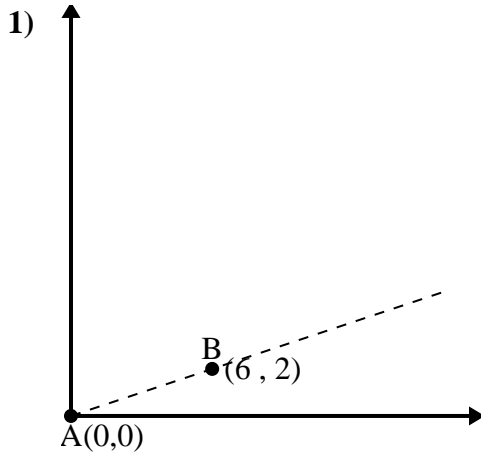




Utilisez la loi des cosinus pour trouver l'angle du point B par rapport au point A.

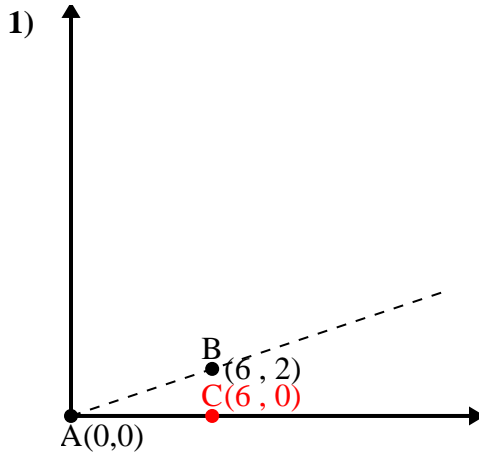
Réponses



- 1. _____
- 2. _____
- 3. _____
- 4. _____



Utilisez la loi des cosinus pour trouver l'angle du point B par rapport au point A.

Réponses

$$\overline{AB} \text{ length} = 6.32$$

$$\overline{AC} \text{ length} = 6$$

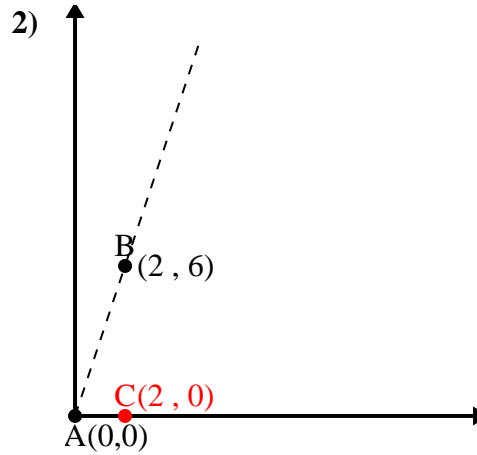
$$\overline{BC} \text{ length} = 2$$

$$(40 + 36 + 4) \div (2 \times 6.32 \times 6)$$

$$0.95$$

$$\cos^{-1}(0.95)$$

$$18.43^\circ$$



$$\overline{AB} \text{ length} = 6.32$$

$$\overline{AC} \text{ length} = 2$$

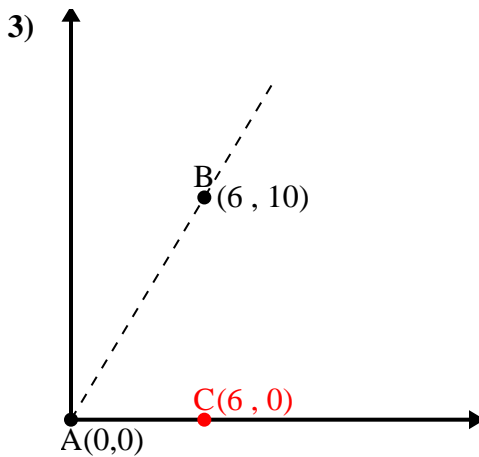
$$\overline{BC} \text{ length} = 6$$

$$(40 + 4 + 36) \div (2 \times 6.32 \times 2)$$

$$0.32$$

$$\cos^{-1}(0.32)$$

$$71.57^\circ$$



$$\overline{AB} \text{ length} = 11.66$$

$$\overline{AC} \text{ length} = 6$$

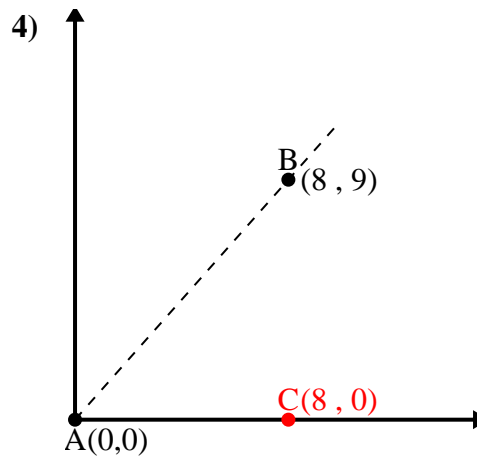
$$\overline{BC} \text{ length} = 10$$

$$(136 + 36 + 100) \div (2 \times 11.66 \times 6)$$

$$0.51$$

$$\cos^{-1}(0.51)$$

$$59.04^\circ$$



$$\overline{AB} \text{ length} = 12.04$$

$$\overline{AC} \text{ length} = 8$$

$$\overline{BC} \text{ length} = 9$$

$$(145 + 64 + 81) \div (2 \times 12.04 \times 8)$$

$$0.66$$

$$\cos^{-1}(0.66)$$

$$48.37^\circ$$

1. 18,43°

2. 71,57°

3. 59,04°

4. 48,37°