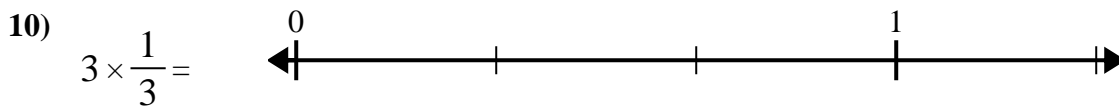
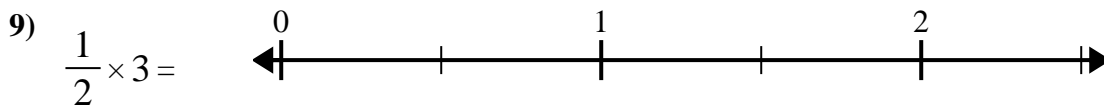
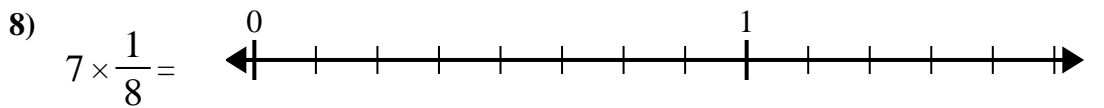
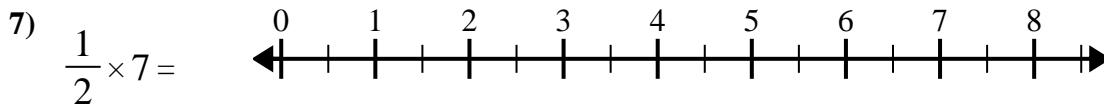
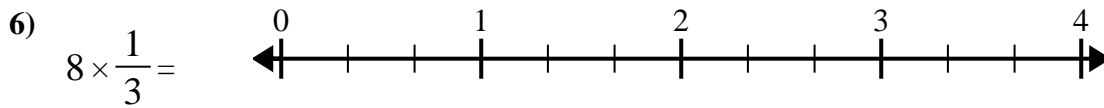
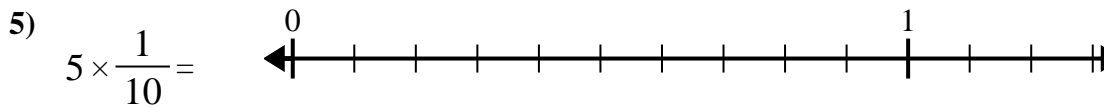
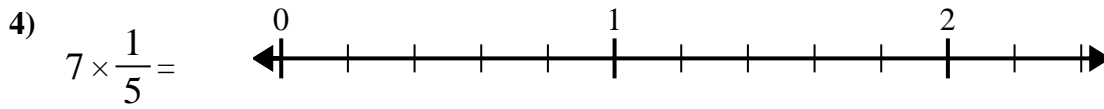
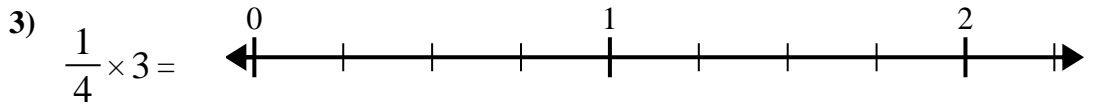
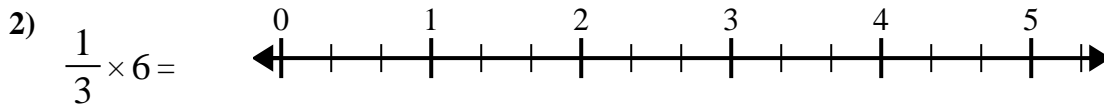
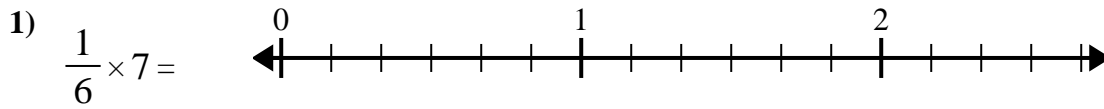




Utilisez la droite numérique pour résoudre.

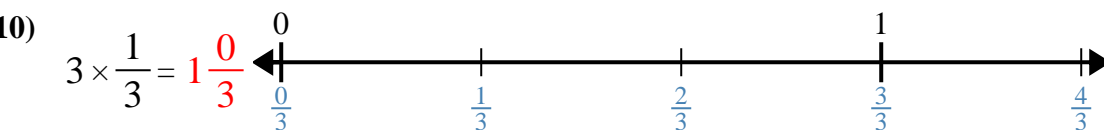
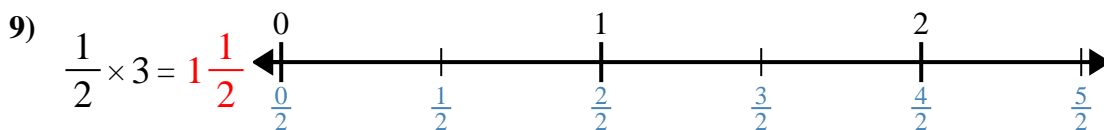
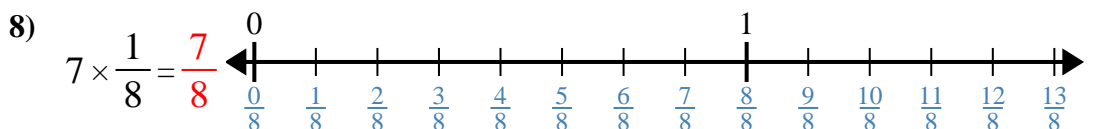
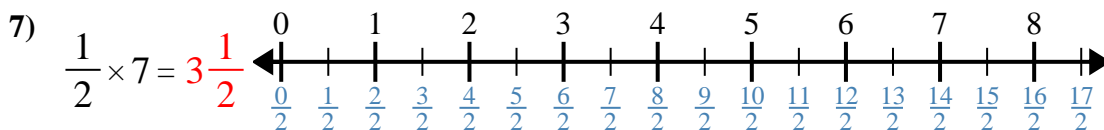
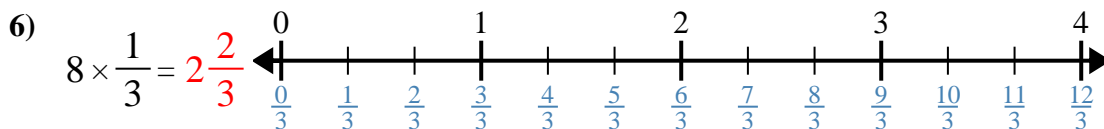
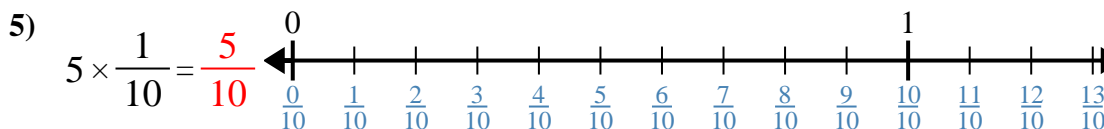
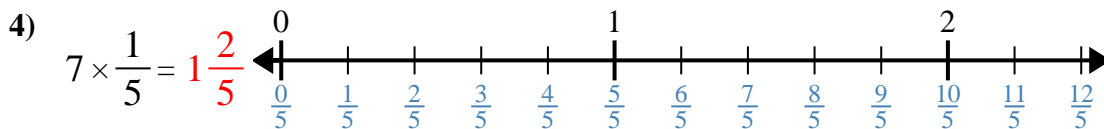
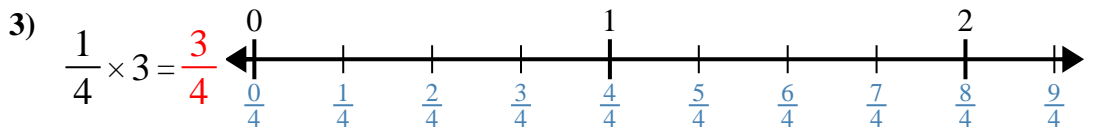
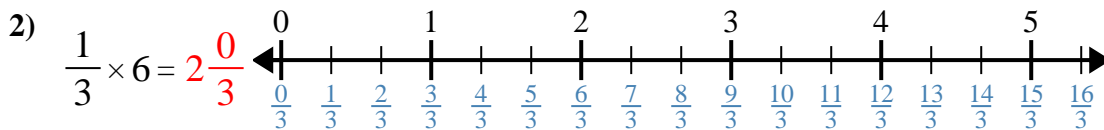
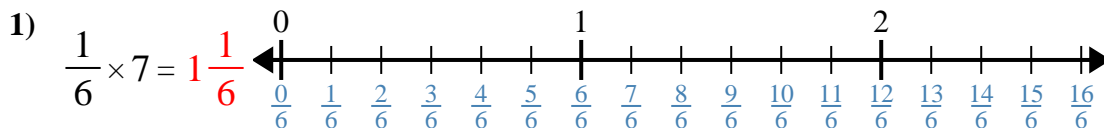


Réponses

- 1. _____
- 2. _____
- 3. _____
- 4. _____
- 5. _____
- 6. _____
- 7. _____
- 8. _____
- 9. _____
- 10. _____



Utilisez la droite numérique pour résoudre.



Réponses

1. $1\frac{1}{6}$
2. $2\frac{0}{3}$
3. $\frac{3}{4}$
4. $1\frac{2}{5}$
5. $\frac{5}{10}$
6. $2\frac{2}{3}$
7. $3\frac{1}{2}$
8. $\frac{7}{8}$
9. $1\frac{1}{2}$
10. $1\frac{0}{3}$



Utilisez la droite numérique pour résoudre.

$\frac{5}{10}$

$1\frac{1}{6}$

$1\frac{2}{5}$

$2\frac{0}{3}$

$1\frac{0}{3}$

$1\frac{1}{2}$

$3\frac{1}{2}$

$\frac{3}{4}$

$\frac{7}{8}$

$2\frac{2}{3}$

Réponses

1. _____

2. _____

3. _____

4. _____

5. _____

6. _____

7. _____

8. _____

9. _____

10. _____

