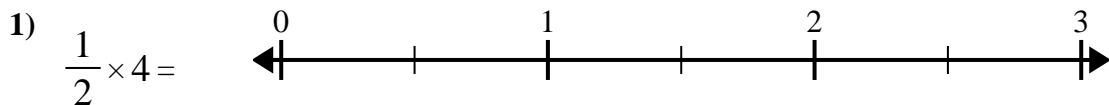


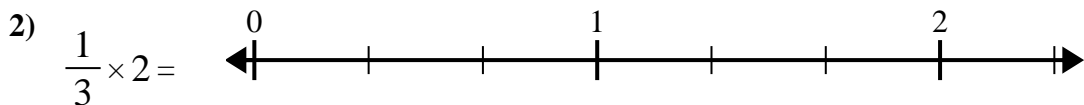


Utilisez la droite numérique pour résoudre.

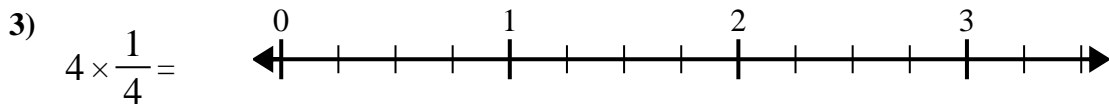
Réponses



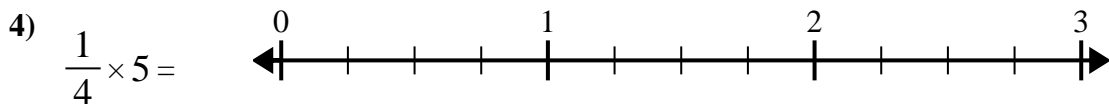
1. _____



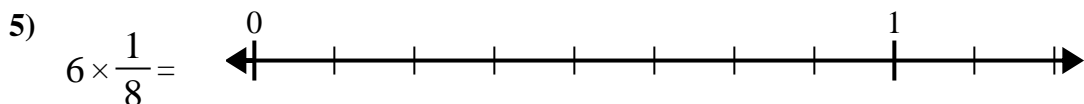
2. _____



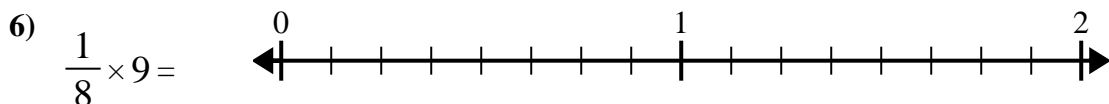
3. _____



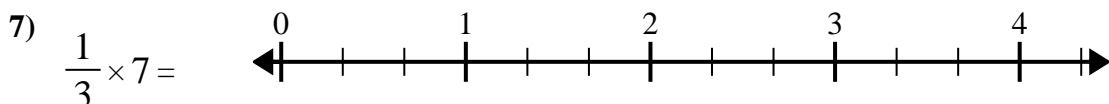
4. _____



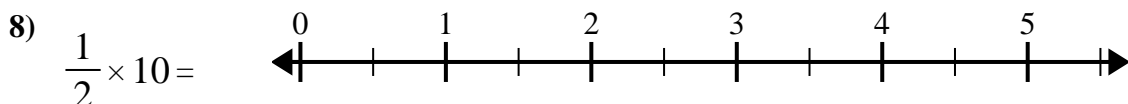
5. _____



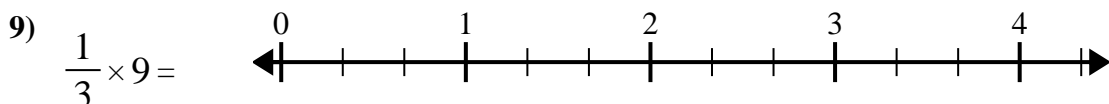
6. _____



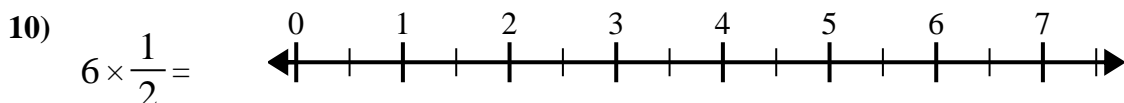
7. _____



8. _____



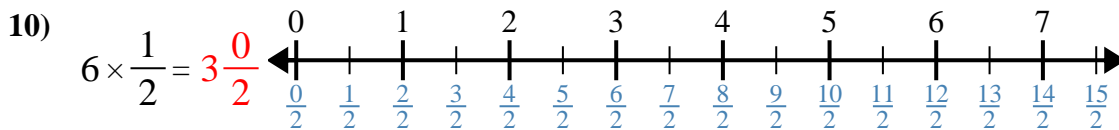
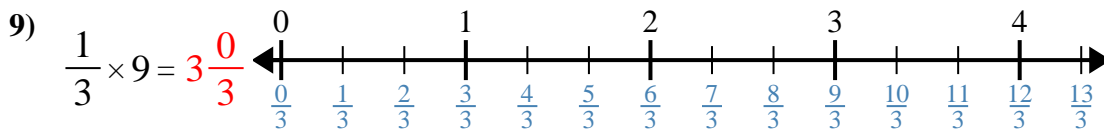
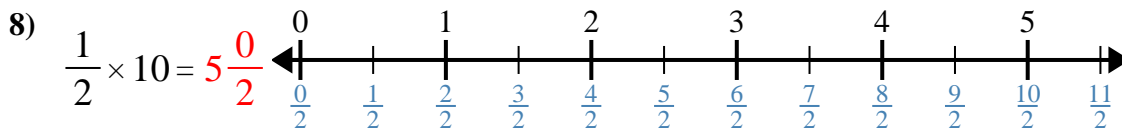
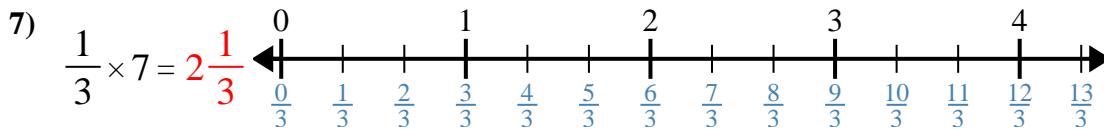
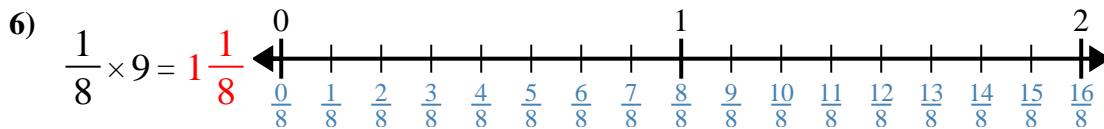
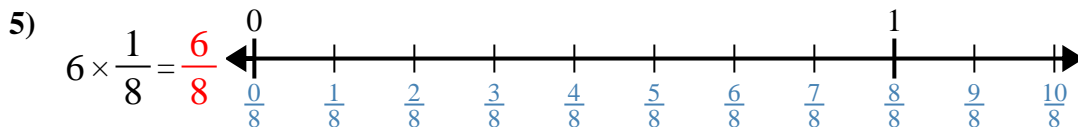
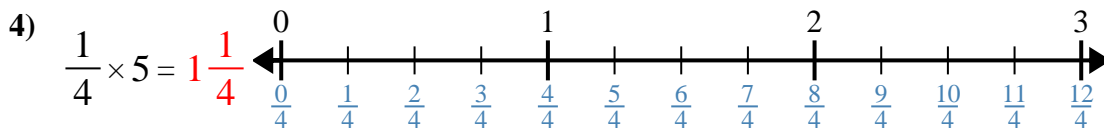
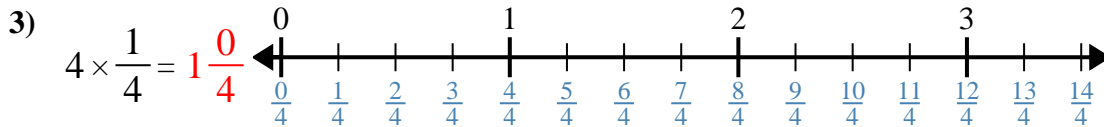
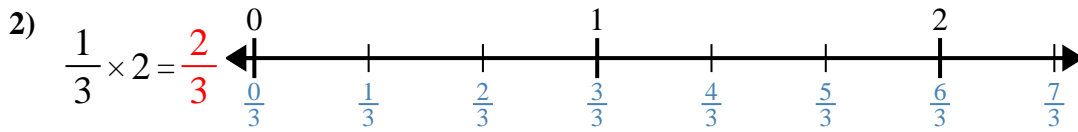
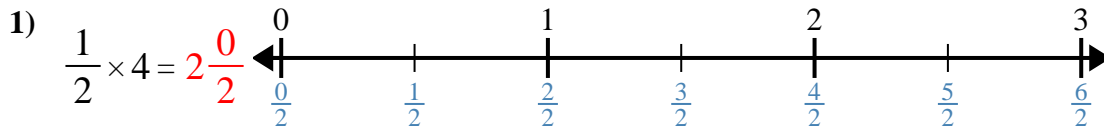
9. _____



10. _____



Utilisez la droite numérique pour résoudre.



Réponses

1. $2\frac{0}{2}$
2. $\frac{2}{3}$
3. $1\frac{0}{4}$
4. $1\frac{1}{4}$
5. $\frac{6}{8}$
6. $1\frac{1}{8}$
7. $2\frac{1}{3}$
8. $5\frac{0}{2}$
9. $3\frac{0}{3}$
10. $3\frac{0}{2}$



Utilisez la droite numérique pour résoudre.

$1\frac{1}{8}$

$\frac{2}{3}$

$5\frac{0}{2}$

$3\frac{0}{3}$

$2\frac{0}{2}$

$2\frac{1}{3}$

$3\frac{0}{2}$

$\frac{6}{8}$

$1\frac{1}{4}$

$1\frac{0}{4}$

Réponses

1. _____
2. _____
3. _____
4. _____
5. _____
6. _____
7. _____
8. _____
9. _____
10. _____

