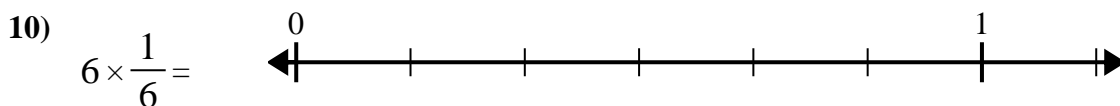
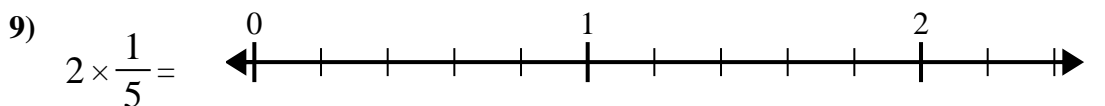
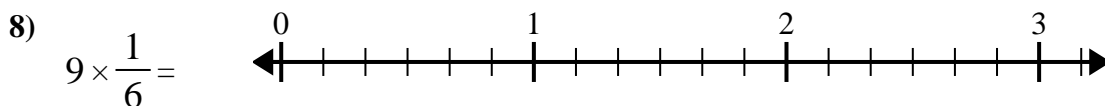
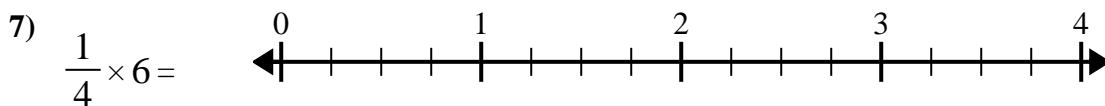
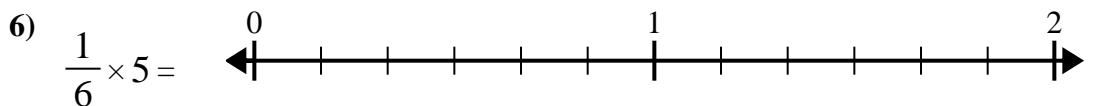
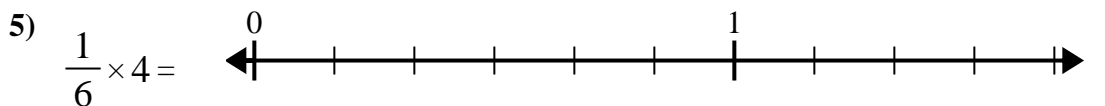
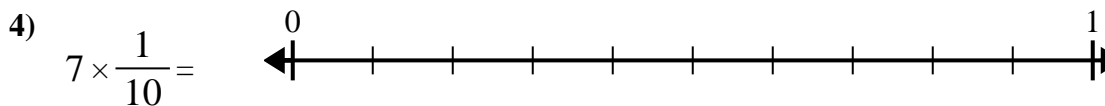
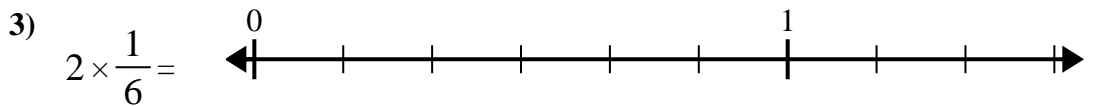
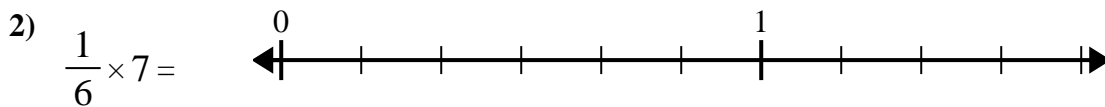
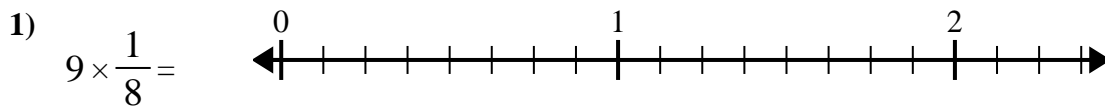




Utilisez la droite numérique pour résoudre.



**Réponses**

1. \_\_\_\_\_

2. \_\_\_\_\_

3. \_\_\_\_\_

4. \_\_\_\_\_

5. \_\_\_\_\_

6. \_\_\_\_\_

7. \_\_\_\_\_

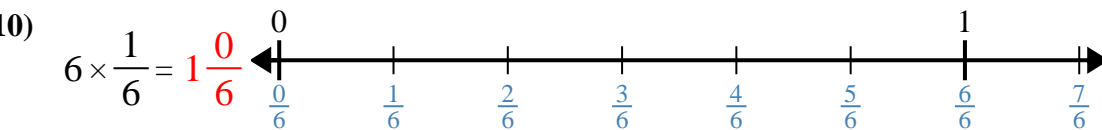
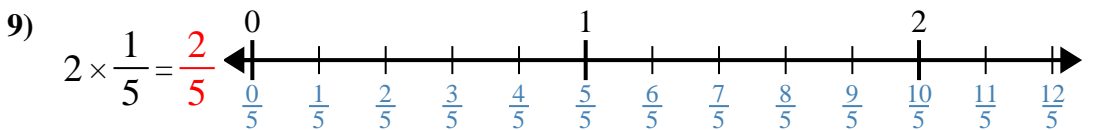
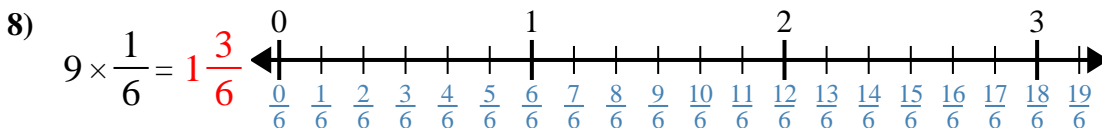
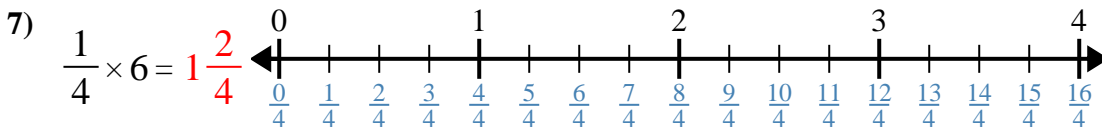
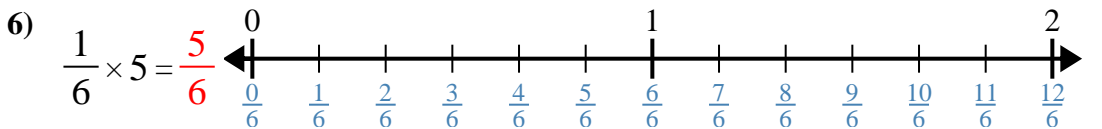
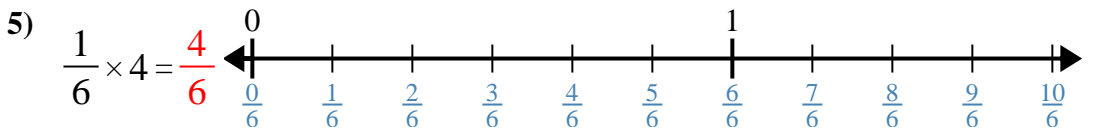
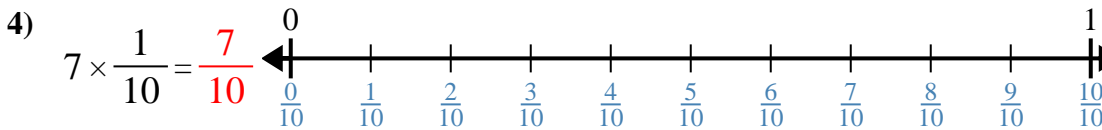
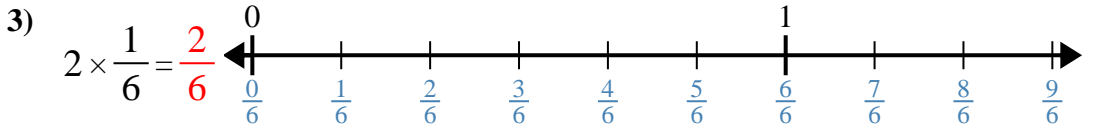
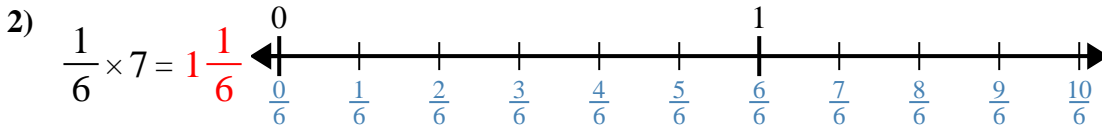
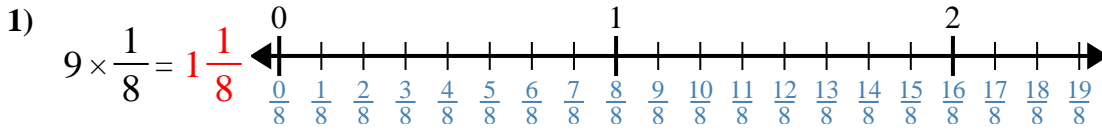
8. \_\_\_\_\_

9. \_\_\_\_\_

10. \_\_\_\_\_



Utilisez la droite numérique pour résoudre.



**Réponses**

1.  $1\frac{1}{8}$
2.  $1\frac{1}{6}$
3.  $\frac{2}{6}$
4.  $\frac{7}{10}$
5.  $\frac{4}{6}$
6.  $\frac{5}{6}$
7.  $1\frac{2}{4}$
8.  $1\frac{3}{6}$
9.  $\frac{2}{5}$
10.  $1\frac{0}{6}$



Utilisez la droite numérique pour résoudre.

$1\frac{2}{4}$

$1\frac{3}{6}$

$\frac{4}{6}$

$1\frac{1}{8}$

$\frac{7}{10}$

$\frac{2}{5}$

$\frac{5}{6}$

$1\frac{1}{6}$

$1\frac{0}{6}$

$\frac{2}{6}$

**Réponses**

1. \_\_\_\_\_

2. \_\_\_\_\_

3. \_\_\_\_\_

4. \_\_\_\_\_

5. \_\_\_\_\_

6. \_\_\_\_\_

7. \_\_\_\_\_

8. \_\_\_\_\_

9. \_\_\_\_\_

10. \_\_\_\_\_

