




Utilisez la droite numérique pour résoudre chaque problème. Le premier est résolu.

Réponses



1. _____

2. _____



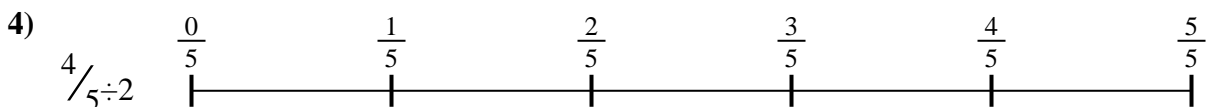
3. _____

4. _____



5. _____

6. _____

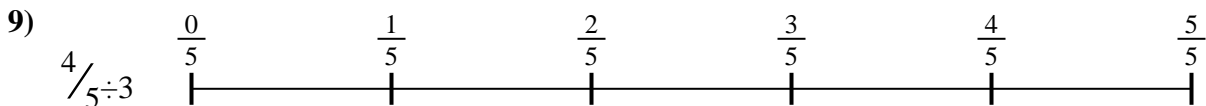
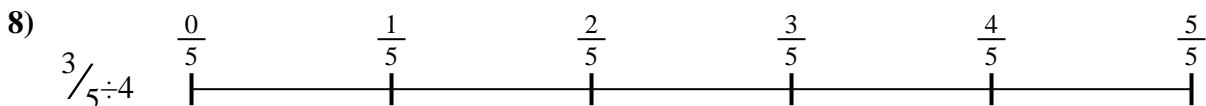



7. _____

8. _____



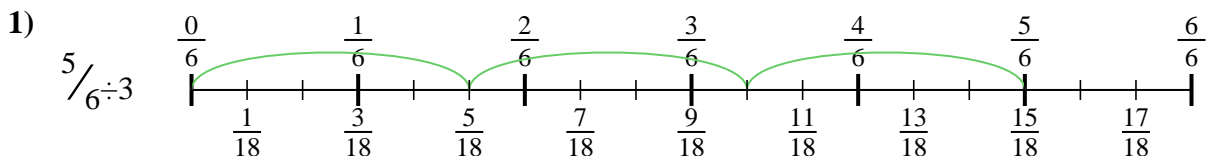
9. _____



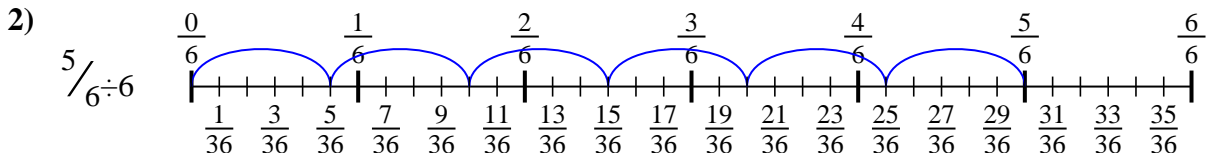


Utilisez la droite numérique pour résoudre chaque problème. Le premier est résolu.

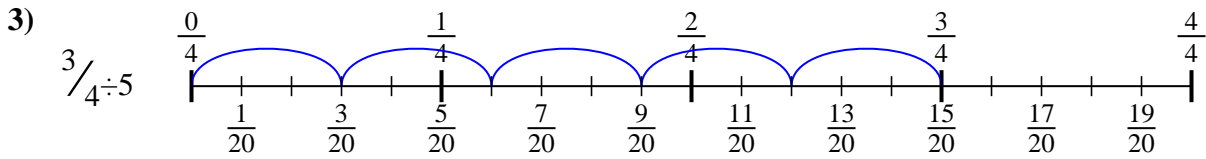
Réponses



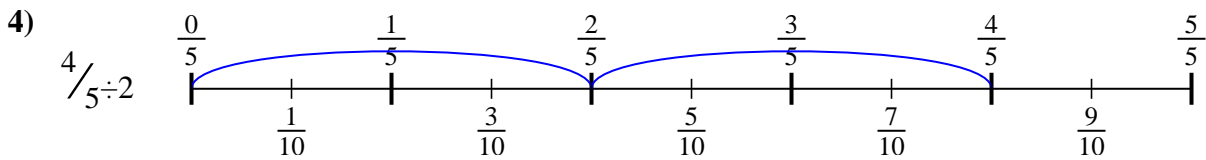
1. $\frac{5}{18}$



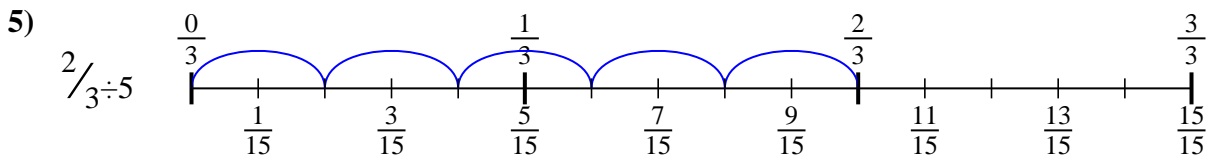
2. $\frac{5}{36}$



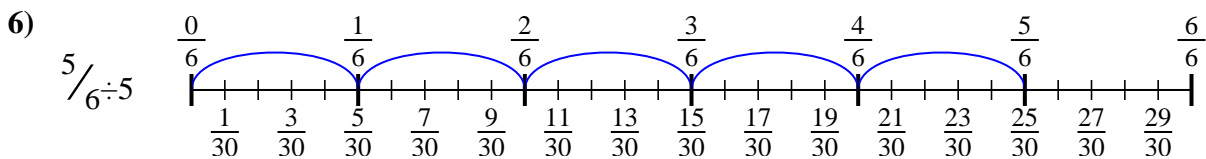
3. $\frac{3}{20}$



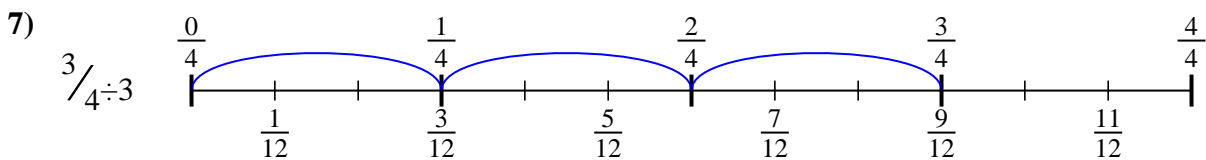
4. $\frac{4}{10}$



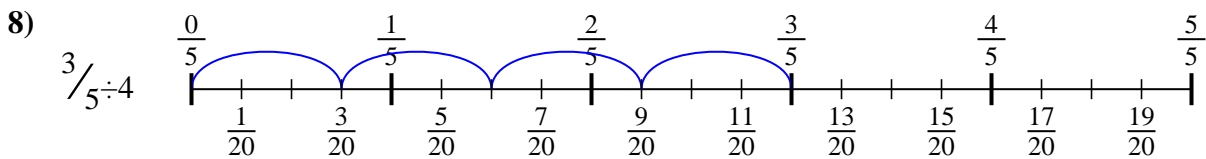
5. $\frac{2}{15}$



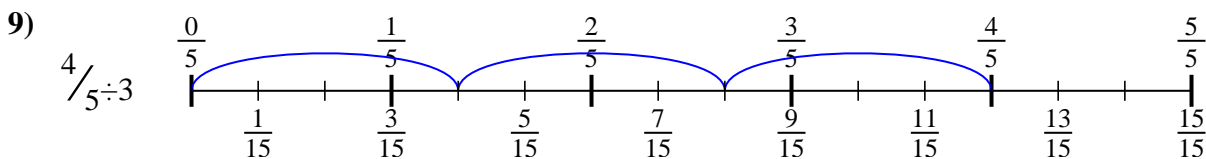
6. $\frac{5}{30}$



7. $\frac{3}{12}$



8. $\frac{3}{20}$



9. $\frac{4}{15}$



Utilisez la droite numérique pour résoudre chaque problème. Le premier est résolu.

Réponses

$\frac{3}{20}$

$\frac{4}{15}$

$\frac{4}{10}$

$\frac{5}{18}$

$\frac{5}{30}$

$\frac{3}{12}$

$\frac{5}{36}$

$\frac{3}{20}$

$\frac{2}{15}$

1. _____

2. _____

3. _____

4. _____

5. _____

6. _____

7. _____

8. _____

9. _____

