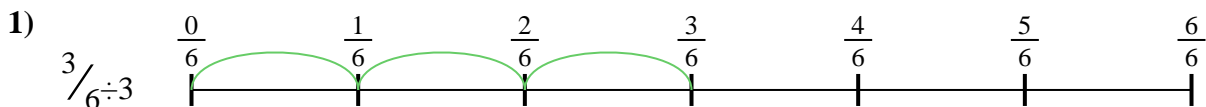




Utilisez la droite numérique pour résoudre chaque problème. Le premier est résolu.

Réponses



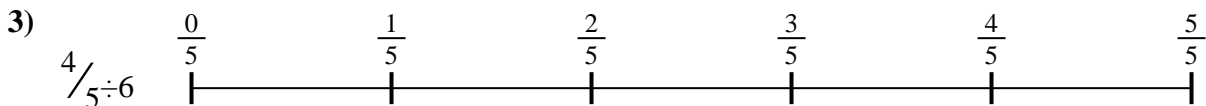
1. _____

2. _____



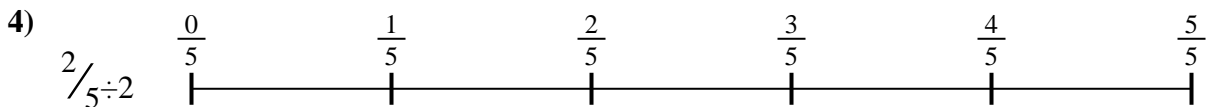
3. _____

4. _____



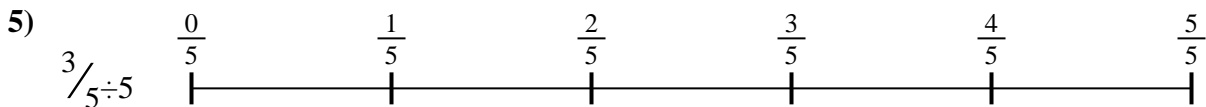
5. _____

6. _____



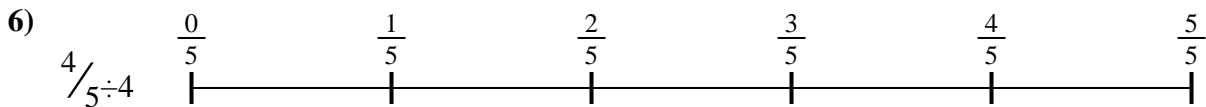


7. _____

8. _____



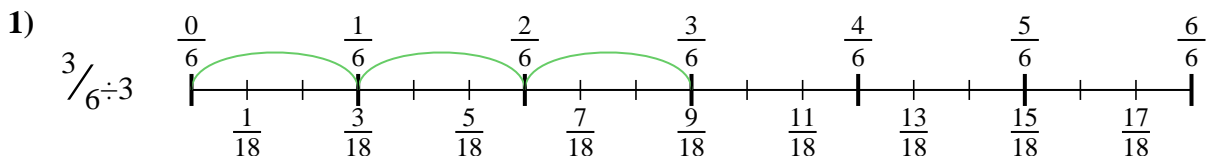
9. _____



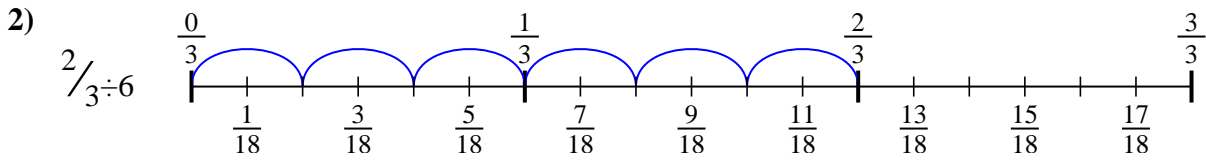


Utilisez la droite numérique pour résoudre chaque problème. Le premier est résolu.

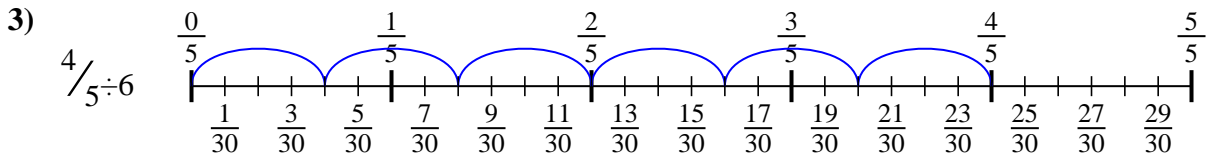
Réponses



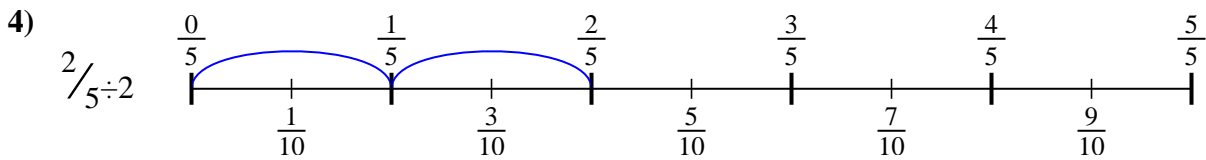
1. $\frac{3}{18}$



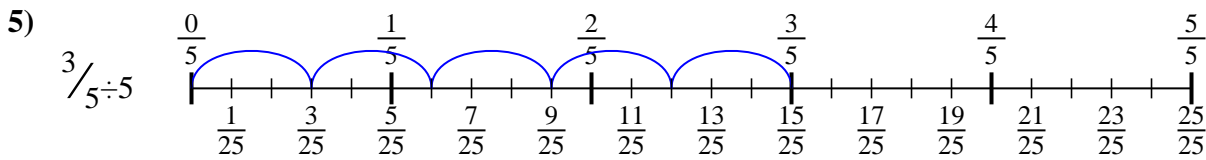
2. $\frac{2}{18}$



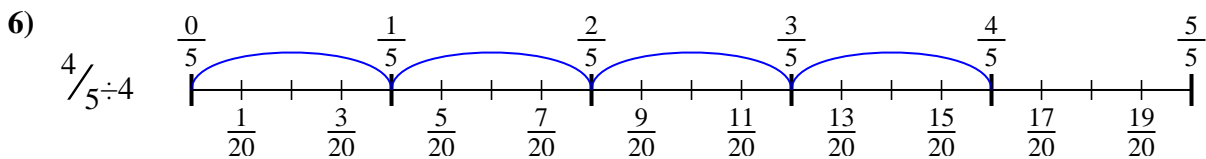
3. $\frac{4}{30}$



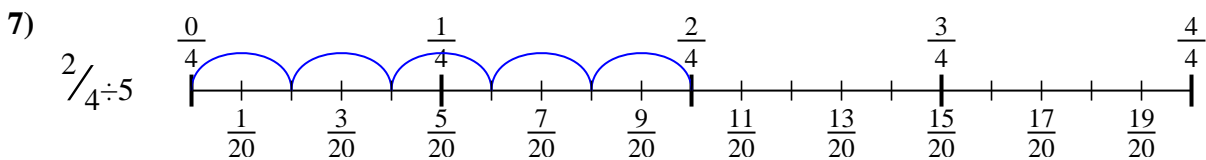
4. $\frac{2}{10}$



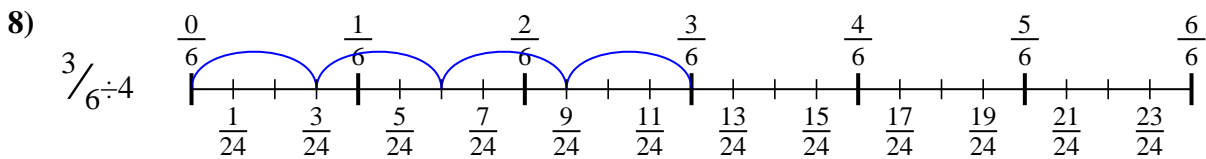
5. $\frac{3}{25}$



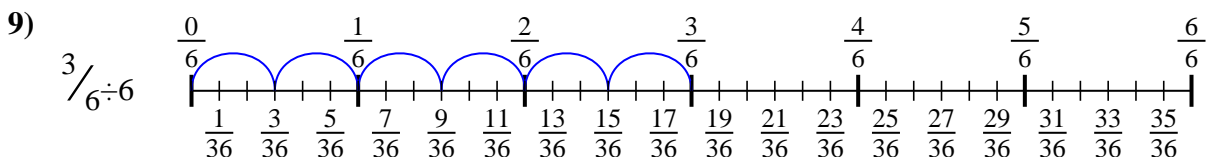
6. $\frac{4}{20}$



7. $\frac{2}{20}$



8. $\frac{3}{24}$



9. $\frac{3}{36}$



Utilisez la droite numérique pour résoudre chaque problème. Le premier est résolu.

Réponses

$\frac{3}{24}$

$\frac{2}{20}$

$\frac{4}{20}$

$\frac{2}{18}$

$\frac{2}{10}$

$\frac{3}{18}$

$\frac{4}{30}$

$\frac{3}{25}$

$\frac{3}{36}$

1. _____

2. _____

3. _____

4. _____

5. _____

6. _____

7. _____

8. _____

9. _____

