




Utilisez la droite numérique pour résoudre chaque problème. Le premier est résolu.

Réponses



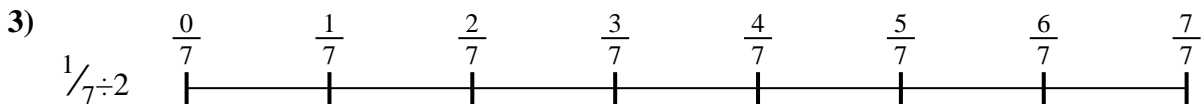
1. _____

2. _____



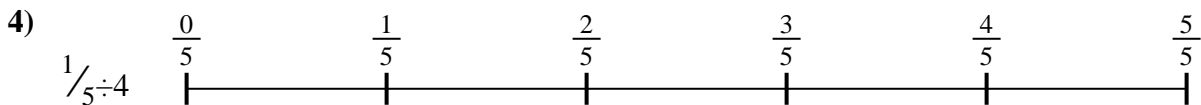
3. _____

4. _____



5. _____

6. _____

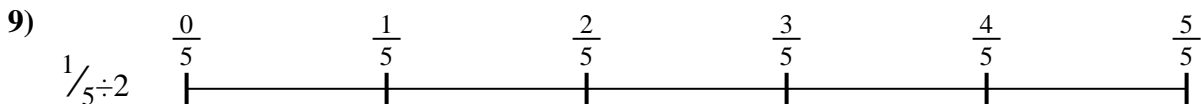
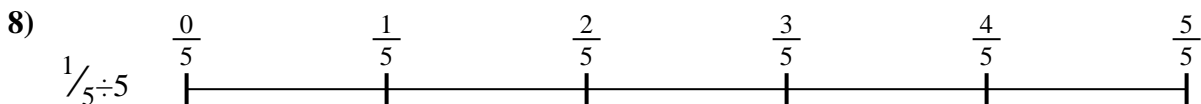



7. _____

8. _____



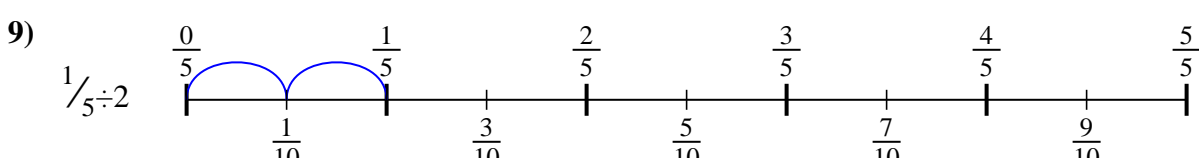
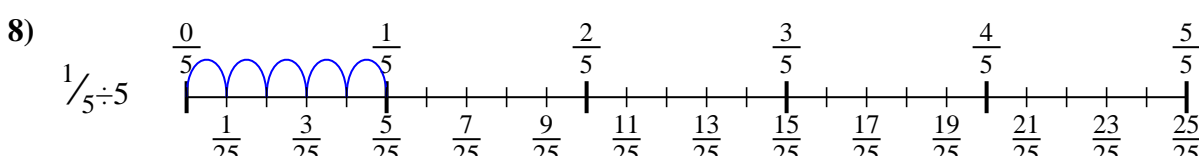
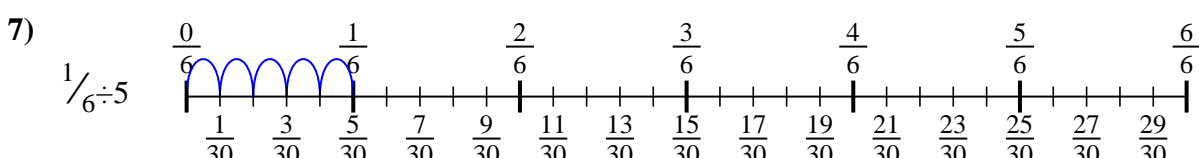
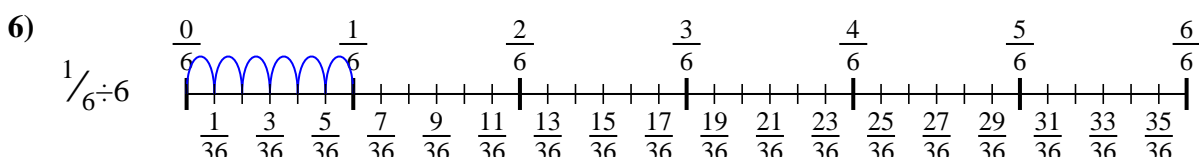
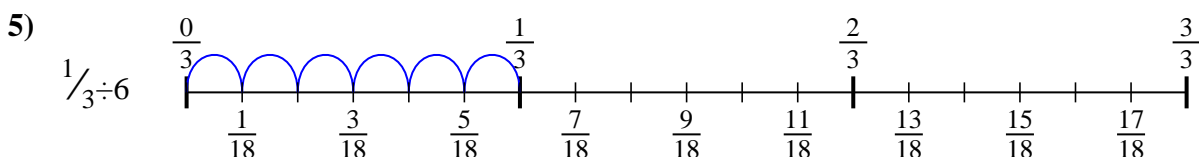
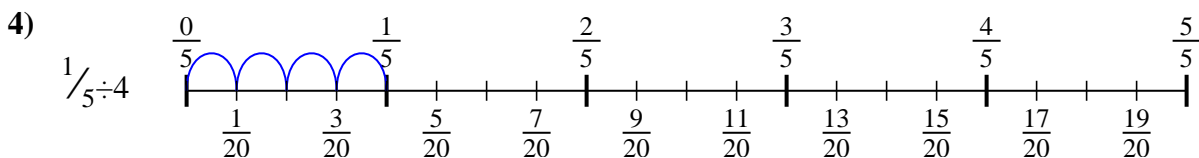
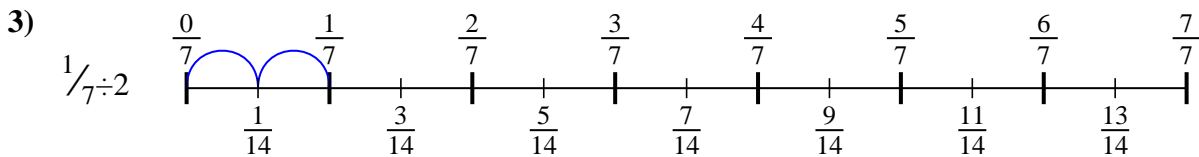
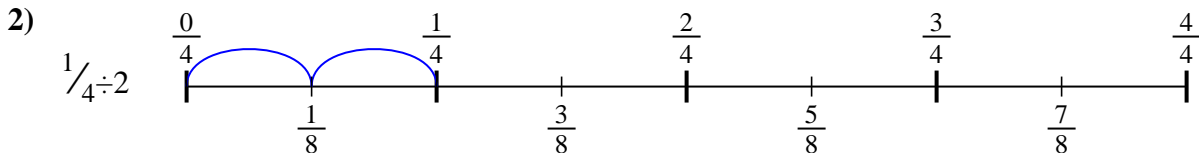
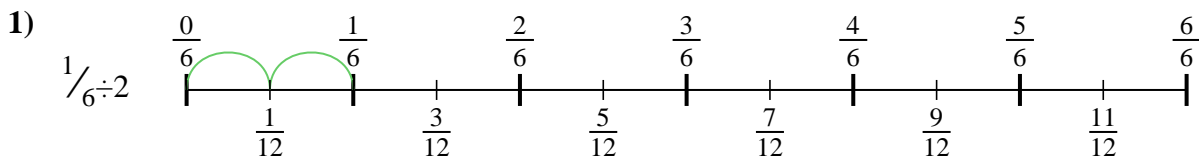
9. _____





Utilisez la droite numérique pour résoudre chaque problème. Le premier est résolu.

Réponses



1. $\frac{1}{12}$

2. $\frac{1}{8}$

3. $\frac{1}{14}$

4. $\frac{1}{20}$

5. $\frac{1}{18}$

6. $\frac{1}{36}$

7. $\frac{1}{30}$

8. $\frac{1}{25}$

9. $\frac{1}{10}$



Utilisez la droite numérique pour résoudre chaque problème. Le premier est résolu.

Réponses

$\frac{1}{30}$

$\frac{1}{12}$

$\frac{1}{36}$

$\frac{1}{8}$

$\frac{1}{18}$

$\frac{1}{25}$

$\frac{1}{14}$

$\frac{1}{20}$

$\frac{1}{10}$

1. _____

2. _____

3. _____

4. _____

5. _____

6. _____

7. _____

8. _____

9. _____

