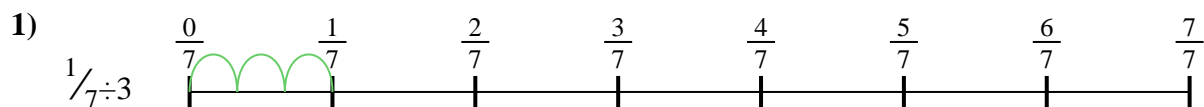





Utilisez la droite numérique pour résoudre chaque problème. Le premier est résolu.

**Réponses**

1. \_\_\_\_\_

2. \_\_\_\_\_



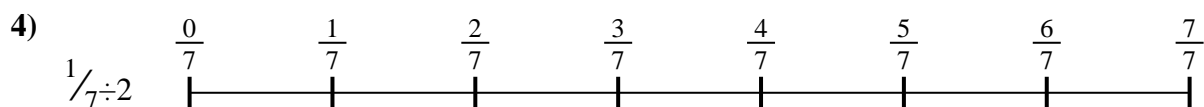
3. \_\_\_\_\_

4. \_\_\_\_\_



5. \_\_\_\_\_

6. \_\_\_\_\_





7. \_\_\_\_\_

8. \_\_\_\_\_



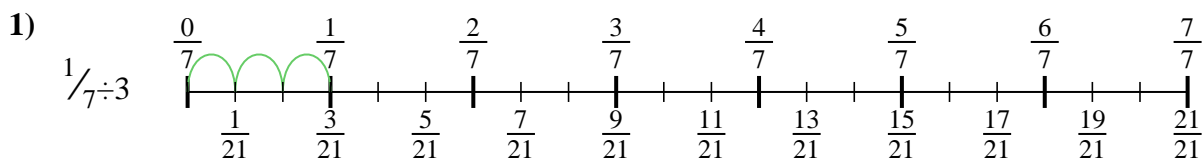
9. \_\_\_\_\_



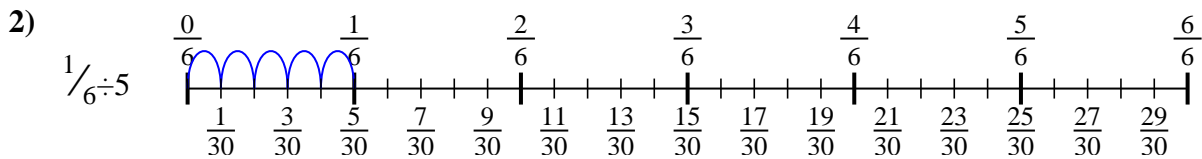


Utilisez la droite numérique pour résoudre chaque problème. Le premier est résolu.

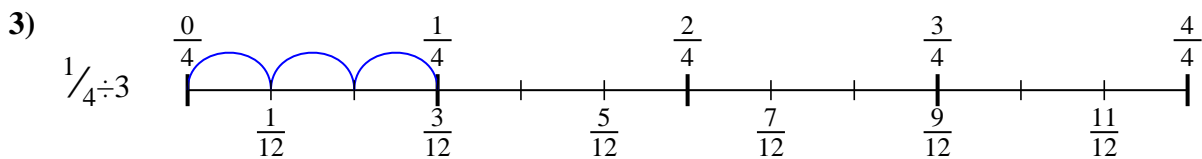
Réponses



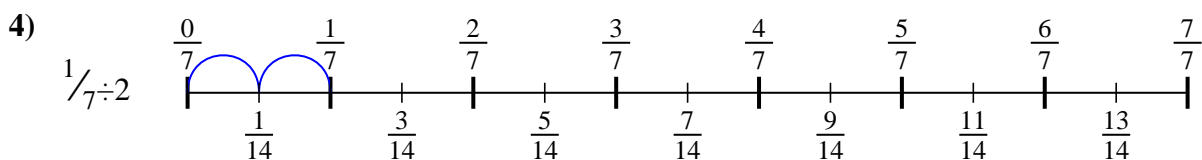
1.  $\frac{1}{21}$



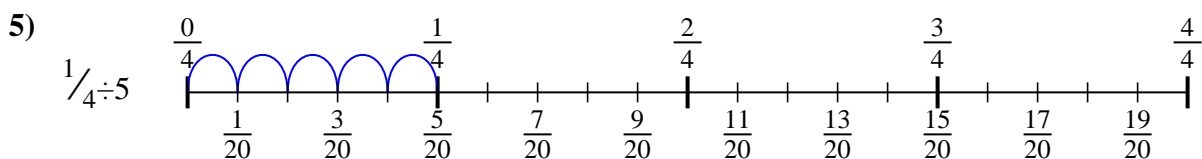
2.  $\frac{1}{30}$



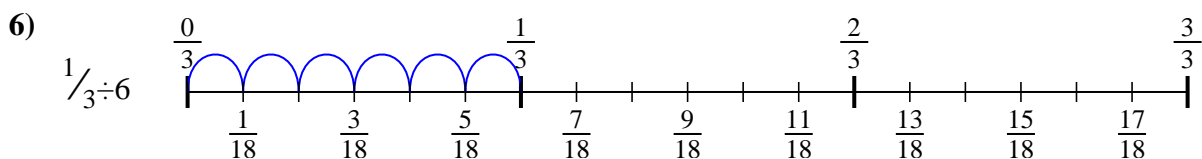
3.  $\frac{1}{12}$



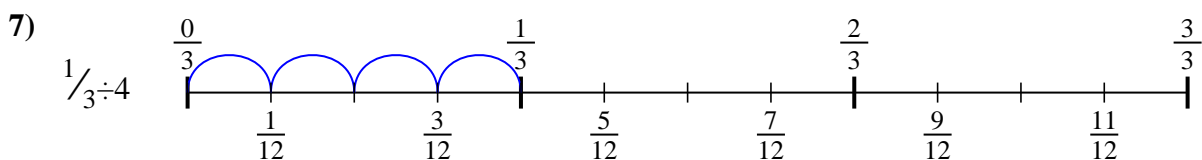
4.  $\frac{1}{14}$



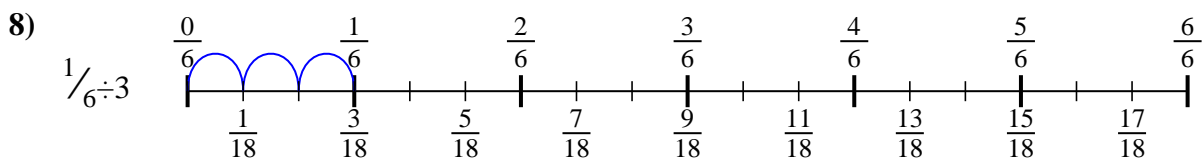
5.  $\frac{1}{20}$



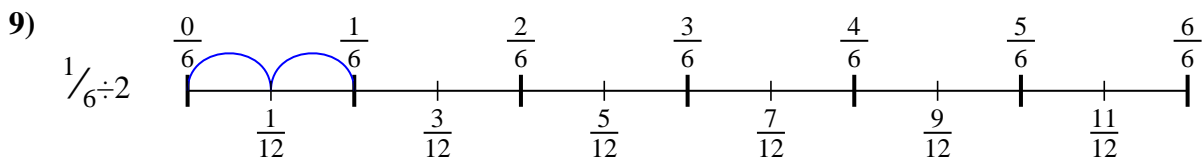
6.  $\frac{1}{18}$



7.  $\frac{1}{12}$



8.  $\frac{1}{18}$



9.  $\frac{1}{12}$



Utilisez la droite numérique pour résoudre chaque problème. Le premier est résolu.

**Réponses**

$\frac{1}{30}$

$\frac{1}{12}$

$\frac{1}{12}$

$\frac{1}{20}$

$\frac{1}{21}$

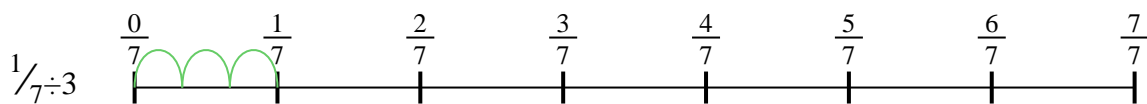
$\frac{1}{18}$

$\frac{1}{18}$

$\frac{1}{12}$

$\frac{1}{14}$

1)



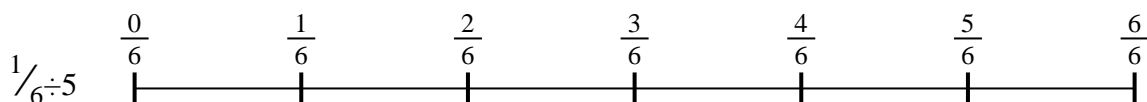
1. \_\_\_\_\_

2. \_\_\_\_\_

3. \_\_\_\_\_

4. \_\_\_\_\_


2)



5. \_\_\_\_\_

6. \_\_\_\_\_

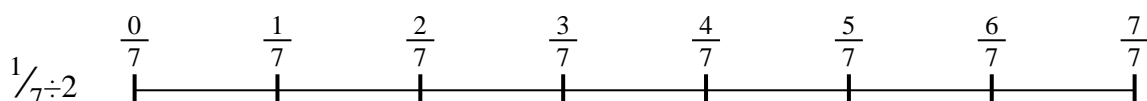
3)



7. \_\_\_\_\_


8. \_\_\_\_\_

4)



9. \_\_\_\_\_


5)



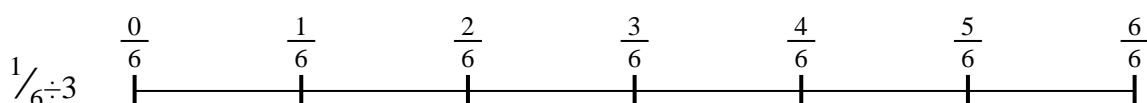
6)



7)



8)



9)

