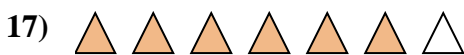


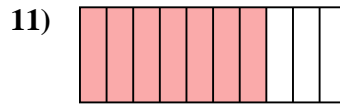

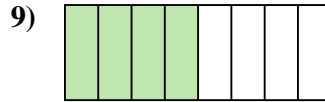
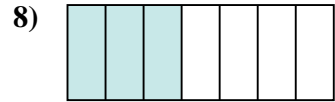
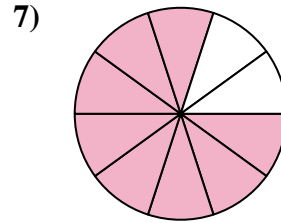
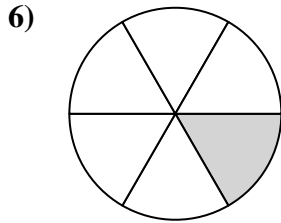
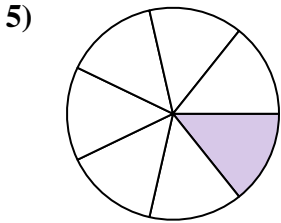

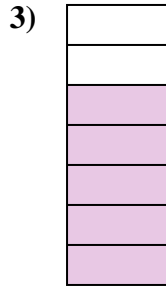
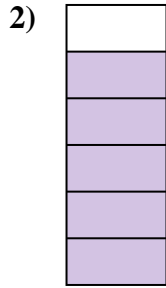





Déterminez si la valeur indiquée est 'supérieure', 'inférieure', ou 'égale' a un demi.

Réponses



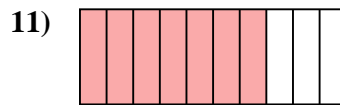
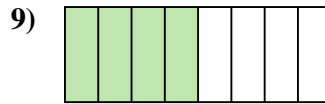
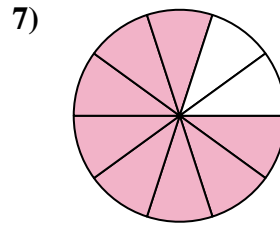
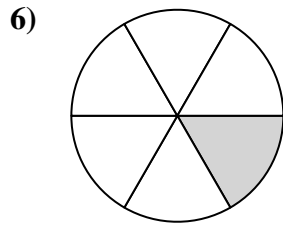
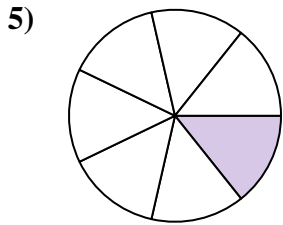
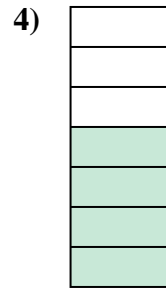
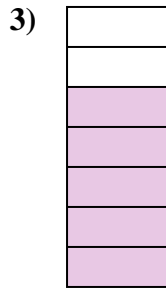
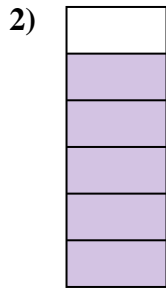
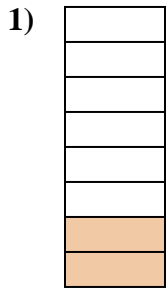


1. _____
2. _____
3. _____
4. _____
5. _____
6. _____
7. _____
8. _____
9. _____
10. _____
11. _____
12. _____
13. _____
14. _____
15. _____
16. _____
17. _____
18. _____
19. _____
20. _____

1-10	95	90	85	80	75	70	65	60	55	50
11-20	45	40	35	30	25	20	15	10	5	0



Déterminez si la valeur indiquée est 'supérieure', 'inférieure', ou 'égale' a un demi.



Réponses

1. inférieur

2. supérieur

3. supérieur

4. supérieur

5. inférieur

6. inférieur

7. supérieur

8. inférieur

9. égal

10. égal

11. supérieur

12. supérieur

13. inférieur

14. égal

15. égal

16. inférieur

17. supérieur

18. supérieur

19. inférieur

20. supérieur