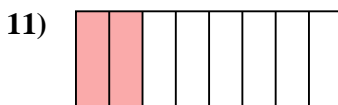
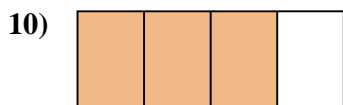
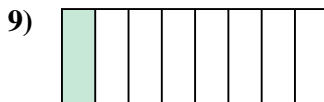
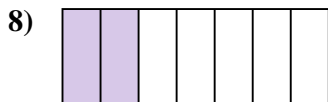
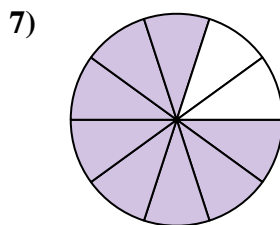
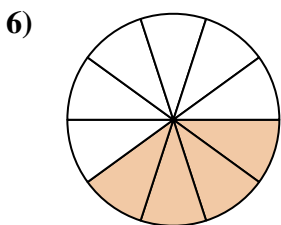
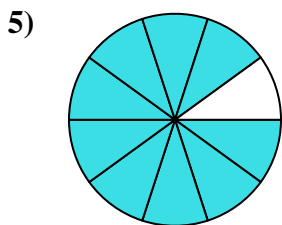

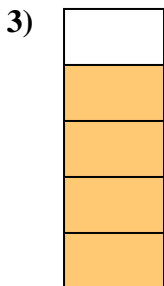
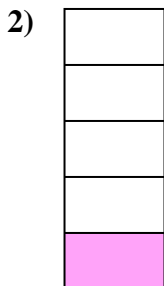





Déterminez si la valeur indiquée est 'supérieure', 'inférieure', ou 'égale' a un demi.




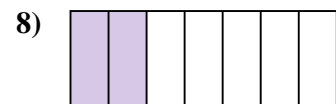
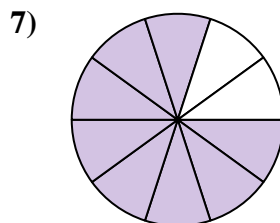
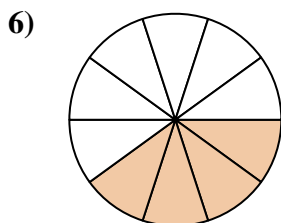
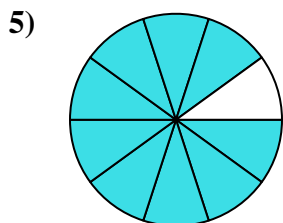

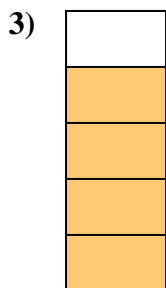


Réponses



1. _____
2. _____
3. _____
4. _____
5. _____
6. _____
7. _____
8. _____
9. _____
10. _____
11. _____
12. _____
13. _____
14. _____
15. _____
16. _____
17. _____
18. _____
19. _____
20. _____



Déterminez si la valeur indiquée est 'supérieure', 'inférieure', ou 'égale' a un demi.



Réponses

1. supérieur

2. inférieur

3. supérieur

4. supérieur

5. supérieur

6. inférieur

7. supérieur

8. inférieur

9. inférieur

10. supérieur

11. inférieur

12. supérieur

13. inférieur

14. inférieur

15. inférieur

16. égal

17. supérieur

18. égal

19. égal

20. supérieur