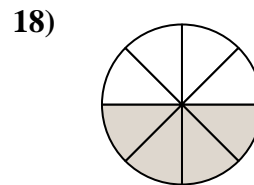
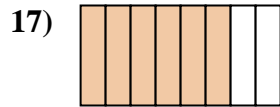
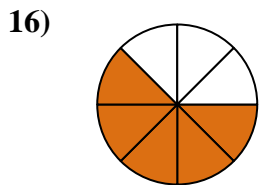
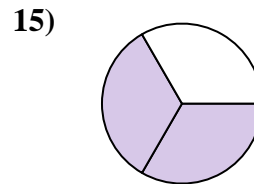
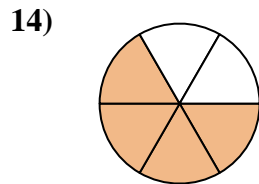
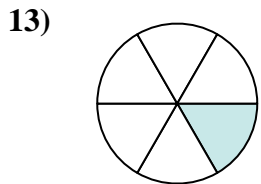
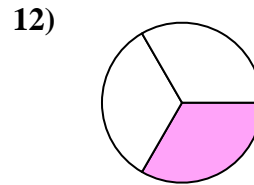
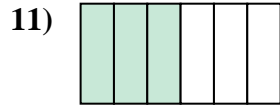
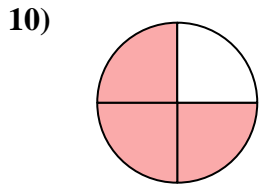
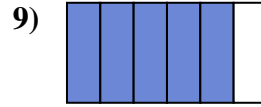
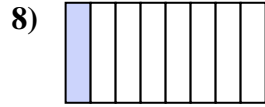
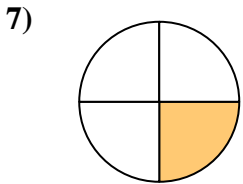
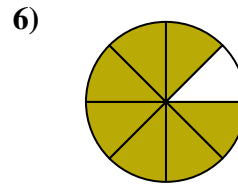
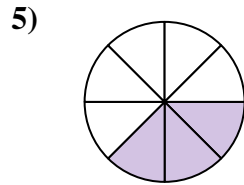
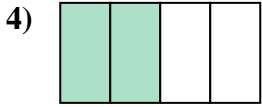
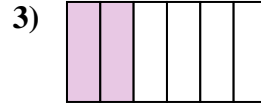
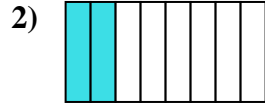
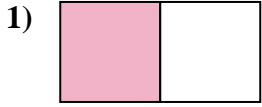




Ecrire la fraction de la représentation de la partie colorée du camembert.

Réponses



1. _____

2. _____

3. _____

4. _____

5. _____

6. _____

7. _____

8. _____

9. _____

10. _____

11. _____

12. _____

13. _____

14. _____

15. _____

16. _____

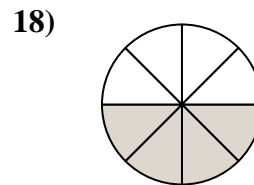
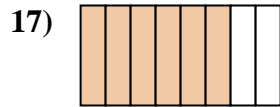
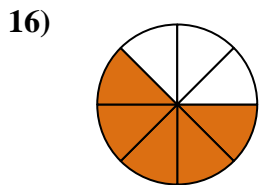
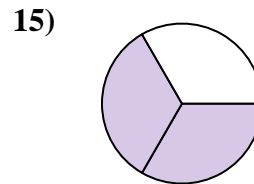
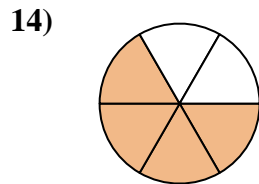
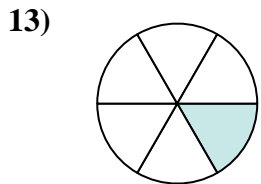
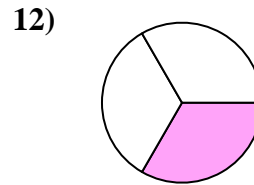
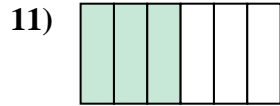
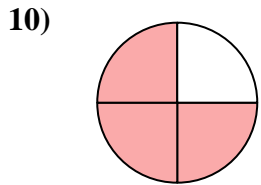
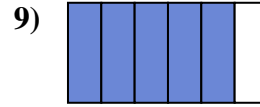
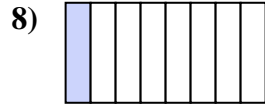
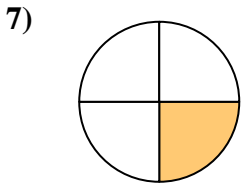
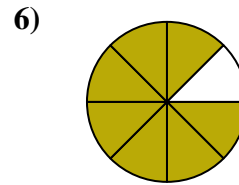
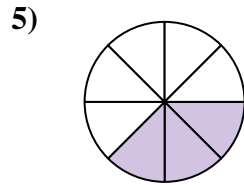
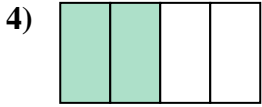
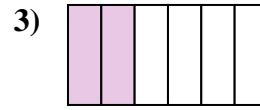
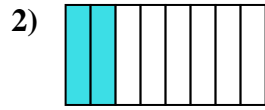
17. _____

18. _____



Ecrire la fraction de la représentation de la partie colorée du camembert.

Réponses



1. 1/2

2. 2/8

3. 2/6

4. 2/4

5. 3/8

6. 7/8

7. 1/4

8. 1/8

9. 5/6

10. 3/4

11. 3/6

12. 1/3

13. 1/6

14. 4/6

15. 2/3

16. 5/8

17. 6/8

18. 4/8