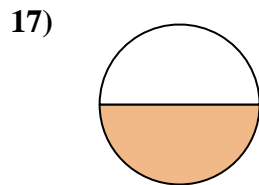
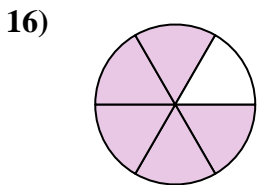
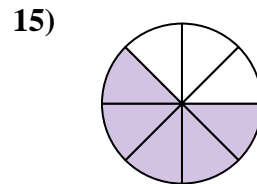
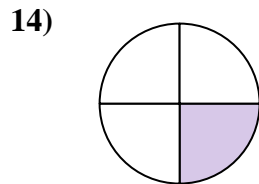
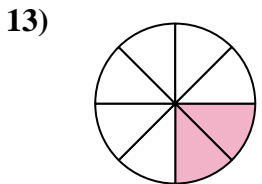
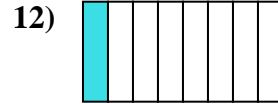
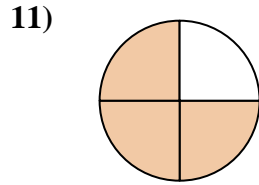
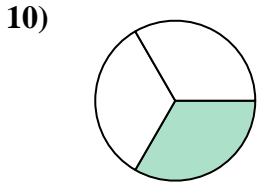
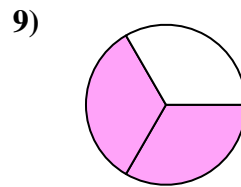
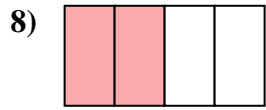
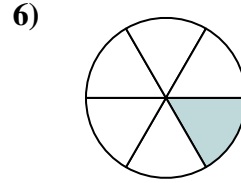
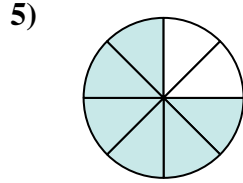
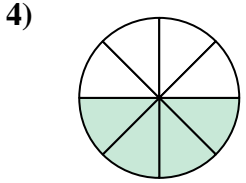
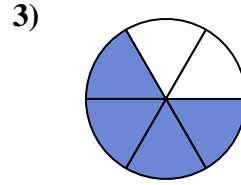
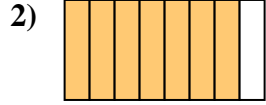
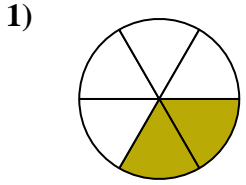




Ecrire la fraction de la représentation de la partie colorée du camembert.

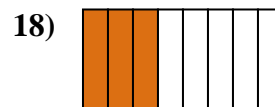
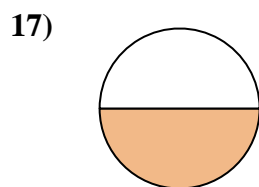
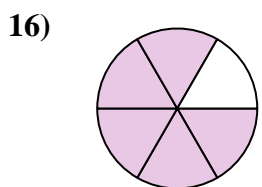
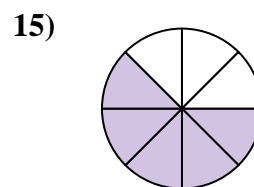
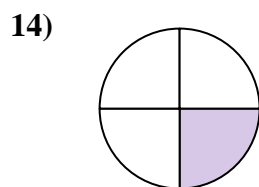
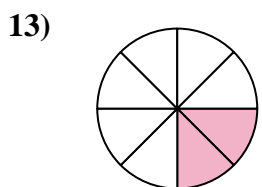
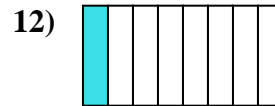
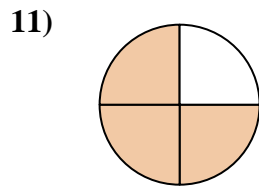
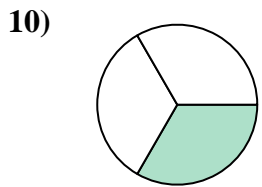
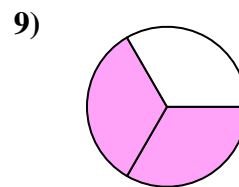
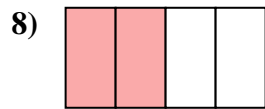
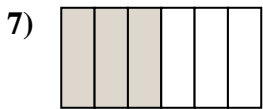
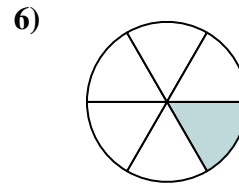
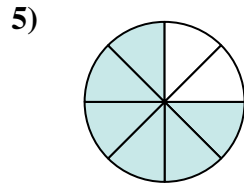
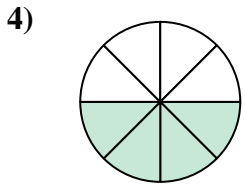
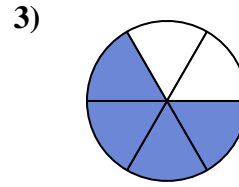
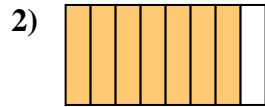
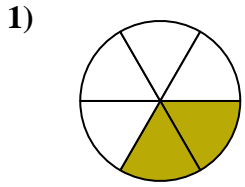
**Réponses**



1. \_\_\_\_\_
2. \_\_\_\_\_
3. \_\_\_\_\_
4. \_\_\_\_\_
5. \_\_\_\_\_
6. \_\_\_\_\_
7. \_\_\_\_\_
8. \_\_\_\_\_
9. \_\_\_\_\_
10. \_\_\_\_\_
11. \_\_\_\_\_
12. \_\_\_\_\_
13. \_\_\_\_\_
14. \_\_\_\_\_
15. \_\_\_\_\_
16. \_\_\_\_\_
17. \_\_\_\_\_
18. \_\_\_\_\_



Ecrire la fraction de la représentation de la partie colorée du camembert.

**Réponses**1.  $\frac{2}{6}$ 2.  $\frac{7}{8}$ 3.  $\frac{4}{6}$ 4.  $\frac{4}{8}$ 5.  $\frac{6}{8}$ 6.  $\frac{1}{6}$ 7.  $\frac{3}{8}$ 8.  $\frac{2}{4}$ 9.  $\frac{2}{3}$ 10.  $\frac{1}{3}$ 11.  $\frac{3}{4}$ 12.  $\frac{1}{8}$ 13.  $\frac{2}{8}$ 14.  $\frac{1}{4}$ 15.  $\frac{5}{8}$ 16.  $\frac{5}{6}$ 17.  $\frac{1}{2}$ 18.  $\frac{3}{8}$