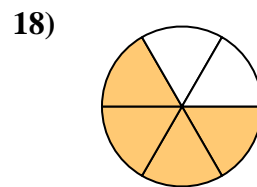
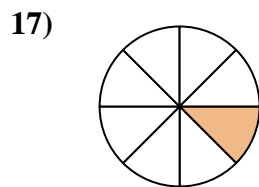
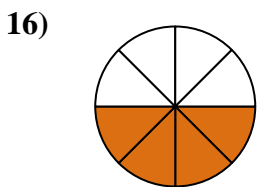
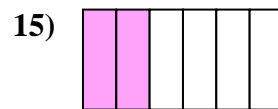
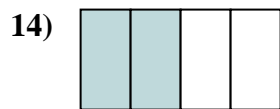
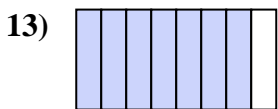
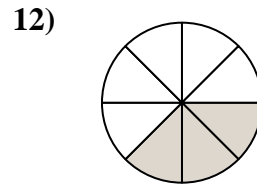

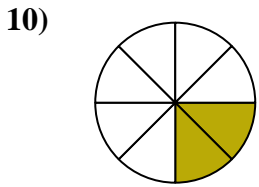
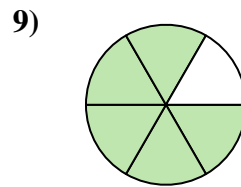
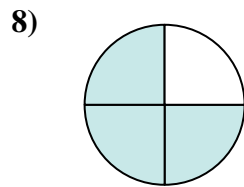
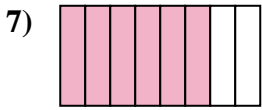
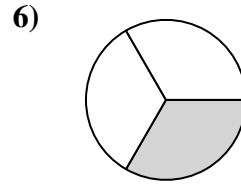

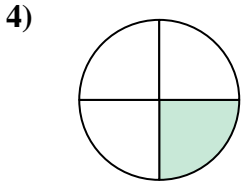
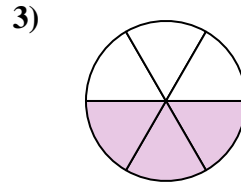
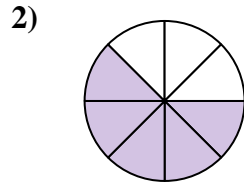
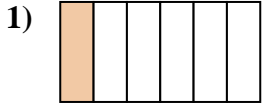




Ecrire la fraction de la représentation de la partie colorée du camembert.

Réponses



1. _____

2. _____

3. _____

4. _____

5. _____

6. _____

7. _____

8. _____

9. _____

10. _____

11. _____

12. _____

13. _____

14. _____

15. _____

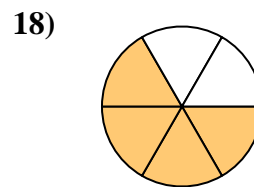
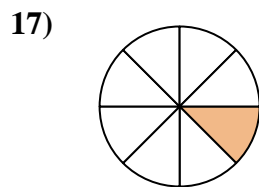
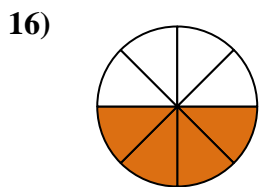
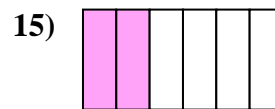
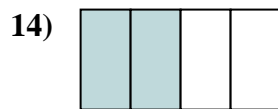
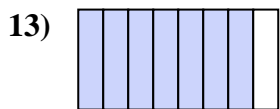
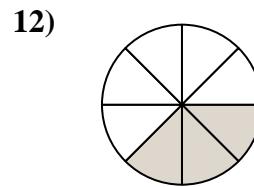

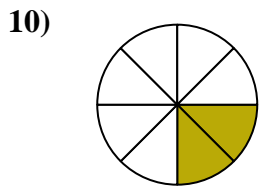
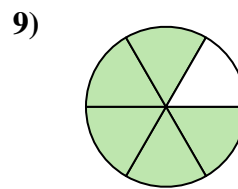
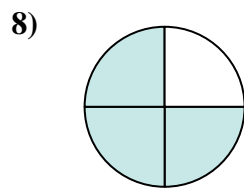
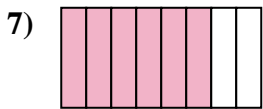
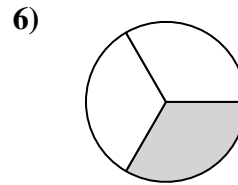
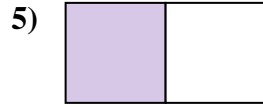
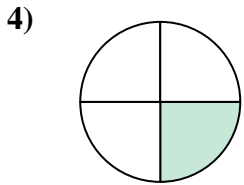
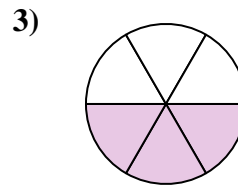
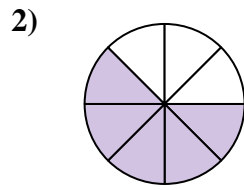
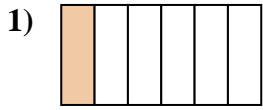
16. _____

17. _____

18. _____



Ecrire la fraction de la représentation de la partie colorée du camembert.

**Réponses**1. $\frac{1}{6}$ 2. $\frac{5}{8}$ 3. $\frac{3}{6}$ 4. $\frac{1}{4}$ 5. $\frac{1}{2}$ 6. $\frac{1}{3}$ 7. $\frac{6}{8}$ 8. $\frac{3}{4}$ 9. $\frac{5}{6}$ 10. $\frac{2}{8}$ 11. $\frac{2}{3}$ 12. $\frac{3}{8}$ 13. $\frac{7}{8}$ 14. $\frac{2}{4}$ 15. $\frac{2}{6}$ 16. $\frac{4}{8}$ 17. $\frac{1}{8}$ 18. $\frac{4}{6}$