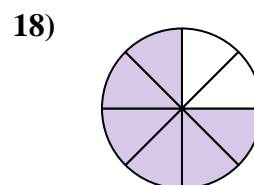
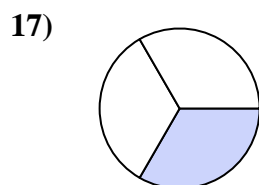
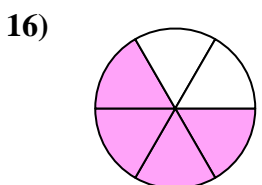
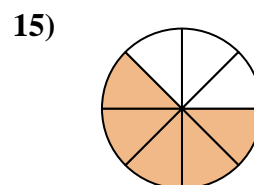
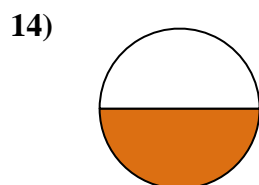
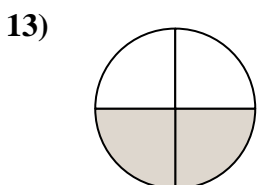
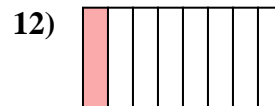

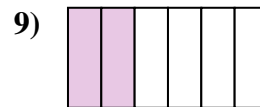
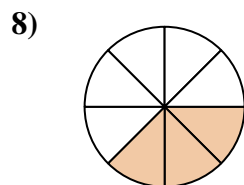

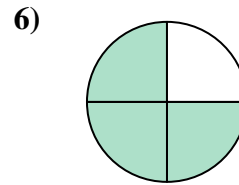
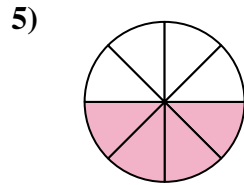
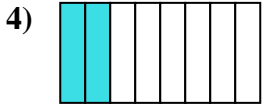
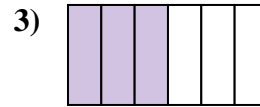
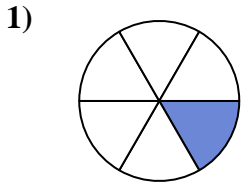




Ecrire la fraction de la représentation de la partie colorée du camembert.

Réponses

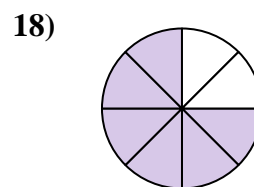
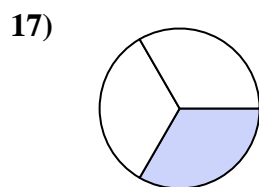
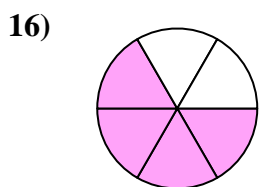
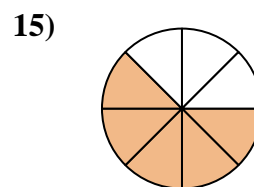
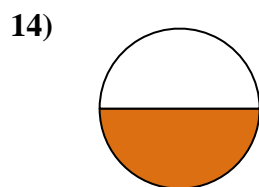
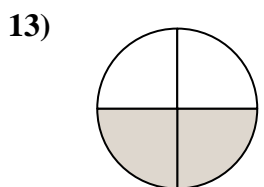
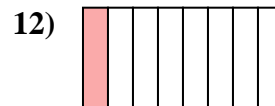

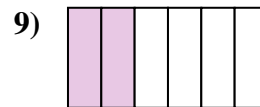
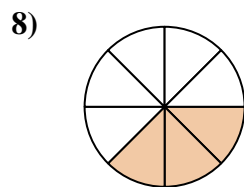

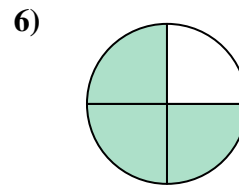
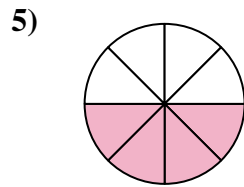
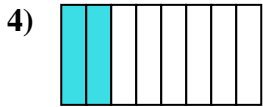
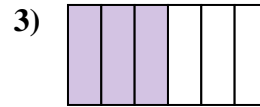
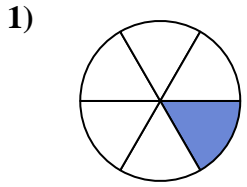


1. _____
2. _____
3. _____
4. _____
5. _____
6. _____
7. _____
8. _____
9. _____
10. _____
11. _____
12. _____
13. _____
14. _____
15. _____
16. _____
17. _____
18. _____



Ecrire la fraction de la représentation de la partie colorée du camembert.

Réponses



1. 1/6
2. 5/6
3. 3/6
4. 2/8
5. 4/8
6. 3/4
7. 1/4
8. 3/8
9. 2/6
10. 2/3
11. 7/8
12. 1/8
13. 2/4
14. 1/2
15. 5/8
16. 4/6
17. 1/3
18. 6/8