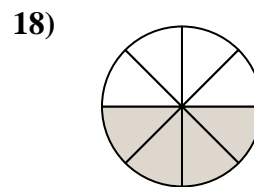
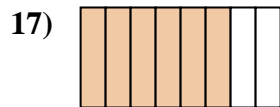
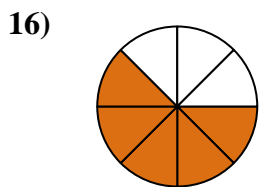
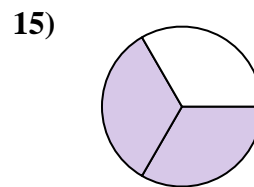
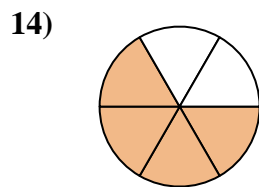
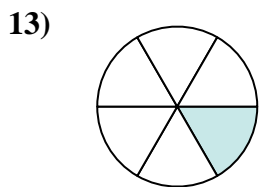
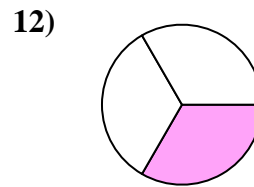
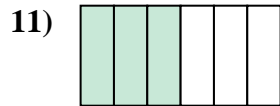
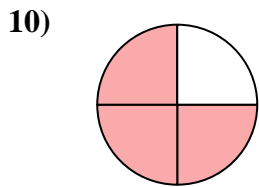
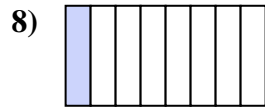
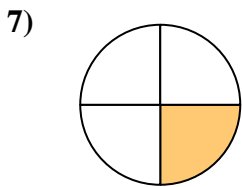
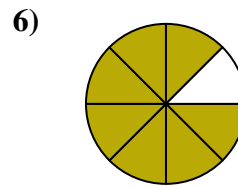
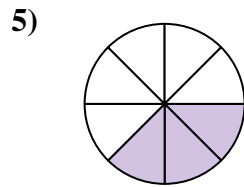
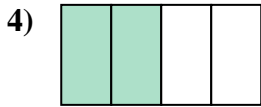
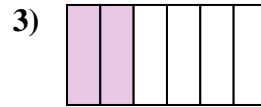
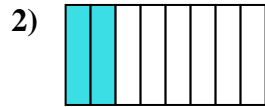




Ecrire la fraction de la représentation de la partie colorée du camembert.



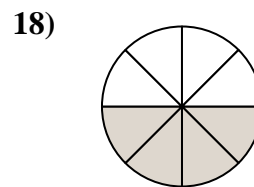
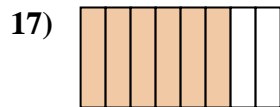
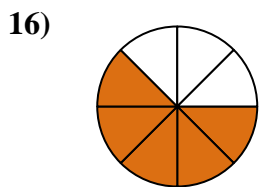
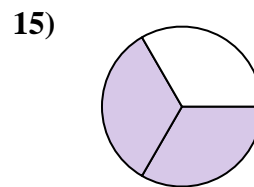
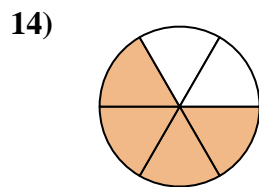
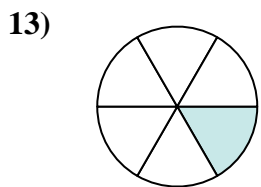
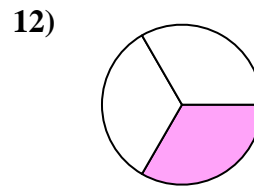
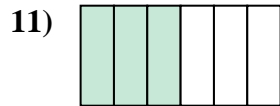
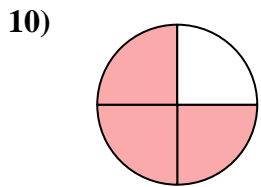
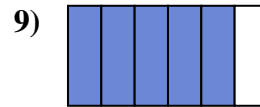
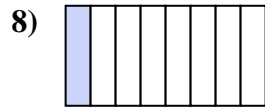
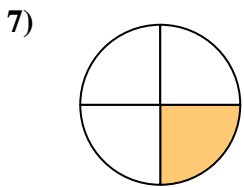
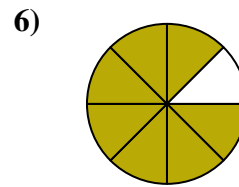
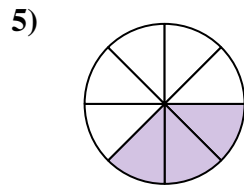
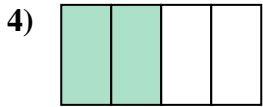
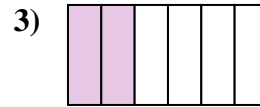
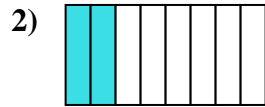
**Réponses**

1. \_\_\_\_\_
2. \_\_\_\_\_
3. \_\_\_\_\_
4. \_\_\_\_\_
5. \_\_\_\_\_
6. \_\_\_\_\_
7. \_\_\_\_\_
8. \_\_\_\_\_
9. \_\_\_\_\_
10. \_\_\_\_\_
11. \_\_\_\_\_
12. \_\_\_\_\_
13. \_\_\_\_\_
14. \_\_\_\_\_
15. \_\_\_\_\_
16. \_\_\_\_\_
17. \_\_\_\_\_
18. \_\_\_\_\_



Ecrire la fraction de la représentation de la partie colorée du camembert.

**Réponses**



1. 1/2

2. 2/8

3. 2/6

4. 2/4

5. 3/8

6. 7/8

7. 1/4

8. 1/8

9. 5/6

10. 3/4

11. 3/6

12. 1/3

13. 1/6

14. 4/6

15. 2/3

16. 5/8

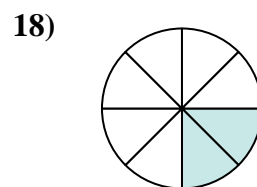
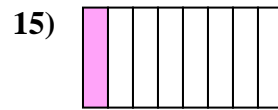
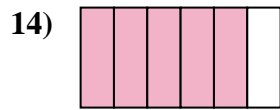
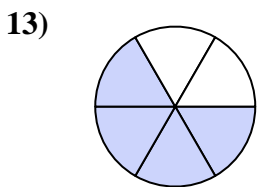
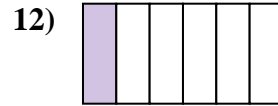
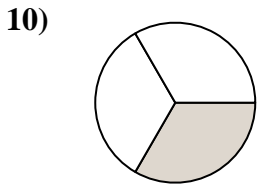
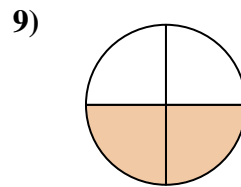
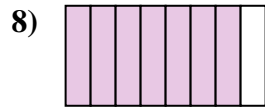
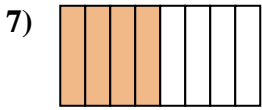
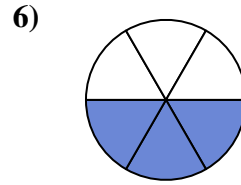
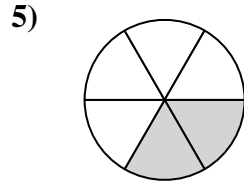
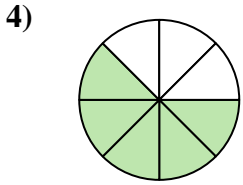
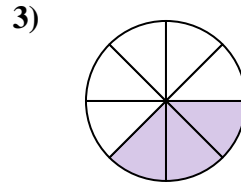
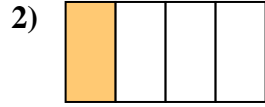
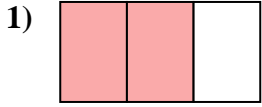
17. 6/8

18. 4/8



Ecrire la fraction de la représentation de la partie colorée du camembert.

**Réponses**



1. \_\_\_\_\_

2. \_\_\_\_\_

3. \_\_\_\_\_

4. \_\_\_\_\_

5. \_\_\_\_\_

6. \_\_\_\_\_

7. \_\_\_\_\_

8. \_\_\_\_\_

9. \_\_\_\_\_

10. \_\_\_\_\_

11. \_\_\_\_\_

12. \_\_\_\_\_

13. \_\_\_\_\_

14. \_\_\_\_\_

15. \_\_\_\_\_

16. \_\_\_\_\_

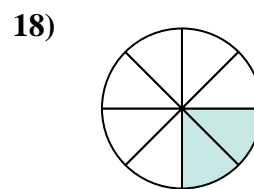
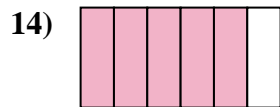
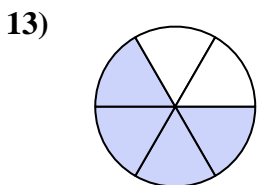
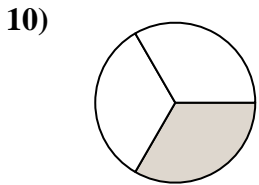
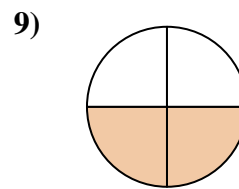
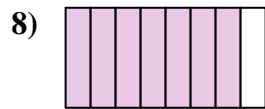
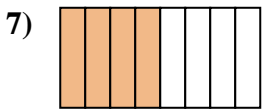
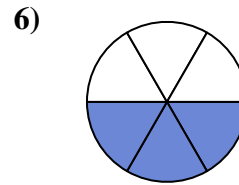
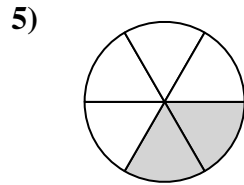
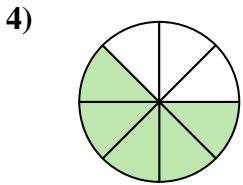
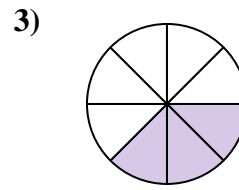
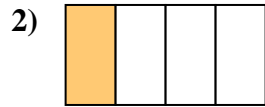
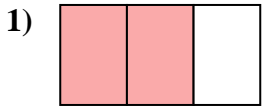
17. \_\_\_\_\_

18. \_\_\_\_\_



Ecrire la fraction de la représentation de la partie colorée du camembert.

**Réponses**



1. 2/3

2. 1/4

3. 3/8

4. 5/8

5. 2/6

6. 3/6

7. 4/8

8. 7/8

9. 2/4

10. 1/3

11. 1/2

12. 1/6

13. 4/6

14. 5/6

15. 1/8

16. 3/4

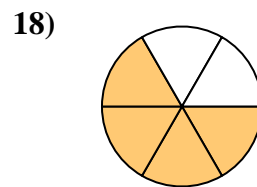
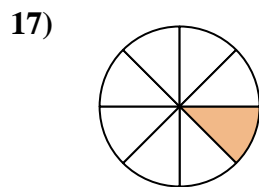
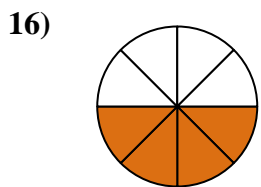
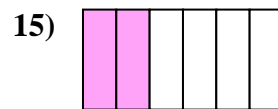
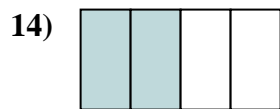
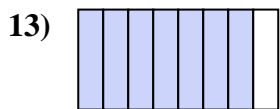
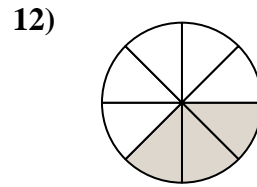

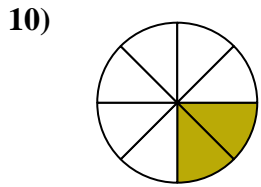
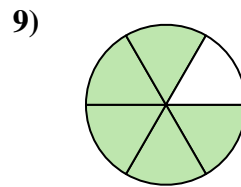
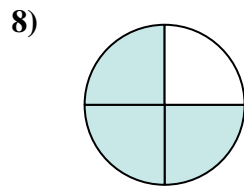
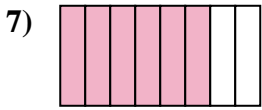
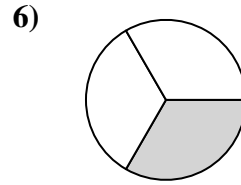

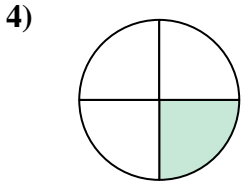
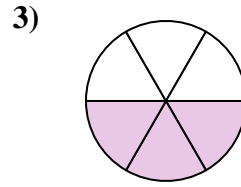
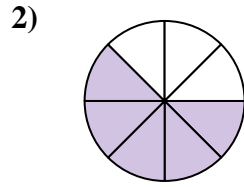
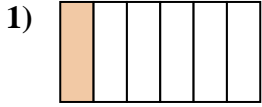
17. 6/8

18. 2/8



Ecrire la fraction de la représentation de la partie colorée du camembert.

**Réponses**



1. \_\_\_\_\_

2. \_\_\_\_\_

3. \_\_\_\_\_

4. \_\_\_\_\_

5. \_\_\_\_\_

6. \_\_\_\_\_

7. \_\_\_\_\_

8. \_\_\_\_\_

9. \_\_\_\_\_

10. \_\_\_\_\_

11. \_\_\_\_\_

12. \_\_\_\_\_

13. \_\_\_\_\_

14. \_\_\_\_\_

15. \_\_\_\_\_

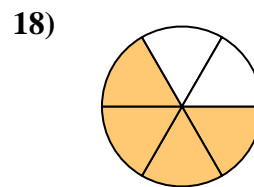
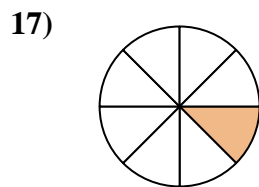
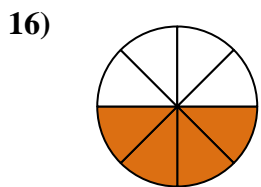
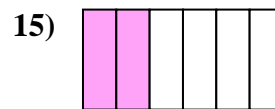
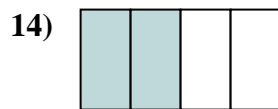
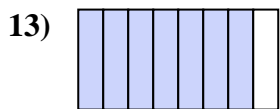
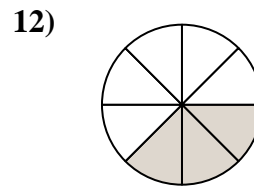

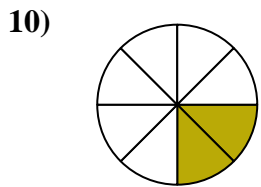
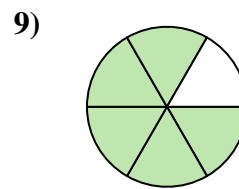
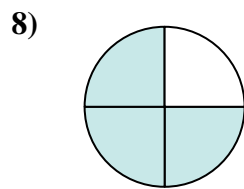
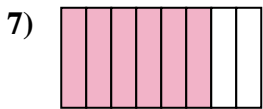
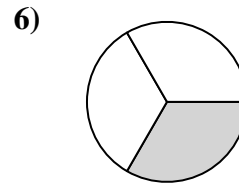
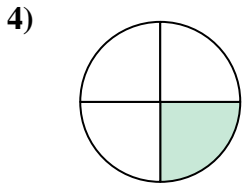
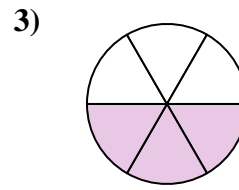
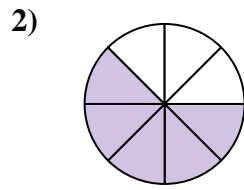
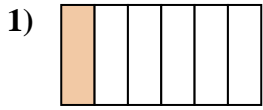
16. \_\_\_\_\_

17. \_\_\_\_\_

18. \_\_\_\_\_



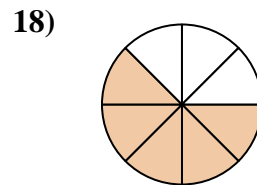
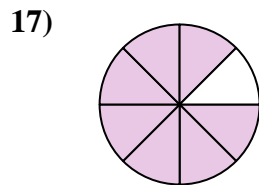
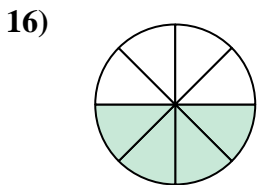
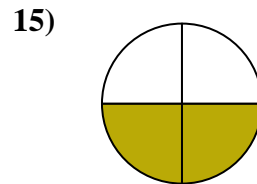
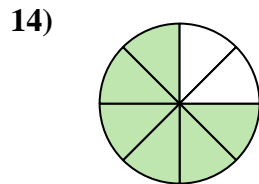
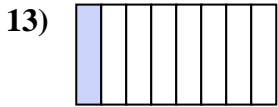
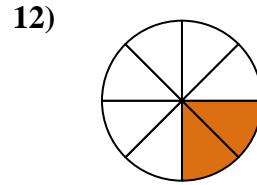
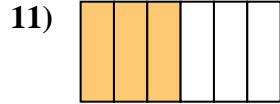
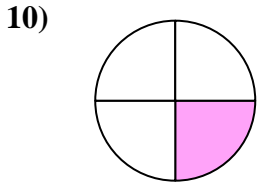
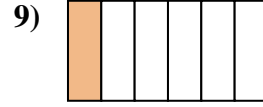
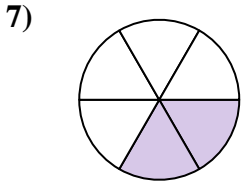
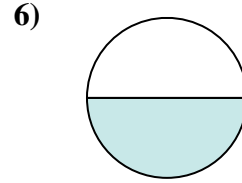
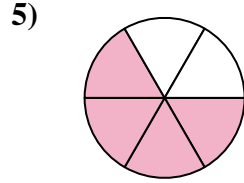
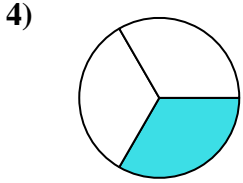
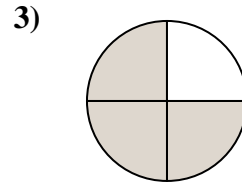
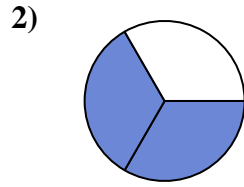
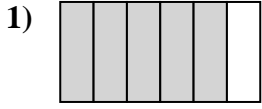
Ecrire la fraction de la représentation de la partie colorée du camembert.

**Réponses**1.  $\frac{1}{6}$ 2.  $\frac{5}{8}$ 3.  $\frac{3}{6}$ 4.  $\frac{1}{4}$ 5.  $\frac{1}{2}$ 6.  $\frac{1}{3}$ 7.  $\frac{6}{8}$ 8.  $\frac{3}{4}$ 9.  $\frac{5}{6}$ 10.  $\frac{2}{8}$ 11.  $\frac{2}{3}$ 12.  $\frac{3}{8}$ 13.  $\frac{7}{8}$ 14.  $\frac{2}{4}$ 15.  $\frac{2}{6}$ 16.  $\frac{4}{8}$ 17.  $\frac{1}{8}$ 18.  $\frac{4}{6}$



Ecrire la fraction de la représentation de la partie colorée du camembert.

**Réponses**



1. \_\_\_\_\_

2. \_\_\_\_\_

3. \_\_\_\_\_

4. \_\_\_\_\_

5. \_\_\_\_\_

6. \_\_\_\_\_

7. \_\_\_\_\_

8. \_\_\_\_\_

9. \_\_\_\_\_

10. \_\_\_\_\_

11. \_\_\_\_\_

12. \_\_\_\_\_

13. \_\_\_\_\_

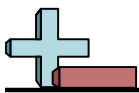
14. \_\_\_\_\_

15. \_\_\_\_\_

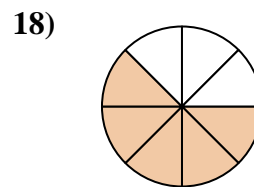
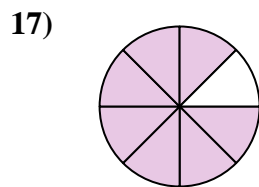
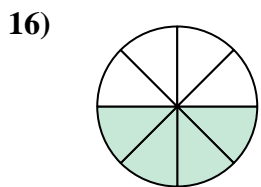
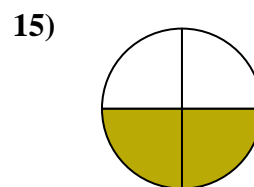
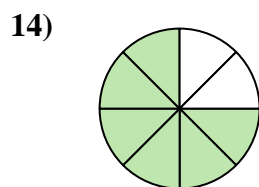
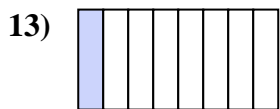
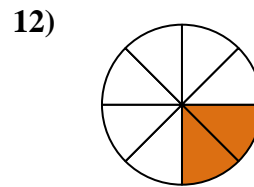
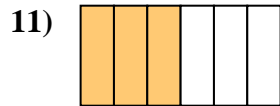
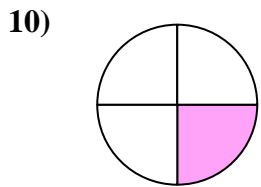
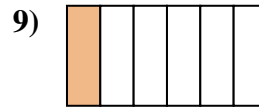
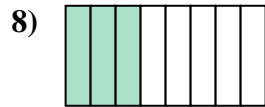
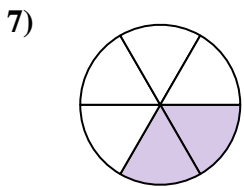
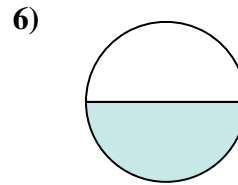
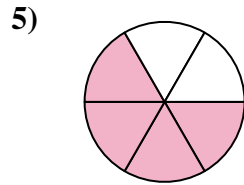
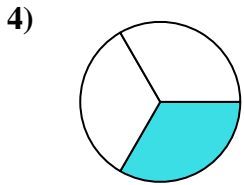
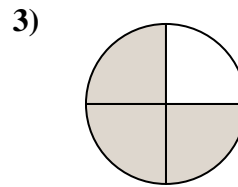
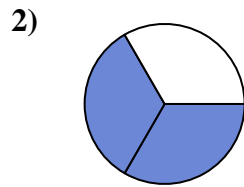
16. \_\_\_\_\_

17. \_\_\_\_\_

18. \_\_\_\_\_



Ecrire la fraction de la représentation de la partie colorée du camembert.



**Réponses**

1.  $\frac{5}{6}$

2.  $\frac{2}{3}$

3.  $\frac{3}{4}$

4.  $\frac{1}{3}$

5.  $\frac{4}{6}$

6.  $\frac{1}{2}$

7.  $\frac{2}{6}$

8.  $\frac{3}{8}$

9.  $\frac{1}{6}$

10.  $\frac{1}{4}$

11.  $\frac{3}{6}$

12.  $\frac{2}{8}$

13.  $\frac{1}{8}$

14.  $\frac{6}{8}$

15.  $\frac{2}{4}$

16.  $\frac{4}{8}$

17.  $\frac{7}{8}$

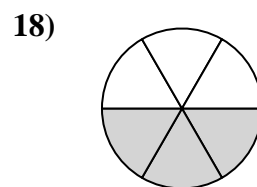
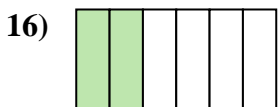
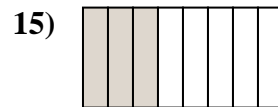
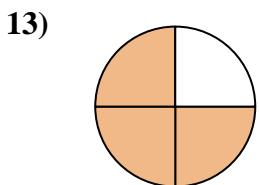
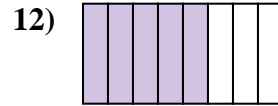
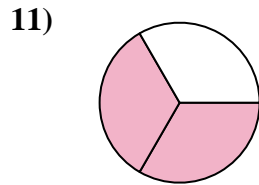
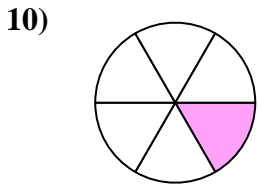
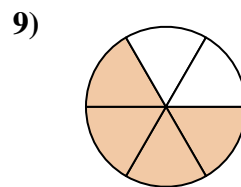
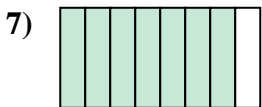
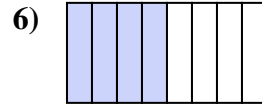
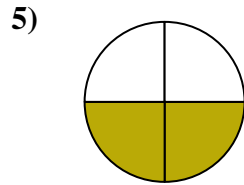
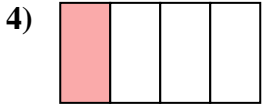
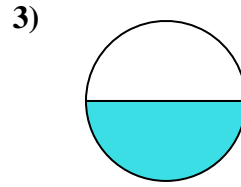
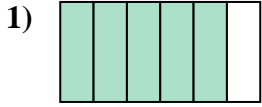
18.  $\frac{5}{8}$





Ecrire la fraction de la représentation de la partie colorée du camembert.

**Réponses**



1. \_\_\_\_\_

2. \_\_\_\_\_

3. \_\_\_\_\_

4. \_\_\_\_\_

5. \_\_\_\_\_

6. \_\_\_\_\_

7. \_\_\_\_\_

8. \_\_\_\_\_

9. \_\_\_\_\_

10. \_\_\_\_\_

11. \_\_\_\_\_

12. \_\_\_\_\_

13. \_\_\_\_\_

14. \_\_\_\_\_

15. \_\_\_\_\_

16. \_\_\_\_\_

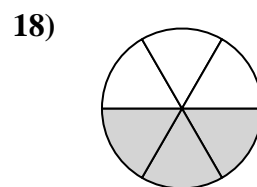
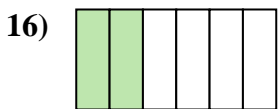
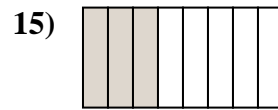
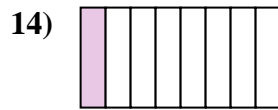
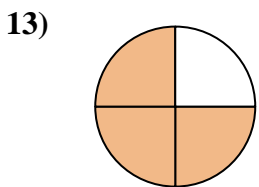
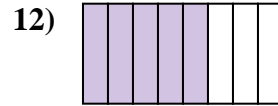
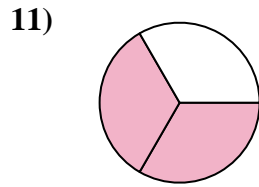
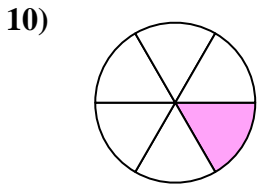
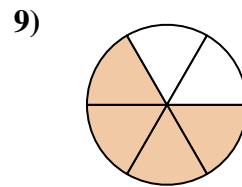
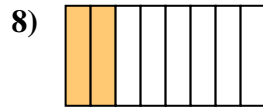
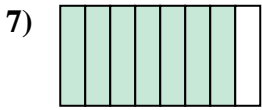
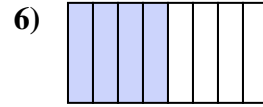
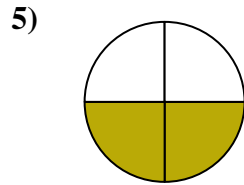
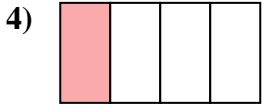
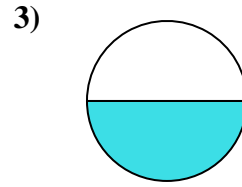
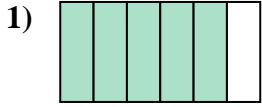
17. \_\_\_\_\_

18. \_\_\_\_\_



Ecrire la fraction de la représentation de la partie colorée du camembert.

**Réponses**



1.  $\frac{5}{6}$

2.  $\frac{1}{3}$

3.  $\frac{1}{2}$

4.  $\frac{1}{4}$

5.  $\frac{2}{4}$

6.  $\frac{4}{8}$

7.  $\frac{7}{8}$

8.  $\frac{2}{8}$

9.  $\frac{4}{6}$

10.  $\frac{1}{6}$

11.  $\frac{2}{3}$

12.  $\frac{5}{8}$

13.  $\frac{3}{4}$

14.  $\frac{1}{8}$

15.  $\frac{3}{8}$

16.  $\frac{2}{6}$

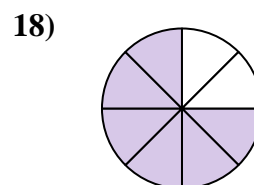
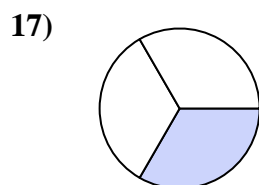
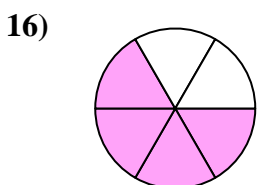
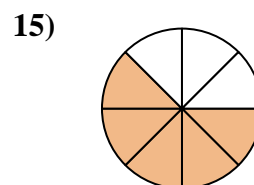
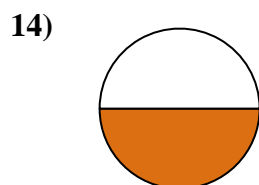
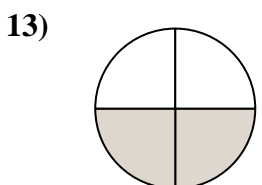
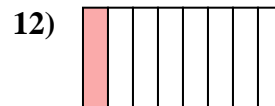

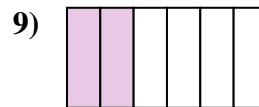
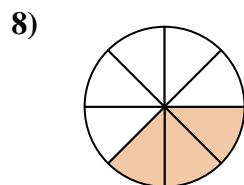

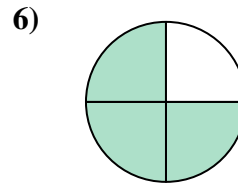
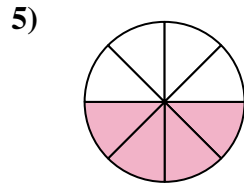
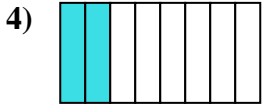
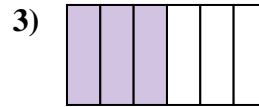
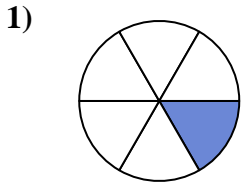
17.  $\frac{6}{8}$

18.  $\frac{3}{6}$



Ecrire la fraction de la représentation de la partie colorée du camembert.

**Réponses**

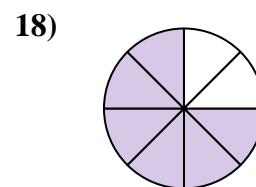
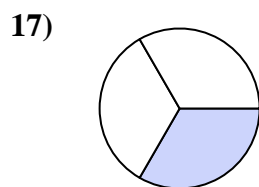
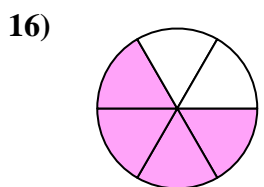
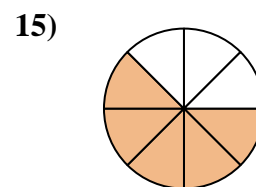
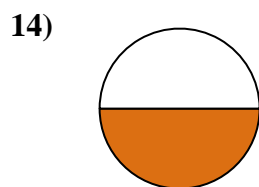
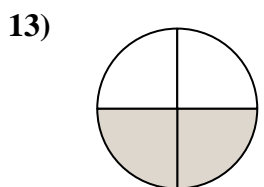
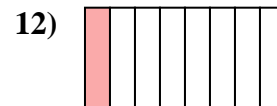

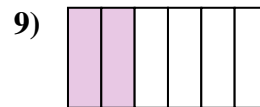
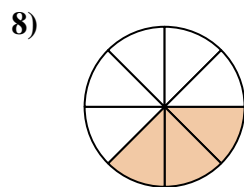

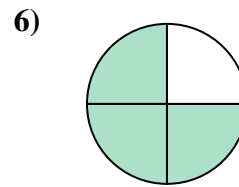
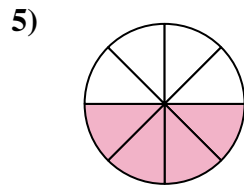
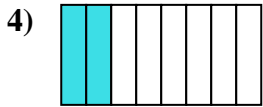
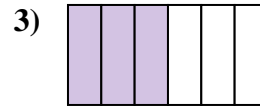
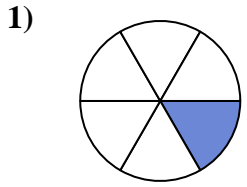


1. \_\_\_\_\_
2. \_\_\_\_\_
3. \_\_\_\_\_
4. \_\_\_\_\_
5. \_\_\_\_\_
6. \_\_\_\_\_
7. \_\_\_\_\_
8. \_\_\_\_\_
9. \_\_\_\_\_
10. \_\_\_\_\_
11. \_\_\_\_\_
12. \_\_\_\_\_
13. \_\_\_\_\_
14. \_\_\_\_\_
15. \_\_\_\_\_
16. \_\_\_\_\_
17. \_\_\_\_\_
18. \_\_\_\_\_



Ecrire la fraction de la représentation de la partie colorée du camembert.

**Réponses**


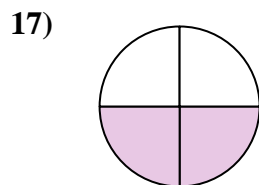
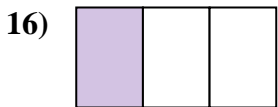
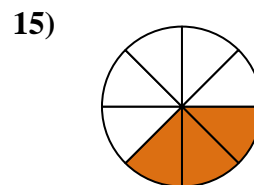
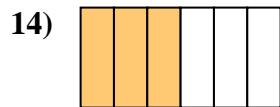
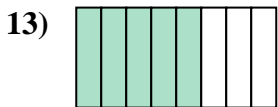
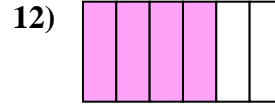
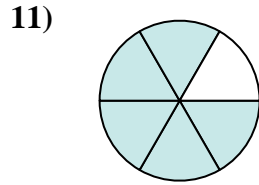
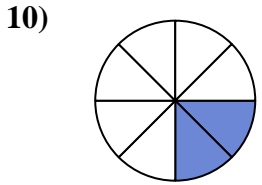
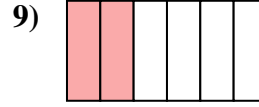
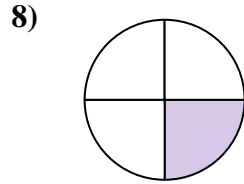
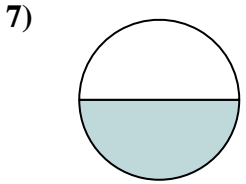
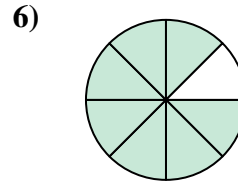
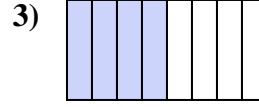
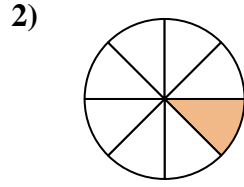
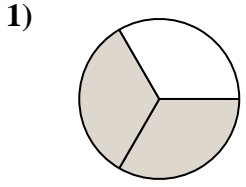


1. 1/6
2. 5/6
3. 3/6
4. 2/8
5. 4/8
6. 3/4
7. 1/4
8. 3/8
9. 2/6
10. 2/3
11. 7/8
12. 1/8
13. 2/4
14. 1/2
15. 5/8
16. 4/6
17. 1/3
18. 6/8



Ecrire la fraction de la représentation de la partie colorée du camembert.

**Réponses**



1. \_\_\_\_\_

2. \_\_\_\_\_

3. \_\_\_\_\_

4. \_\_\_\_\_

5. \_\_\_\_\_

6. \_\_\_\_\_

7. \_\_\_\_\_

8. \_\_\_\_\_

9. \_\_\_\_\_

10. \_\_\_\_\_

11. \_\_\_\_\_

12. \_\_\_\_\_

13. \_\_\_\_\_

14. \_\_\_\_\_

15. \_\_\_\_\_

16. \_\_\_\_\_


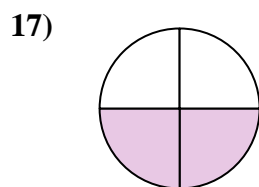

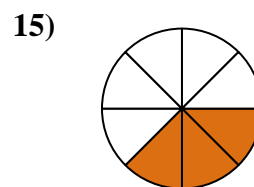
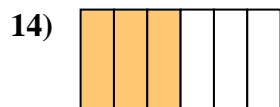
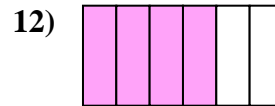
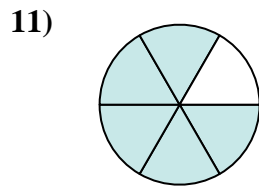
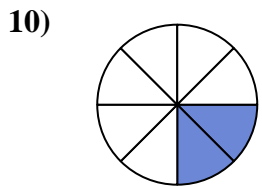
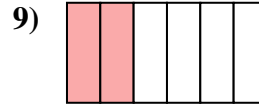
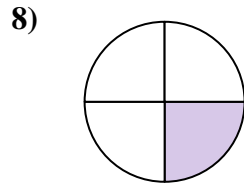
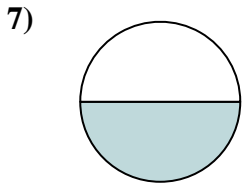
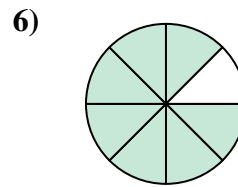
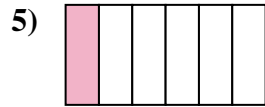
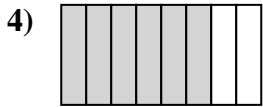
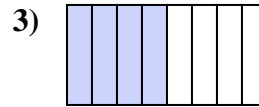
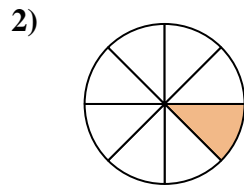
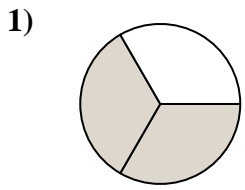
17. \_\_\_\_\_

18. \_\_\_\_\_



Ecrire la fraction de la représentation de la partie colorée du camembert.

**Réponses**



1.  $\frac{2}{3}$

2.  $\frac{1}{8}$

3.  $\frac{4}{8}$

4.  $\frac{6}{8}$

5.  $\frac{1}{6}$

6.  $\frac{7}{8}$

7.  $\frac{1}{2}$

8.  $\frac{1}{4}$

9.  $\frac{2}{6}$

10.  $\frac{2}{8}$

11.  $\frac{5}{6}$

12.  $\frac{4}{6}$

13.  $\frac{5}{8}$

14.  $\frac{3}{6}$

15.  $\frac{3}{8}$

16.  $\frac{1}{3}$


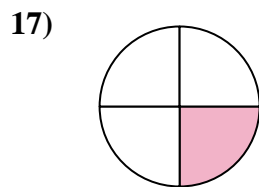
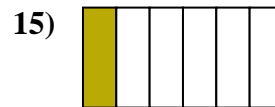
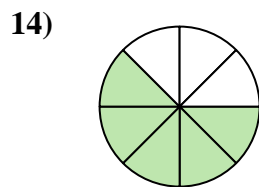
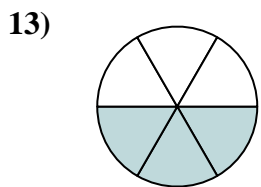
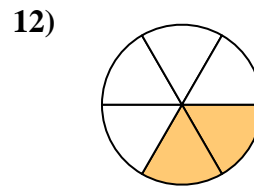
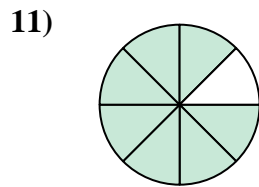

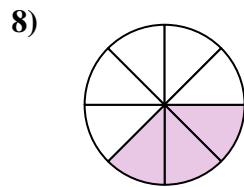
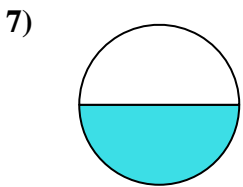
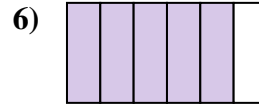
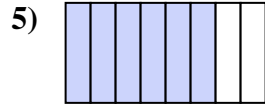
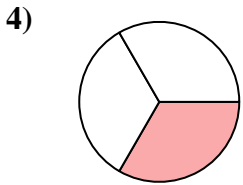
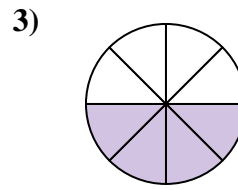
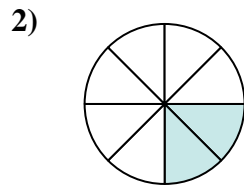
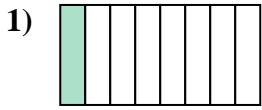
17.  $\frac{2}{4}$

18.  $\frac{3}{4}$

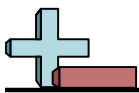


Ecrire la fraction de la représentation de la partie colorée du camembert.

**Réponses**

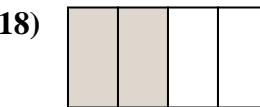
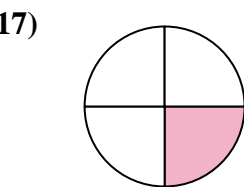
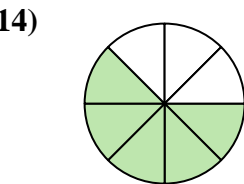
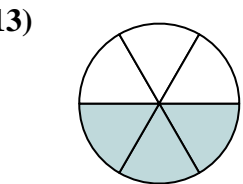
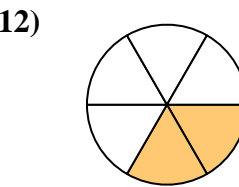
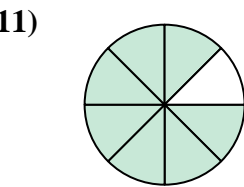
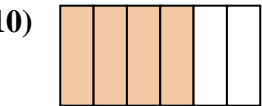
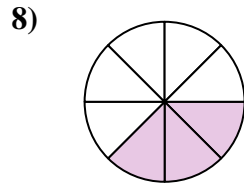
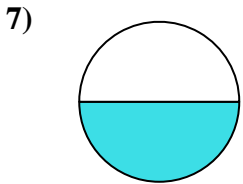
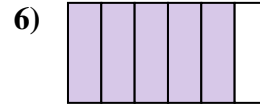
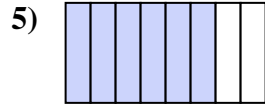
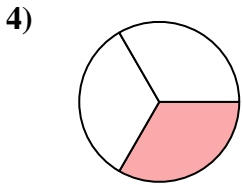
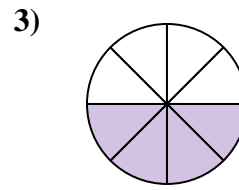
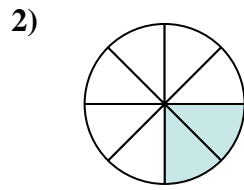
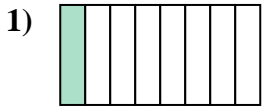


- 1. \_\_\_\_\_
- 2. \_\_\_\_\_
- 3. \_\_\_\_\_
- 4. \_\_\_\_\_
- 5. \_\_\_\_\_
- 6. \_\_\_\_\_
- 7. \_\_\_\_\_
- 8. \_\_\_\_\_
- 9. \_\_\_\_\_
- 10. \_\_\_\_\_
- 11. \_\_\_\_\_
- 12. \_\_\_\_\_
- 13. \_\_\_\_\_
- 14. \_\_\_\_\_
- 15. \_\_\_\_\_
- 16. \_\_\_\_\_
- 17. \_\_\_\_\_
- 18. \_\_\_\_\_



Ecrire la fraction de la représentation de la partie colorée du camembert.

**Réponses**



1. 1/8

2. 2/8

3. 4/8

4. 1/3

5. 6/8

6. 5/6

7. 1/2

8. 3/8

9. 2/3

10. 4/6

11. 7/8

12. 2/6

13. 3/6

14. 5/8

15. 1/6

16. 3/4

17. 1/4

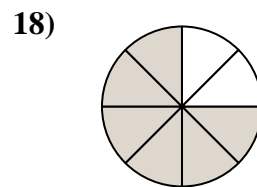
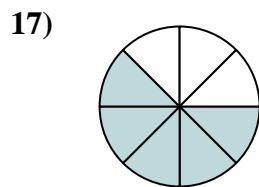
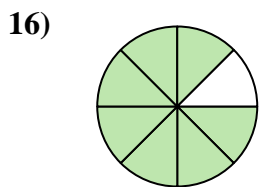
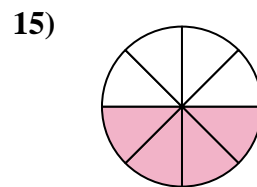
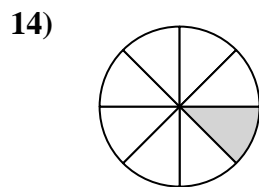
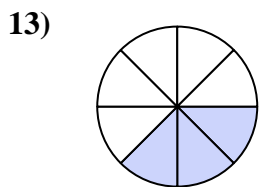
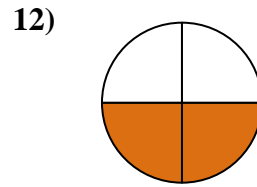
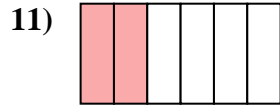
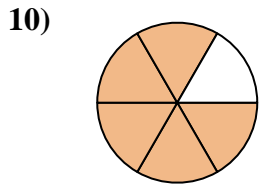
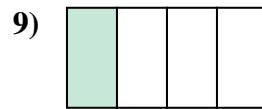
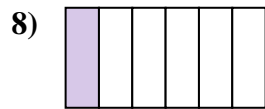
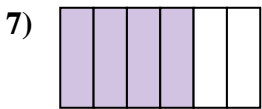
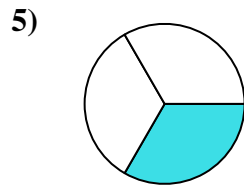

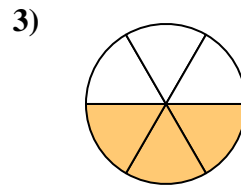
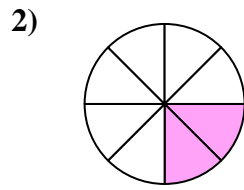
18. 2/4





Ecrire la fraction de la représentation de la partie colorée du camembert.

**Réponses**



1. \_\_\_\_\_

2. \_\_\_\_\_

3. \_\_\_\_\_

4. \_\_\_\_\_

5. \_\_\_\_\_

6. \_\_\_\_\_

7. \_\_\_\_\_

8. \_\_\_\_\_

9. \_\_\_\_\_

10. \_\_\_\_\_

11. \_\_\_\_\_

12. \_\_\_\_\_

13. \_\_\_\_\_

14. \_\_\_\_\_

15. \_\_\_\_\_

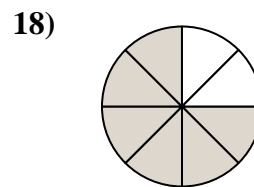
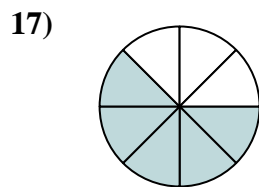
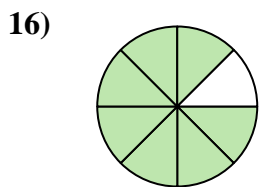
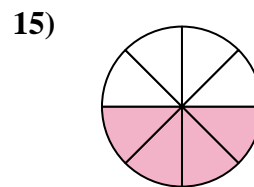
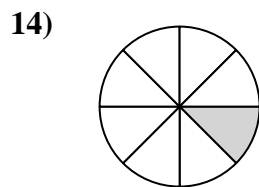
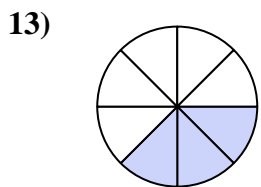
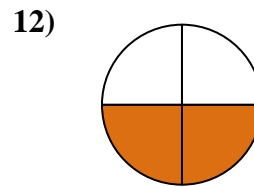
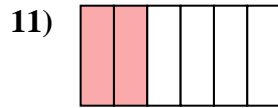
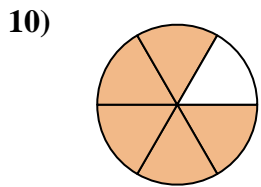
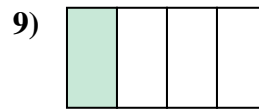
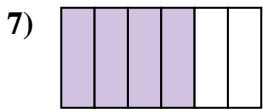
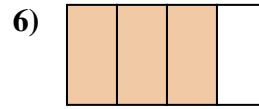
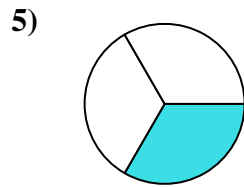

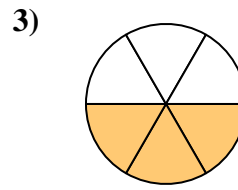
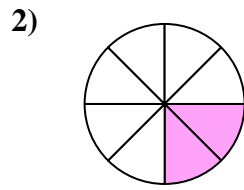
16. \_\_\_\_\_

17. \_\_\_\_\_

18. \_\_\_\_\_



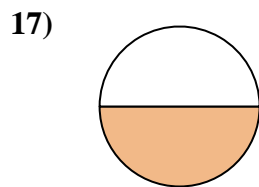
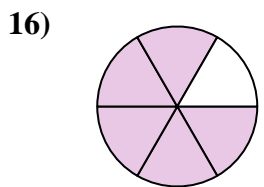
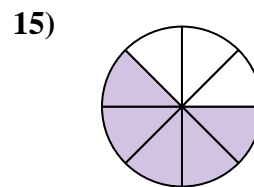
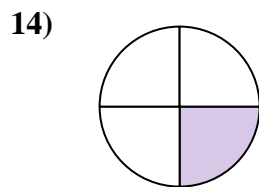
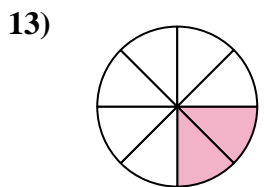
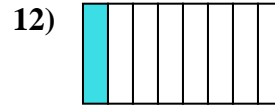
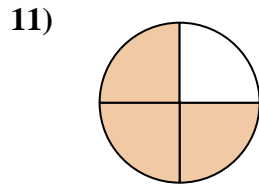
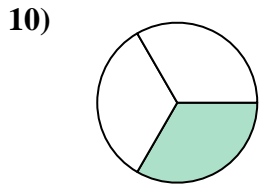
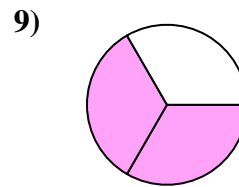
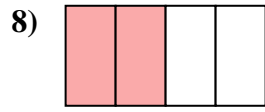
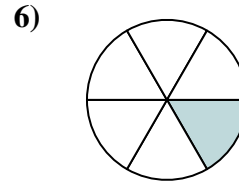
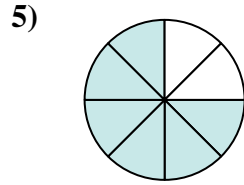
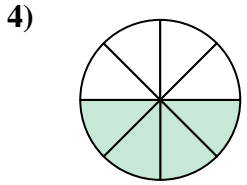
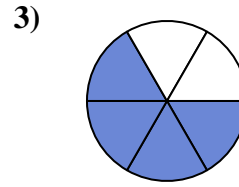
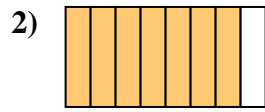
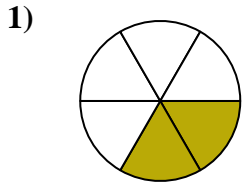
Ecrire la fraction de la représentation de la partie colorée du camembert.

**Réponses**1.  $\frac{1}{2}$ 2.  $\frac{2}{8}$ 3.  $\frac{3}{6}$ 4.  $\frac{2}{3}$ 5.  $\frac{1}{3}$ 6.  $\frac{3}{4}$ 7.  $\frac{4}{6}$ 8.  $\frac{1}{6}$ 9.  $\frac{1}{4}$ 10.  $\frac{5}{6}$ 11.  $\frac{2}{6}$ 12.  $\frac{2}{4}$ 13.  $\frac{3}{8}$ 14.  $\frac{1}{8}$ 15.  $\frac{4}{8}$ 16.  $\frac{7}{8}$ 17.  $\frac{5}{8}$ 18.  $\frac{6}{8}$



Ecrire la fraction de la représentation de la partie colorée du camembert.

**Réponses**

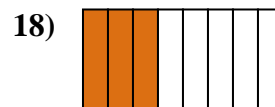
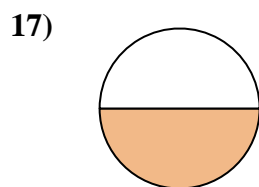
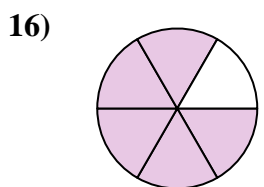
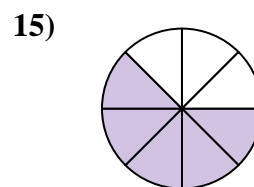
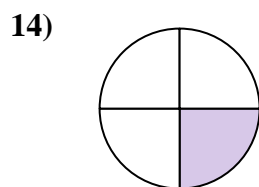
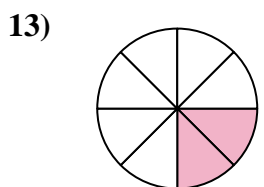
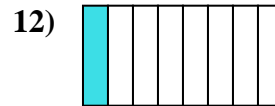
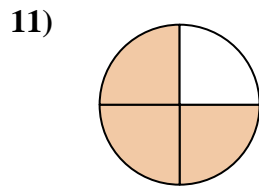
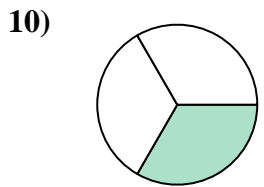
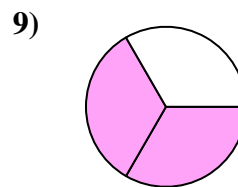
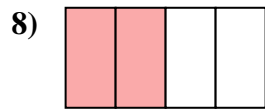
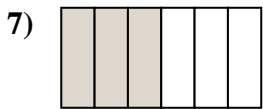
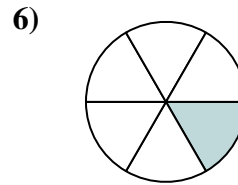
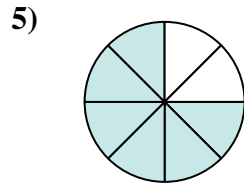
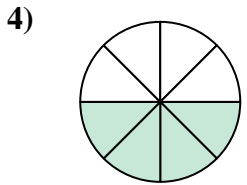
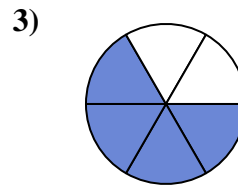
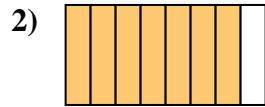
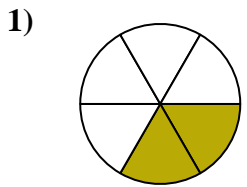


1. \_\_\_\_\_
2. \_\_\_\_\_
3. \_\_\_\_\_
4. \_\_\_\_\_
5. \_\_\_\_\_
6. \_\_\_\_\_
7. \_\_\_\_\_
8. \_\_\_\_\_
9. \_\_\_\_\_
10. \_\_\_\_\_
11. \_\_\_\_\_
12. \_\_\_\_\_
13. \_\_\_\_\_
14. \_\_\_\_\_
15. \_\_\_\_\_
16. \_\_\_\_\_
17. \_\_\_\_\_
18. \_\_\_\_\_



Ecrire la fraction de la représentation de la partie colorée du camembert.

**Réponses**



1. 2/6

2. 7/8

3. 4/6

4. 4/8

5. 6/8

6. 1/6

7. 3/6

8. 2/4

9. 2/3

10. 1/3

11. 3/4

12. 1/8

13. 2/8

14. 1/4

15. 5/8

16. 5/6

17. 1/2

18. 3/8