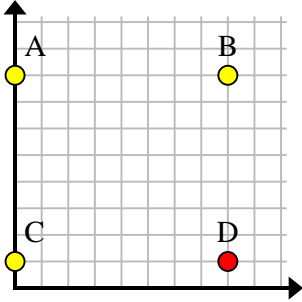


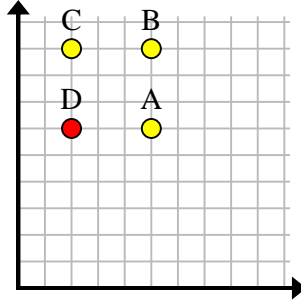


Trouvez les coordonnées du point D pour faire un rectangle.

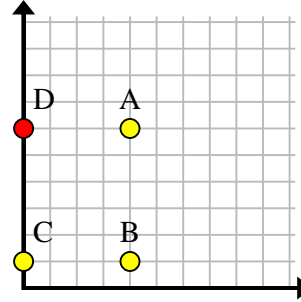
Ex)



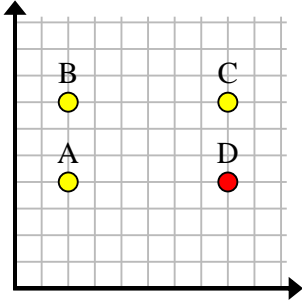
1)



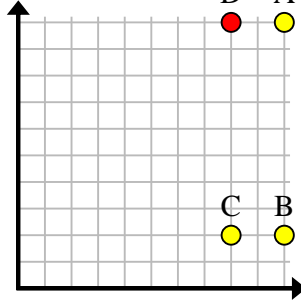
2)



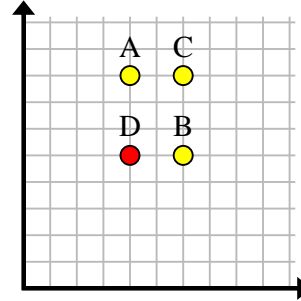
3)



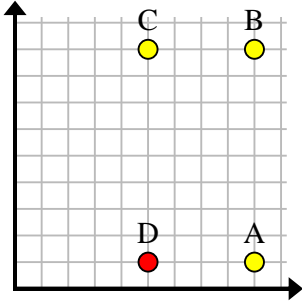
4)



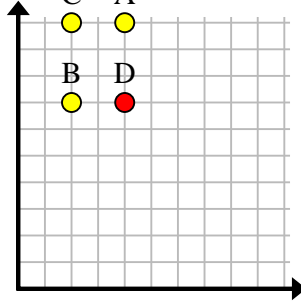
5)



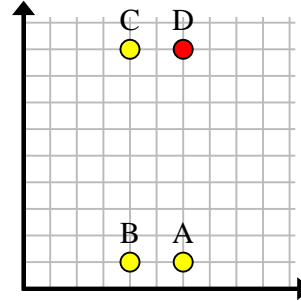
6)



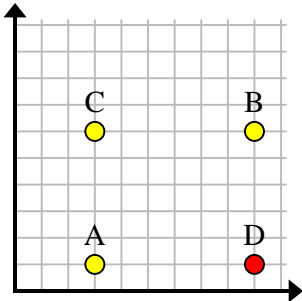
7)



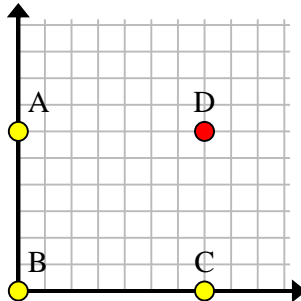
8)



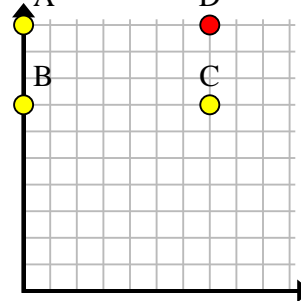
9)



10)



11)



Réponses

Ex. (8, 1)1. (2, 6)2. (0, 6)3. (8, 4)4. (8, 10)5. (4, 5)6. (5, 1)7. (4, 7)8. (6, 9)9. (9, 1)10. (7, 6)11. (7, 10)