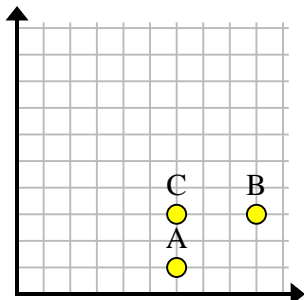


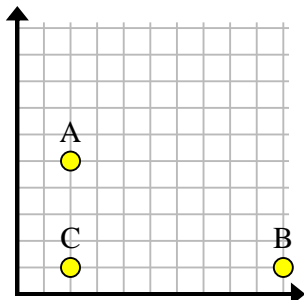


Trouvez les coordonnées du point D pour faire un rectangle.

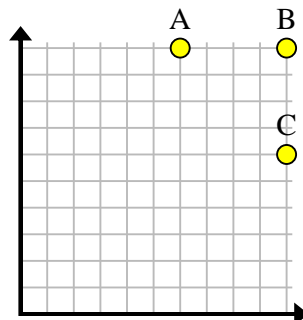
Ex)



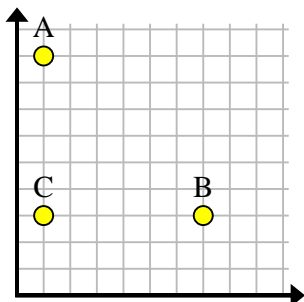
1)



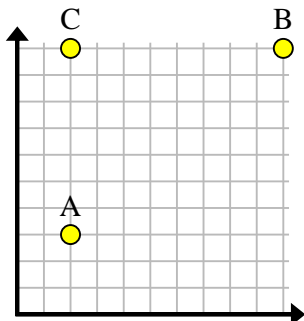
2)



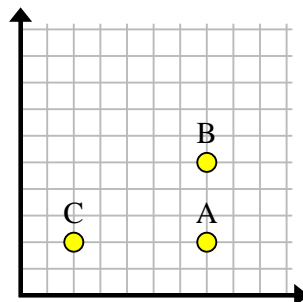
3)



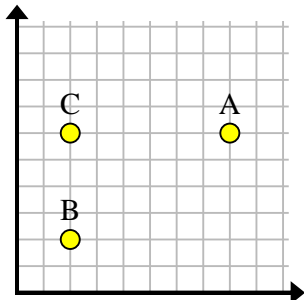
4)



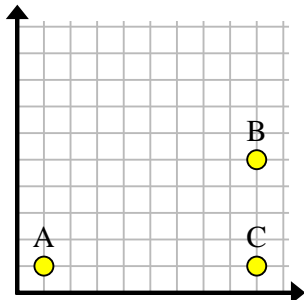
5)



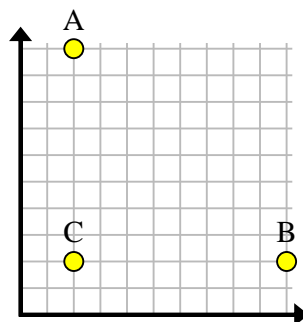
6)



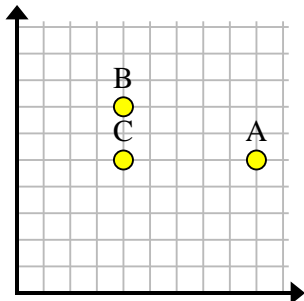
7)



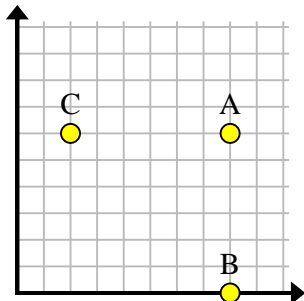
8)



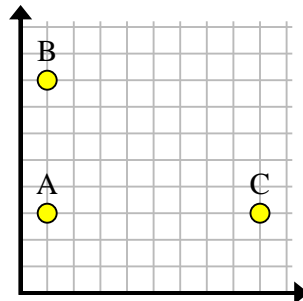
9)



10)



11)

**Réponses**Ex. **(9,1)**

1. \_\_\_\_\_

2. \_\_\_\_\_

3. \_\_\_\_\_

4. \_\_\_\_\_

5. \_\_\_\_\_

6. \_\_\_\_\_

7. \_\_\_\_\_

8. \_\_\_\_\_

9. \_\_\_\_\_

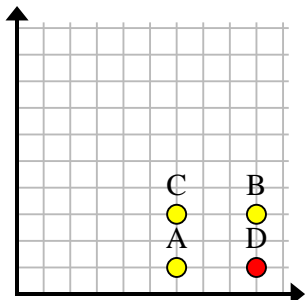
10. \_\_\_\_\_

11. \_\_\_\_\_

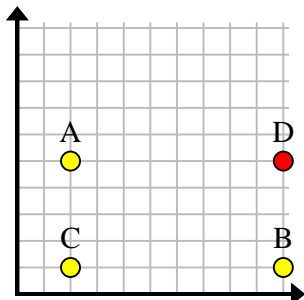


Trouvez les coordonnées du point D pour faire un rectangle.

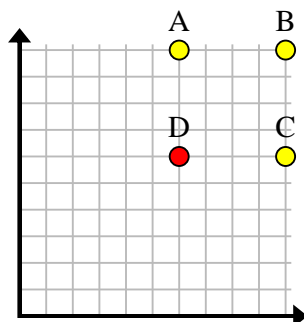
Ex)



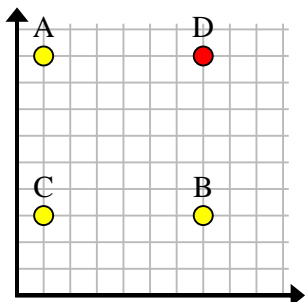
1)



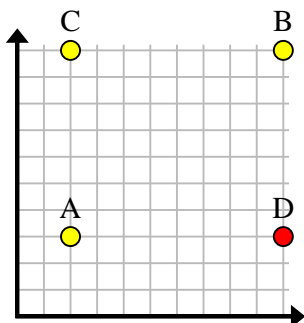
2)



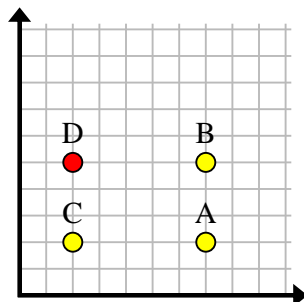
3)



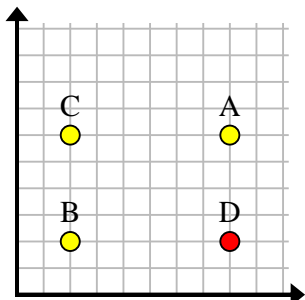
4)



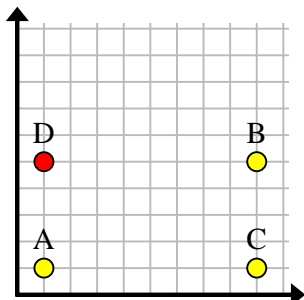
5)



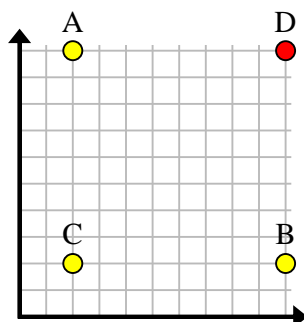
6)



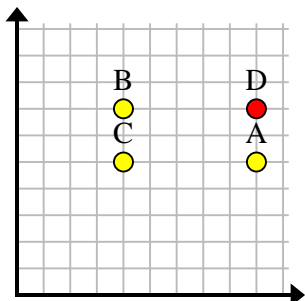
7)



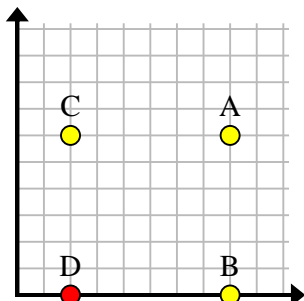
8)



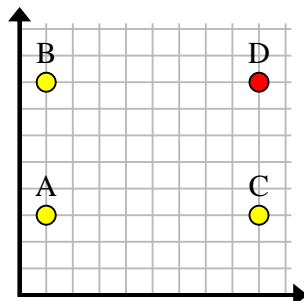
9)



10)



11)

**Réponses**Ex. (9, 1)1. (10, 5)2. (6, 6)3. (7, 9)4. (10, 3)5. (2, 5)6. (8, 2)7. (1, 5)8. (10, 10)9. (9, 7)10. (2, 0)11. (9, 8)