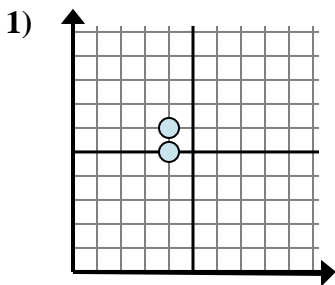


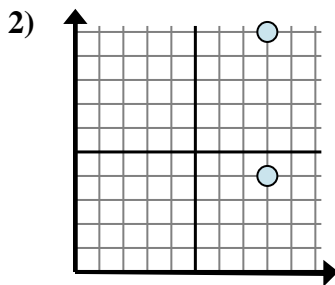


Déterminez quelle expression montre le mieux la distance entre les deux points.

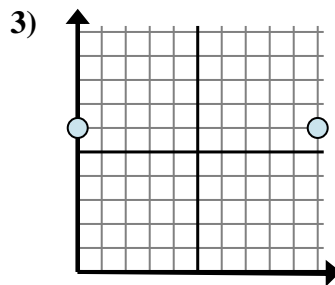
**Réponses**



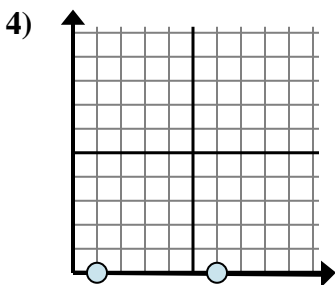
- A.  $6 - 5$
- B.  $4 - 4$
- C.  $5 - 6$
- D.  $6 - 4$



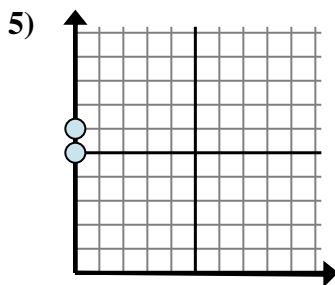
- A.  $4 - 10$
- B.  $8 - 8$
- C.  $8 - 10$
- D.  $10 - 4$



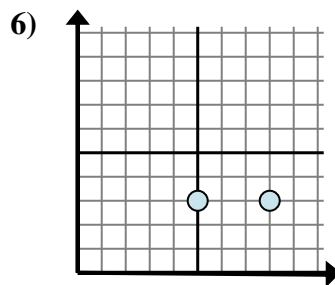
- A.  $10 - 0$
- B.  $0 - 10$
- C.  $6 - 0$
- D.  $6 - 0$



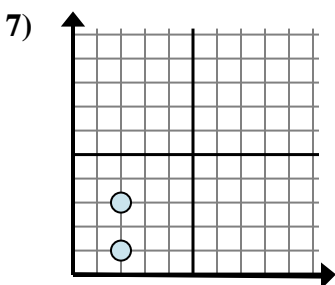
- A.  $0 - 0$
- B.  $0 - 0$
- C.  $0 - 1$
- D.  $6 - 1$



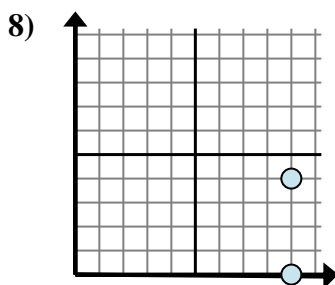
- A.  $0 - 6$
- B.  $0 - 0$
- C.  $6 - 5$
- D.  $6 - 0$



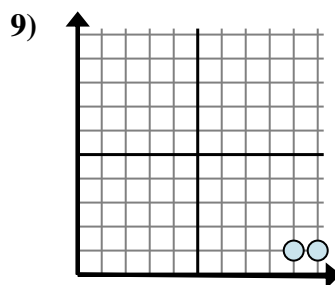
- A.  $3 - 8$
- B.  $8 - 3$
- C.  $3 - 3$
- D.  $8 - 5$



- A.  $2 - 2$
- B.  $3 - 2$
- C.  $3 - 1$
- D.  $2 - 3$



- A.  $0 - 4$
- B.  $9 - 4$
- C.  $4 - 0$
- D.  $9 - 9$



- A.  $1 - 9$
- B.  $10 - 9$
- C.  $1 - 9$
- D.  $9 - 1$

1. \_\_\_\_\_

2. \_\_\_\_\_

3. \_\_\_\_\_

4. \_\_\_\_\_

5. \_\_\_\_\_

6. \_\_\_\_\_

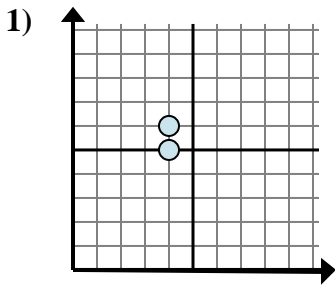
7. \_\_\_\_\_

8. \_\_\_\_\_

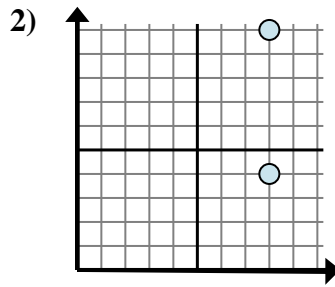
9. \_\_\_\_\_



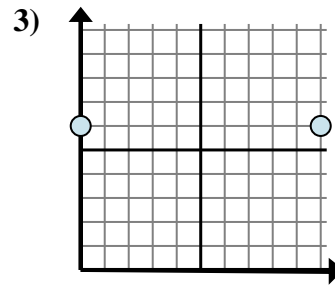
Déterminez quelle expression montre le mieux la distance entre les deux points.



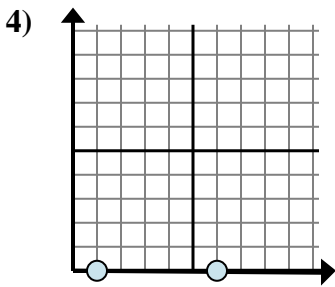
- A.  $6 - 5$
- B.  $4 - 4$
- C.  $5 - 6$
- D.  $6 - 4$



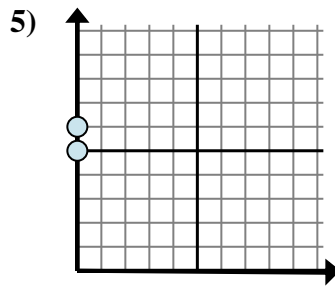
- A.  $4 - 10$
- B.  $8 - 8$
- C.  $8 - 10$
- D.  $10 - 4$



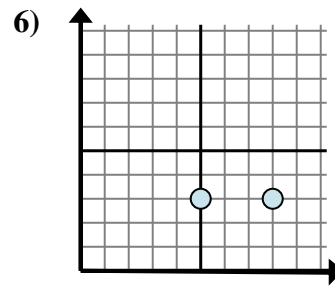
- A.  $10 - 0$
- B.  $0 - 10$
- C.  $6 - 0$
- D.  $6 - 0$



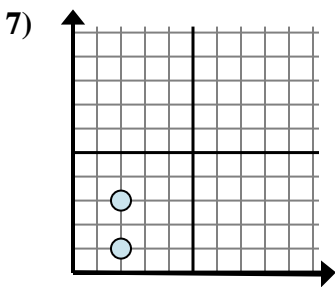
- A.  $0 - 0$
- B.  $0 - 0$
- C.  $0 - 1$
- D.  $6 - 1$



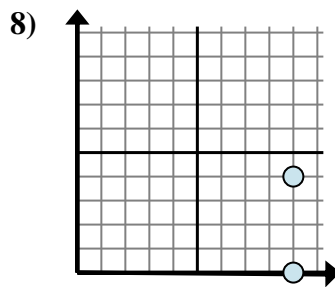
- A.  $0 - 6$
- B.  $0 - 0$
- C.  $6 - 5$
- D.  $6 - 0$



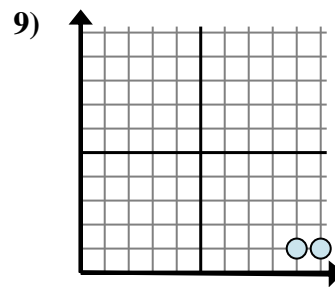
- A.  $3 - 8$
- B.  $8 - 3$
- C.  $3 - 3$
- D.  $8 - 5$



- A.  $2 - 2$
- B.  $3 - 2$
- C.  $3 - 1$
- D.  $2 - 3$



- A.  $0 - 4$
- B.  $9 - 4$
- C.  $4 - 0$
- D.  $9 - 9$



- A.  $1 - 9$
- B.  $10 - 9$
- C.  $1 - 9$
- D.  $9 - 1$

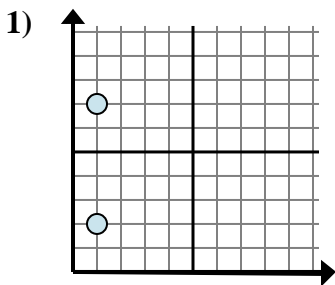
**Réponses**

- 1.     **A**
- 2.     **D**
- 3.     **A**
- 4.     **D**
- 5.     **C**
- 6.     **D**
- 7.     **C**
- 8.     **C**
- 9.     **B**

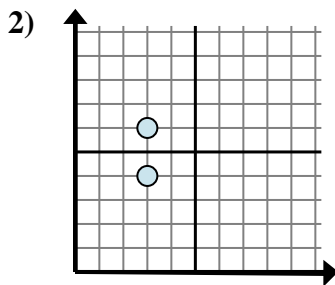


Déterminez quelle expression montre le mieux la distance entre les deux points.

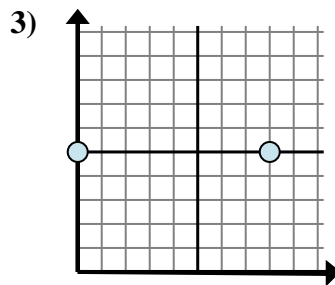
**Réponses**



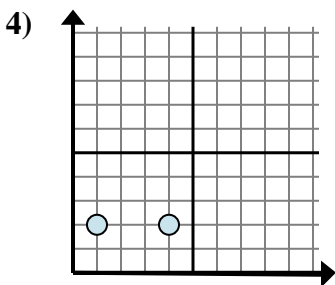
- A.  $1 - 2$
- B.  $7 - 2$
- C.  $2 - 1$
- D.  $2 - 7$



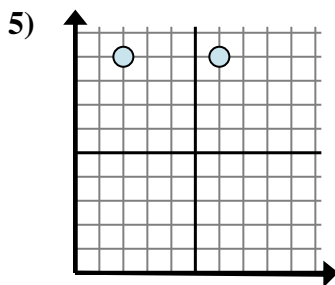
- A.  $6 - 3$
- B.  $3 - 6$
- C.  $6 - 4$
- D.  $3 - 3$



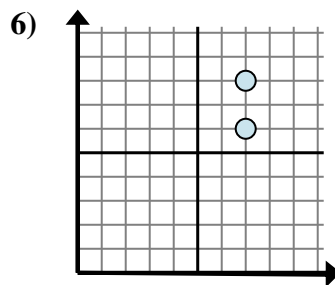
- A.  $8 - 0$
- B.  $0 - 5$
- C.  $5 - 5$
- D.  $0 - 8$



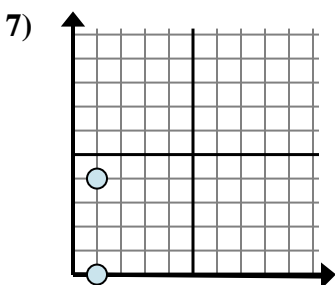
- A.  $2 - 4$
- B.  $4 - 1$
- C.  $2 - 2$
- D.  $1 - 4$



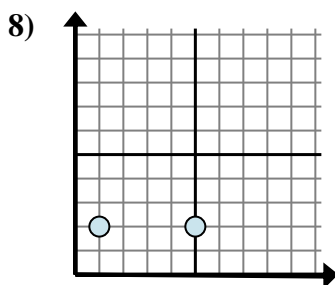
- A.  $9 - 9$
- B.  $2 - 6$
- C.  $9 - 9$
- D.  $6 - 2$



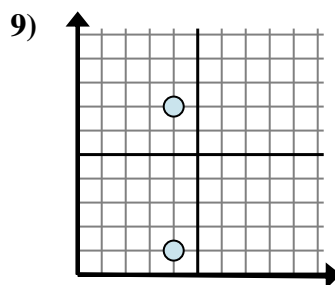
- A.  $7 - 7$
- B.  $6 - 8$
- C.  $7 - 7$
- D.  $8 - 6$



- A.  $1 - 1$
- B.  $4 - 1$
- C.  $1 - 1$
- D.  $4 - 0$



- A.  $1 - 5$
- B.  $5 - 1$
- C.  $1 - 2$
- D.  $2 - 1$



- A.  $4 - 4$
- B.  $7 - 4$
- C.  $4 - 1$
- D.  $7 - 1$

1. \_\_\_\_\_

2. \_\_\_\_\_

3. \_\_\_\_\_

4. \_\_\_\_\_

5. \_\_\_\_\_

6. \_\_\_\_\_

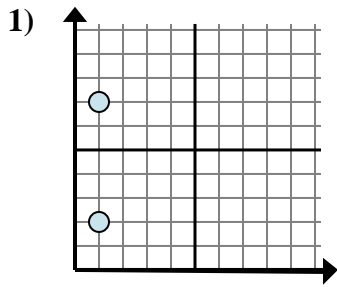
7. \_\_\_\_\_

8. \_\_\_\_\_

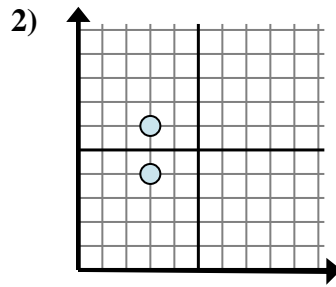
9. \_\_\_\_\_



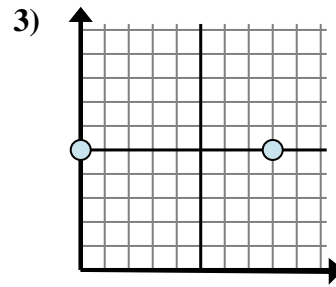
Déterminez quelle expression montre le mieux la distance entre les deux points.



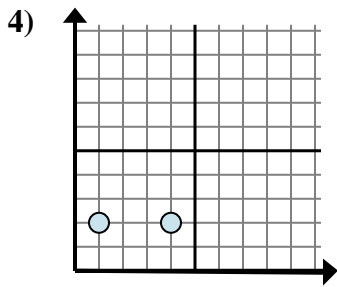
- A.  $1 - 2$
- B.  $7 - 2$
- C.  $2 - 1$
- D.  $2 - 7$



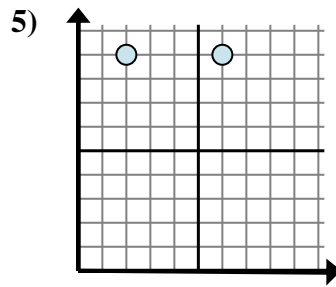
- A.  $6 - 3$
- B.  $3 - 6$
- C.  $6 - 4$
- D.  $3 - 3$



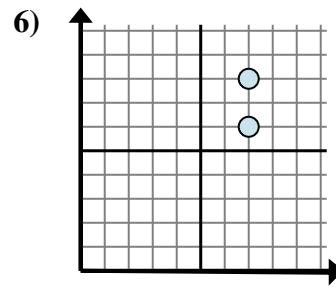
- A.  $8 - 0$
- B.  $0 - 5$
- C.  $5 - 5$
- D.  $0 - 8$



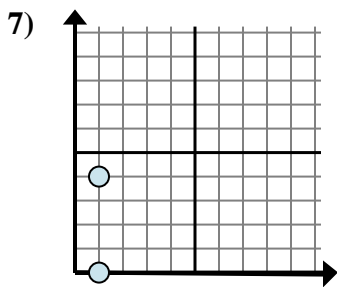
- A.  $2 - 4$
- B.  $4 - 1$
- C.  $2 - 2$
- D.  $1 - 4$



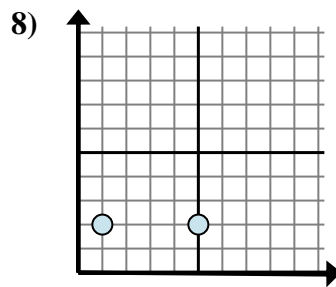
- A.  $9 - 9$
- B.  $2 - 6$
- C.  $9 - 9$
- D.  $6 - 2$



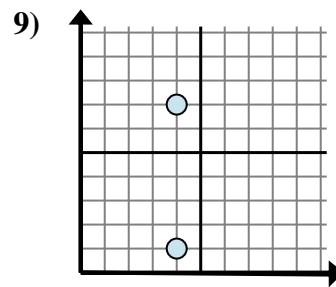
- A.  $7 - 7$
- B.  $6 - 8$
- C.  $7 - 7$
- D.  $8 - 6$



- A.  $1 - 1$
- B.  $4 - 1$
- C.  $1 - 1$
- D.  $4 - 0$



- A.  $1 - 5$
- B.  $5 - 1$
- C.  $1 - 2$
- D.  $2 - 1$



- A.  $4 - 4$
- B.  $7 - 4$
- C.  $4 - 1$
- D.  $7 - 1$

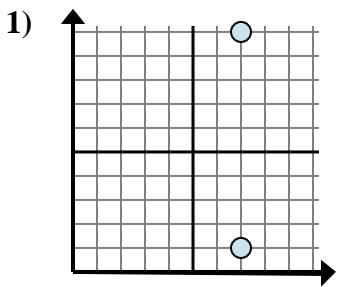
**Réponses**

- 1.           **B**
- 2.           **C**
- 3.           **A**
- 4.           **B**
- 5.           **D**
- 6.           **D**
- 7.           **D**
- 8.           **B**
- 9.           **D**

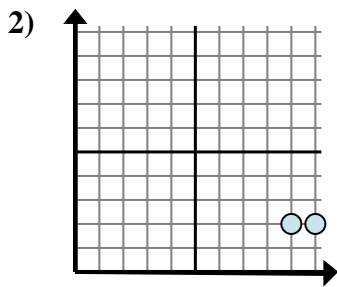


Déterminez quelle expression montre le mieux la distance entre les deux points.

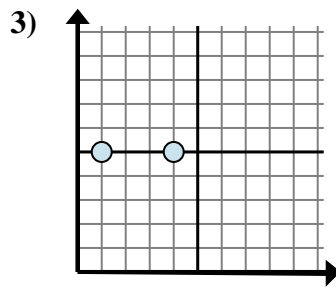
**Réponses**



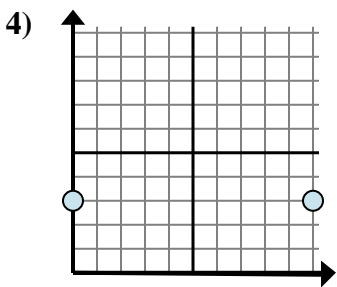
- A.  $7 - 1$
- B.  $10 - 7$
- C.  $7 - 1$
- D.  $10 - 1$



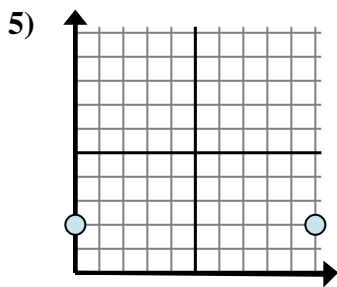
- A.  $10 - 9$
- B.  $2 - 2$
- C.  $2 - 2$
- D.  $9 - 2$



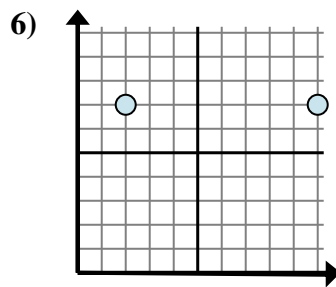
- A.  $4 - 1$
- B.  $1 - 5$
- C.  $5 - 1$
- D.  $4 - 5$



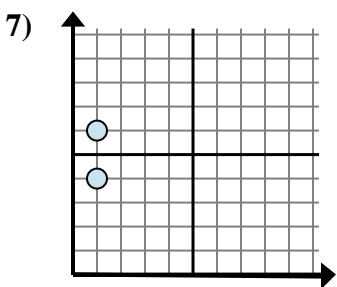
- A.  $10 - 3$
- B.  $10 - 0$
- C.  $3 - 0$
- D.  $3 - 3$



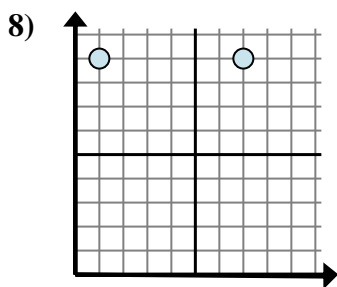
- A.  $2 - 2$
- B.  $10 - 2$
- C.  $2 - 0$
- D.  $10 - 0$



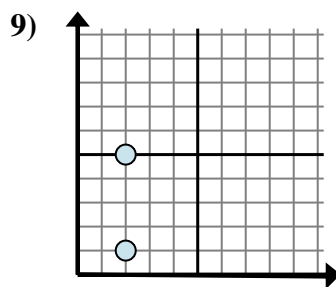
- A.  $10 - 2$
- B.  $7 - 2$
- C.  $2 - 10$
- D.  $10 - 7$



- A.  $1 - 4$
- B.  $6 - 1$
- C.  $1 - 4$
- D.  $6 - 4$



- A.  $1 - 9$
- B.  $7 - 1$
- C.  $1 - 7$
- D.  $7 - 9$



- A.  $5 - 1$
- B.  $2 - 2$
- C.  $5 - 2$
- D.  $2 - 1$

1. \_\_\_\_\_

2. \_\_\_\_\_

3. \_\_\_\_\_

4. \_\_\_\_\_

5. \_\_\_\_\_

6. \_\_\_\_\_

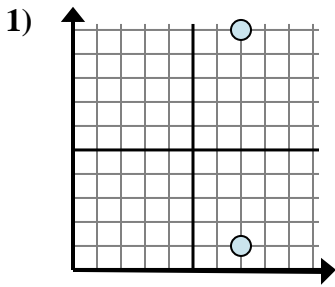
7. \_\_\_\_\_

8. \_\_\_\_\_

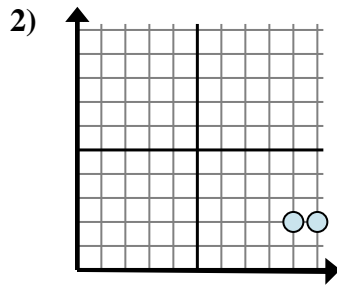
9. \_\_\_\_\_



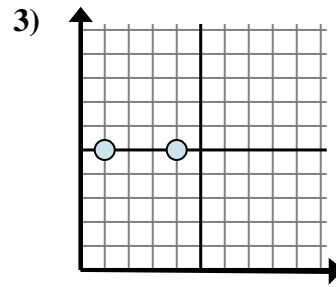
Déterminez quelle expression montre le mieux la distance entre les deux points.



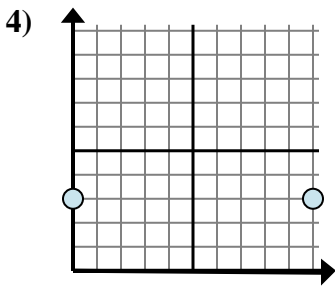
- A.  $7 - 1$
- B.  $10 - 7$
- C.  $7 - 1$
- D.  $10 - 1$



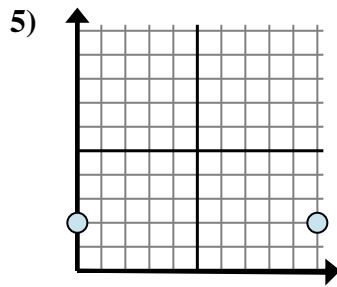
- A.  $10 - 9$
- B.  $2 - 2$
- C.  $2 - 2$
- D.  $9 - 2$



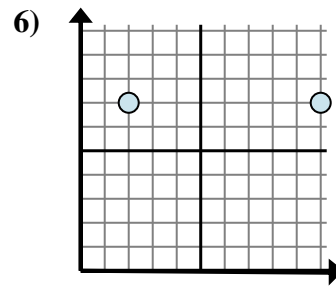
- A.  $4 - 1$
- B.  $1 - 5$
- C.  $5 - 1$
- D.  $4 - 5$



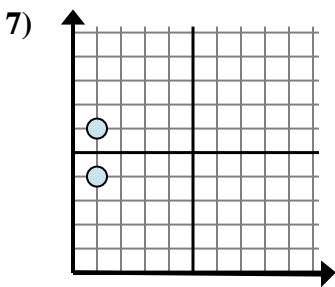
- A.  $10 - 3$
- B.  $10 - 0$
- C.  $3 - 0$
- D.  $3 - 3$



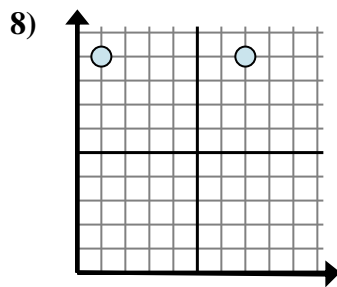
- A.  $2 - 2$
- B.  $10 - 2$
- C.  $2 - 0$
- D.  $10 - 0$



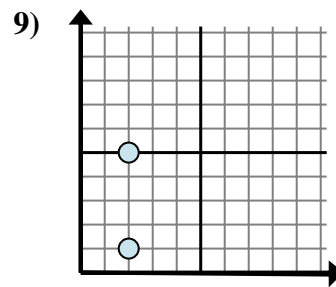
- A.  $10 - 2$
- B.  $7 - 2$
- C.  $2 - 10$
- D.  $10 - 7$



- A.  $1 - 4$
- B.  $6 - 1$
- C.  $1 - 4$
- D.  $6 - 4$



- A.  $1 - 9$
- B.  $7 - 1$
- C.  $1 - 7$
- D.  $7 - 9$



- A.  $5 - 1$
- B.  $2 - 2$
- C.  $5 - 2$
- D.  $2 - 1$

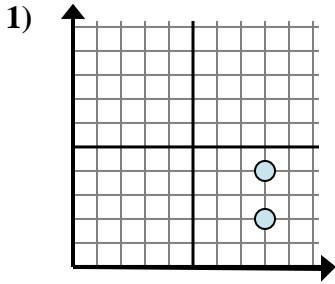
**Réponses**

- 1.           **D**
- 2.           **A**
- 3.           **A**
- 4.           **B**
- 5.           **D**
- 6.           **A**
- 7.           **D**
- 8.           **B**
- 9.           **A**

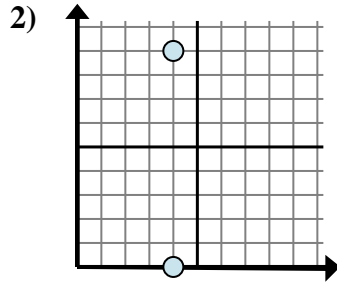


Déterminez quelle expression montre le mieux la distance entre les deux points.

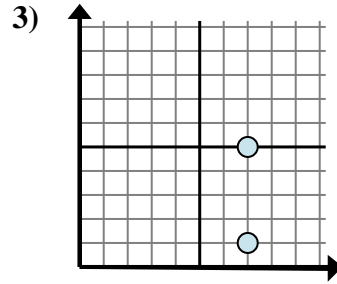
**Réponses**



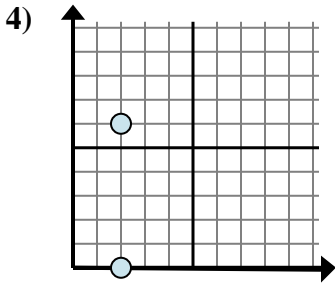
- A.  $8 - 8$
- B.  $4 - 2$
- C.  $4 - 8$
- D.  $8 - 4$



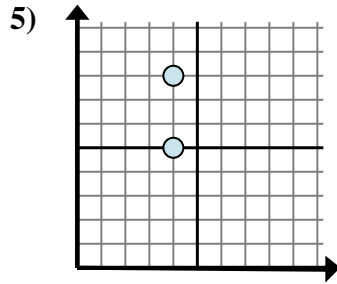
- A.  $0 - 4$
- B.  $4 - 4$
- C.  $9 - 0$
- D.  $4 - 4$



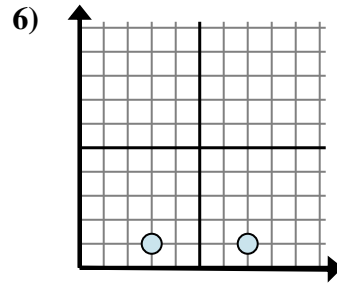
- A.  $1 - 7$
- B.  $1 - 5$
- C.  $5 - 7$
- D.  $5 - 1$



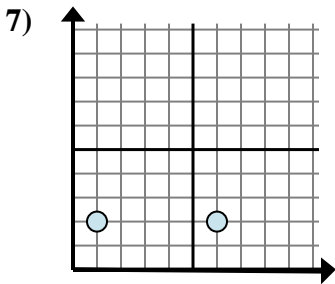
- A.  $2 - 0$
- B.  $6 - 0$
- C.  $6 - 2$
- D.  $2 - 2$



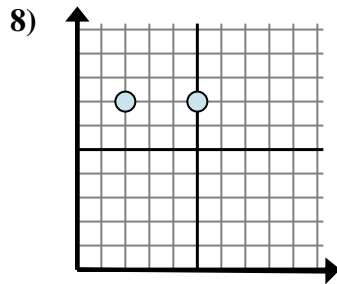
- A.  $5 - 4$
- B.  $8 - 5$
- C.  $4 - 4$
- D.  $5 - 8$



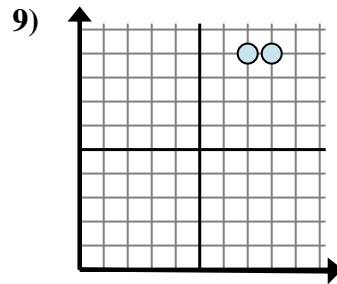
- A.  $7 - 1$
- B.  $7 - 3$
- C.  $1 - 3$
- D.  $3 - 1$



- A.  $2 - 2$
- B.  $2 - 6$
- C.  $6 - 1$
- D.  $1 - 2$



- A.  $5 - 7$
- B.  $5 - 2$
- C.  $2 - 7$
- D.  $7 - 7$

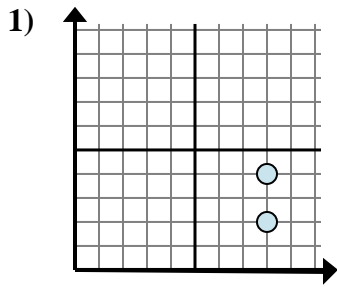


- A.  $9 - 7$
- B.  $8 - 7$
- C.  $9 - 9$
- D.  $7 - 8$

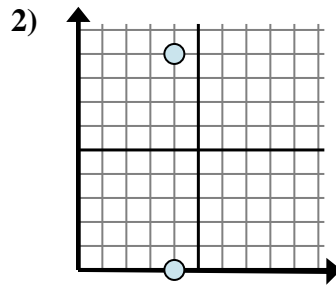
1. \_\_\_\_\_
2. \_\_\_\_\_
3. \_\_\_\_\_
4. \_\_\_\_\_
5. \_\_\_\_\_
6. \_\_\_\_\_
7. \_\_\_\_\_
8. \_\_\_\_\_
9. \_\_\_\_\_



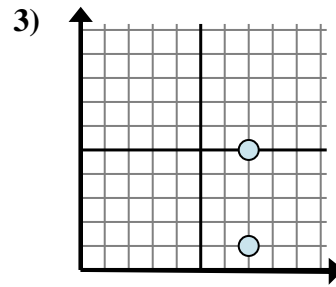
Déterminez quelle expression montre le mieux la distance entre les deux points.



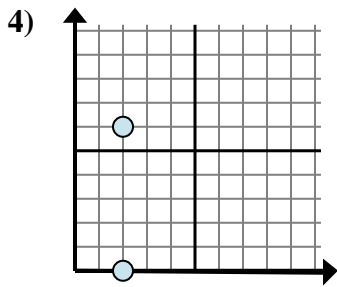
- A.  $8 - 8$
- B.  $4 - 2$
- C.  $4 - 8$
- D.  $8 - 4$



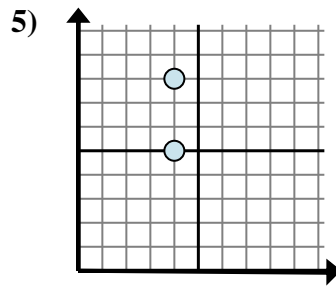
- A.  $0 - 4$
- B.  $4 - 4$
- C.  $9 - 0$
- D.  $4 - 4$



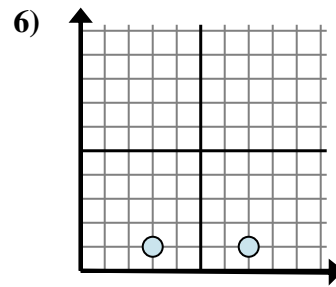
- A.  $1 - 7$
- B.  $1 - 5$
- C.  $5 - 7$
- D.  $5 - 1$



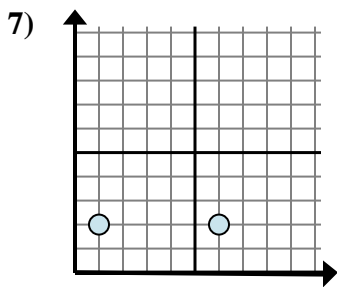
- A.  $2 - 0$
- B.  $6 - 0$
- C.  $6 - 2$
- D.  $2 - 2$



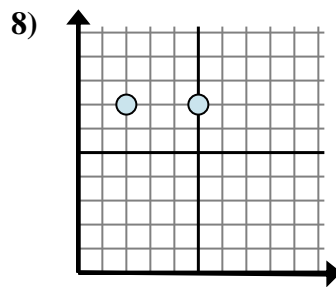
- A.  $5 - 4$
- B.  $8 - 5$
- C.  $4 - 4$
- D.  $5 - 8$



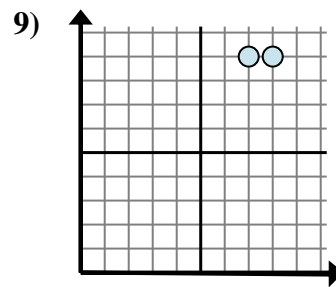
- A.  $7 - 1$
- B.  $7 - 3$
- C.  $1 - 3$
- D.  $3 - 1$



- A.  $2 - 2$
- B.  $2 - 6$
- C.  $6 - 1$
- D.  $1 - 2$



- A.  $5 - 7$
- B.  $5 - 2$
- C.  $2 - 7$
- D.  $7 - 7$



- A.  $9 - 7$
- B.  $8 - 7$
- C.  $9 - 9$
- D.  $7 - 8$

**Réponses**

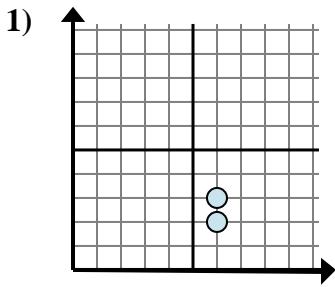
- 1.           **B**
- 2.           **C**
- 3.           **D**
- 4.           **B**
- 5.           **B**
- 6.           **B**
- 7.           **C**
- 8.           **B**
- 9.           **B**



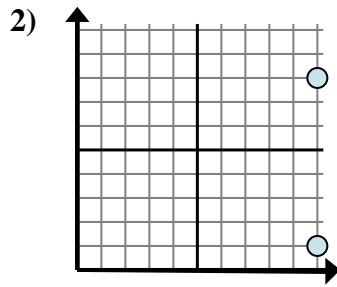


Déterminez quelle expression montre le mieux la distance entre les deux points.

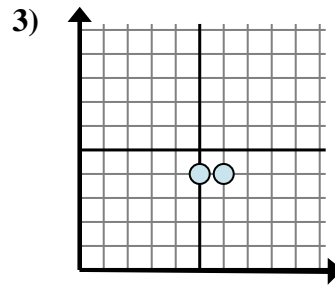
**Réponses**



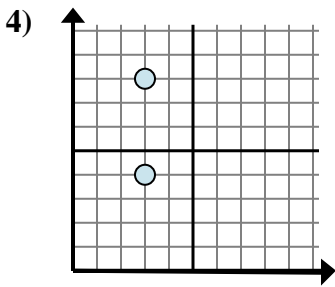
- A.  $3 - 2$
- B.  $6 - 6$
- C.  $3 - 6$
- D.  $2 - 3$



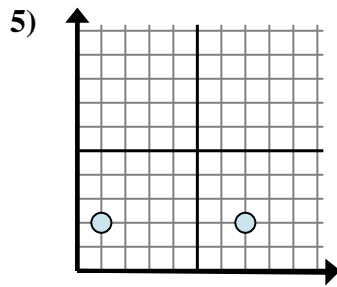
- A.  $10 - 10$
- B.  $10 - 8$
- C.  $8 - 10$
- D.  $8 - 1$



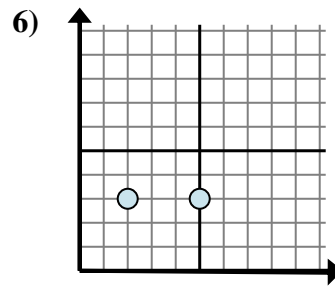
- A.  $6 - 5$
- B.  $4 - 4$
- C.  $5 - 4$
- D.  $6 - 4$



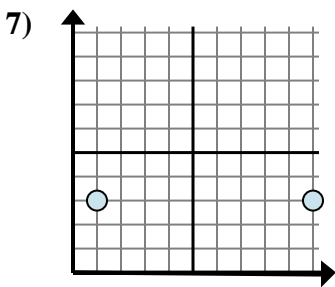
- A.  $3 - 3$
- B.  $3 - 4$
- C.  $8 - 4$
- D.  $4 - 8$



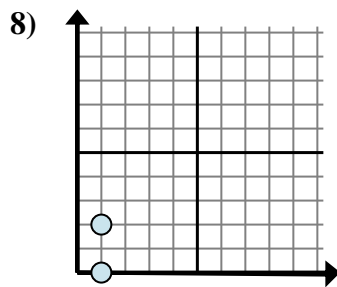
- A.  $1 - 2$
- B.  $2 - 2$
- C.  $7 - 1$
- D.  $2 - 2$



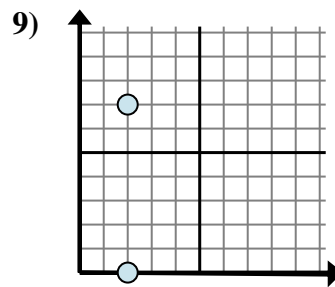
- A.  $3 - 5$
- B.  $2 - 5$
- C.  $5 - 2$
- D.  $3 - 5$



- A.  $10 - 1$
- B.  $3 - 3$
- C.  $1 - 3$
- D.  $3 - 10$



- A.  $2 - 0$
- B.  $1 - 0$
- C.  $1 - 1$
- D.  $2 - 1$



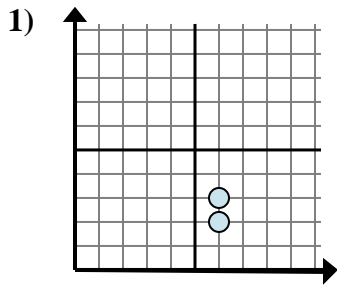
- A.  $2 - 2$
- B.  $0 - 2$
- C.  $7 - 0$
- D.  $2 - 7$

1. \_\_\_\_\_
2. \_\_\_\_\_
3. \_\_\_\_\_
4. \_\_\_\_\_
5. \_\_\_\_\_
6. \_\_\_\_\_
7. \_\_\_\_\_
8. \_\_\_\_\_
9. \_\_\_\_\_

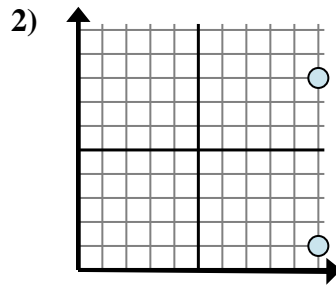


Déterminez quelle expression montre le mieux la distance entre les deux points.

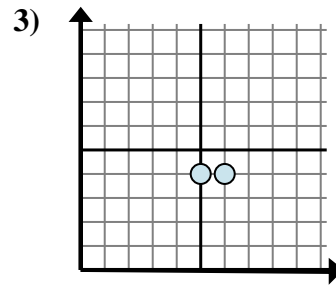
**Réponses**



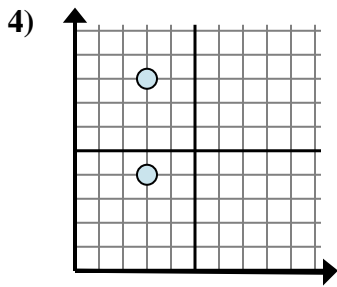
- A.  $3 - 2$
- B.  $6 - 6$
- C.  $3 - 6$
- D.  $2 - 3$



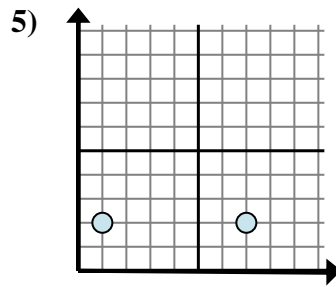
- A.  $10 - 10$
- B.  $10 - 8$
- C.  $8 - 10$
- D.  $8 - 1$



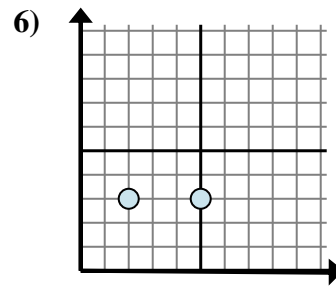
- A.  $6 - 5$
- B.  $4 - 4$
- C.  $5 - 4$
- D.  $6 - 4$



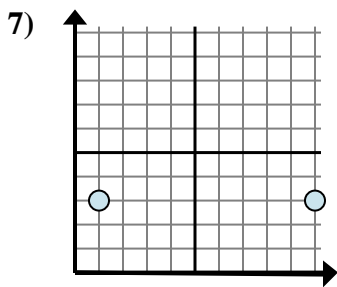
- A.  $3 - 3$
- B.  $3 - 4$
- C.  $8 - 4$
- D.  $4 - 8$



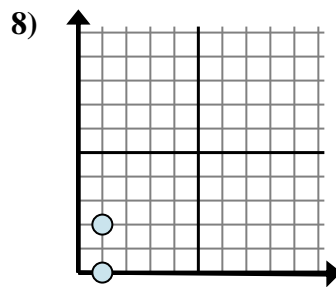
- A.  $1 - 2$
- B.  $2 - 2$
- C.  $7 - 1$
- D.  $2 - 2$



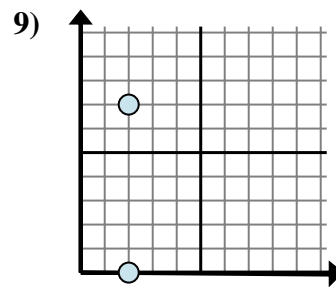
- A.  $3 - 5$
- B.  $2 - 5$
- C.  $5 - 2$
- D.  $3 - 5$



- A.  $10 - 1$
- B.  $3 - 3$
- C.  $1 - 3$
- D.  $3 - 10$



- A.  $2 - 0$
- B.  $1 - 0$
- C.  $1 - 1$
- D.  $2 - 1$



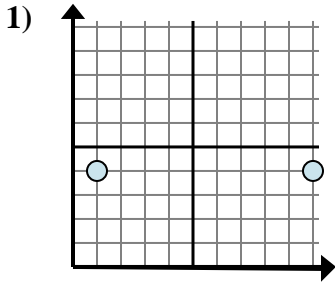
- A.  $2 - 2$
- B.  $0 - 2$
- C.  $7 - 0$
- D.  $2 - 7$

- 1.           **A**
- 2.           **D**
- 3.           **A**
- 4.           **C**
- 5.           **C**
- 6.           **C**
- 7.           **A**
- 8.           **A**
- 9.           **C**

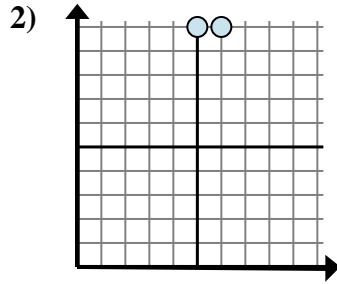


Déterminez quelle expression montre le mieux la distance entre les deux points.

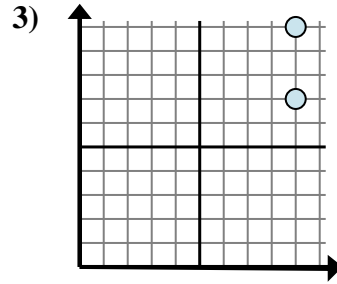
**Réponses**



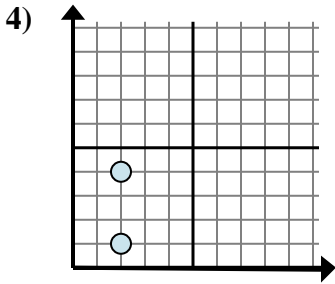
- A.  $4 - 4$
- B.  $4 - 4$
- C.  $4 - 10$
- D.  $10 - 1$



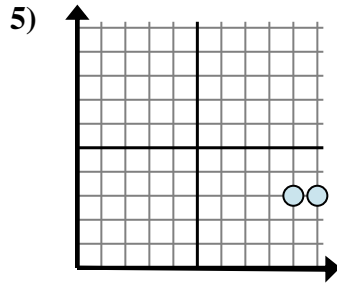
- A.  $6 - 10$
- B.  $5 - 10$
- C.  $6 - 5$
- D.  $10 - 5$



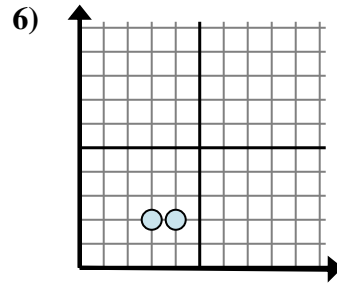
- A.  $10 - 7$
- B.  $9 - 9$
- C.  $7 - 10$
- D.  $9 - 7$



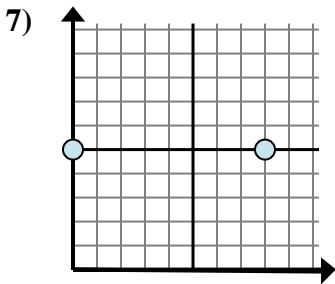
- A.  $2 - 4$
- B.  $4 - 1$
- C.  $1 - 4$
- D.  $2 - 2$



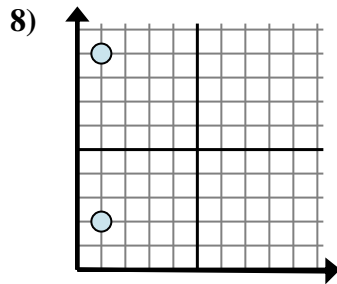
- A.  $9 - 10$
- B.  $10 - 3$
- C.  $3 - 9$
- D.  $10 - 9$



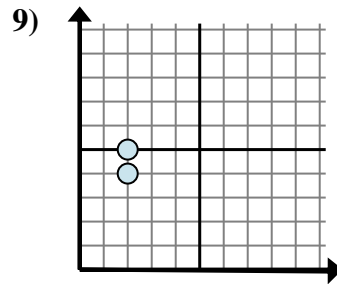
- A.  $3 - 2$
- B.  $2 - 4$
- C.  $2 - 4$
- D.  $4 - 3$



- A.  $5 - 8$
- B.  $5 - 5$
- C.  $8 - 0$
- D.  $8 - 5$



- A.  $1 - 1$
- B.  $1 - 2$
- C.  $9 - 2$
- D.  $2 - 9$

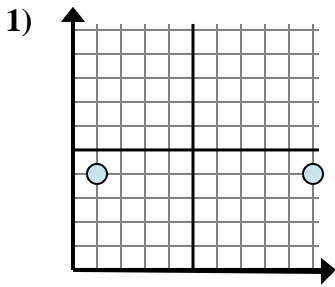


- A.  $5 - 2$
- B.  $5 - 4$
- C.  $2 - 2$
- D.  $2 - 2$

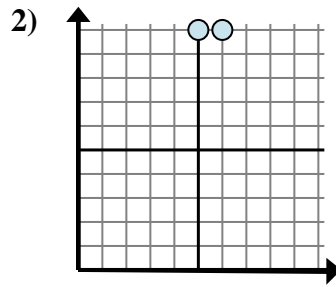
1. \_\_\_\_\_
2. \_\_\_\_\_
3. \_\_\_\_\_
4. \_\_\_\_\_
5. \_\_\_\_\_
6. \_\_\_\_\_
7. \_\_\_\_\_
8. \_\_\_\_\_
9. \_\_\_\_\_



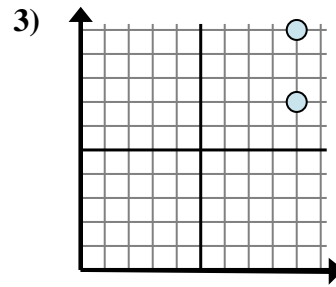
Déterminez quelle expression montre le mieux la distance entre les deux points.



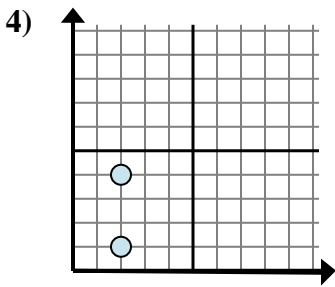
- A.  $4 - 4$
- B.  $4 - 4$
- C.  $4 - 10$
- D.  $10 - 1$



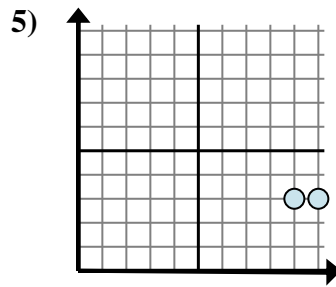
- A.  $6 - 10$
- B.  $5 - 10$
- C.  $6 - 5$
- D.  $10 - 5$



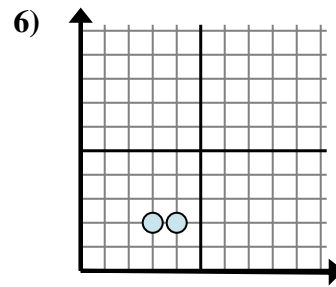
- A.  $10 - 7$
- B.  $9 - 9$
- C.  $7 - 10$
- D.  $9 - 7$



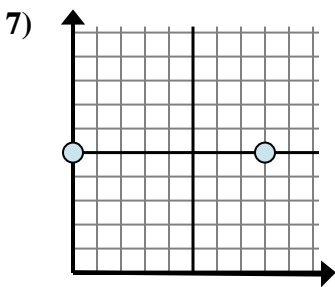
- A.  $2 - 4$
- B.  $4 - 1$
- C.  $1 - 4$
- D.  $2 - 2$



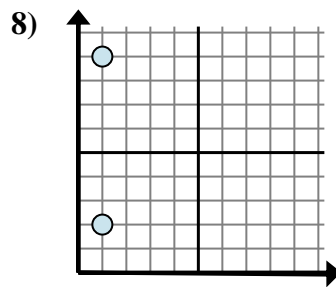
- A.  $9 - 10$
- B.  $10 - 3$
- C.  $3 - 9$
- D.  $10 - 9$



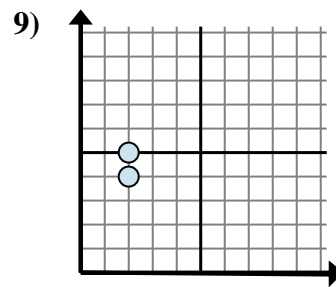
- A.  $3 - 2$
- B.  $2 - 4$
- C.  $2 - 4$
- D.  $4 - 3$



- A.  $5 - 8$
- B.  $5 - 5$
- C.  $8 - 0$
- D.  $8 - 5$



- A.  $1 - 1$
- B.  $1 - 2$
- C.  $9 - 2$
- D.  $2 - 9$



- A.  $5 - 2$
- B.  $5 - 4$
- C.  $2 - 2$
- D.  $2 - 2$

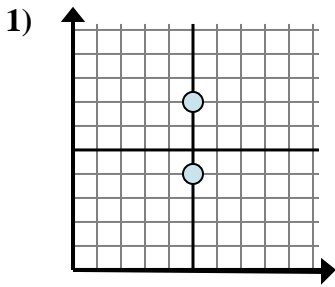
**Réponses**

- 1.           **D**
- 2.           **C**
- 3.           **A**
- 4.           **B**
- 5.           **D**
- 6.           **D**
- 7.           **C**
- 8.           **C**
- 9.           **B**

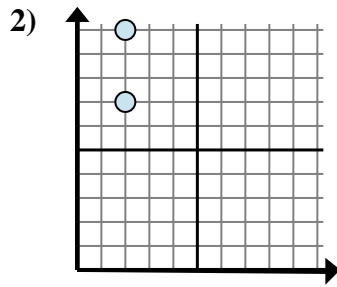


Déterminez quelle expression montre le mieux la distance entre les deux points.

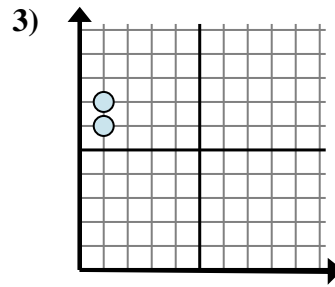
**Réponses**



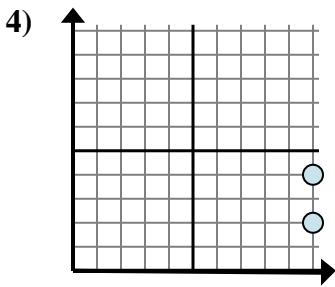
- A.  $5 - 5$
- B.  $7 - 4$
- C.  $7 - 5$
- D.  $5 - 4$



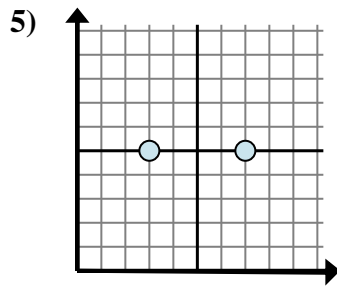
- A.  $10 - 2$
- B.  $2 - 10$
- C.  $2 - 2$
- D.  $10 - 7$



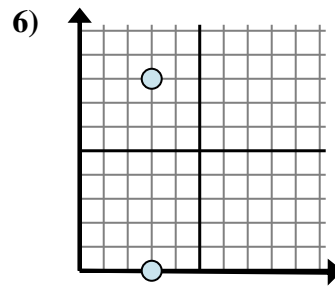
- A.  $7 - 6$
- B.  $1 - 6$
- C.  $6 - 1$
- D.  $1 - 1$



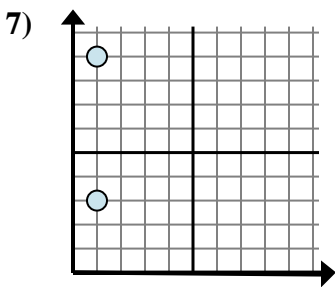
- A.  $10 - 4$
- B.  $10 - 4$
- C.  $2 - 10$
- D.  $4 - 2$



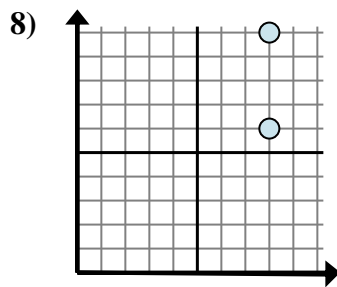
- A.  $7 - 5$
- B.  $7 - 3$
- C.  $5 - 7$
- D.  $3 - 7$



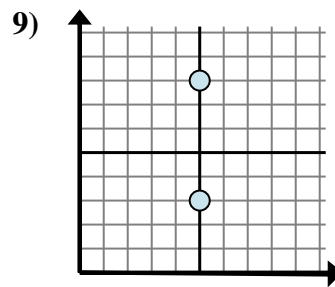
- A.  $3 - 3$
- B.  $8 - 0$
- C.  $3 - 0$
- D.  $0 - 8$



- A.  $9 - 1$
- B.  $9 - 3$
- C.  $1 - 1$
- D.  $1 - 1$



- A.  $8 - 6$
- B.  $8 - 6$
- C.  $10 - 8$
- D.  $10 - 6$



- A.  $8 - 3$
- B.  $5 - 5$
- C.  $8 - 5$
- D.  $5 - 8$

1. \_\_\_\_\_

2. \_\_\_\_\_

3. \_\_\_\_\_

4. \_\_\_\_\_

5. \_\_\_\_\_

6. \_\_\_\_\_

7. \_\_\_\_\_

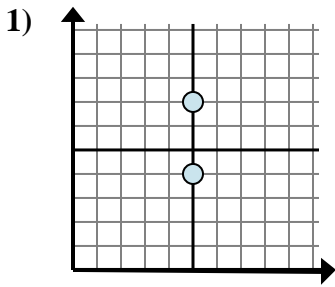
8. \_\_\_\_\_

9. \_\_\_\_\_

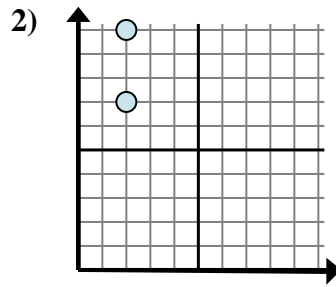


Déterminez quelle expression montre le mieux la distance entre les deux points.

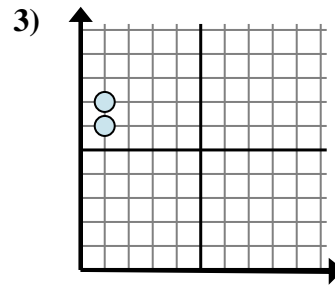
**Réponses**



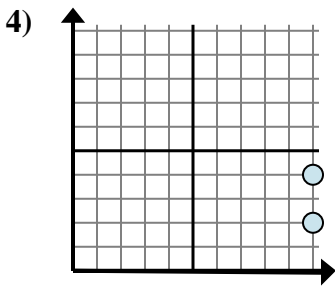
- A.  $5 - 5$
- B.  $7 - 4$
- C.  $7 - 5$
- D.  $5 - 4$



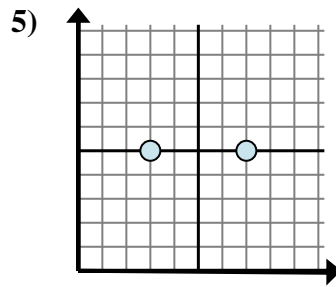
- A.  $10 - 2$
- B.  $2 - 10$
- C.  $2 - 2$
- D.  $10 - 7$



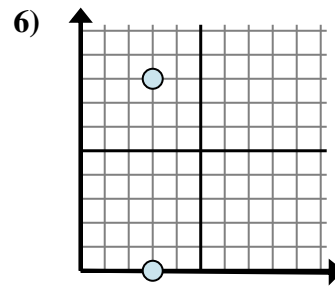
- A.  $7 - 6$
- B.  $1 - 6$
- C.  $6 - 1$
- D.  $1 - 1$



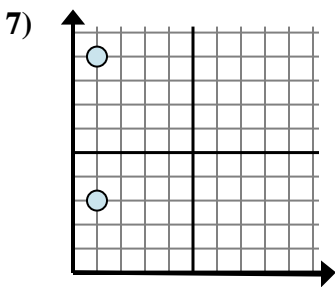
- A.  $10 - 4$
- B.  $10 - 4$
- C.  $2 - 10$
- D.  $4 - 2$



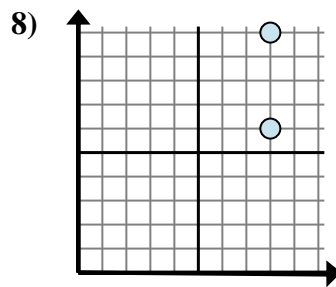
- A.  $7 - 5$
- B.  $7 - 3$
- C.  $5 - 7$
- D.  $3 - 7$



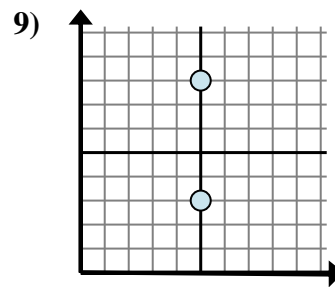
- A.  $3 - 3$
- B.  $8 - 0$
- C.  $3 - 0$
- D.  $0 - 8$



- A.  $9 - 1$
- B.  $9 - 3$
- C.  $1 - 1$
- D.  $1 - 1$



- A.  $8 - 6$
- B.  $8 - 6$
- C.  $10 - 8$
- D.  $10 - 6$



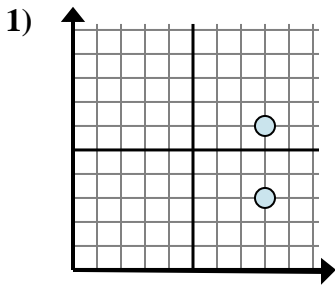
- A.  $8 - 3$
- B.  $5 - 5$
- C.  $8 - 5$
- D.  $5 - 8$

- 1.           **B**
- 2.           **D**
- 3.           **A**
- 4.           **D**
- 5.           **B**
- 6.           **B**
- 7.           **B**
- 8.           **D**
- 9.           **A**

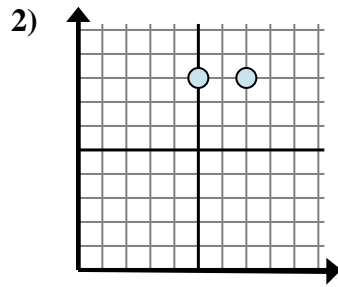


Déterminez quelle expression montre le mieux la distance entre les deux points.

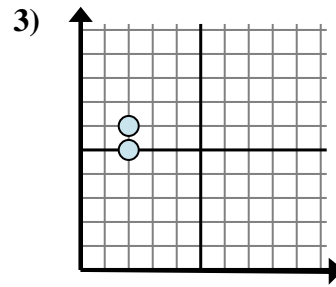
**Réponses**



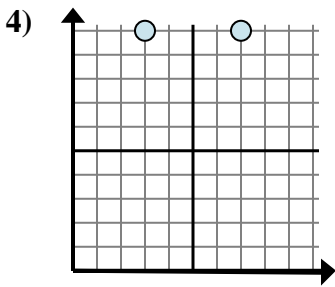
- A.  $6 - 3$
- B.  $6 - 8$
- C.  $8 - 8$
- D.  $3 - 8$



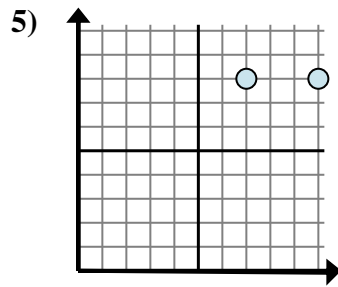
- A.  $8 - 7$
- B.  $7 - 5$
- C.  $8 - 7$
- D.  $8 - 8$



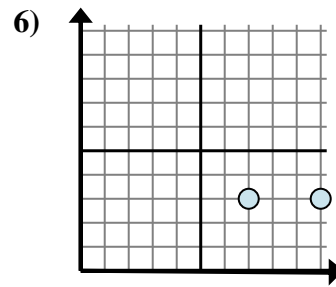
- A.  $6 - 5$
- B.  $2 - 5$
- C.  $5 - 2$
- D.  $6 - 2$



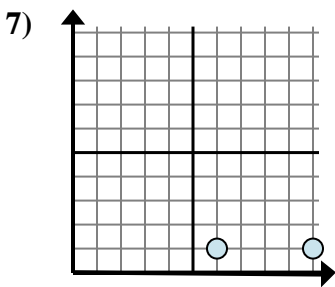
- A.  $7 - 3$
- B.  $10 - 3$
- C.  $10 - 3$
- D.  $10 - 10$



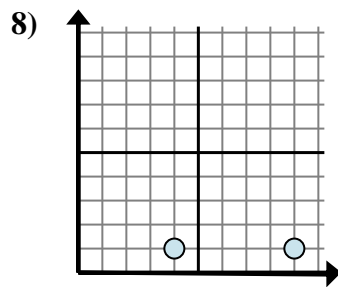
- A.  $8 - 8$
- B.  $10 - 8$
- C.  $7 - 8$
- D.  $10 - 7$



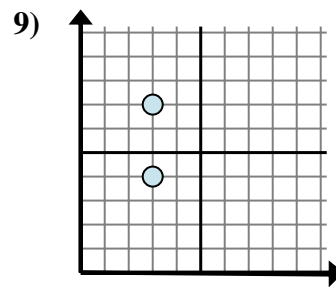
- A.  $10 - 7$
- B.  $7 - 3$
- C.  $3 - 10$
- D.  $3 - 10$



- A.  $10 - 6$
- B.  $6 - 1$
- C.  $6 - 10$
- D.  $1 - 1$



- A.  $4 - 9$
- B.  $9 - 4$
- C.  $1 - 9$
- D.  $4 - 1$



- A.  $3 - 3$
- B.  $4 - 3$
- C.  $3 - 3$
- D.  $7 - 4$

1. \_\_\_\_\_

2. \_\_\_\_\_

3. \_\_\_\_\_

4. \_\_\_\_\_

5. \_\_\_\_\_

6. \_\_\_\_\_

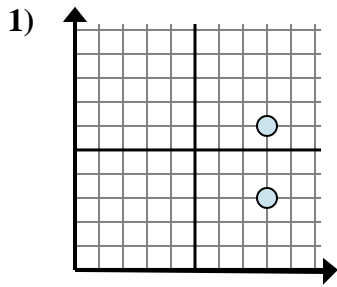
7. \_\_\_\_\_

8. \_\_\_\_\_

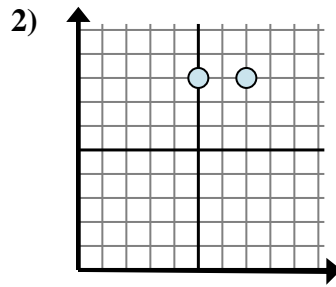
9. \_\_\_\_\_



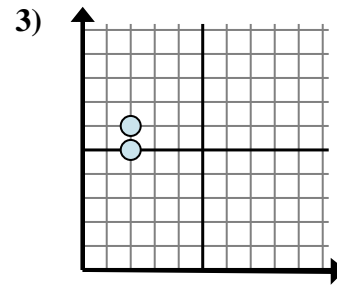
Déterminez quelle expression montre le mieux la distance entre les deux points.



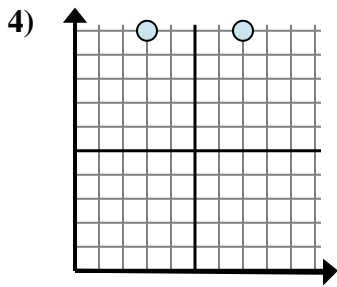
- A.  $6 - 3$
- B.  $6 - 8$
- C.  $8 - 8$
- D.  $3 - 8$



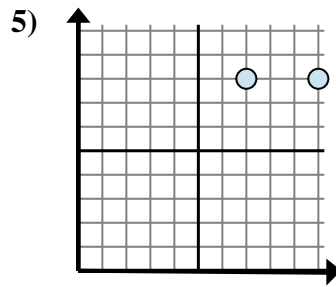
- A.  $8 - 7$
- B.  $7 - 5$
- C.  $8 - 7$
- D.  $8 - 8$



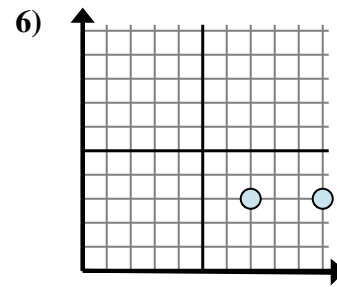
- A.  $6 - 5$
- B.  $2 - 5$
- C.  $5 - 2$
- D.  $6 - 2$



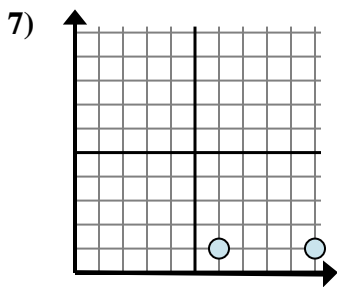
- A.  $7 - 3$
- B.  $10 - 3$
- C.  $10 - 3$
- D.  $10 - 10$



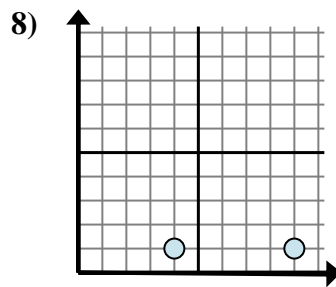
- A.  $8 - 8$
- B.  $10 - 8$
- C.  $7 - 8$
- D.  $10 - 7$



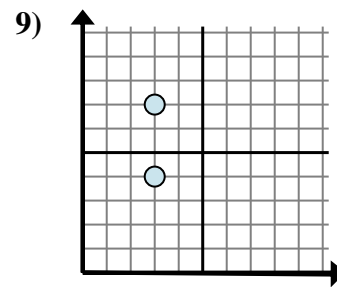
- A.  $10 - 7$
- B.  $7 - 3$
- C.  $3 - 10$
- D.  $3 - 10$



- A.  $10 - 6$
- B.  $6 - 1$
- C.  $6 - 10$
- D.  $1 - 1$



- A.  $4 - 9$
- B.  $9 - 4$
- C.  $1 - 9$
- D.  $4 - 1$



- A.  $3 - 3$
- B.  $4 - 3$
- C.  $3 - 3$
- D.  $7 - 4$

**Réponses**

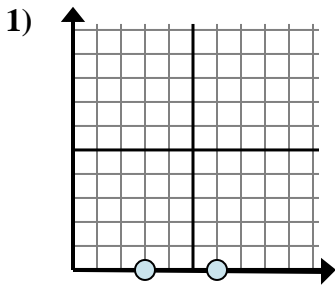
- 1.           **A**
- 2.           **B**
- 3.           **A**
- 4.           **A**
- 5.           **D**
- 6.           **A**
- 7.           **A**
- 8.           **B**
- 9.           **D**



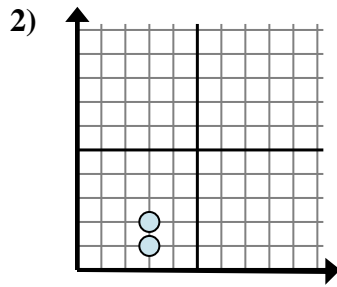


Déterminez quelle expression montre le mieux la distance entre les deux points.

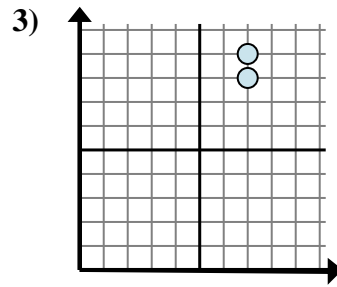
**Réponses**



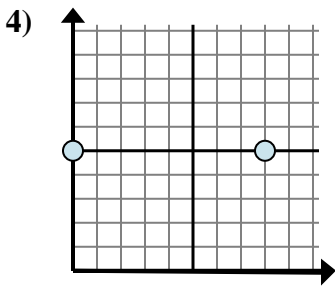
- A.  $0 - 6$
- B.  $3 - 0$
- C.  $6 - 0$
- D.  $6 - 3$



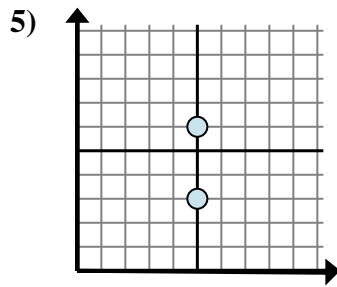
- A.  $3 - 3$
- B.  $3 - 2$
- C.  $3 - 3$
- D.  $2 - 1$



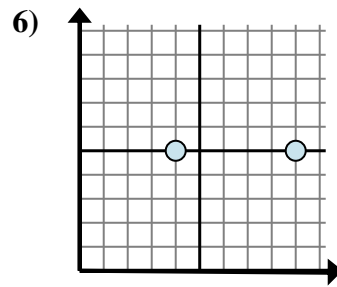
- A.  $7 - 8$
- B.  $7 - 7$
- C.  $9 - 8$
- D.  $8 - 7$



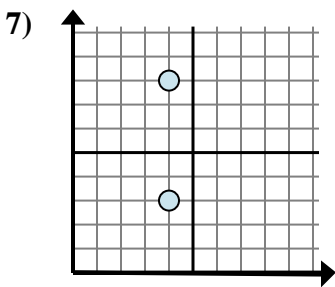
- A.  $8 - 0$
- B.  $5 - 5$
- C.  $5 - 8$
- D.  $8 - 5$



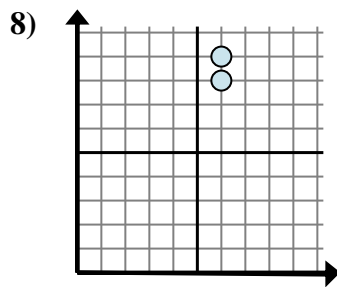
- A.  $6 - 5$
- B.  $6 - 3$
- C.  $5 - 5$
- D.  $5 - 5$



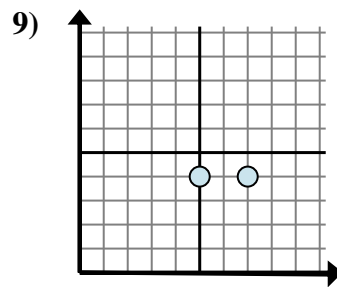
- A.  $5 - 5$
- B.  $9 - 4$
- C.  $9 - 5$
- D.  $4 - 9$



- A.  $4 - 3$
- B.  $8 - 3$
- C.  $4 - 4$
- D.  $4 - 4$



- A.  $9 - 8$
- B.  $6 - 6$
- C.  $8 - 6$
- D.  $9 - 6$



- A.  $5 - 4$
- B.  $4 - 4$
- C.  $7 - 5$
- D.  $4 - 7$

1. \_\_\_\_\_

2. \_\_\_\_\_

3. \_\_\_\_\_

4. \_\_\_\_\_

5. \_\_\_\_\_

6. \_\_\_\_\_

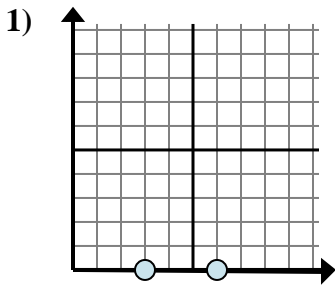
7. \_\_\_\_\_

8. \_\_\_\_\_

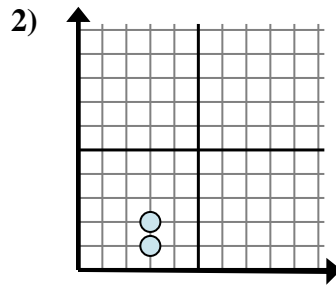
9. \_\_\_\_\_



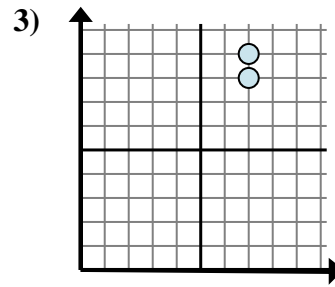
Déterminez quelle expression montre le mieux la distance entre les deux points.



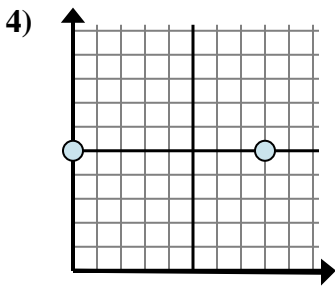
- A.  $0 - 6$
- B.  $3 - 0$
- C.  $6 - 0$
- D.  $6 - 3$



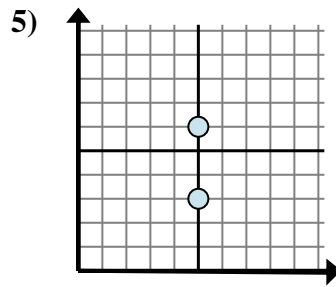
- A.  $3 - 3$
- B.  $3 - 2$
- C.  $3 - 3$
- D.  $2 - 1$



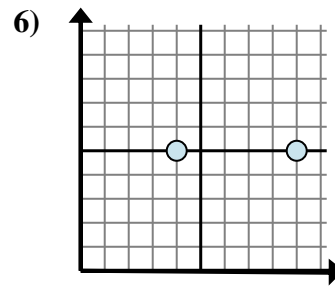
- A.  $7 - 8$
- B.  $7 - 7$
- C.  $9 - 8$
- D.  $8 - 7$



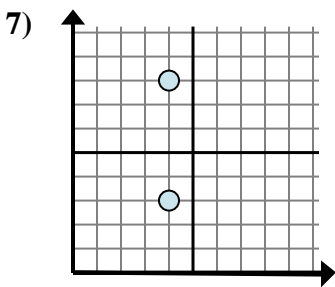
- A.  $8 - 0$
- B.  $5 - 5$
- C.  $5 - 8$
- D.  $8 - 5$



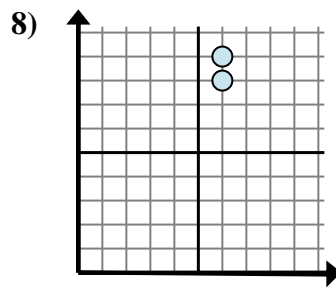
- A.  $6 - 5$
- B.  $6 - 3$
- C.  $5 - 5$
- D.  $5 - 5$



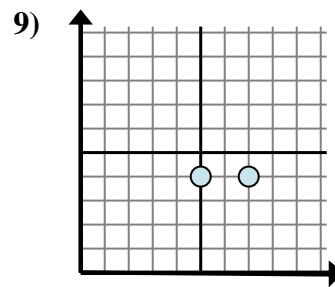
- A.  $5 - 5$
- B.  $9 - 4$
- C.  $9 - 5$
- D.  $4 - 9$



- A.  $4 - 3$
- B.  $8 - 3$
- C.  $4 - 4$
- D.  $4 - 4$



- A.  $9 - 8$
- B.  $6 - 6$
- C.  $8 - 6$
- D.  $9 - 6$



- A.  $5 - 4$
- B.  $4 - 4$
- C.  $7 - 5$
- D.  $4 - 7$

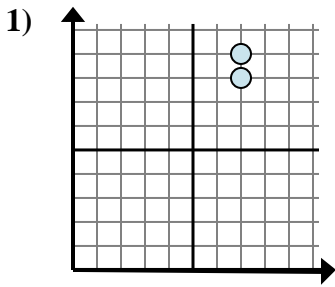
**Réponses**

- 1.           **D**
- 2.           **D**
- 3.           **C**
- 4.           **A**
- 5.           **B**
- 6.           **B**
- 7.           **B**
- 8.           **A**
- 9.           **C**

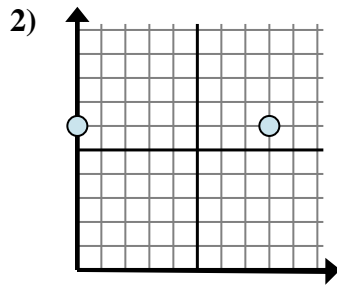


Déterminez quelle expression montre le mieux la distance entre les deux points.

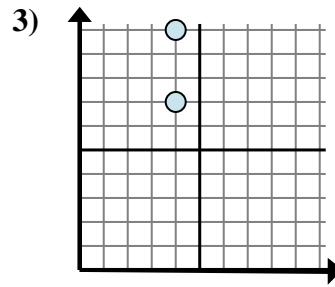
**Réponses**



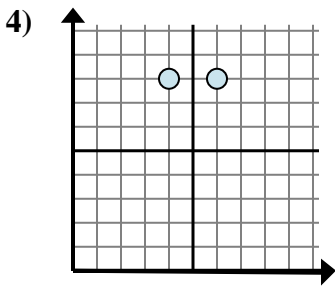
- A.  $7 - 9$
- B.  $8 - 9$
- C.  $9 - 8$
- D.  $7 - 7$



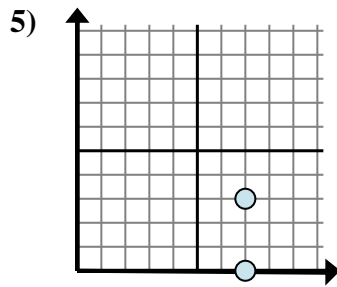
- A.  $8 - 6$
- B.  $8 - 0$
- C.  $0 - 8$
- D.  $6 - 6$



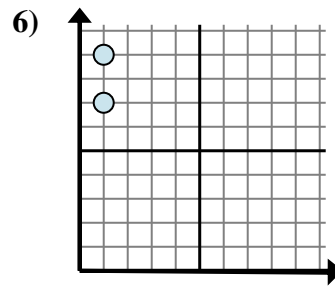
- A.  $7 - 10$
- B.  $4 - 7$
- C.  $10 - 7$
- D.  $4 - 4$



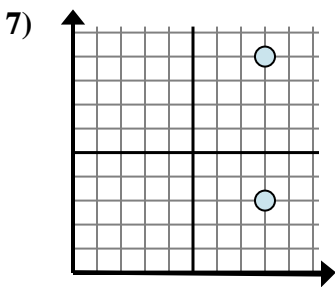
- A.  $8 - 8$
- B.  $4 - 8$
- C.  $6 - 4$
- D.  $6 - 8$



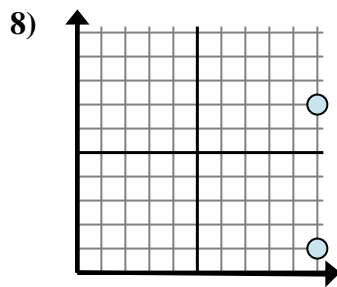
- A.  $7 - 3$
- B.  $3 - 0$
- C.  $0 - 3$
- D.  $3 - 7$



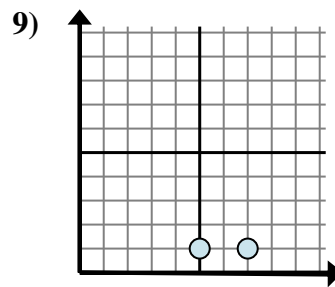
- A.  $9 - 7$
- B.  $7 - 9$
- C.  $1 - 1$
- D.  $1 - 1$



- A.  $8 - 8$
- B.  $3 - 9$
- C.  $9 - 3$
- D.  $9 - 8$



- A.  $1 - 7$
- B.  $7 - 10$
- C.  $7 - 1$
- D.  $1 - 10$

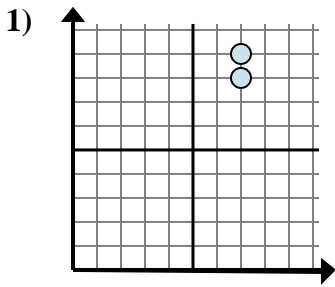


- A.  $7 - 1$
- B.  $1 - 1$
- C.  $1 - 7$
- D.  $7 - 5$

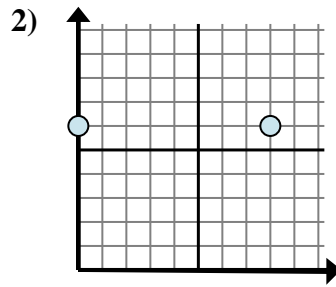
- 1. \_\_\_\_\_
- 2. \_\_\_\_\_
- 3. \_\_\_\_\_
- 4. \_\_\_\_\_
- 5. \_\_\_\_\_
- 6. \_\_\_\_\_
- 7. \_\_\_\_\_
- 8. \_\_\_\_\_
- 9. \_\_\_\_\_



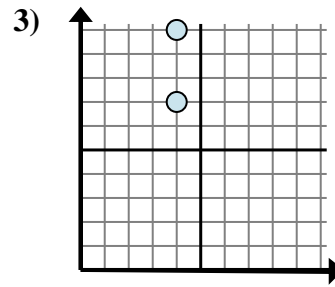
Déterminez quelle expression montre le mieux la distance entre les deux points.



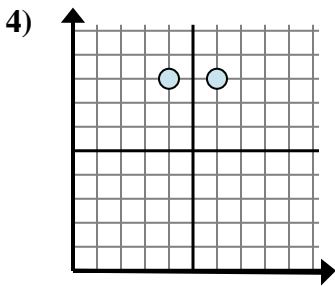
- A.  $7 - 9$
- B.  $8 - 9$
- C.  $9 - 8$
- D.  $7 - 7$



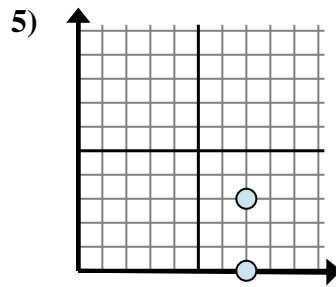
- A.  $8 - 6$
- B.  $8 - 0$
- C.  $0 - 8$
- D.  $6 - 6$



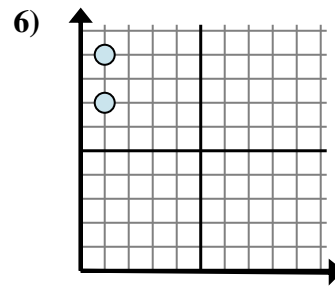
- A.  $7 - 10$
- B.  $4 - 7$
- C.  $10 - 7$
- D.  $4 - 4$



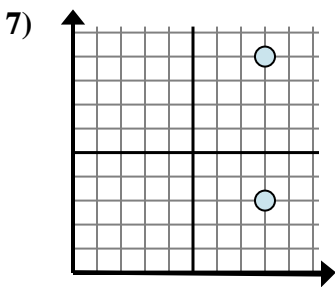
- A.  $8 - 8$
- B.  $4 - 8$
- C.  $6 - 4$
- D.  $6 - 8$



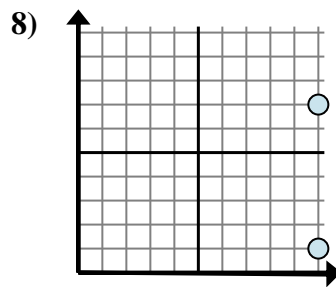
- A.  $7 - 3$
- B.  $3 - 0$
- C.  $0 - 3$
- D.  $3 - 7$



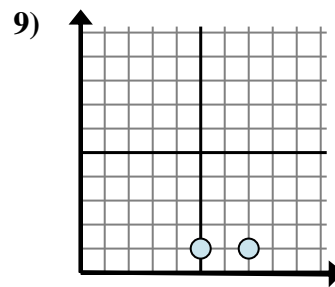
- A.  $9 - 7$
- B.  $7 - 9$
- C.  $1 - 1$
- D.  $1 - 1$



- A.  $8 - 8$
- B.  $3 - 9$
- C.  $9 - 3$
- D.  $9 - 8$



- A.  $1 - 7$
- B.  $7 - 10$
- C.  $7 - 1$
- D.  $1 - 10$



- A.  $7 - 1$
- B.  $1 - 1$
- C.  $1 - 7$
- D.  $7 - 5$

**Réponses**

- 1.           **C**
- 2.           **B**
- 3.           **C**
- 4.           **C**
- 5.           **B**
- 6.           **A**
- 7.           **C**
- 8.           **C**
- 9.           **D**