

**Réponses**

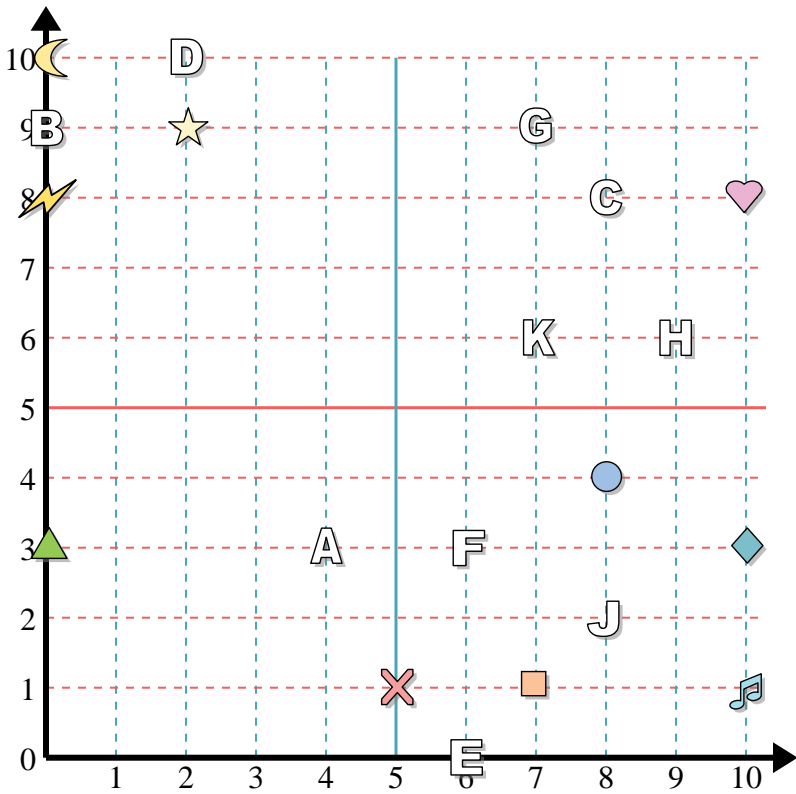
1. \_\_\_\_\_
2. \_\_\_\_\_
3. \_\_\_\_\_
4. \_\_\_\_\_
5. \_\_\_\_\_
6. \_\_\_\_\_
7. \_\_\_\_\_
8. \_\_\_\_\_
9. \_\_\_\_\_
10. \_\_\_\_\_
11. \_\_\_\_\_
12. \_\_\_\_\_
13. \_\_\_\_\_
14. \_\_\_\_\_
15. \_\_\_\_\_
16. \_\_\_\_\_
17. \_\_\_\_\_
18. \_\_\_\_\_
19. \_\_\_\_\_
20. \_\_\_\_\_

**Determine the coordinates of each figure.**

- |               |              |
|---------------|--------------|
| 1) music note | 2) circle    |
| 3) lightning  | 4) cross     |
| 5) moon       | 6) diamond   |
| 7) star       | 8) heart     |
| 9) square     | 10) triangle |

**Determine which letter is at each coordinate.**

- |            |           |
|------------|-----------|
| 11) (6 0)  | 12) (7 9) |
| 13) (2 10) | 14) (9 6) |
| 15) (8 2)  | 16) (4 3) |
| 17) (8 8)  | 18) (0 9) |
| 19) (7 6)  | 20) (6 3) |



Determine the coordinates of each figure.

- 1) music note
- 2) circle
- 3) lightning
- 4) cross
- 5) moon
- 6) diamond
- 7) star
- 8) heart
- 9) square
- 10) triangle

Determine which letter is at each coordinate.

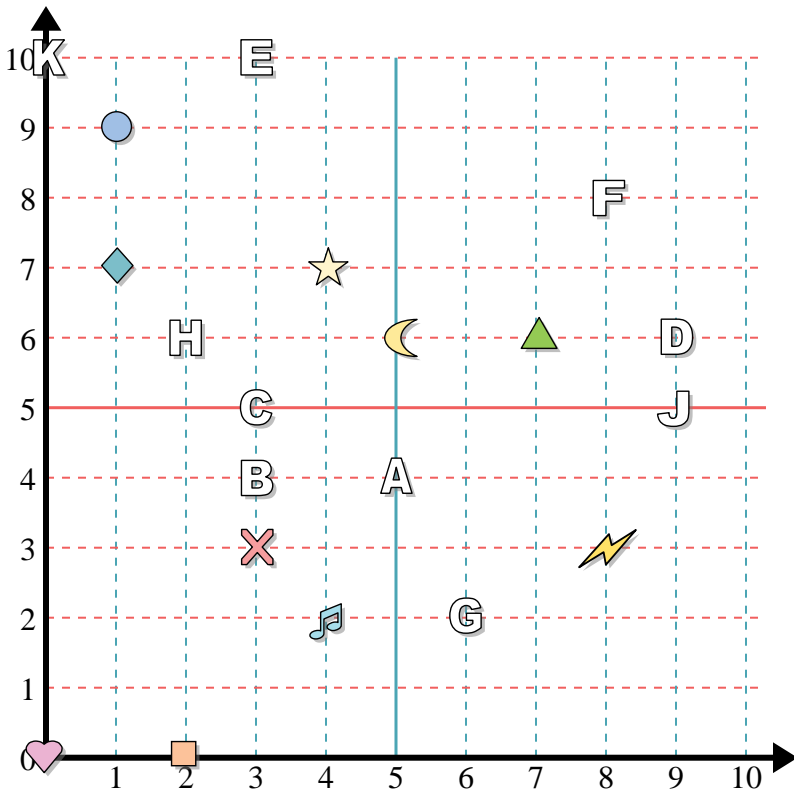
- 11) (6 0)
- 12) (7 9)
- 13) (2 10)
- 14) (9 6)
- 15) (8 2)
- 16) (4 3)
- 17) (8 8)
- 18) (0 9)
- 19) (7 6)
- 20) (6 3)

**Réponses**

- 1. **(10 1)**
- 2. **(8 4)**
- 3. **(0 8)**
- 4. **(5 1)**
- 5. **(0 10)**
- 6. **(10 3)**
- 7. **(2 9)**
- 8. **(10 8)**
- 9. **(7 1)**
- 10. **(0 3)**
- 11. **E**
- 12. **G**
- 13. **D**
- 14. **H**
- 15. **J**
- 16. **A**
- 17. **C**
- 18. **B**
- 19. **K**
- 20. **F**



**Réponses**



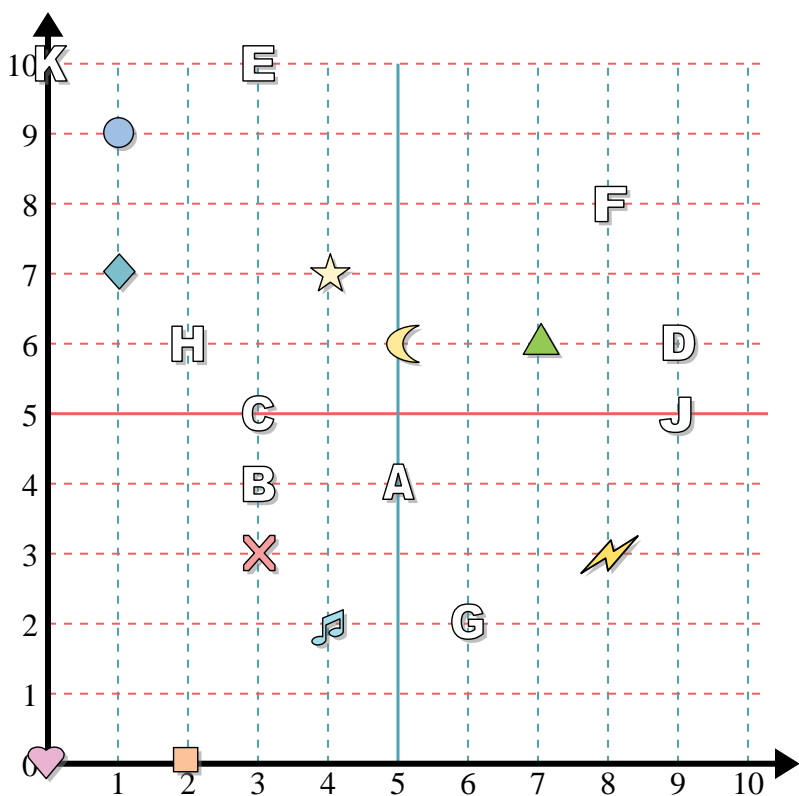
Determine the coordinates of each figure.

- |               |            |
|---------------|------------|
| 1) circle     | 2) diamond |
| 3) square     | 4) heart   |
| 5) music note | 6) cross   |
| 7) lightning  | 8) moon    |
| 9) triangle   | 10) star   |

Determine which letter is at each coordinate.

- |            |            |
|------------|------------|
| 11) (9 6)  | 12) (2 6)  |
| 13) (3 10) | 14) (3 5)  |
| 15) (3 4)  | 16) (0 10) |
| 17) (5 4)  | 18) (6 2)  |
| 19) (9 5)  | 20) (8 8)  |

1. \_\_\_\_\_
2. \_\_\_\_\_
3. \_\_\_\_\_
4. \_\_\_\_\_
5. \_\_\_\_\_
6. \_\_\_\_\_
7. \_\_\_\_\_
8. \_\_\_\_\_
9. \_\_\_\_\_
10. \_\_\_\_\_
11. \_\_\_\_\_
12. \_\_\_\_\_
13. \_\_\_\_\_
14. \_\_\_\_\_
15. \_\_\_\_\_
16. \_\_\_\_\_
17. \_\_\_\_\_
18. \_\_\_\_\_
19. \_\_\_\_\_
20. \_\_\_\_\_



Determine the coordinates of each figure.

- |               |            |
|---------------|------------|
| 1) circle     | 2) diamond |
| 3) square     | 4) heart   |
| 5) music note | 6) cross   |
| 7) lightning  | 8) moon    |
| 9) triangle   | 10) star   |

Determine which letter is at each coordinate.

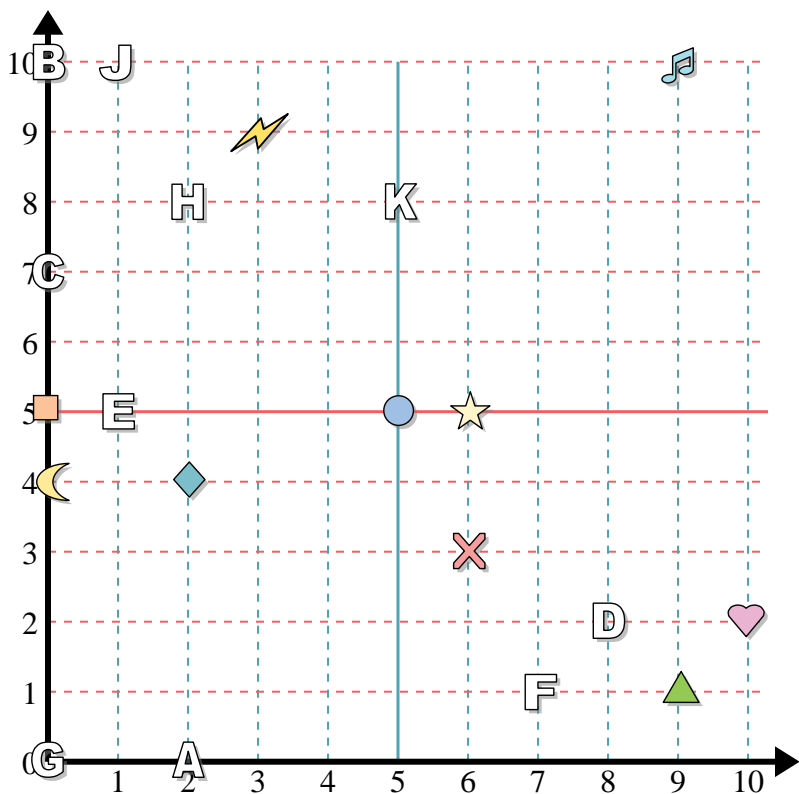
- |            |            |
|------------|------------|
| 11) (9 6)  | 12) (2 6)  |
| 13) (3 10) | 14) (3 5)  |
| 15) (3 4)  | 16) (0 10) |
| 17) (5 4)  | 18) (6 2)  |
| 19) (9 5)  | 20) (8 8)  |

**Réponses**

1. (1 9)
2. (1 7)
3. (2 0)
4. (0 0)
5. (4 2)
6. (3 3)
7. (8 3)
8. (5 6)
9. (7 6)
10. (4 7)
11. D
12. H
13. E
14. C
15. B
16. K
17. A
18. G
19. J
20. F



Réponses



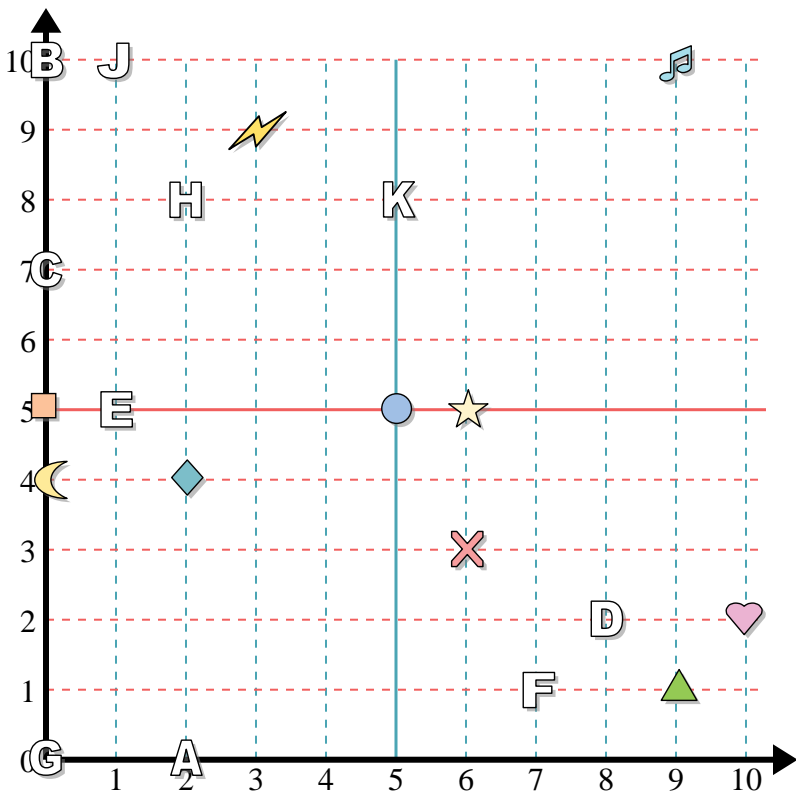
Determine the coordinates of each figure.

- 1) triangle
- 2) moon
- 3) square
- 4) heart
- 5) star
- 6) circle
- 7) music note
- 8) lightning
- 9) cross
- 10) diamond

Determine which letter is at each coordinate.

- 11) (1 10)
- 12) (2 8)
- 13) (0 7)
- 14) (5 8)
- 15) (2 0)
- 16) (7 1)
- 17) (0 0)
- 18) (8 2)
- 19) (0 10)
- 20) (1 5)

1. \_\_\_\_\_
2. \_\_\_\_\_
3. \_\_\_\_\_
4. \_\_\_\_\_
5. \_\_\_\_\_
6. \_\_\_\_\_
7. \_\_\_\_\_
8. \_\_\_\_\_
9. \_\_\_\_\_
10. \_\_\_\_\_
11. \_\_\_\_\_
12. \_\_\_\_\_
13. \_\_\_\_\_
14. \_\_\_\_\_
15. \_\_\_\_\_
16. \_\_\_\_\_
17. \_\_\_\_\_
18. \_\_\_\_\_
19. \_\_\_\_\_
20. \_\_\_\_\_



Determine the coordinates of each figure.

- 1) triangle
- 2) moon
- 3) square
- 4) heart
- 5) star
- 6) circle
- 7) music note
- 8) lightning
- 9) cross
- 10) diamond

Determine which letter is at each coordinate.

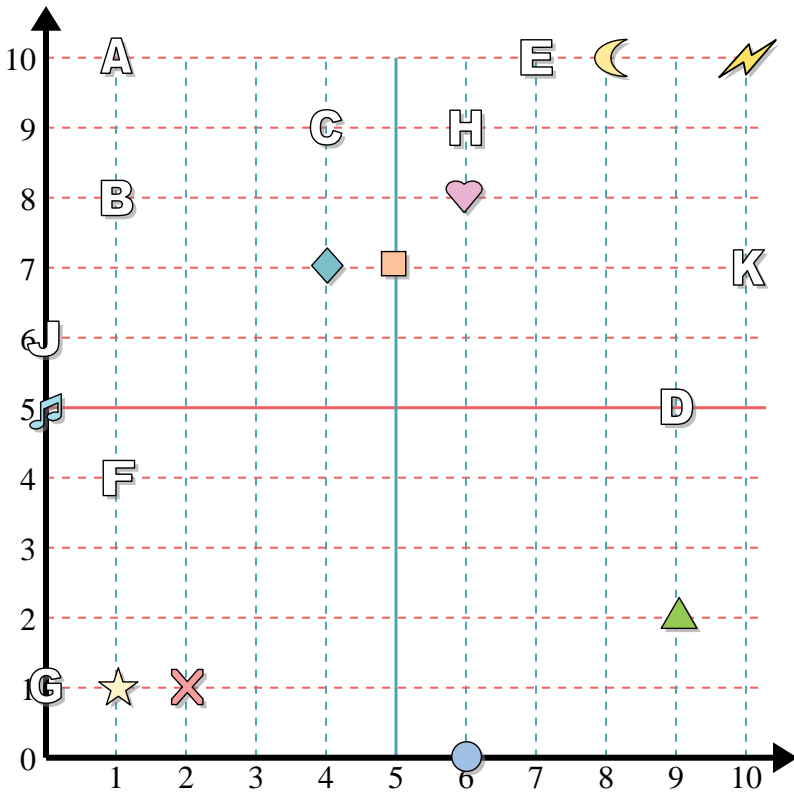
- 11) (1 10)
- 12) (2 8)
- 13) (0 7)
- 14) (5 8)
- 15) (2 0)
- 16) (7 1)
- 17) (0 0)
- 18) (8 2)
- 19) (0 10)
- 20) (1 5)

**Réponses**

- 1. (9 1)
- 2. (0 4)
- 3. (0 5)
- 4. (10 2)
- 5. (6 5)
- 6. (5 5)
- 7. (9 10)
- 8. (3 9)
- 9. (6 3)
- 10. (2 4)
- 11. J
- 12. H
- 13. C
- 14. K
- 15. A
- 16. F
- 17. G
- 18. D
- 19. B
- 20. E



**Réponses**



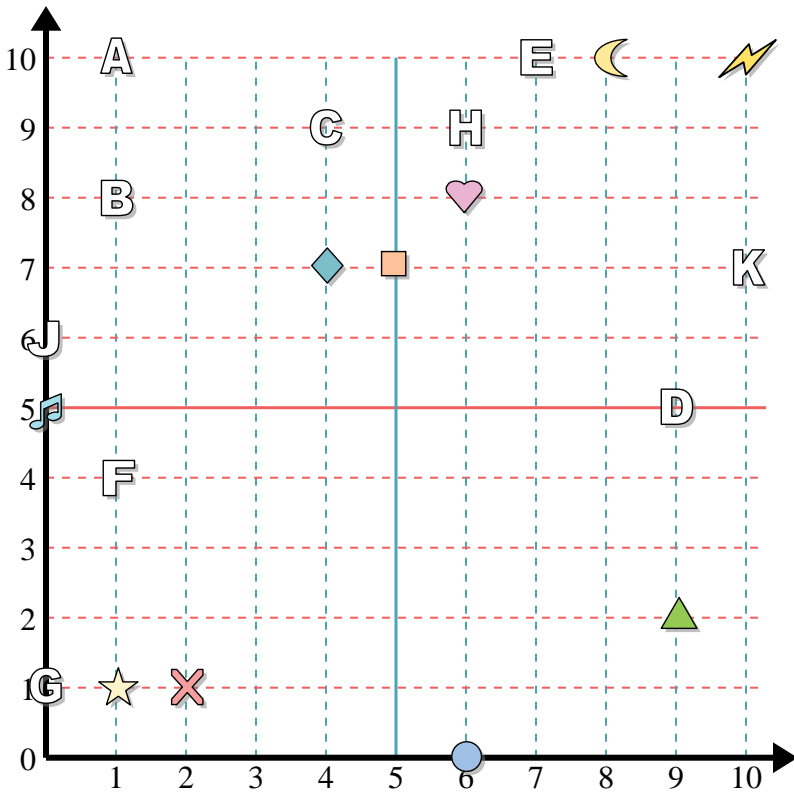
**Determine the coordinates of each figure.**

- 1) cross
- 2) music note
- 3) star
- 4) circle
- 5) square
- 6) heart
- 7) diamond
- 8) lightning
- 9) moon
- 10) triangle

**Determine which letter is at each coordinate.**

- 11) (1 10)
- 12) (0 6)
- 13) (6 9)
- 14) (7 10)
- 15) (10 7)
- 16) (4 9)
- 17) (1 8)
- 18) (0 1)
- 19) (1 4)
- 20) (9 5)

1. \_\_\_\_\_
2. \_\_\_\_\_
3. \_\_\_\_\_
4. \_\_\_\_\_
5. \_\_\_\_\_
6. \_\_\_\_\_
7. \_\_\_\_\_
8. \_\_\_\_\_
9. \_\_\_\_\_
10. \_\_\_\_\_
11. \_\_\_\_\_
12. \_\_\_\_\_
13. \_\_\_\_\_
14. \_\_\_\_\_
15. \_\_\_\_\_
16. \_\_\_\_\_
17. \_\_\_\_\_
18. \_\_\_\_\_
19. \_\_\_\_\_
20. \_\_\_\_\_



**Réponses**

1. (2 1)
2. (0 5)
3. (1 1)
4. (6 0)
5. (5 7)
6. (6 8)
7. (4 7)
8. (10 10)
9. (8 10)
10. (9 2)
11. A
12. J
13. H
14. E
15. K
16. C
17. B
18. G
19. F
20. D

Determine the coordinates of each figure.

- |            |               |
|------------|---------------|
| 1) cross   | 2) music note |
| 3) star    | 4) circle     |
| 5) square  | 6) heart      |
| 7) diamond | 8) lightning  |
| 9) moon    | 10) triangle  |

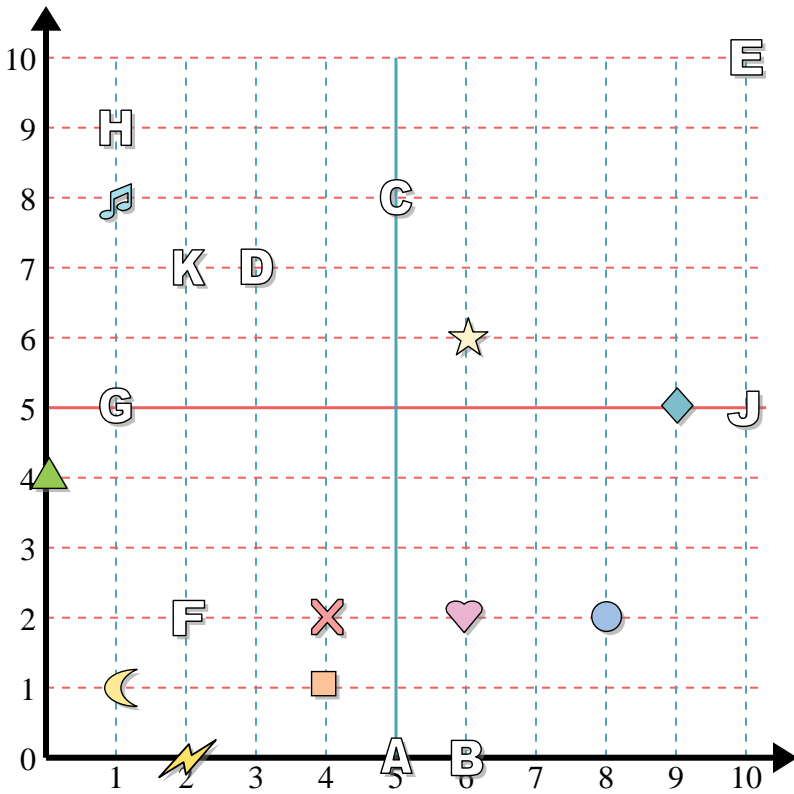
Determine which letter is at each coordinate.

- |            |            |
|------------|------------|
| 11) (1 10) | 12) (0 6)  |
| 13) (6 9)  | 14) (7 10) |
| 15) (10 7) | 16) (4 9)  |
| 17) (1 8)  | 18) (0 1)  |
| 19) (1 4)  | 20) (9 5)  |





**Réponses**



Determine the coordinates of each figure.

- |               |              |
|---------------|--------------|
| 1) cross      | 2) square    |
| 3) music note | 4) moon      |
| 5) circle     | 6) heart     |
| 7) triangle   | 8) lightning |
| 9) diamond    | 10) star     |

Determine which letter is at each coordinate.

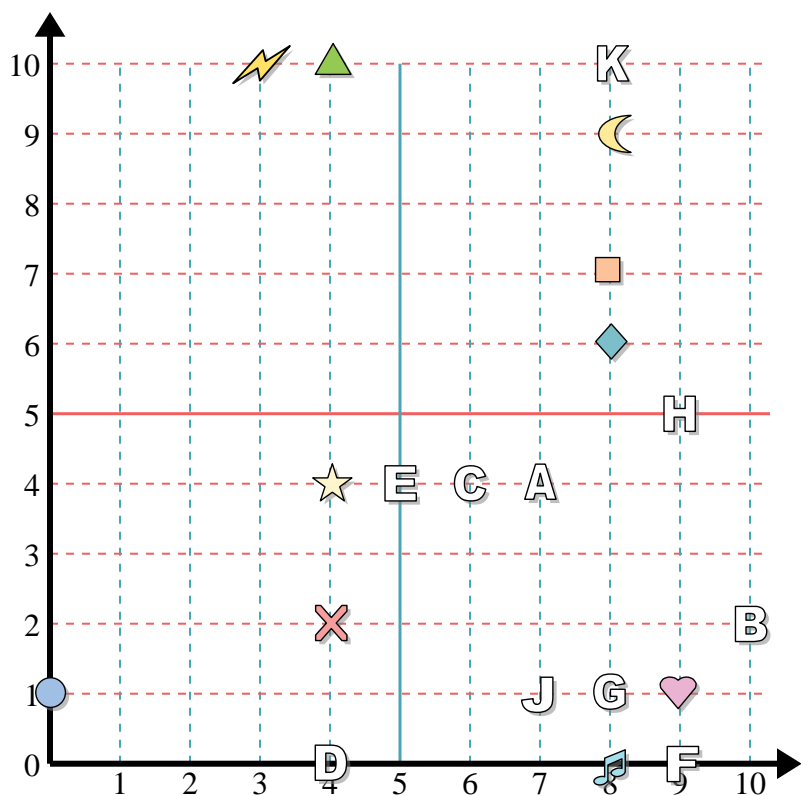
- |           |             |
|-----------|-------------|
| 11) (6 0) | 12) (10 5)  |
| 13) (5 8) | 14) (1 5)   |
| 15) (1 9) | 16) (10 10) |
| 17) (5 0) | 18) (3 7)   |
| 19) (2 2) | 20) (2 7)   |

1. \_\_\_\_\_
2. \_\_\_\_\_
3. \_\_\_\_\_
4. \_\_\_\_\_
5. \_\_\_\_\_
6. \_\_\_\_\_
7. \_\_\_\_\_
8. \_\_\_\_\_
9. \_\_\_\_\_
10. \_\_\_\_\_
11. \_\_\_\_\_
12. \_\_\_\_\_
13. \_\_\_\_\_
14. \_\_\_\_\_
15. \_\_\_\_\_
16. \_\_\_\_\_
17. \_\_\_\_\_
18. \_\_\_\_\_
19. \_\_\_\_\_
20. \_\_\_\_\_





**Réponses**



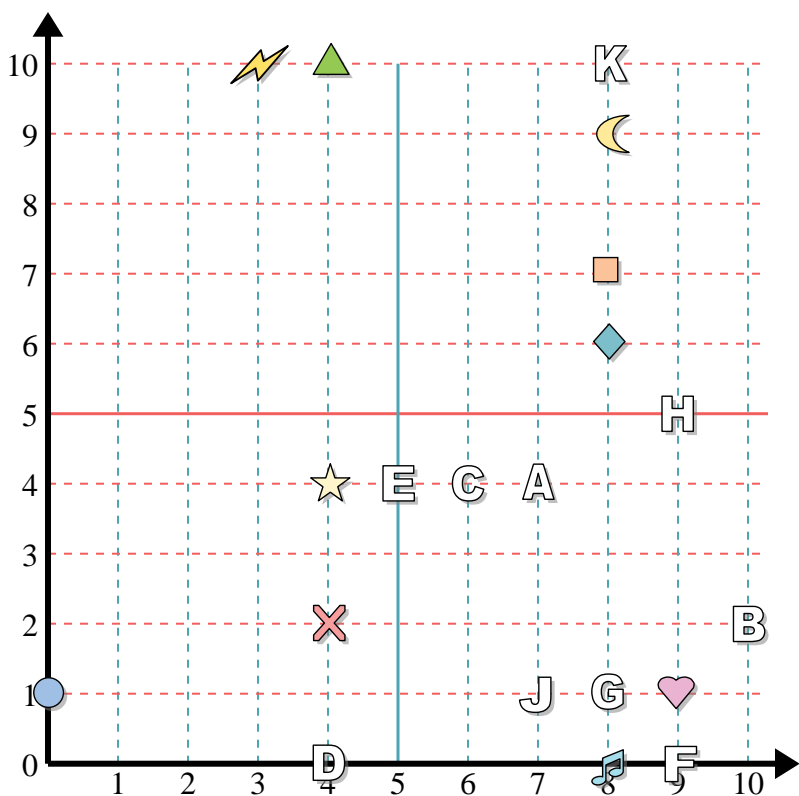
Determine the coordinates of each figure.

- 1) star
- 2) moon
- 3) heart
- 4) diamond
- 5) lightning
- 6) triangle
- 7) circle
- 8) music note
- 9) square
- 10) cross

Determine which letter is at each coordinate.

- 11) (9 5)
- 12) (8 10)
- 13) (8 1)
- 14) (9 0)
- 15) (7 4)
- 16) (6 4)
- 17) (4 0)
- 18) (7 1)
- 19) (10 2)
- 20) (5 4)

1. \_\_\_\_\_
2. \_\_\_\_\_
3. \_\_\_\_\_
4. \_\_\_\_\_
5. \_\_\_\_\_
6. \_\_\_\_\_
7. \_\_\_\_\_
8. \_\_\_\_\_
9. \_\_\_\_\_
10. \_\_\_\_\_
11. \_\_\_\_\_
12. \_\_\_\_\_
13. \_\_\_\_\_
14. \_\_\_\_\_
15. \_\_\_\_\_
16. \_\_\_\_\_
17. \_\_\_\_\_
18. \_\_\_\_\_
19. \_\_\_\_\_
20. \_\_\_\_\_



Determine the coordinates of each figure.

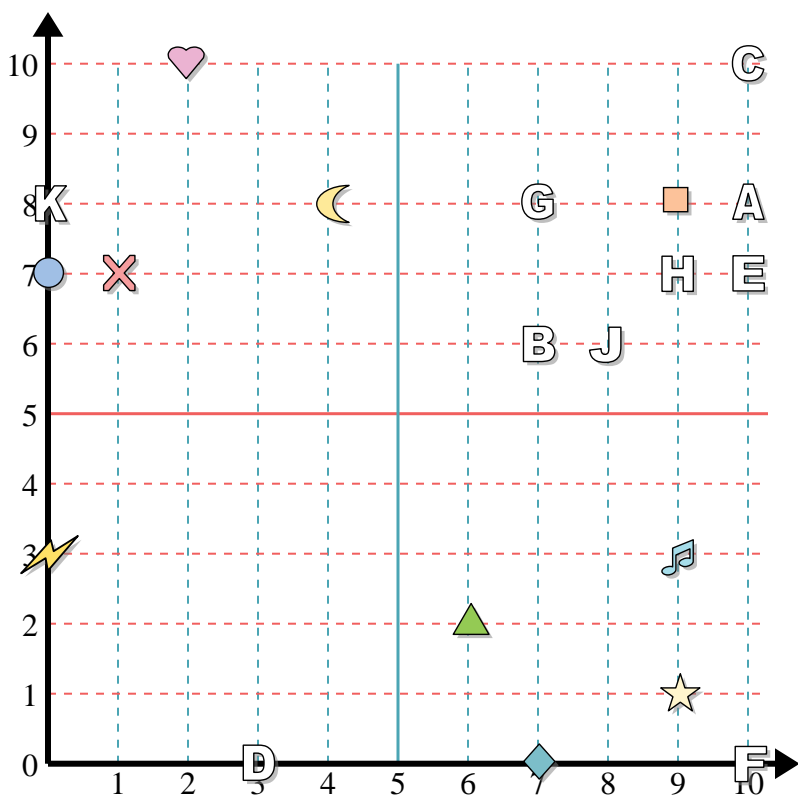
- 1) star
- 2) moon
- 3) heart
- 4) diamond
- 5) lightning
- 6) triangle
- 7) circle
- 8) music note
- 9) square
- 10) cross

Determine which letter is at each coordinate.

- 11) (9 5)
- 12) (8 10)
- 13) (8 1)
- 14) (9 0)
- 15) (7 4)
- 16) (6 4)
- 17) (4 0)
- 18) (7 1)
- 19) (10 2)
- 20) (5 4)

**Réponses**

- 1. **(4 4)**
- 2. **(8 9)**
- 3. **(9 1)**
- 4. **(8 6)**
- 5. **(3 10)**
- 6. **(4 10)**
- 7. **(0 1)**
- 8. **(8 0)**
- 9. **(8 7)**
- 10. **(4 2)**
- 11. **H**
- 12. **K**
- 13. **G**
- 14. **F**
- 15. **A**
- 16. **C**
- 17. **D**
- 18. **J**
- 19. **B**
- 20. **E**



**Réponses**

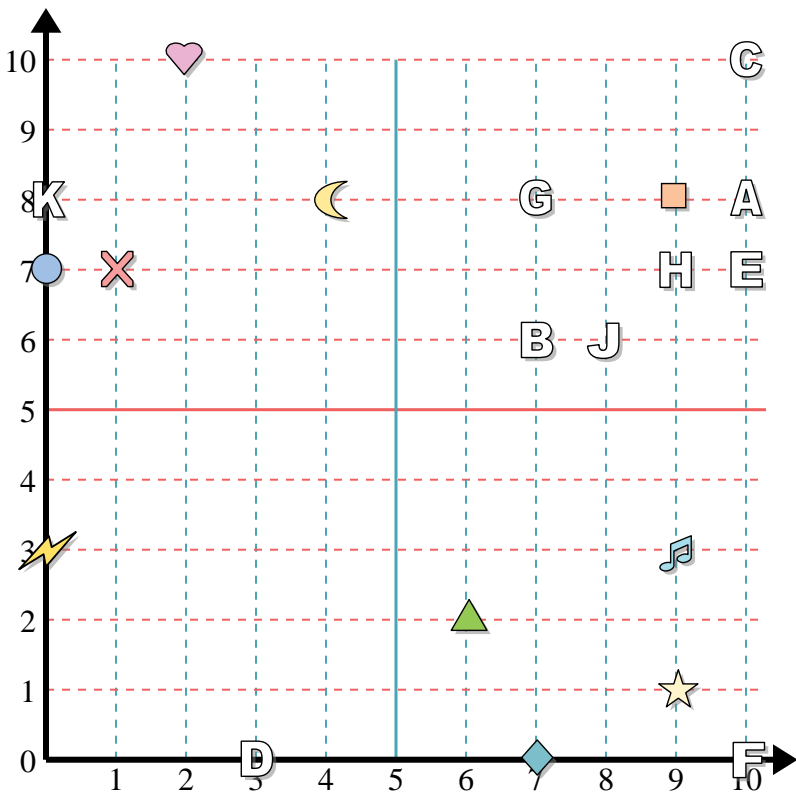
1. \_\_\_\_\_
2. \_\_\_\_\_
3. \_\_\_\_\_
4. \_\_\_\_\_
5. \_\_\_\_\_
6. \_\_\_\_\_
7. \_\_\_\_\_
8. \_\_\_\_\_
9. \_\_\_\_\_
10. \_\_\_\_\_
11. \_\_\_\_\_
12. \_\_\_\_\_
13. \_\_\_\_\_
14. \_\_\_\_\_
15. \_\_\_\_\_
16. \_\_\_\_\_
17. \_\_\_\_\_
18. \_\_\_\_\_
19. \_\_\_\_\_
20. \_\_\_\_\_

**Determine the coordinates of each figure.**

- |               |              |
|---------------|--------------|
| 1) diamond    | 2) star      |
| 3) triangle   | 4) moon      |
| 5) music note | 6) lightning |
| 7) square     | 8) heart     |
| 9) circle     | 10) cross    |

**Determine which letter is at each coordinate.**

- |             |            |
|-------------|------------|
| 11) (10 8)  | 12) (10 0) |
| 13) (9 7)   | 14) (10 7) |
| 15) (8 6)   | 16) (7 8)  |
| 17) (0 8)   | 18) (7 6)  |
| 19) (10 10) | 20) (3 0)  |



**Réponses**

1. (7 0)
2. (9 1)
3. (6 2)
4. (4 8)
5. (9 3)
6. (0 3)
7. (9 8)
8. (2 10)
9. (0 7)
10. (1 7)
11. A
12. F
13. H
14. E
15. J
16. G
17. K
18. B
19. C
20. D

Determine the coordinates of each figure.

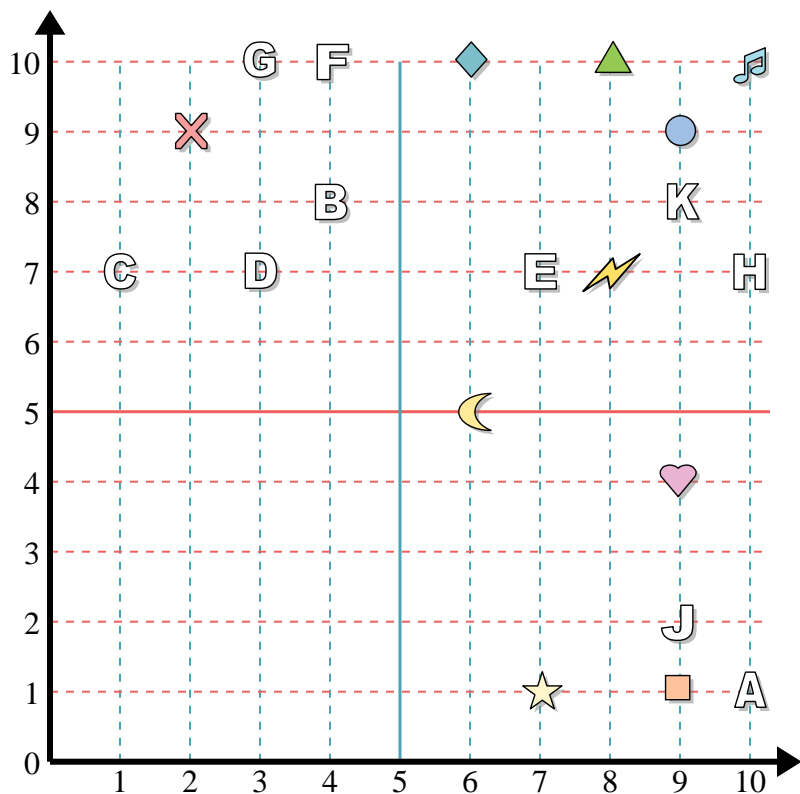
- |               |              |
|---------------|--------------|
| 1) diamond    | 2) star      |
| 3) triangle   | 4) moon      |
| 5) music note | 6) lightning |
| 7) square     | 8) heart     |
| 9) circle     | 10) cross    |

Determine which letter is at each coordinate.

- |             |            |
|-------------|------------|
| 11) (10 8)  | 12) (10 0) |
| 13) (9 7)   | 14) (10 7) |
| 15) (8 6)   | 16) (7 8)  |
| 17) (0 8)   | 18) (7 6)  |
| 19) (10 10) | 20) (3 0)  |



**Réponses**



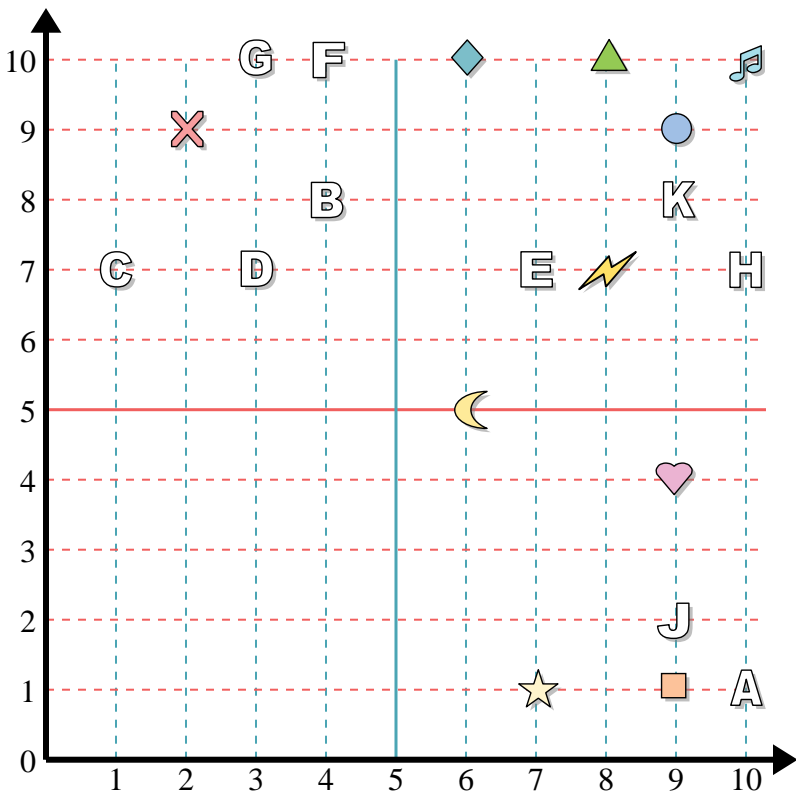
**Determine the coordinates of each figure.**

- |               |             |
|---------------|-------------|
| 1) star       | 2) cross    |
| 3) music note | 4) square   |
| 5) lightning  | 6) moon     |
| 7) circle     | 8) heart    |
| 9) triangle   | 10) diamond |

**Determine which letter is at each coordinate.**

- |            |            |
|------------|------------|
| 11) (10 1) | 12) (4 10) |
| 13) (9 8)  | 14) (10 7) |
| 15) (9 2)  | 16) (3 7)  |
| 17) (1 7)  | 18) (4 8)  |
| 19) (7 7)  | 20) (3 10) |

1. \_\_\_\_\_
2. \_\_\_\_\_
3. \_\_\_\_\_
4. \_\_\_\_\_
5. \_\_\_\_\_
6. \_\_\_\_\_
7. \_\_\_\_\_
8. \_\_\_\_\_
9. \_\_\_\_\_
10. \_\_\_\_\_
11. \_\_\_\_\_
12. \_\_\_\_\_
13. \_\_\_\_\_
14. \_\_\_\_\_
15. \_\_\_\_\_
16. \_\_\_\_\_
17. \_\_\_\_\_
18. \_\_\_\_\_
19. \_\_\_\_\_
20. \_\_\_\_\_



**Réponses**

1. (7 1)
2. (2 9)
3. (10 10)
4. (9 1)
5. (8 7)
6. (6 5)
7. (9 9)
8. (9 4)
9. (8 10)
10. (6 10)
11. A
12. F
13. K
14. H
15. J
16. D
17. C
18. B
19. E
20. G

Determine the coordinates of each figure.

- |               |             |
|---------------|-------------|
| 1) star       | 2) cross    |
| 3) music note | 4) square   |
| 5) lightning  | 6) moon     |
| 7) circle     | 8) heart    |
| 9) triangle   | 10) diamond |

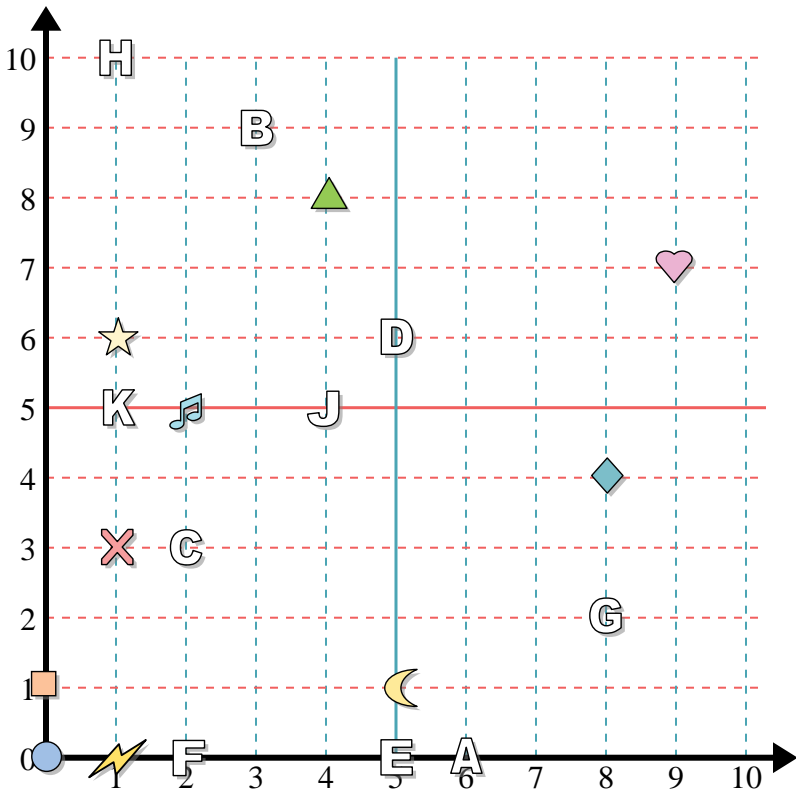
Determine which letter is at each coordinate.

- |            |            |
|------------|------------|
| 11) (10 1) | 12) (4 10) |
| 13) (9 8)  | 14) (10 7) |
| 15) (9 2)  | 16) (3 7)  |
| 17) (1 7)  | 18) (4 8)  |
| 19) (7 7)  | 20) (3 10) |





**Réponses**



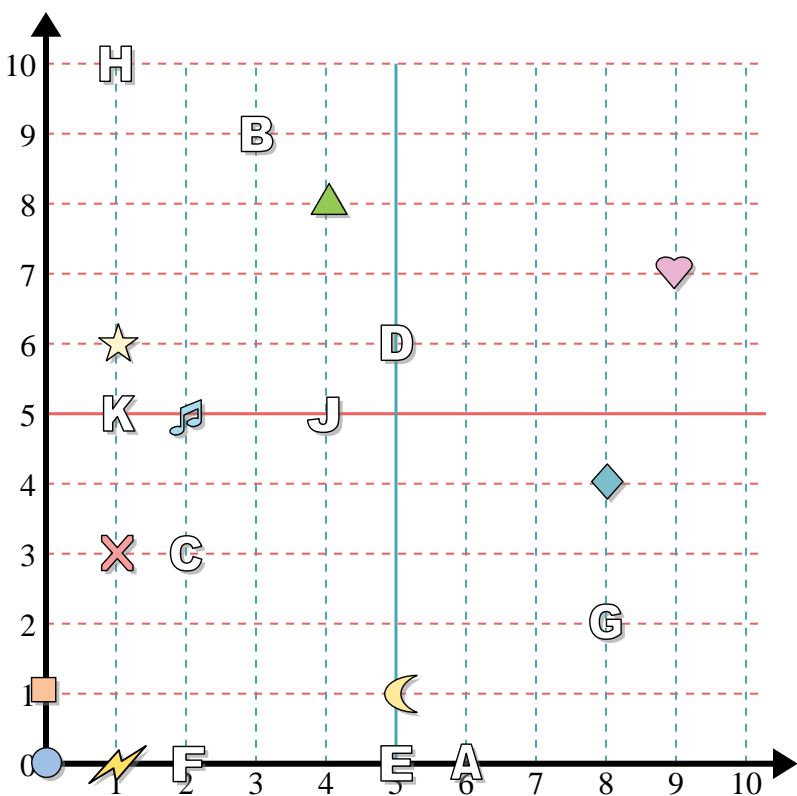
Determine the coordinates of each figure.

- 1) music note
- 2) triangle
- 3) cross
- 4) heart
- 5) lightning
- 6) square
- 7) circle
- 8) diamond
- 9) moon
- 10) star

Determine which letter is at each coordinate.

- 11) (8 2)
- 12) (1 5)
- 13) (4 5)
- 14) (5 0)
- 15) (5 6)
- 16) (6 0)
- 17) (3 9)
- 18) (2 3)
- 19) (2 0)
- 20) (1 10)

1. \_\_\_\_\_
2. \_\_\_\_\_
3. \_\_\_\_\_
4. \_\_\_\_\_
5. \_\_\_\_\_
6. \_\_\_\_\_
7. \_\_\_\_\_
8. \_\_\_\_\_
9. \_\_\_\_\_
10. \_\_\_\_\_
11. \_\_\_\_\_
12. \_\_\_\_\_
13. \_\_\_\_\_
14. \_\_\_\_\_
15. \_\_\_\_\_
16. \_\_\_\_\_
17. \_\_\_\_\_
18. \_\_\_\_\_
19. \_\_\_\_\_
20. \_\_\_\_\_



Determine the coordinates of each figure.

- 1) music note
- 2) triangle
- 3) cross
- 4) heart
- 5) lightning
- 6) square
- 7) circle
- 8) diamond
- 9) moon
- 10) star

Determine which letter is at each coordinate.

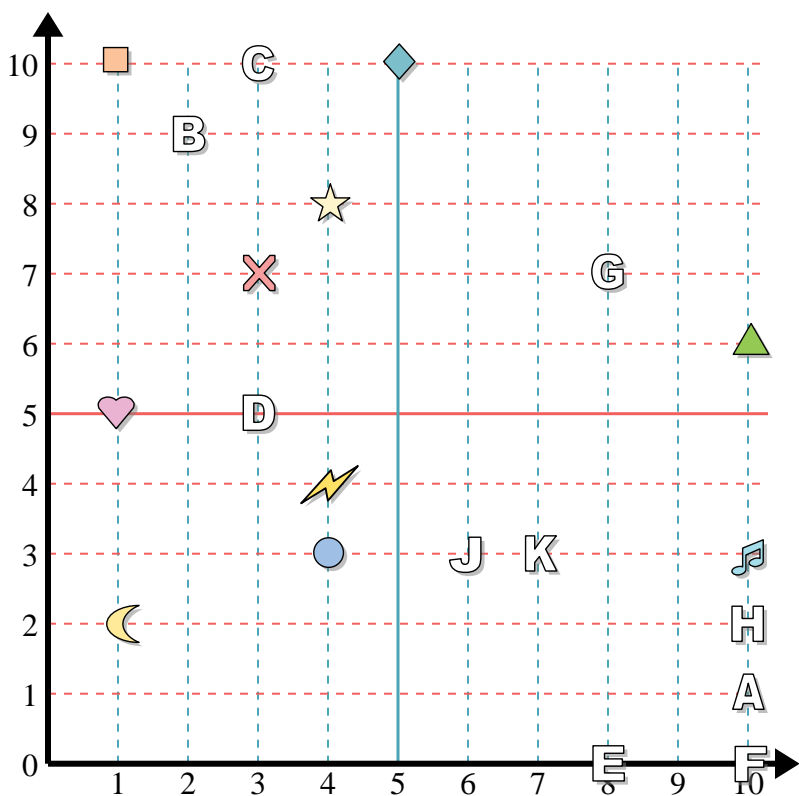
- 11) (8 2)
- 12) (1 5)
- 13) (4 5)
- 14) (5 0)
- 15) (5 6)
- 16) (6 0)
- 17) (3 9)
- 18) (2 3)
- 19) (2 0)
- 20) (1 10)

**Réponses**

- 1. (2 5)
- 2. (4 8)
- 3. (1 3)
- 4. (9 7)
- 5. (1 0)
- 6. (0 1)
- 7. (0 0)
- 8. (8 4)
- 9. (5 1)
- 10. (1 6)
- 11. G
- 12. K
- 13. J
- 14. E
- 15. D
- 16. A
- 17. B
- 18. C
- 19. F
- 20. H



**Réponses**



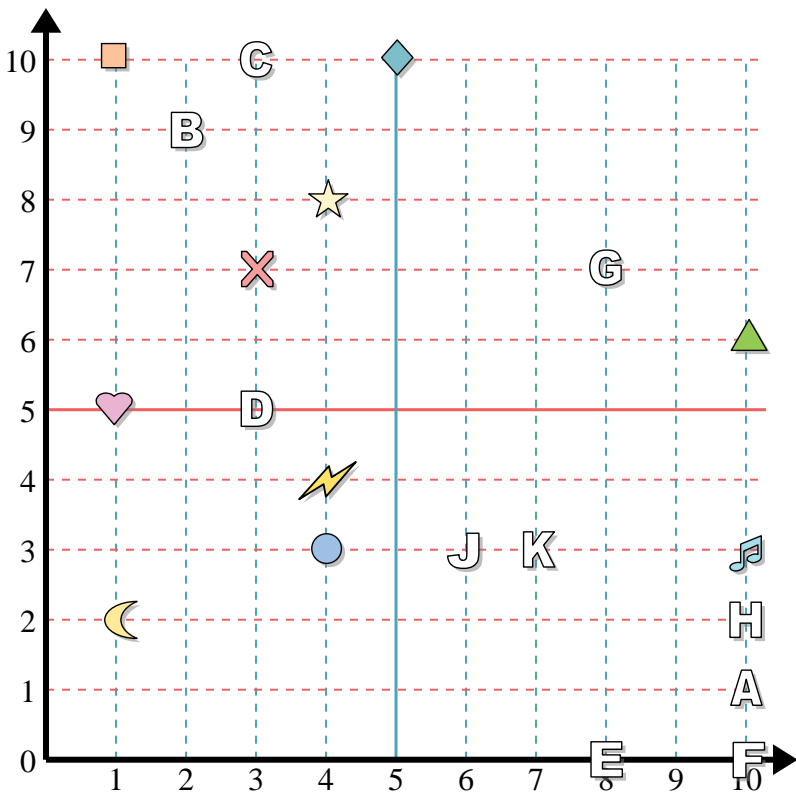
**Determine the coordinates of each figure.**

- |             |               |
|-------------|---------------|
| 1) moon     | 2) music note |
| 3) triangle | 4) square     |
| 5) circle   | 6) cross      |
| 7) heart    | 8) diamond    |
| 9) star     | 10) lightning |

**Determine which letter is at each coordinate.**

- |            |            |
|------------|------------|
| 11) (2 9)  | 12) (3 5)  |
| 13) (8 0)  | 14) (6 3)  |
| 15) (8 7)  | 16) (10 2) |
| 17) (10 0) | 18) (7 3)  |
| 19) (10 1) | 20) (3 10) |

1. \_\_\_\_\_
2. \_\_\_\_\_
3. \_\_\_\_\_
4. \_\_\_\_\_
5. \_\_\_\_\_
6. \_\_\_\_\_
7. \_\_\_\_\_
8. \_\_\_\_\_
9. \_\_\_\_\_
10. \_\_\_\_\_
11. \_\_\_\_\_
12. \_\_\_\_\_
13. \_\_\_\_\_
14. \_\_\_\_\_
15. \_\_\_\_\_
16. \_\_\_\_\_
17. \_\_\_\_\_
18. \_\_\_\_\_
19. \_\_\_\_\_
20. \_\_\_\_\_



Determine the coordinates of each figure.

- 1) moon
- 2) music note
- 3) triangle
- 4) square
- 5) circle
- 6) cross
- 7) heart
- 8) diamond
- 9) star
- 10) lightning

Determine which letter is at each coordinate.

- 11) (2 9)
- 12) (3 5)
- 13) (8 0)
- 14) (6 3)
- 15) (8 7)
- 16) (10 2)
- 17) (10 0)
- 18) (7 3)
- 19) (10 1)
- 20) (3 10)

**Réponses**

- 1. (1 2)
- 2. (10 3)
- 3. (10 6)
- 4. (1 10)
- 5. (4 3)
- 6. (3 7)
- 7. (1 5)
- 8. (5 10)
- 9. (4 8)
- 10. (4 4)
- 11. B
- 12. D
- 13. E
- 14. J
- 15. G
- 16. H
- 17. F
- 18. K
- 19. A
- 20. C