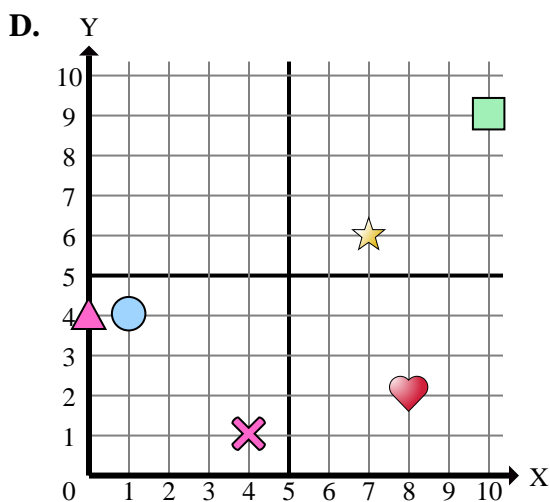
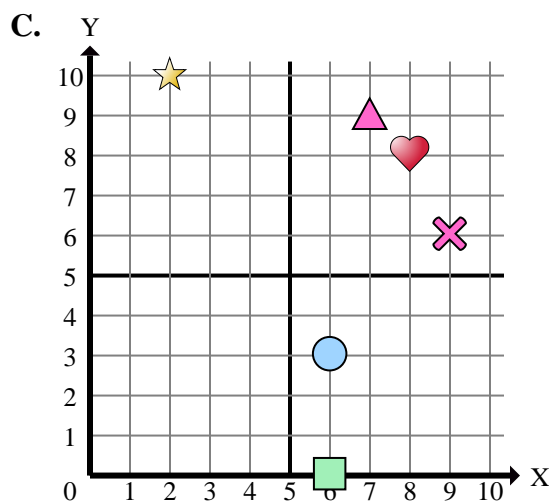
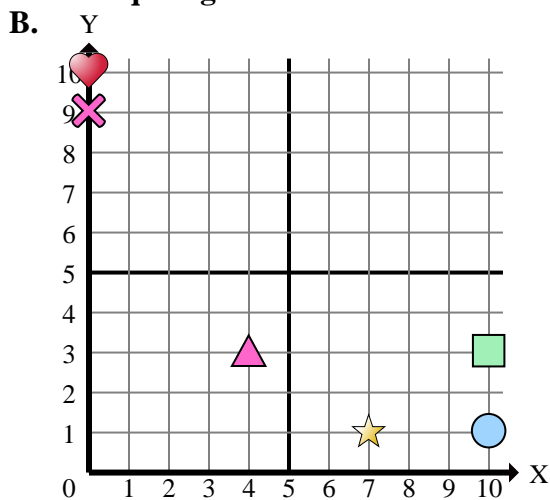
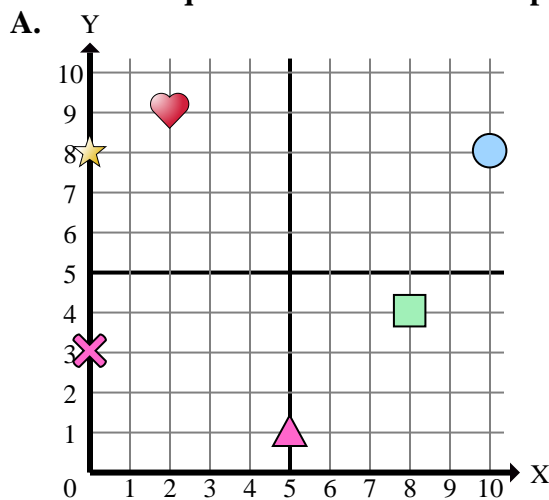




Déterminez quelle coordonnées correspondant à chaque figure.

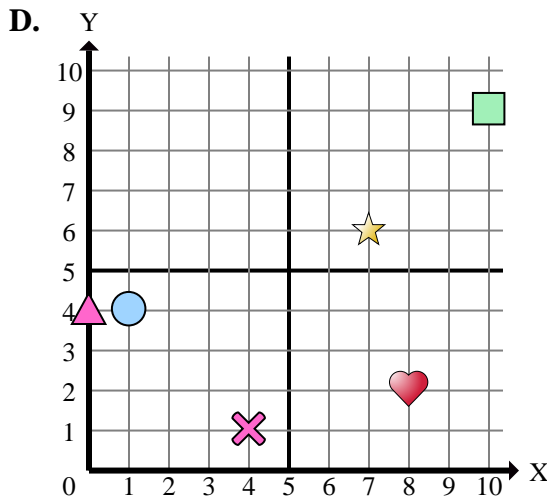
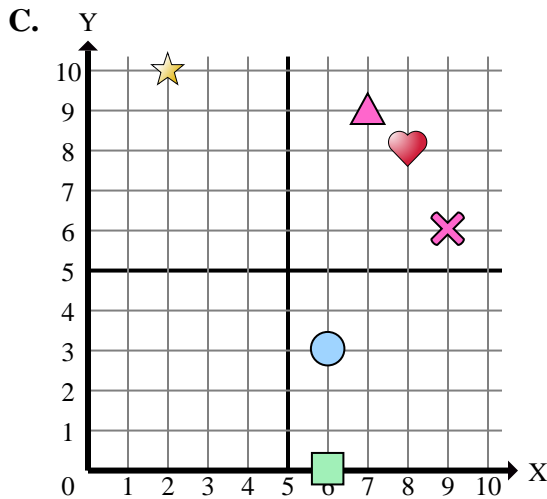
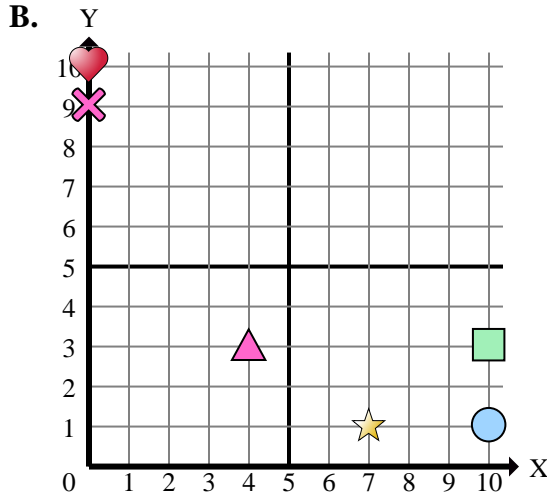
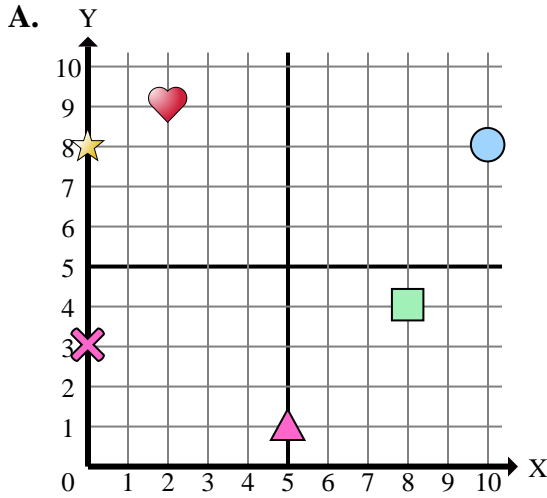
**Réponses**

1. \_\_\_\_\_
2. \_\_\_\_\_
3. \_\_\_\_\_
4. \_\_\_\_\_
5. \_\_\_\_\_
6. \_\_\_\_\_
7. \_\_\_\_\_
8. \_\_\_\_\_
9. \_\_\_\_\_
10. \_\_\_\_\_
11. \_\_\_\_\_
12. \_\_\_\_\_
13. \_\_\_\_\_
14. \_\_\_\_\_
15. \_\_\_\_\_

- 1) Which coordinate plane has a shape at (7 , 6)?
- 2) Which coordinate plane has a shape at (8 , 4)?
- 3) Which coordinate plane has a shape at (0 , 10)?
- 4) Which coordinate plane has a shape at (6 , 3)?
- 5) Which coordinate plane has a shape at (2 , 9)?
- 6) Which coordinate plane has a shape at (8 , 2)?
- 7) Which coordinate plane has a shape at (0 , 4)?
- 8) Which coordinate plane has a shape at (1 , 4)?
- 9) Which coordinate plane has a shape at (0 , 8)?
- 10) Which coordinate plane has a shape at (4 , 3)?
- 11) Which coordinate plane has a shape at (0 , 3)?
- 12) Which coordinate plane has a shape at (6 , 0)?
- 13) Which coordinate plane has a shape at (7 , 1)?
- 14) Which coordinate plane has a shape at (2 , 10)?
- 15) Which coordinate plane has a shape at (10 , 9)?



Déterminez quelle coordonnées correspondant à chaque figure.

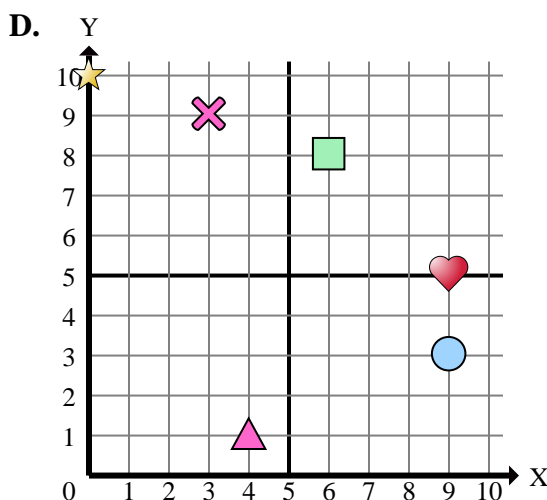
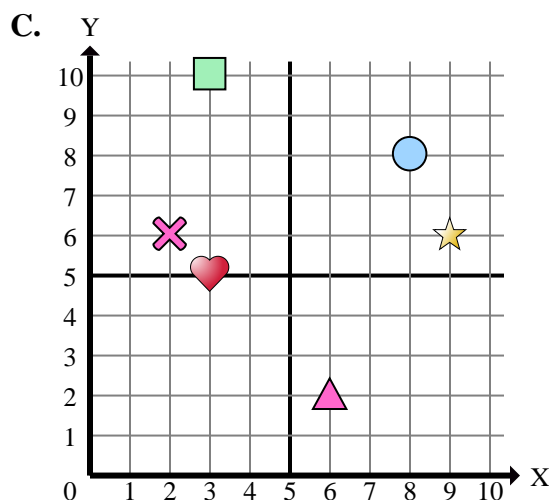
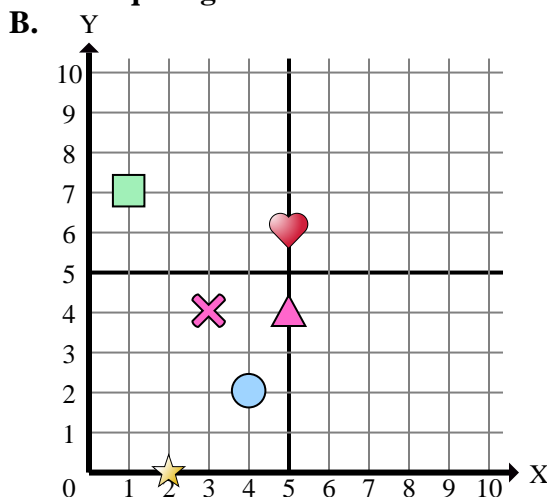
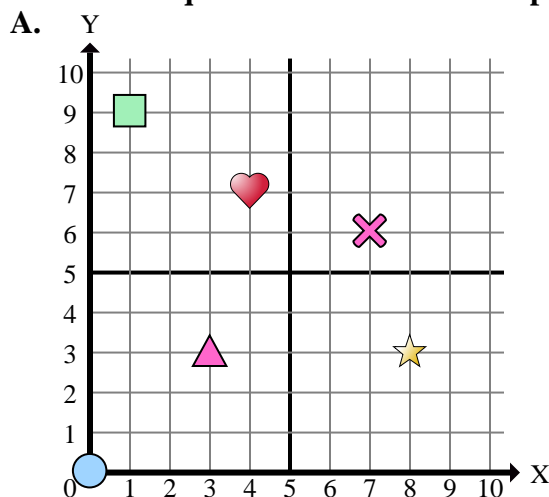
**Réponses**

1. **D**
2. **A**
3. **B**
4. **C**
5. **A**
6. **D**
7. **D**
8. **D**
9. **A**
10. **B**
11. **A**
12. **C**
13. **B**
14. **C**
15. **D**

- 1) Which coordinate plane has a shape at (7 , 6)?
- 2) Which coordinate plane has a shape at (8 , 4)?
- 3) Which coordinate plane has a shape at (0 , 10)?
- 4) Which coordinate plane has a shape at (6 , 3)?
- 5) Which coordinate plane has a shape at (2 , 9)?
- 6) Which coordinate plane has a shape at (8 , 2)?
- 7) Which coordinate plane has a shape at (0 , 4)?
- 8) Which coordinate plane has a shape at (1 , 4)?
- 9) Which coordinate plane has a shape at (0 , 8)?
- 10) Which coordinate plane has a shape at (4 , 3)?
- 11) Which coordinate plane has a shape at (0 , 3)?
- 12) Which coordinate plane has a shape at (6 , 0)?
- 13) Which coordinate plane has a shape at (7 , 1)?
- 14) Which coordinate plane has a shape at (2 , 10)?
- 15) Which coordinate plane has a shape at (10 , 9)?



Déterminez quelle coordonnées correspondant à chaque figure.

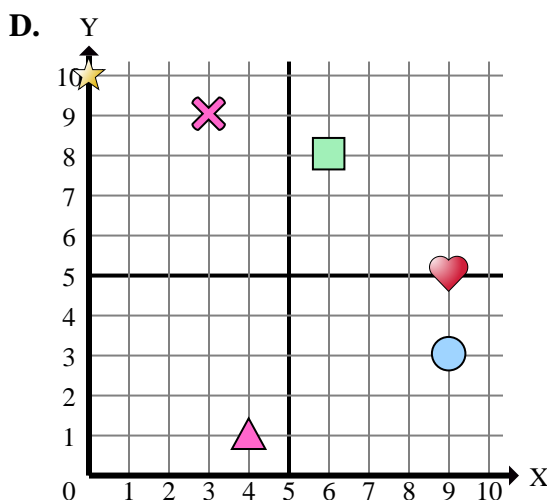
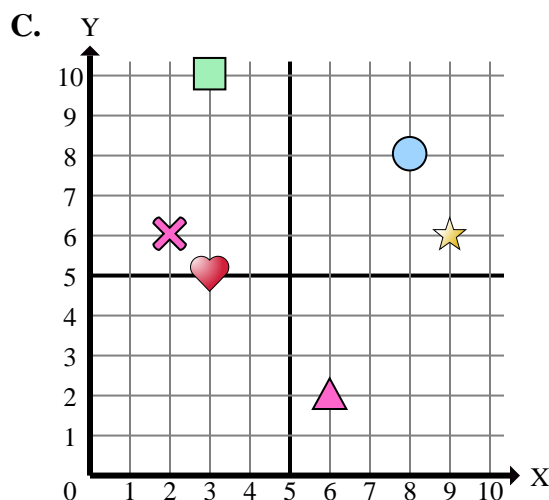
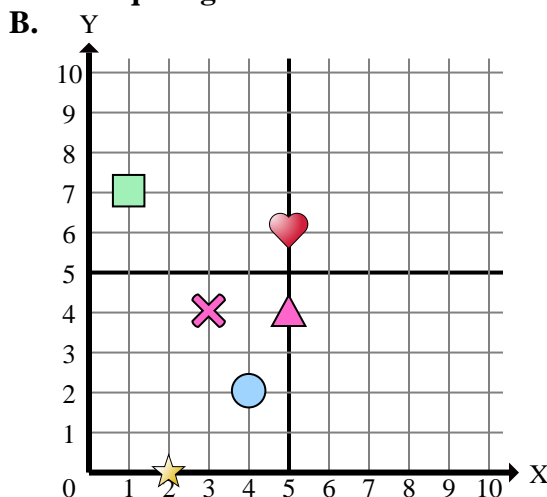
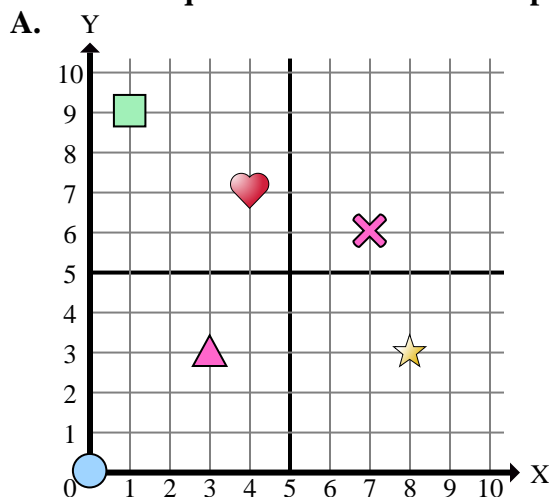
**Réponses**

1. \_\_\_\_\_
2. \_\_\_\_\_
3. \_\_\_\_\_
4. \_\_\_\_\_
5. \_\_\_\_\_
6. \_\_\_\_\_
7. \_\_\_\_\_
8. \_\_\_\_\_
9. \_\_\_\_\_
10. \_\_\_\_\_
11. \_\_\_\_\_
12. \_\_\_\_\_
13. \_\_\_\_\_
14. \_\_\_\_\_
15. \_\_\_\_\_

- 1) Which coordinate plane has a shape at (5 , 4)?
- 2) Which coordinate plane has a shape at (3 , 10)?
- 3) Which coordinate plane has a shape at (2 , 0)?
- 4) Which coordinate plane has a shape at (8 , 8)?
- 5) Which coordinate plane has a shape at (9 , 6)?
- 6) Which coordinate plane has a shape at (0 , 10)?
- 7) Which coordinate plane has a shape at (3 , 4)?
- 8) Which coordinate plane has a shape at (3 , 5)?
- 9) Which coordinate plane has a shape at (7 , 6)?
- 10) Which coordinate plane has a shape at (4 , 7)?
- 11) Which coordinate plane has a shape at (6 , 8)?
- 12) Which coordinate plane has a shape at (3 , 3)?
- 13) Which coordinate plane has a shape at (4 , 1)?
- 14) Which coordinate plane has a shape at (6 , 2)?
- 15) Which coordinate plane has a shape at (0 , 0)?



Déterminez quelle coordonnées correspondant à chaque figure.

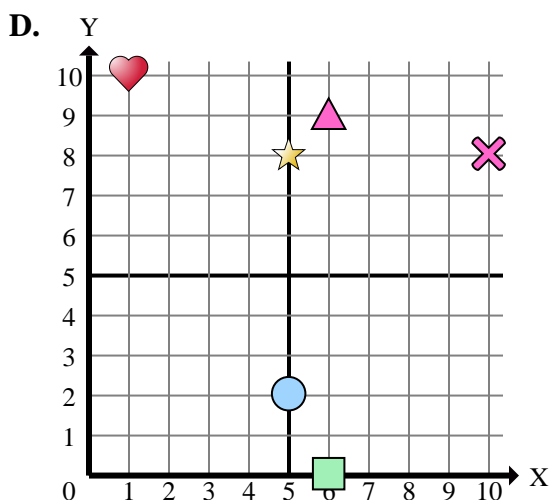
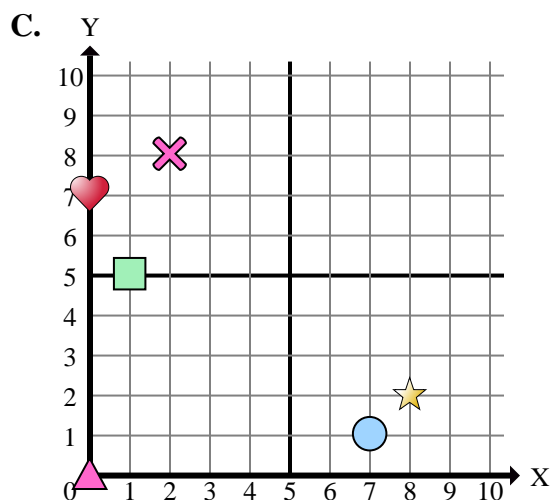
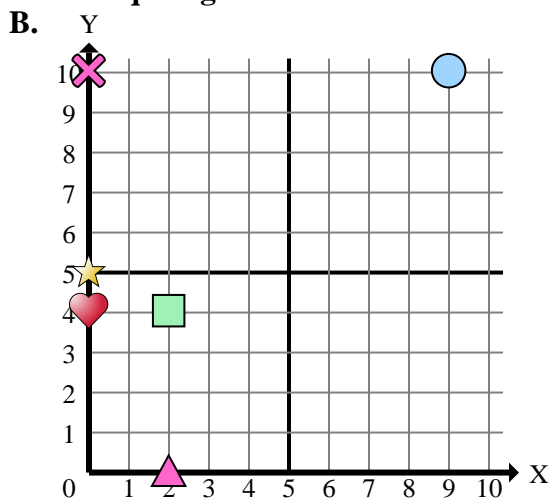
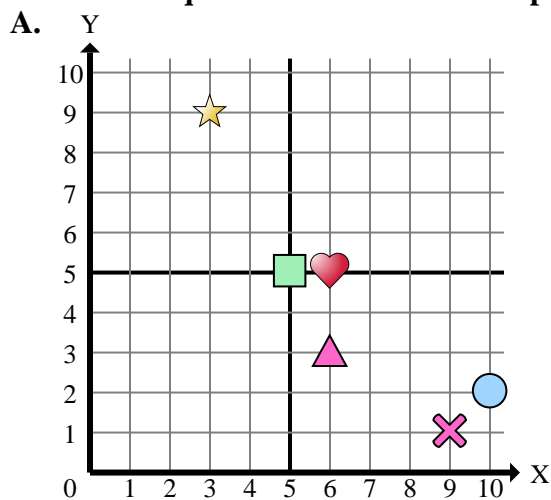
**Réponses**

1. **B**
2. **C**
3. **B**
4. **C**
5. **C**
6. **D**
7. **B**
8. **C**
9. **A**
10. **A**
11. **D**
12. **A**
13. **D**
14. **C**
15. **A**

- 1) Which coordinate plane has a shape at (5 , 4)?
- 2) Which coordinate plane has a shape at (3 , 10)?
- 3) Which coordinate plane has a shape at (2 , 0)?
- 4) Which coordinate plane has a shape at (8 , 8)?
- 5) Which coordinate plane has a shape at (9 , 6)?
- 6) Which coordinate plane has a shape at (0 , 10)?
- 7) Which coordinate plane has a shape at (3 , 4)?
- 8) Which coordinate plane has a shape at (3 , 5)?
- 9) Which coordinate plane has a shape at (7 , 6)?
- 10) Which coordinate plane has a shape at (4 , 7)?
- 11) Which coordinate plane has a shape at (6 , 8)?
- 12) Which coordinate plane has a shape at (3 , 3)?
- 13) Which coordinate plane has a shape at (4 , 1)?
- 14) Which coordinate plane has a shape at (6 , 2)?
- 15) Which coordinate plane has a shape at (0 , 0)?



Déterminez quelle coordonnées correspondant à chaque figure.

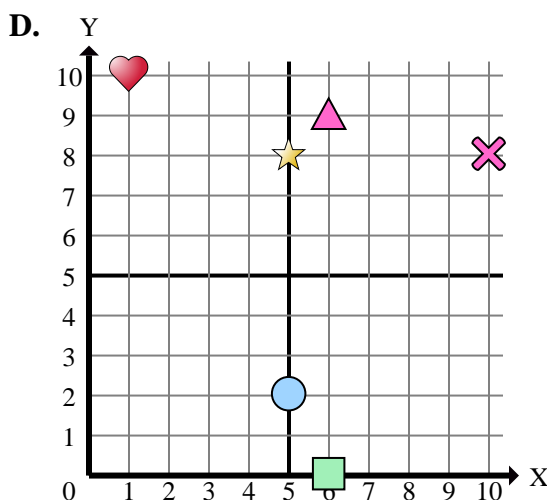
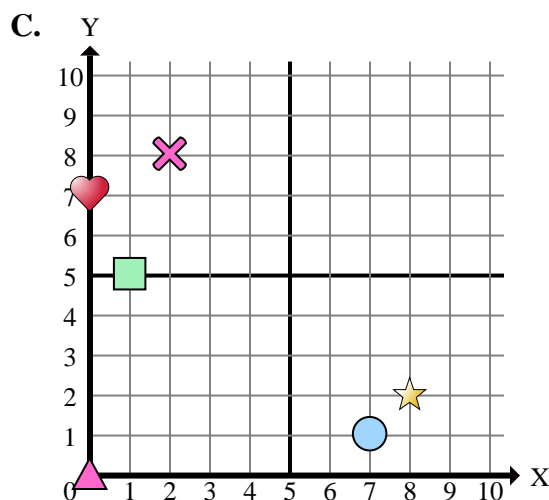
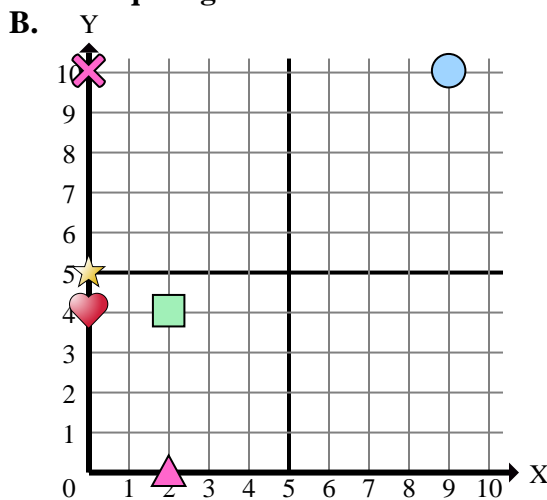
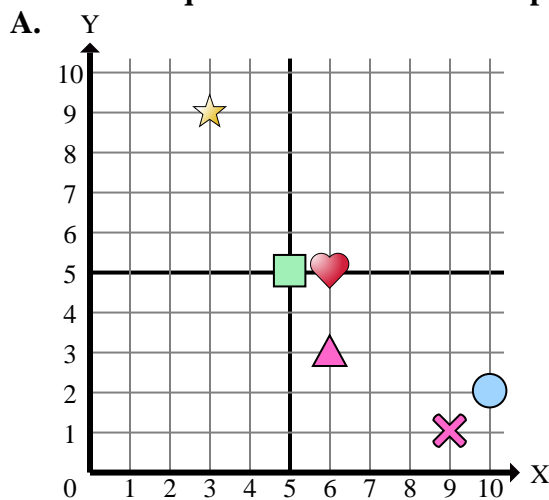
**Réponses**

1. \_\_\_\_\_
2. \_\_\_\_\_
3. \_\_\_\_\_
4. \_\_\_\_\_
5. \_\_\_\_\_
6. \_\_\_\_\_
7. \_\_\_\_\_
8. \_\_\_\_\_
9. \_\_\_\_\_
10. \_\_\_\_\_
11. \_\_\_\_\_
12. \_\_\_\_\_
13. \_\_\_\_\_
14. \_\_\_\_\_
15. \_\_\_\_\_

- 1) Which coordinate plane has a shape at (0 , 5)?
- 2) Which coordinate plane has a shape at (2 , 0)?
- 3) Which coordinate plane has a shape at (5 , 5)?
- 4) Which coordinate plane has a shape at (3 , 9)?
- 5) Which coordinate plane has a shape at (0 , 7)?
- 6) Which coordinate plane has a shape at (6 , 9)?
- 7) Which coordinate plane has a shape at (6 , 5)?
- 8) Which coordinate plane has a shape at (8 , 2)?
- 9) Which coordinate plane has a shape at (5 , 8)?
- 10) Which coordinate plane has a shape at (9 , 10)?
- 11) Which coordinate plane has a shape at (0 , 0)?
- 12) Which coordinate plane has a shape at (2 , 4)?
- 13) Which coordinate plane has a shape at (0 , 10)?
- 14) Which coordinate plane has a shape at (6 , 0)?
- 15) Which coordinate plane has a shape at (10 , 8)?



Déterminez quelle coordonnées correspondant à chaque figure.

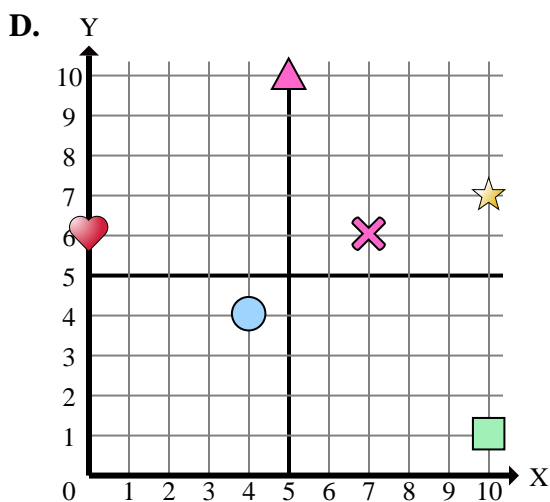
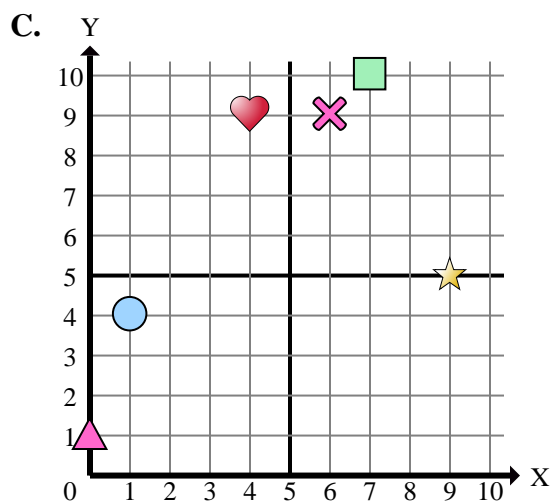
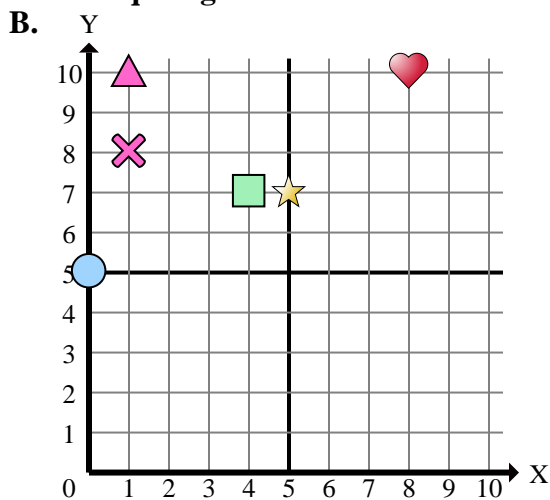
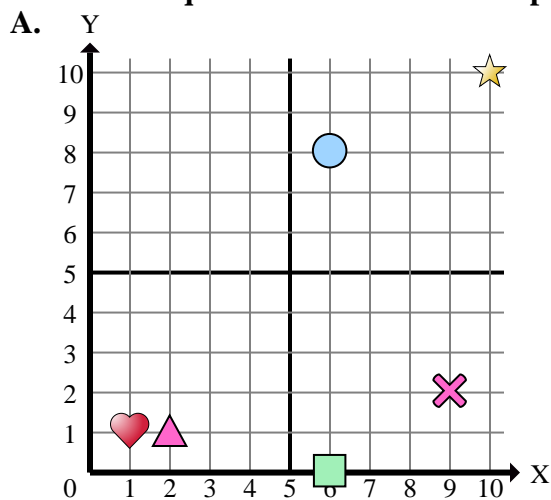
**Réponses**

1. **B**
2. **B**
3. **A**
4. **A**
5. **C**
6. **D**
7. **A**
8. **C**
9. **D**
10. **B**
11. **C**
12. **B**
13. **B**
14. **D**
15. **D**

- 1) Which coordinate plane has a shape at (0 , 5)?
- 2) Which coordinate plane has a shape at (2 , 0)?
- 3) Which coordinate plane has a shape at (5 , 5)?
- 4) Which coordinate plane has a shape at (3 , 9)?
- 5) Which coordinate plane has a shape at (0 , 7)?
- 6) Which coordinate plane has a shape at (6 , 9)?
- 7) Which coordinate plane has a shape at (6 , 5)?
- 8) Which coordinate plane has a shape at (8 , 2)?
- 9) Which coordinate plane has a shape at (5 , 8)?
- 10) Which coordinate plane has a shape at (9 , 10)?
- 11) Which coordinate plane has a shape at (0 , 0)?
- 12) Which coordinate plane has a shape at (2 , 4)?
- 13) Which coordinate plane has a shape at (0 , 10)?
- 14) Which coordinate plane has a shape at (6 , 0)?
- 15) Which coordinate plane has a shape at (10 , 8)?



Déterminez quelle coordonnées correspondant à chaque figure.

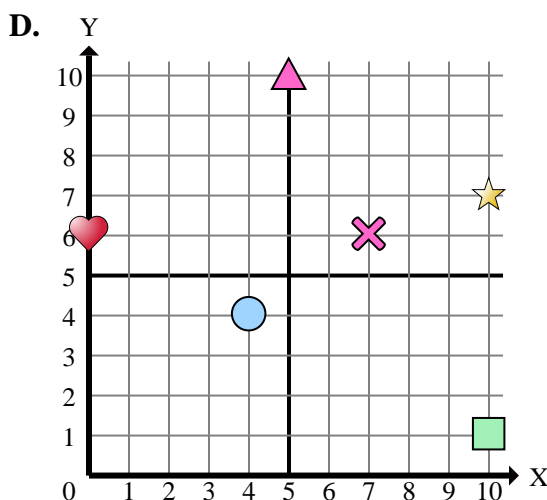
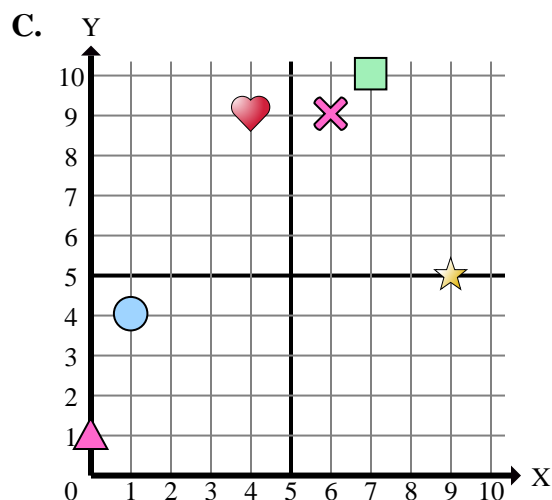
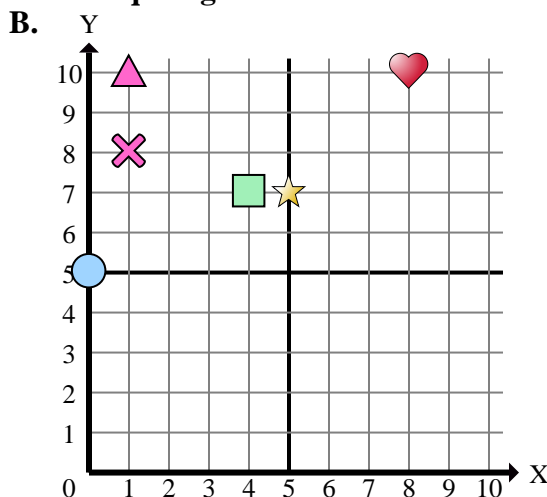
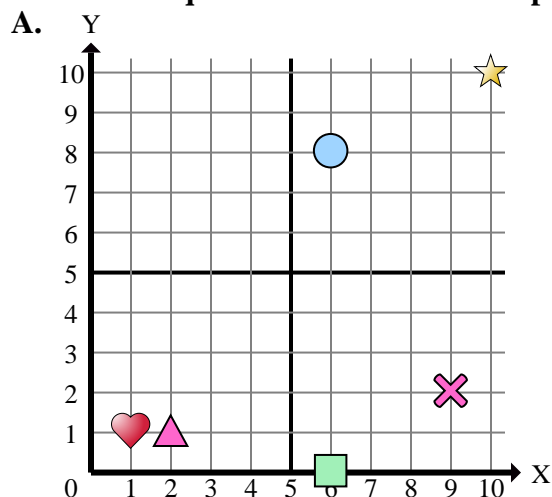
**Réponses**

1. \_\_\_\_\_
2. \_\_\_\_\_
3. \_\_\_\_\_
4. \_\_\_\_\_
5. \_\_\_\_\_
6. \_\_\_\_\_
7. \_\_\_\_\_
8. \_\_\_\_\_
9. \_\_\_\_\_
10. \_\_\_\_\_
11. \_\_\_\_\_
12. \_\_\_\_\_
13. \_\_\_\_\_
14. \_\_\_\_\_
15. \_\_\_\_\_

- 1) Which coordinate plane has a shape at (6 , 8)?
- 2) Which coordinate plane has a shape at (9 , 5)?
- 3) Which coordinate plane has a shape at (4 , 4)?
- 4) Which coordinate plane has a shape at (1 , 8)?
- 5) Which coordinate plane has a shape at (10 , 7)?
- 6) Which coordinate plane has a shape at (0 , 5)?
- 7) Which coordinate plane has a shape at (0 , 1)?
- 8) Which coordinate plane has a shape at (5 , 10)?
- 9) Which coordinate plane has a shape at (8 , 10)?
- 10) Which coordinate plane has a shape at (2 , 1)?
- 11) Which coordinate plane has a shape at (10 , 10)?
- 12) Which coordinate plane has a shape at (4 , 7)?
- 13) Which coordinate plane has a shape at (1 , 4)?
- 14) Which coordinate plane has a shape at (9 , 2)?
- 15) Which coordinate plane has a shape at (1 , 10)?



Déterminez quelle coordonnées correspondant à chaque figure.

**Réponses**

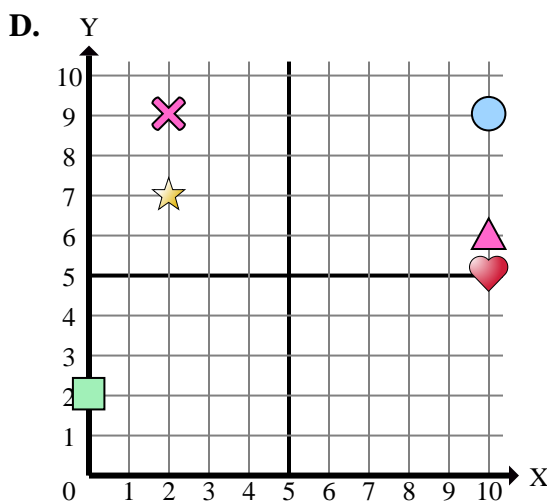
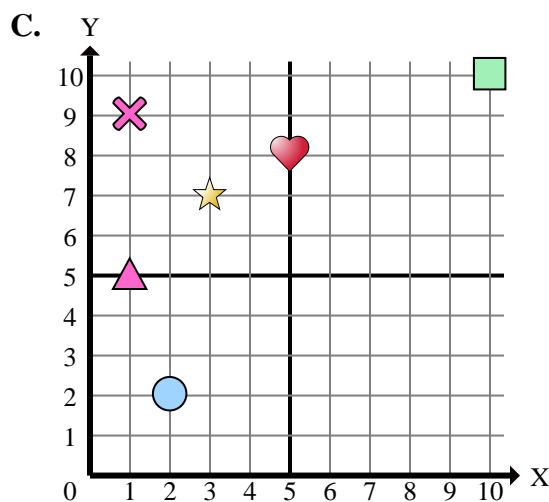
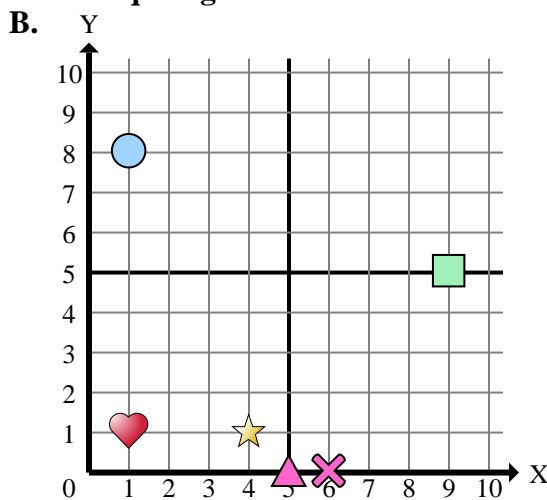
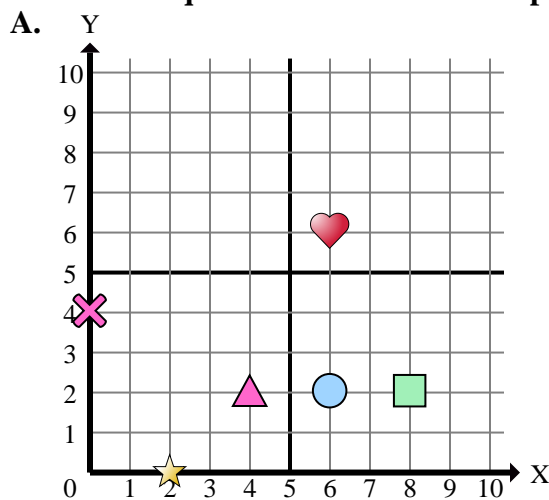
1. **A**
2. **C**
3. **D**
4. **B**
5. **D**
6. **B**
7. **C**
8. **D**
9. **B**
10. **A**
11. **A**
12. **B**
13. **C**
14. **A**
15. **B**

- 1) Which coordinate plane has a shape at (6 , 8)?
- 2) Which coordinate plane has a shape at (9 , 5)?
- 3) Which coordinate plane has a shape at (4 , 4)?
- 4) Which coordinate plane has a shape at (1 , 8)?
- 5) Which coordinate plane has a shape at (10 , 7)?
- 6) Which coordinate plane has a shape at (0 , 5)?
- 7) Which coordinate plane has a shape at (0 , 1)?
- 8) Which coordinate plane has a shape at (5 , 10)?
- 9) Which coordinate plane has a shape at (8 , 10)?
- 10) Which coordinate plane has a shape at (2 , 1)?
- 11) Which coordinate plane has a shape at (10 , 10)?
- 12) Which coordinate plane has a shape at (4 , 7)?
- 13) Which coordinate plane has a shape at (1 , 4)?
- 14) Which coordinate plane has a shape at (9 , 2)?
- 15) Which coordinate plane has a shape at (1 , 10)?





Déterminez quelle coordonnées correspondant à chaque figure.

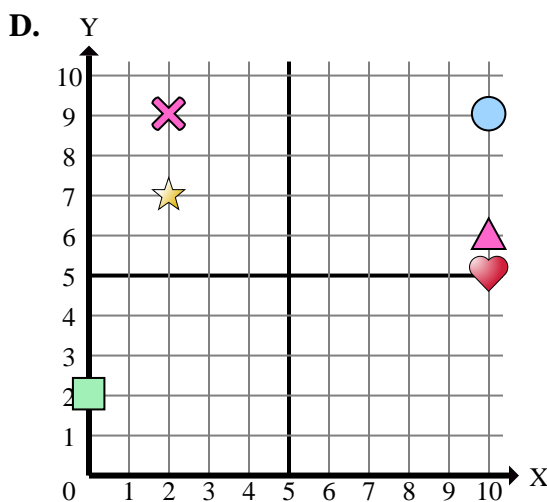
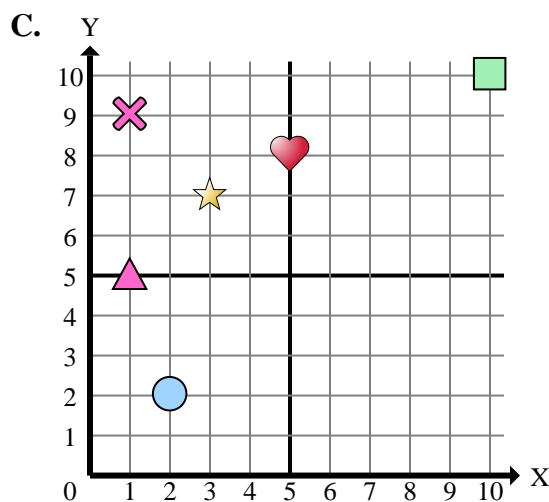
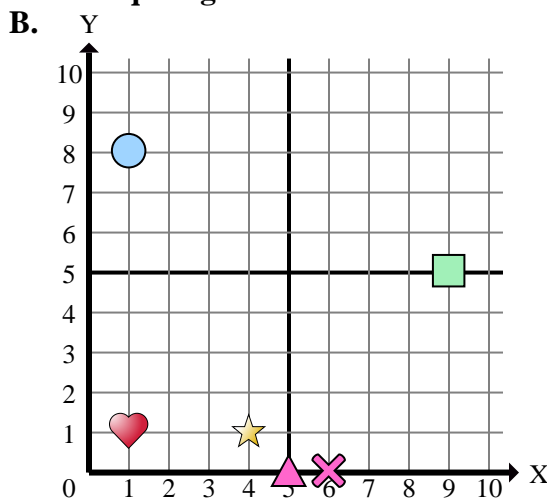
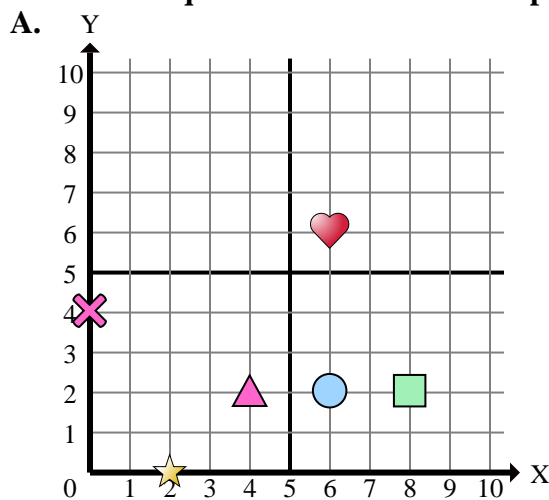
**Réponses**

1. \_\_\_\_\_
2. \_\_\_\_\_
3. \_\_\_\_\_
4. \_\_\_\_\_
5. \_\_\_\_\_
6. \_\_\_\_\_
7. \_\_\_\_\_
8. \_\_\_\_\_
9. \_\_\_\_\_
10. \_\_\_\_\_
11. \_\_\_\_\_
12. \_\_\_\_\_
13. \_\_\_\_\_
14. \_\_\_\_\_
15. \_\_\_\_\_

- 1) Which coordinate plane has a shape at (1 , 8)?
- 2) Which coordinate plane has a shape at (0 , 4)?
- 3) Which coordinate plane has a shape at (1 , 1)?
- 4) Which coordinate plane has a shape at (6 , 0)?
- 5) Which coordinate plane has a shape at (10 , 5)?
- 6) Which coordinate plane has a shape at (9 , 5)?
- 7) Which coordinate plane has a shape at (2 , 0)?
- 8) Which coordinate plane has a shape at (6 , 2)?
- 9) Which coordinate plane has a shape at (4 , 2)?
- 10) Which coordinate plane has a shape at (10 , 10)?
- 11) Which coordinate plane has a shape at (8 , 2)?
- 12) Which coordinate plane has a shape at (2 , 7)?
- 13) Which coordinate plane has a shape at (1 , 5)?
- 14) Which coordinate plane has a shape at (6 , 6)?
- 15) Which coordinate plane has a shape at (3 , 7)?



Déterminez quelle coordonnées correspondant à chaque figure.

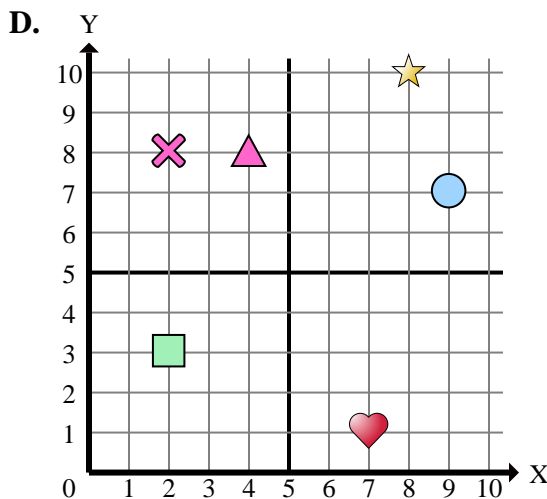
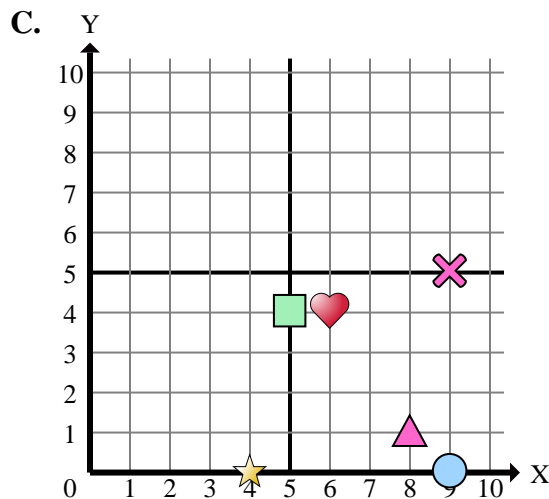
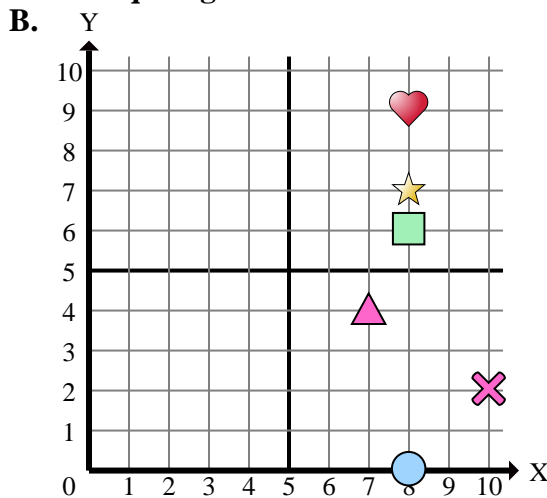
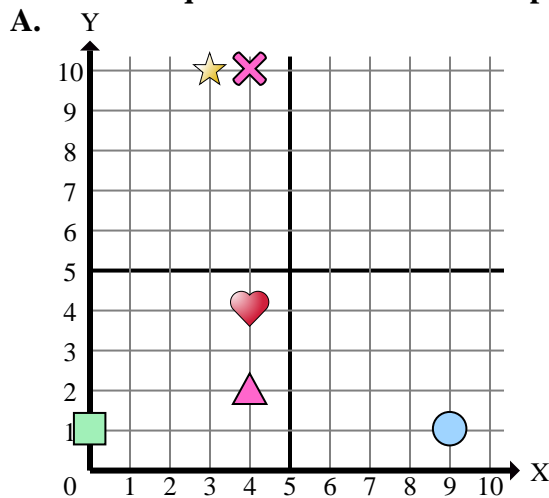
**Réponses**

1. **B**
2. **A**
3. **B**
4. **B**
5. **D**
6. **B**
7. **A**
8. **A**
9. **A**
10. **C**
11. **A**
12. **D**
13. **C**
14. **A**
15. **C**

- 1) Which coordinate plane has a shape at (1 , 8)?
- 2) Which coordinate plane has a shape at (0 , 4)?
- 3) Which coordinate plane has a shape at (1 , 1)?
- 4) Which coordinate plane has a shape at (6 , 0)?
- 5) Which coordinate plane has a shape at (10 , 5)?
- 6) Which coordinate plane has a shape at (9 , 5)?
- 7) Which coordinate plane has a shape at (2 , 0)?
- 8) Which coordinate plane has a shape at (6 , 2)?
- 9) Which coordinate plane has a shape at (4 , 2)?
- 10) Which coordinate plane has a shape at (10 , 10)?
- 11) Which coordinate plane has a shape at (8 , 2)?
- 12) Which coordinate plane has a shape at (2 , 7)?
- 13) Which coordinate plane has a shape at (1 , 5)?
- 14) Which coordinate plane has a shape at (6 , 6)?
- 15) Which coordinate plane has a shape at (3 , 7)?



Déterminez quelle coordonnées correspondant à chaque figure.

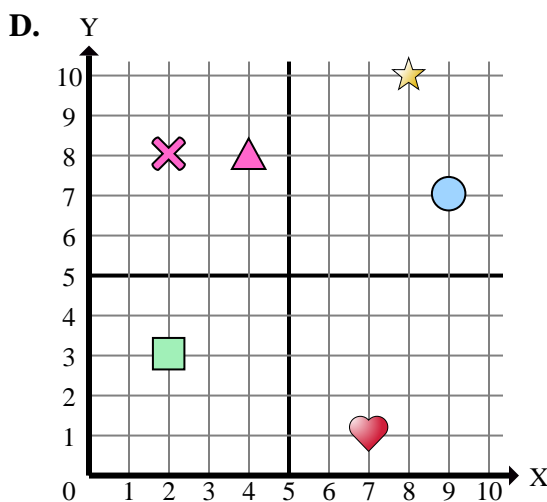
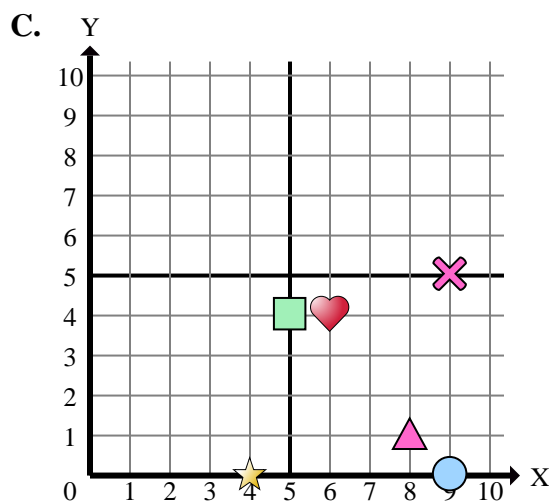
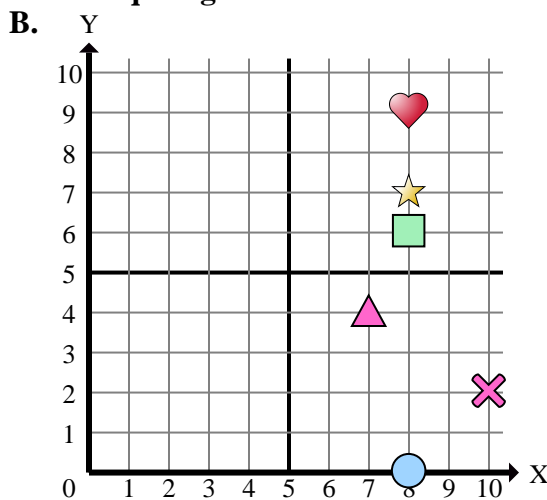
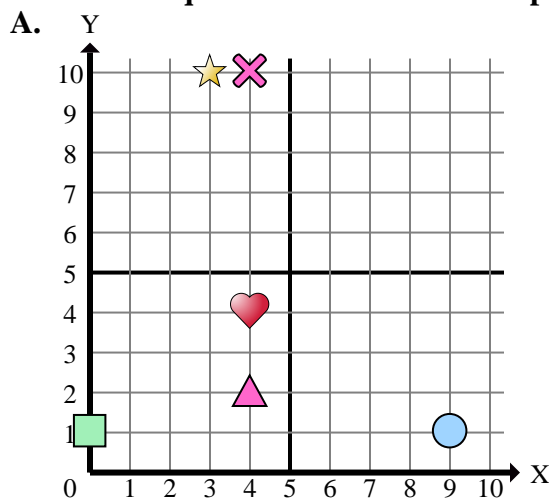
**Réponses**

1. \_\_\_\_\_
2. \_\_\_\_\_
3. \_\_\_\_\_
4. \_\_\_\_\_
5. \_\_\_\_\_
6. \_\_\_\_\_
7. \_\_\_\_\_
8. \_\_\_\_\_
9. \_\_\_\_\_
10. \_\_\_\_\_
11. \_\_\_\_\_
12. \_\_\_\_\_
13. \_\_\_\_\_
14. \_\_\_\_\_
15. \_\_\_\_\_

- 1) Which coordinate plane has a shape at (4 , 0)?
- 2) Which coordinate plane has a shape at (3 , 10)?
- 3) Which coordinate plane has a shape at (4 , 8)?
- 4) Which coordinate plane has a shape at (4 , 4)?
- 5) Which coordinate plane has a shape at (10 , 2)?
- 6) Which coordinate plane has a shape at (8 , 6)?
- 7) Which coordinate plane has a shape at (4 , 2)?
- 8) Which coordinate plane has a shape at (4 , 10)?
- 9) Which coordinate plane has a shape at (8 , 0)?
- 10) Which coordinate plane has a shape at (8 , 1)?
- 11) Which coordinate plane has a shape at (2 , 3)?
- 12) Which coordinate plane has a shape at (8 , 10)?
- 13) Which coordinate plane has a shape at (6 , 4)?
- 14) Which coordinate plane has a shape at (9 , 0)?
- 15) Which coordinate plane has a shape at (9 , 7)?



Déterminez quelle coordonnées correspondant à chaque figure.

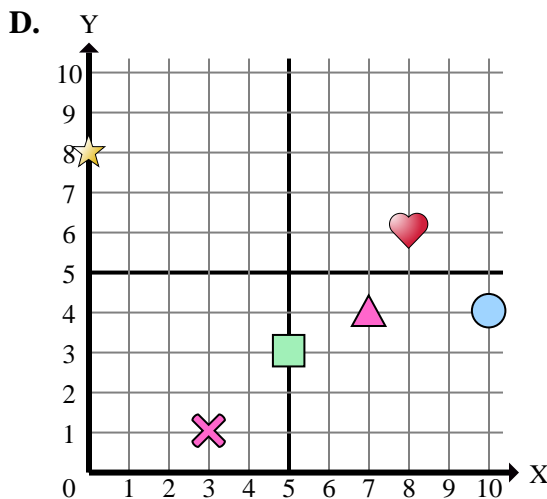
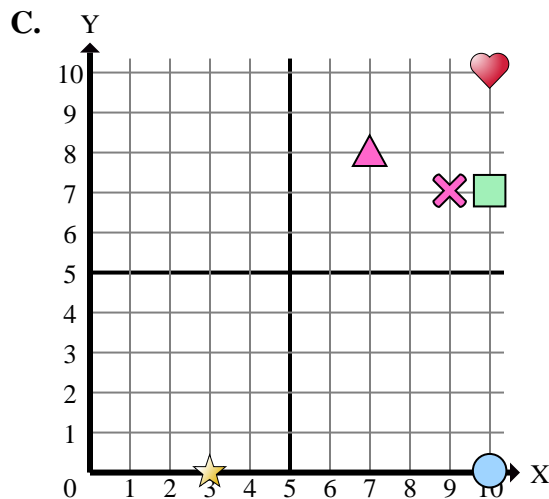
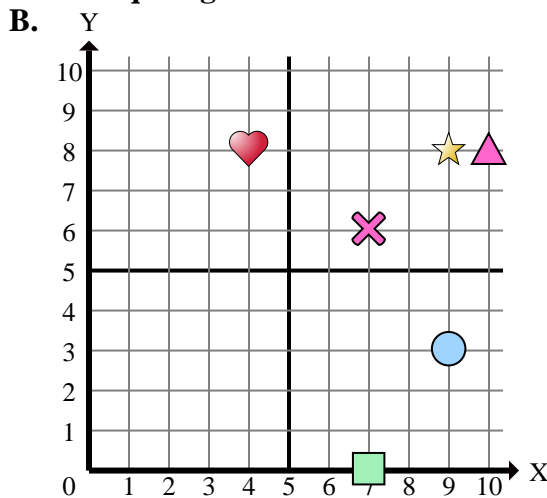
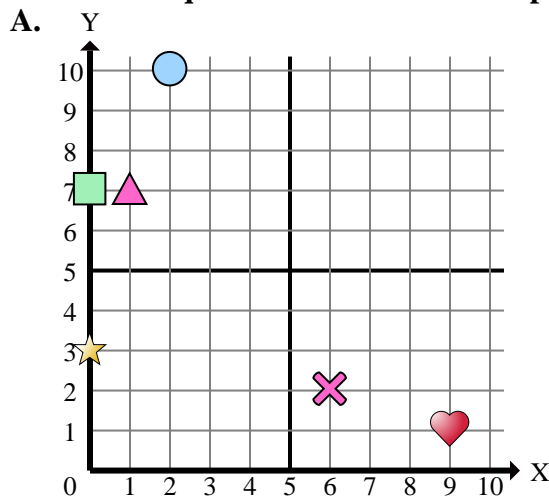
**Réponses**

1. **C**
2. **A**
3. **D**
4. **A**
5. **B**
6. **B**
7. **A**
8. **A**
9. **B**
10. **C**
11. **D**
12. **D**
13. **C**
14. **C**
15. **D**

- 1) Which coordinate plane has a shape at (4 , 0)?
- 2) Which coordinate plane has a shape at (3 , 10)?
- 3) Which coordinate plane has a shape at (4 , 8)?
- 4) Which coordinate plane has a shape at (4 , 4)?
- 5) Which coordinate plane has a shape at (10 , 2)?
- 6) Which coordinate plane has a shape at (8 , 6)?
- 7) Which coordinate plane has a shape at (4 , 2)?
- 8) Which coordinate plane has a shape at (4 , 10)?
- 9) Which coordinate plane has a shape at (8 , 0)?
- 10) Which coordinate plane has a shape at (8 , 1)?
- 11) Which coordinate plane has a shape at (2 , 3)?
- 12) Which coordinate plane has a shape at (8 , 10)?
- 13) Which coordinate plane has a shape at (6 , 4)?
- 14) Which coordinate plane has a shape at (9 , 0)?
- 15) Which coordinate plane has a shape at (9 , 7)?



Déterminez quelle coordonnées correspondant à chaque figure.

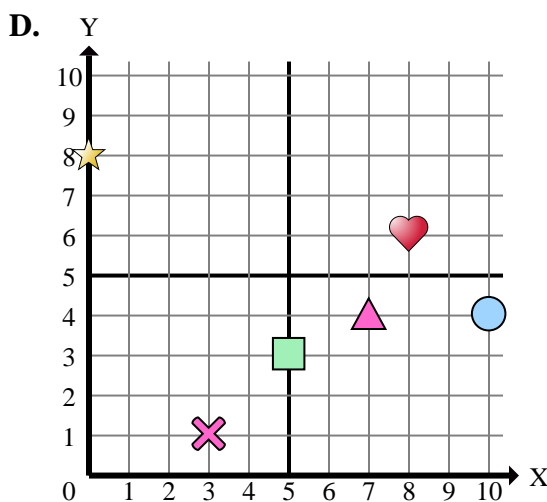
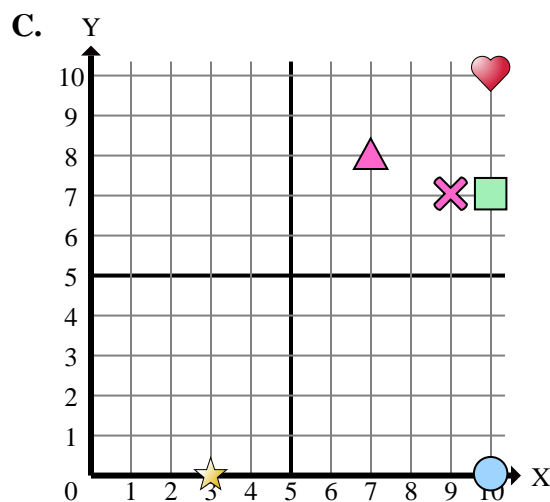
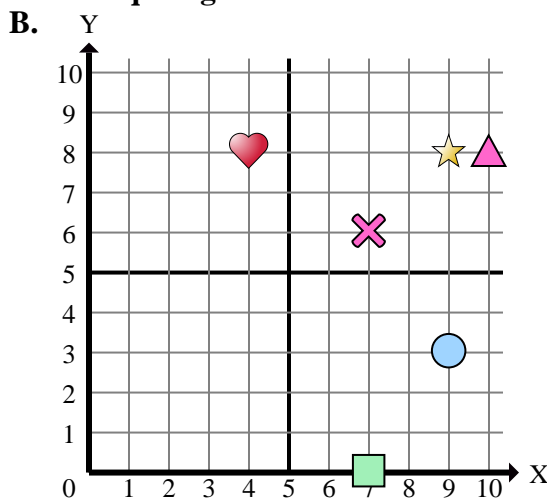
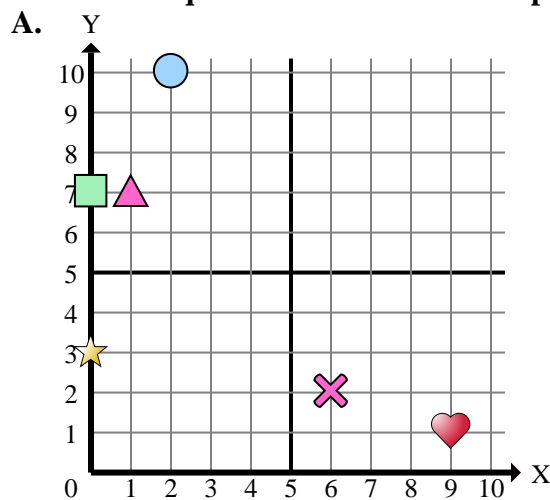
**Réponses**

1. \_\_\_\_\_
2. \_\_\_\_\_
3. \_\_\_\_\_
4. \_\_\_\_\_
5. \_\_\_\_\_
6. \_\_\_\_\_
7. \_\_\_\_\_
8. \_\_\_\_\_
9. \_\_\_\_\_
10. \_\_\_\_\_
11. \_\_\_\_\_
12. \_\_\_\_\_
13. \_\_\_\_\_
14. \_\_\_\_\_
15. \_\_\_\_\_

- 1) Which coordinate plane has a shape at (9 , 8)?
- 2) Which coordinate plane has a shape at (0 , 7)?
- 3) Which coordinate plane has a shape at (3 , 0)?
- 4) Which coordinate plane has a shape at (2 , 10)?
- 5) Which coordinate plane has a shape at (9 , 3)?
- 6) Which coordinate plane has a shape at (6 , 2)?
- 7) Which coordinate plane has a shape at (10 , 0)?
- 8) Which coordinate plane has a shape at (0 , 8)?
- 9) Which coordinate plane has a shape at (10 , 10)?
- 10) Which coordinate plane has a shape at (1 , 7)?
- 11) Which coordinate plane has a shape at (10 , 8)?
- 12) Which coordinate plane has a shape at (10 , 7)?
- 13) Which coordinate plane has a shape at (0 , 3)?
- 14) Which coordinate plane has a shape at (7 , 0)?
- 15) Which coordinate plane has a shape at (4 , 8)?



Déterminez quelle coordonnées correspondant à chaque figure.

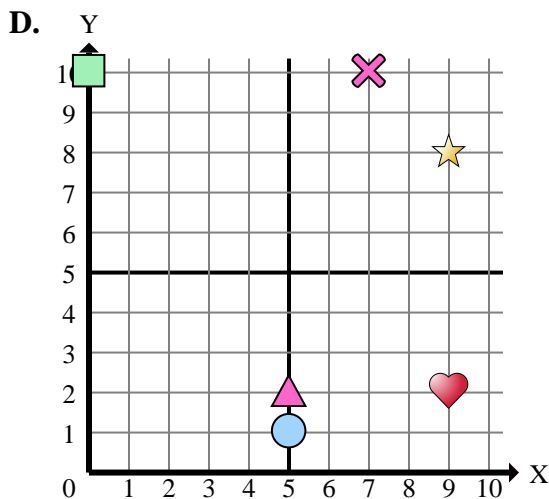
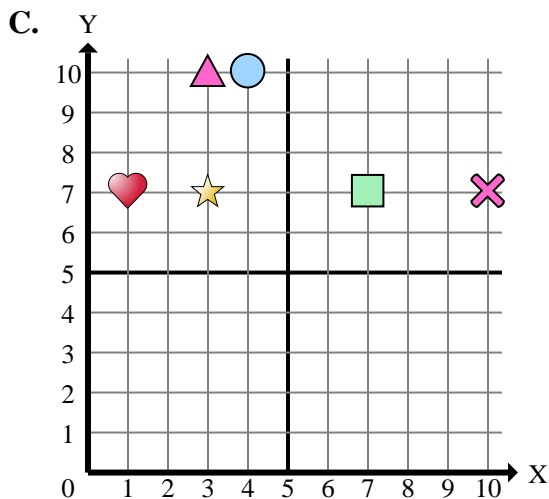
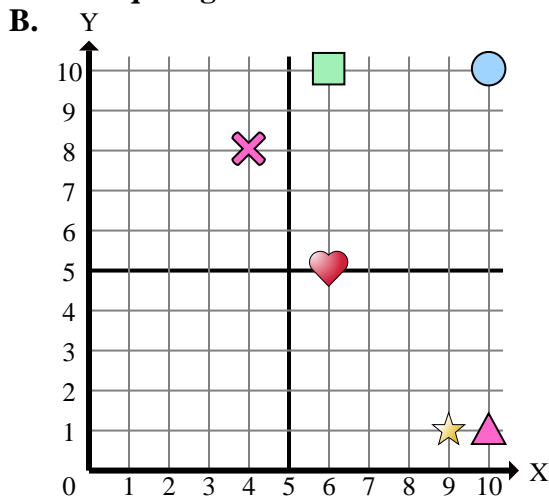
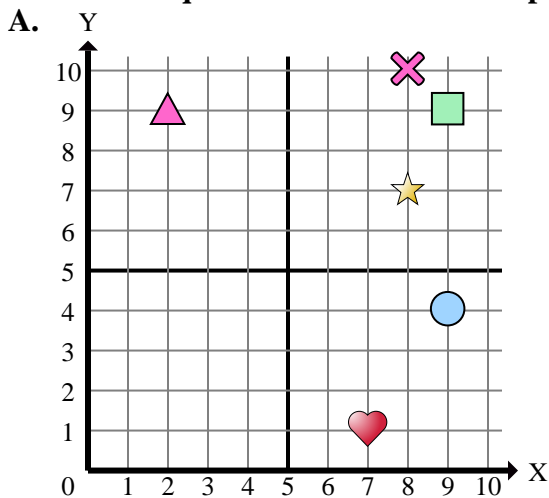
**Réponses**

1. **B**
2. **A**
3. **C**
4. **A**
5. **B**
6. **A**
7. **C**
8. **D**
9. **C**
10. **A**
11. **B**
12. **C**
13. **A**
14. **B**
15. **B**

- 1) Which coordinate plane has a shape at (9 , 8)?
- 2) Which coordinate plane has a shape at (0 , 7)?
- 3) Which coordinate plane has a shape at (3 , 0)?
- 4) Which coordinate plane has a shape at (2 , 10)?
- 5) Which coordinate plane has a shape at (9 , 3)?
- 6) Which coordinate plane has a shape at (6 , 2)?
- 7) Which coordinate plane has a shape at (10 , 0)?
- 8) Which coordinate plane has a shape at (0 , 8)?
- 9) Which coordinate plane has a shape at (10 , 10)?
- 10) Which coordinate plane has a shape at (1 , 7)?
- 11) Which coordinate plane has a shape at (10 , 8)?
- 12) Which coordinate plane has a shape at (10 , 7)?
- 13) Which coordinate plane has a shape at (0 , 3)?
- 14) Which coordinate plane has a shape at (7 , 0)?
- 15) Which coordinate plane has a shape at (4 , 8)?



Déterminez quelle coordonnées correspondant à chaque figure.

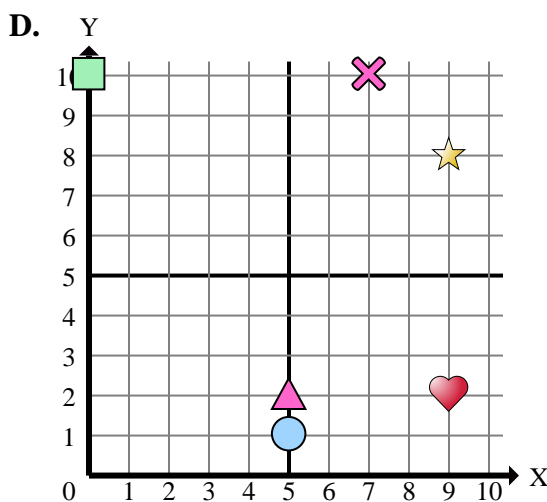
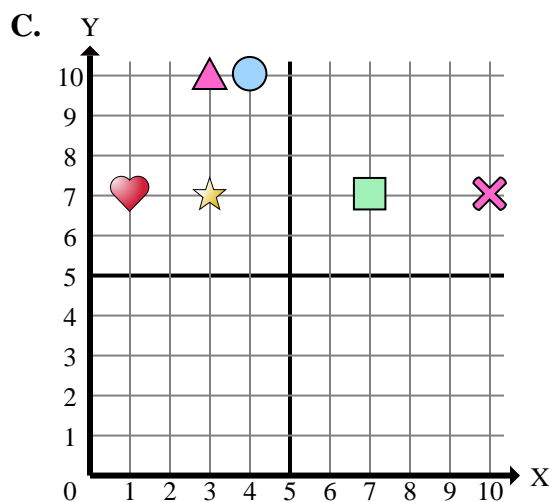
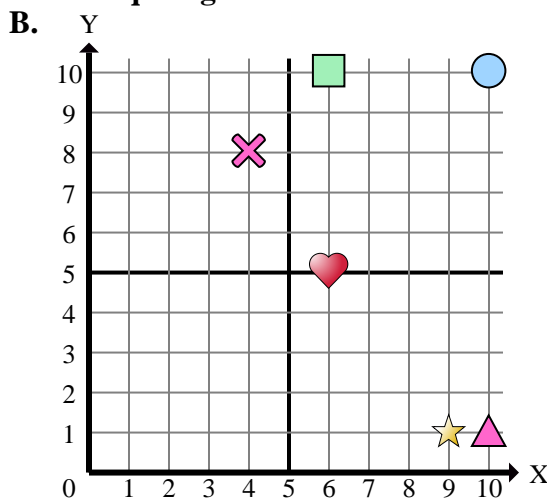
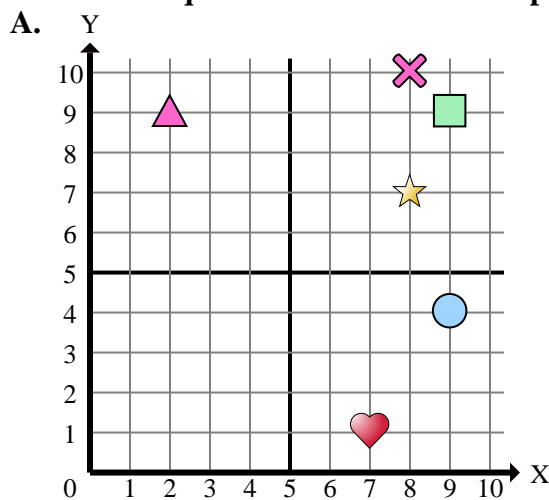
**Réponses**

1. \_\_\_\_\_
2. \_\_\_\_\_
3. \_\_\_\_\_
4. \_\_\_\_\_
5. \_\_\_\_\_
6. \_\_\_\_\_
7. \_\_\_\_\_
8. \_\_\_\_\_
9. \_\_\_\_\_
10. \_\_\_\_\_
11. \_\_\_\_\_
12. \_\_\_\_\_
13. \_\_\_\_\_
14. \_\_\_\_\_
15. \_\_\_\_\_

- 1) Which coordinate plane has a shape at (9 , 2)?
- 2) Which coordinate plane has a shape at (10 , 7)?
- 3) Which coordinate plane has a shape at (7 , 7)?
- 4) Which coordinate plane has a shape at (9 , 4)?
- 5) Which coordinate plane has a shape at (6 , 10)?
- 6) Which coordinate plane has a shape at (2 , 9)?
- 7) Which coordinate plane has a shape at (3 , 7)?
- 8) Which coordinate plane has a shape at (7 , 10)?
- 9) Which coordinate plane has a shape at (9 , 9)?
- 10) Which coordinate plane has a shape at (6 , 5)?
- 11) Which coordinate plane has a shape at (5 , 2)?
- 12) Which coordinate plane has a shape at (8 , 10)?
- 13) Which coordinate plane has a shape at (10 , 1)?
- 14) Which coordinate plane has a shape at (5 , 1)?
- 15) Which coordinate plane has a shape at (0 , 10)?



Déterminez quelle coordonnées correspondant à chaque figure.

**Réponses**

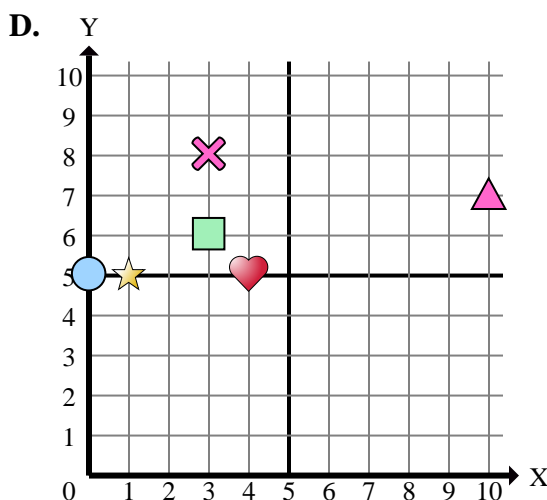
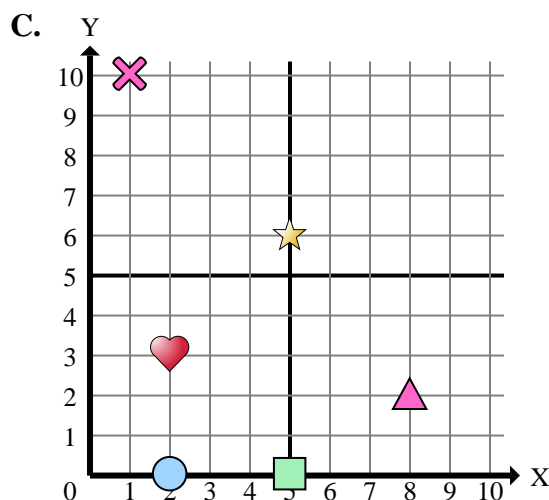
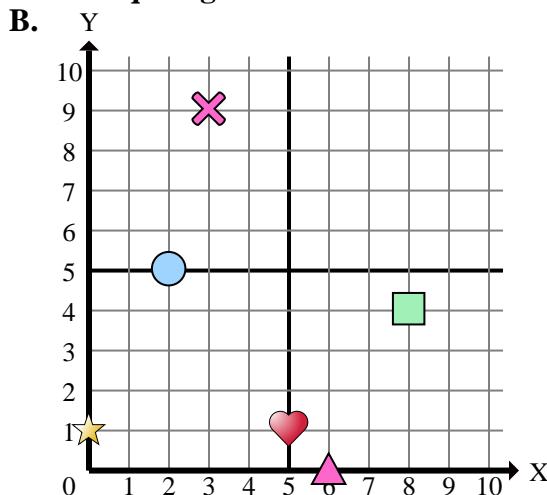
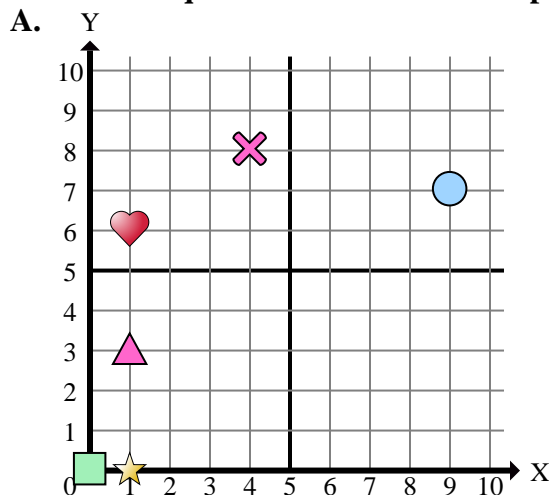
1. **D**
2. **C**
3. **C**
4. **A**
5. **B**
6. **A**
7. **C**
8. **D**
9. **A**
10. **B**
11. **D**
12. **A**
13. **B**
14. **D**
15. **D**

- 1) Which coordinate plane has a shape at (9 , 2)?
- 2) Which coordinate plane has a shape at (10 , 7)?
- 3) Which coordinate plane has a shape at (7 , 7)?
- 4) Which coordinate plane has a shape at (9 , 4)?
- 5) Which coordinate plane has a shape at (6 , 10)?
- 6) Which coordinate plane has a shape at (2 , 9)?
- 7) Which coordinate plane has a shape at (3 , 7)?
- 8) Which coordinate plane has a shape at (7 , 10)?
- 9) Which coordinate plane has a shape at (9 , 9)?
- 10) Which coordinate plane has a shape at (6 , 5)?
- 11) Which coordinate plane has a shape at (5 , 2)?
- 12) Which coordinate plane has a shape at (8 , 10)?
- 13) Which coordinate plane has a shape at (10 , 1)?
- 14) Which coordinate plane has a shape at (5 , 1)?
- 15) Which coordinate plane has a shape at (0 , 10)?





Déterminez quelle coordonnées correspondant à chaque figure.

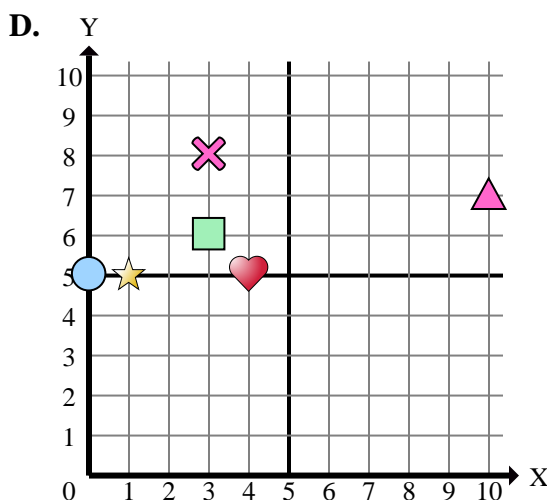
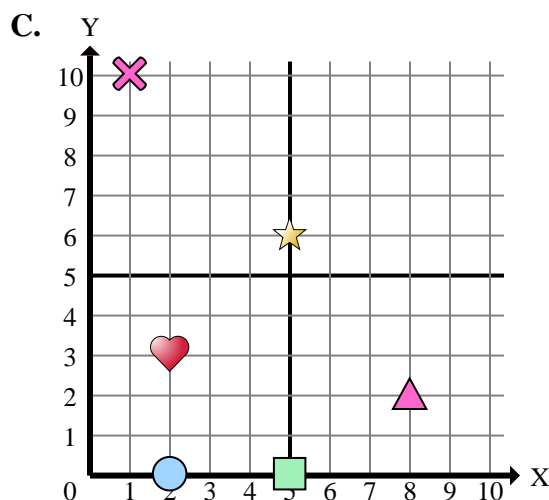
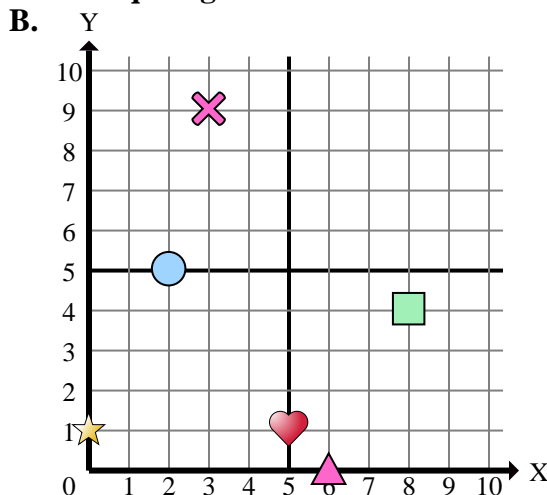
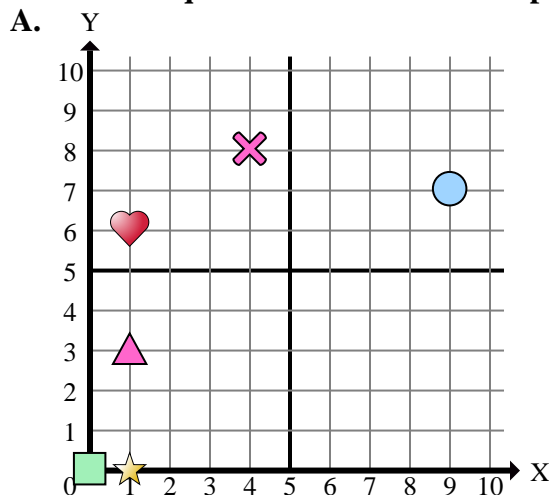
**Réponses**

1. \_\_\_\_\_
2. \_\_\_\_\_
3. \_\_\_\_\_
4. \_\_\_\_\_
5. \_\_\_\_\_
6. \_\_\_\_\_
7. \_\_\_\_\_
8. \_\_\_\_\_
9. \_\_\_\_\_
10. \_\_\_\_\_
11. \_\_\_\_\_
12. \_\_\_\_\_
13. \_\_\_\_\_
14. \_\_\_\_\_
15. \_\_\_\_\_

- 1) Which coordinate plane has a shape at (0 , 1)?
- 2) Which coordinate plane has a shape at (3 , 9)?
- 3) Which coordinate plane has a shape at (8 , 4)?
- 4) Which coordinate plane has a shape at (8 , 2)?
- 5) Which coordinate plane has a shape at (10 , 7)?
- 6) Which coordinate plane has a shape at (4 , 5)?
- 7) Which coordinate plane has a shape at (1 , 0)?
- 8) Which coordinate plane has a shape at (5 , 1)?
- 9) Which coordinate plane has a shape at (4 , 8)?
- 10) Which coordinate plane has a shape at (3 , 6)?
- 11) Which coordinate plane has a shape at (9 , 7)?
- 12) Which coordinate plane has a shape at (2 , 3)?
- 13) Which coordinate plane has a shape at (1 , 6)?
- 14) Which coordinate plane has a shape at (2 , 0)?
- 15) Which coordinate plane has a shape at (0 , 0)?

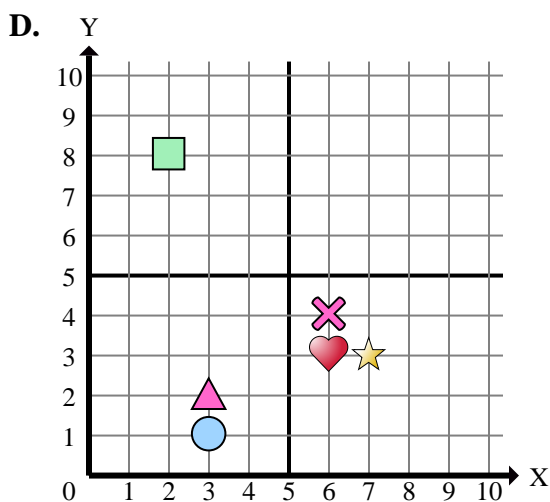
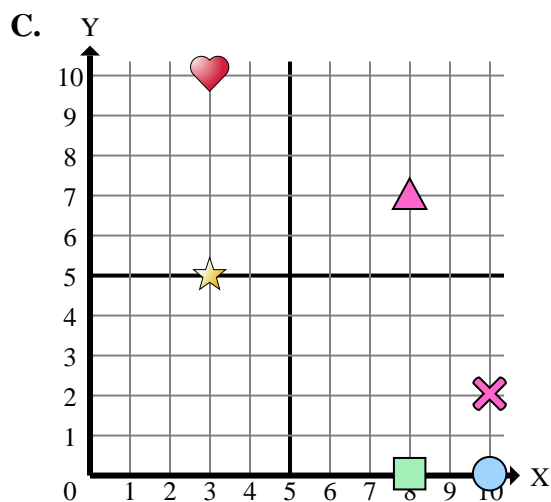
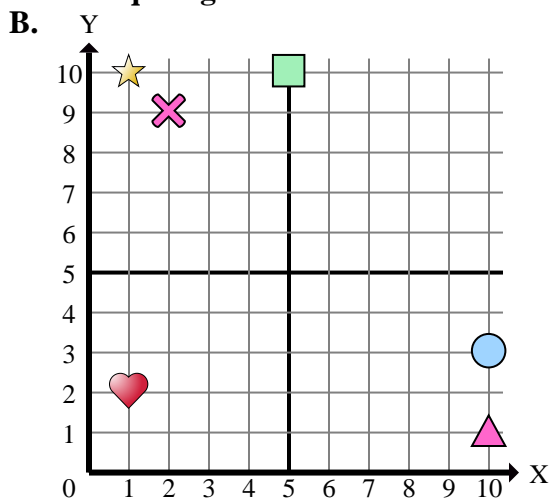
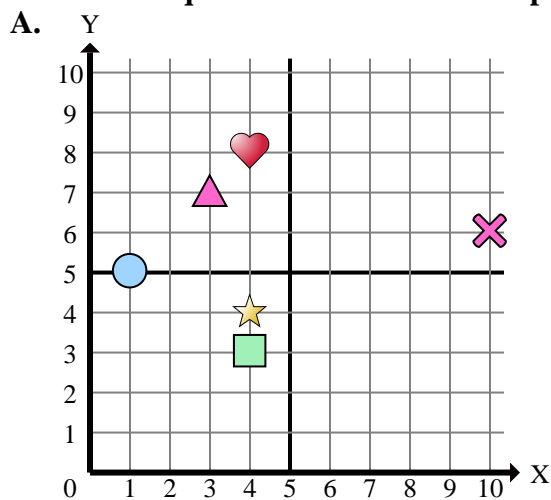


Déterminez quelle coordonnées correspondant à chaque figure.

**Réponses**

1. **B**
2. **B**
3. **B**
4. **C**
5. **D**
6. **D**
7. **A**
8. **B**
9. **A**
10. **D**
11. **A**
12. **C**
13. **A**
14. **C**
15. **A**

- 1) Which coordinate plane has a shape at (0 , 1)?
- 2) Which coordinate plane has a shape at (3 , 9)?
- 3) Which coordinate plane has a shape at (8 , 4)?
- 4) Which coordinate plane has a shape at (8 , 2)?
- 5) Which coordinate plane has a shape at (10 , 7)?
- 6) Which coordinate plane has a shape at (4 , 5)?
- 7) Which coordinate plane has a shape at (1 , 0)?
- 8) Which coordinate plane has a shape at (5 , 1)?
- 9) Which coordinate plane has a shape at (4 , 8)?
- 10) Which coordinate plane has a shape at (3 , 6)?
- 11) Which coordinate plane has a shape at (9 , 7)?
- 12) Which coordinate plane has a shape at (2 , 3)?
- 13) Which coordinate plane has a shape at (1 , 6)?
- 14) Which coordinate plane has a shape at (2 , 0)?
- 15) Which coordinate plane has a shape at (0 , 0)?

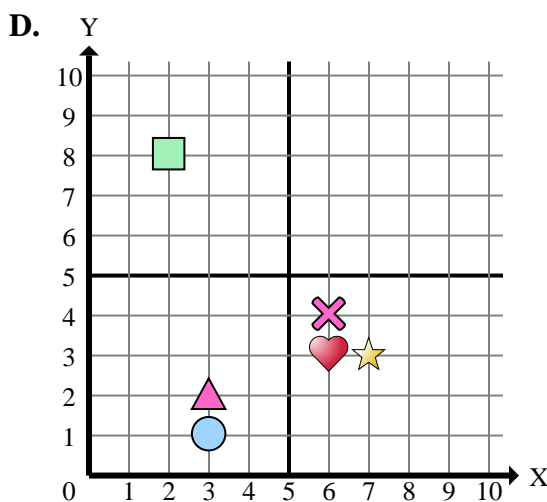
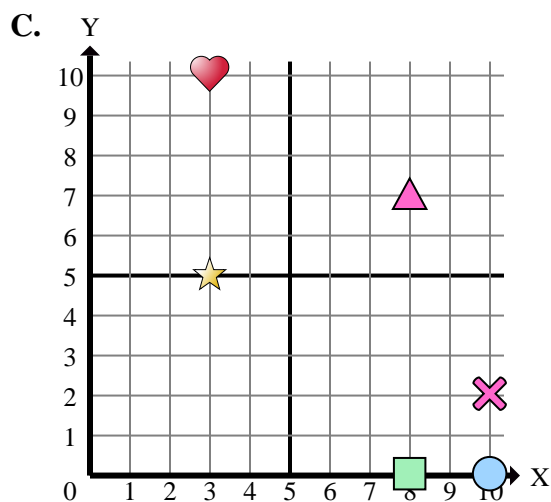
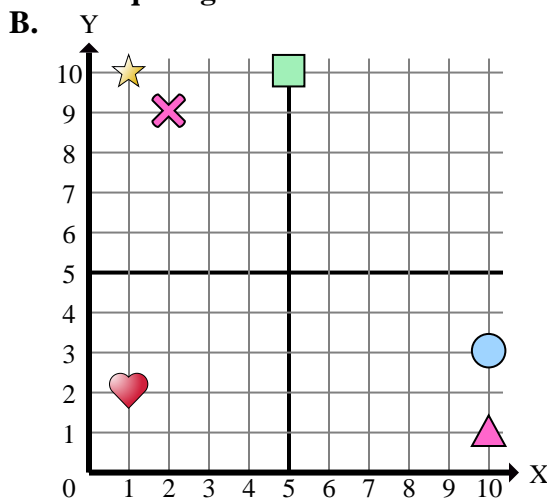
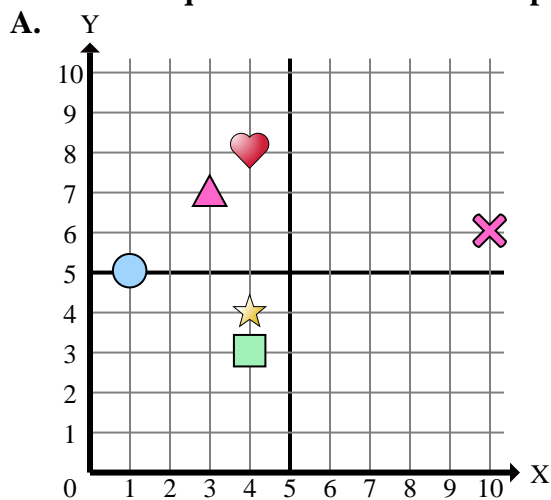
**Déterminez quelle coordonnées correspondant à chaque figure.****Réponses**

1. \_\_\_\_\_
2. \_\_\_\_\_
3. \_\_\_\_\_
4. \_\_\_\_\_
5. \_\_\_\_\_
6. \_\_\_\_\_
7. \_\_\_\_\_
8. \_\_\_\_\_
9. \_\_\_\_\_
10. \_\_\_\_\_
11. \_\_\_\_\_
12. \_\_\_\_\_
13. \_\_\_\_\_
14. \_\_\_\_\_
15. \_\_\_\_\_

- 1) Which coordinate plane has a shape at (2 , 8)?
- 2) Which coordinate plane has a shape at (7 , 3)?
- 3) Which coordinate plane has a shape at (8 , 7)?
- 4) Which coordinate plane has a shape at (3 , 7)?
- 5) Which coordinate plane has a shape at (6 , 4)?
- 6) Which coordinate plane has a shape at (3 , 2)?
- 7) Which coordinate plane has a shape at (4 , 3)?
- 8) Which coordinate plane has a shape at (3 , 10)?
- 9) Which coordinate plane has a shape at (4 , 8)?
- 10) Which coordinate plane has a shape at (10 , 3)?
- 11) Which coordinate plane has a shape at (1 , 5)?
- 12) Which coordinate plane has a shape at (5 , 10)?
- 13) Which coordinate plane has a shape at (2 , 9)?
- 14) Which coordinate plane has a shape at (10 , 1)?
- 15) Which coordinate plane has a shape at (6 , 3)?



Déterminez quelle coordonnées correspondant à chaque figure.

**Réponses**

1. **D**
2. **D**
3. **C**
4. **A**
5. **D**
6. **D**
7. **A**
8. **C**
9. **A**
10. **B**
11. **A**
12. **B**
13. **B**
14. **B**
15. **D**

- 1) Which coordinate plane has a shape at (2 , 8)?
- 2) Which coordinate plane has a shape at (7 , 3)?
- 3) Which coordinate plane has a shape at (8 , 7)?
- 4) Which coordinate plane has a shape at (3 , 7)?
- 5) Which coordinate plane has a shape at (6 , 4)?
- 6) Which coordinate plane has a shape at (3 , 2)?
- 7) Which coordinate plane has a shape at (4 , 3)?
- 8) Which coordinate plane has a shape at (3 , 10)?
- 9) Which coordinate plane has a shape at (4 , 8)?
- 10) Which coordinate plane has a shape at (10 , 3)?
- 11) Which coordinate plane has a shape at (1 , 5)?
- 12) Which coordinate plane has a shape at (5 , 10)?
- 13) Which coordinate plane has a shape at (2 , 9)?
- 14) Which coordinate plane has a shape at (10 , 1)?
- 15) Which coordinate plane has a shape at (6 , 3)?