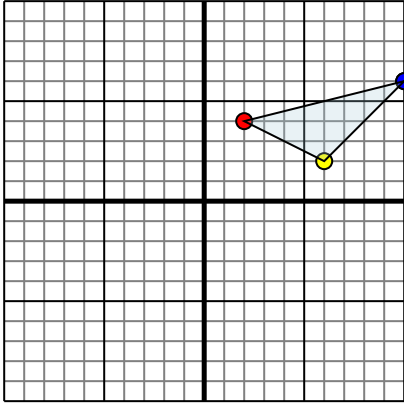




Reflétez chaque forme comme décrit.

1)

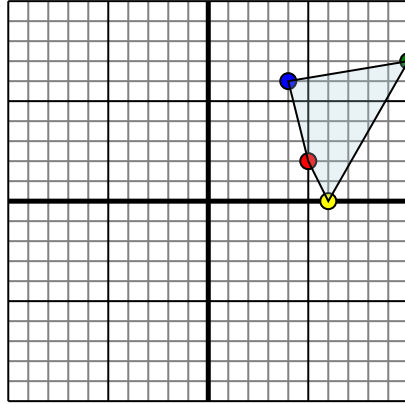


The shape above has the following coordinates:

- A. (2,4)
- B. (6,2)
- C. (10,6)

Reflect the shape over the X axis.

2)

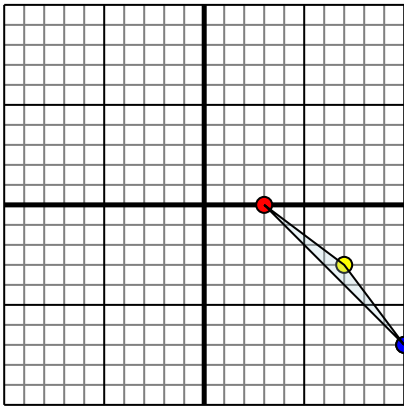


The shape above has the following coordinates:

- A. (5,2)
- B. (6,0)
- C. (10,7)
- D. (4,6)

Reflect the shape over the Y axis.

3)

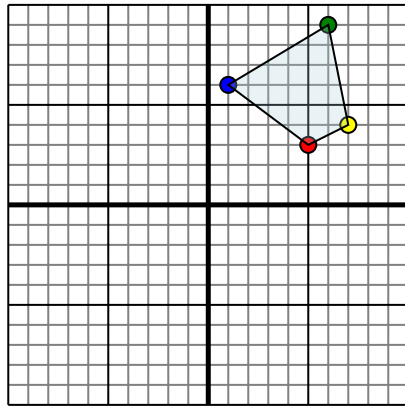


The shape above has the following coordinates:

- A. (3,0)
- B. (7,-3)
- C. (10,-7)

Reflect the shape over the X axis.

4)



The shape above has the following coordinates:

- A. (5,3)
- B. (7,4)
- C. (6,9)
- D. (1,6)

Reflect the shape over the Y axis.

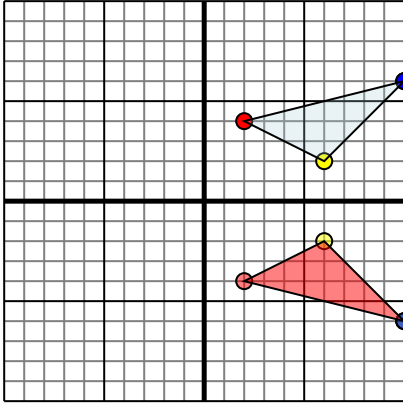
Réponses

- 1. _____
- 2. _____
- 3. _____
- 4. _____



Réflétez chaque forme comme décrit.

1)

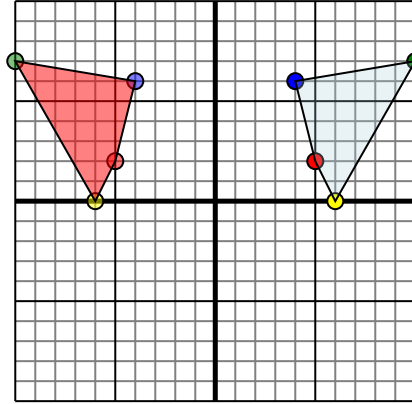


The shape above has the following coordinates:

- A. (2,4)
- B. (6,2)
- C. (10,6)

Reflect the shape over the X axis.

2)

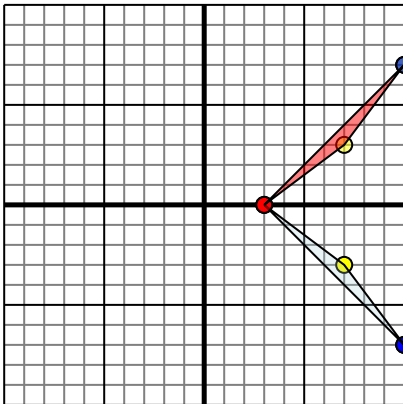


The shape above has the following coordinates:

- A. (5,2)
- B. (6,0)
- C. (10,7)
- D. (4,6)

Reflect the shape over the Y axis.

3)

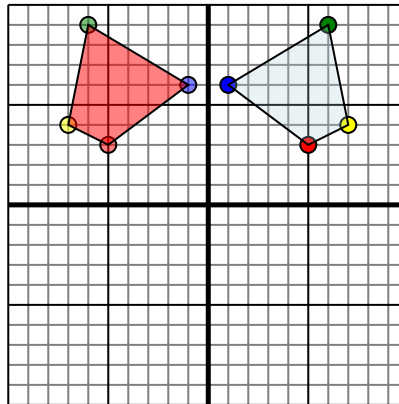


The shape above has the following coordinates:

- A. (3,0)
- B. (7,-3)
- C. (10,-7)

Reflect the shape over the X axis.

4)



The shape above has the following coordinates:

- A. (5,3)
- B. (7,4)
- C. (6,9)
- D. (1,6)

Reflect the shape over the Y axis.

Réponses

1. **2-4** **6-2** **10-6** Graph
2. **-5-2** **-6-0** **-10-7** **-4-6** Graph
3. **3-0** **7-3** **10-7** Graph
4. **-5-3** **-7-4** **-6-9** **-1-6** Graph