

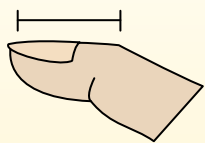


Déterminez quelle lettre représente le mieux la longueur / hauteur.

Réponses

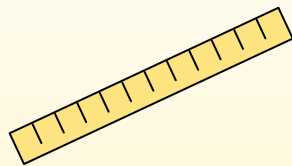
**Polegadas (in)**

Una pulgada es aproximadamente la distancia de la última articulación de su dedo.



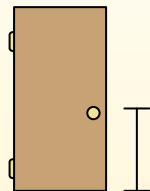
**Pie (pies)**

Um pé mede 12 polegadas. O comprimento de uma régua.



**Jarda (jd)**

1 jarda é o mesmo que 3 pés. Do chão até a maçaneta da porta são cerca de 1 jarda.




**Milla (mi)**

Uma milha equivale a 5.280 pés. A maioria das estradas principais tem pelo menos uma milha de comprimento.



1. \_\_\_\_\_
2. \_\_\_\_\_
3. \_\_\_\_\_
4. \_\_\_\_\_
5. \_\_\_\_\_
6. \_\_\_\_\_
7. \_\_\_\_\_
8. \_\_\_\_\_
9. \_\_\_\_\_

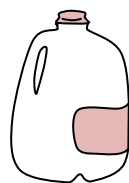
1)



Papier pour cahier

- A. 1 yard
- B. 6 inches
- C. 2 feet
- D. 11 inches

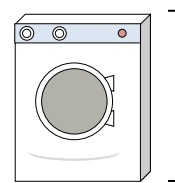
2)



Gallon de lait

- A. 11 feet
- B. 9 inches
- C. 6 inches
- D. 3 inches

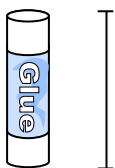
3)



Machine à laver

- A. 4 inches
- B. 1 foot
- C. 3 feet
- D. 2 yards


4)



Bâton de colle

- A. 1 foot
- B. 3 inches
- C. 4 miles
- D. 10 inches

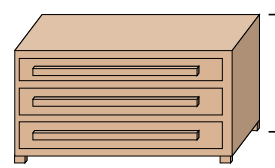
5)



l'éléphant

- A. 18 inches
- B. 4 yards
- C. 5 feet
- D. 1 mile

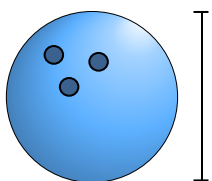
6)



Une commode

- A. 18 inches
- B. 12 inches
- C. 3 feet
- D. 3 yards

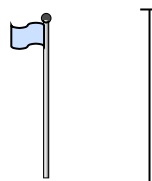
7)



Hauteur de la boule de bowling

- A. 4 inches
- B. 1 yard
- C. 10 inches
- D. 10 feet

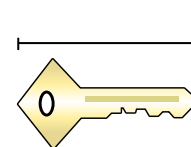
8)



mât de drapeau

- A. 1 mile
- B. 10 yards
- C. 12 inches
- D. 5 feet

9)



Clé

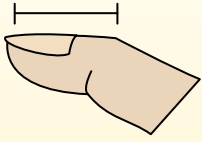
- A. 5 feet
- B. 2 inches
- C. 6 inches
- D. 2 yards



Déterminez quelle lettre représente le mieux la longueur / hauteur.

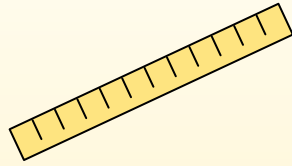
**Polegadas (in)**

Una pulgada es aproximadamente la distancia de la última articulación de su dedo.



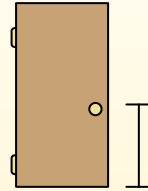
**Pie (pies)**

Um pé mede 12 polegadas. O comprimento de uma régua.



**Jarda (jd)**

1 jarda é o mesmo que 3 pés. Do chão até a maçaneta da porta são cerca de 1 jarda.



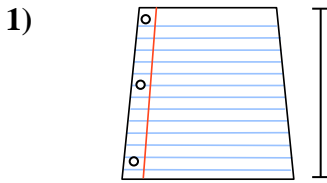
**Milla (mi)**

Uma milha equivale a 5.280 pés. A maioria das estradas principais tem pelo menos uma milha de comprimento.




**Réponses**

1.     **D**
2.     **B**
3.     **C**
4.     **B**
5.     **B**
6.     **C**
7.     **C**
8.     **B**
9.     **B**



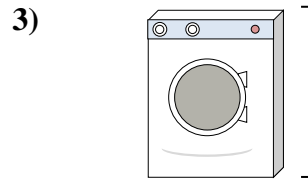
Papier pour cahier

- A. 1 yard
- B. 6 inches
- C. 2 feet
- D. 11 inches



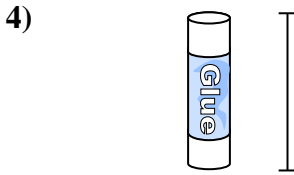
Gallon de lait

- A. 11 feet
- B. 9 inches
- C. 6 inches
- D. 3 inches




Machine à laver

- A. 4 inches
- B. 1 foot
- C. 3 feet
- D. 2 yards



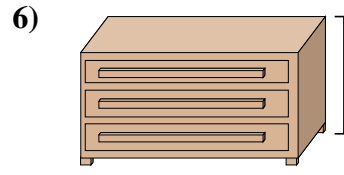
Bâton de colle

- A. 1 foot
- B. 3 inches
- C. 4 miles
- D. 10 inches




l'éléphant

- A. 18 inches
- B. 4 yards
- C. 5 feet
- D. 1 mile



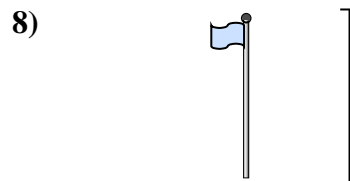
Une commode

- A. 18 inches
- B. 12 inches
- C. 3 feet
- D. 3 yards



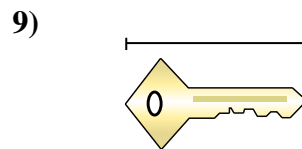
Hauteur de la boule de bowling

- A. 4 inches
- B. 1 yard
- C. 10 inches
- D. 10 feet



mât de drapeau

- A. 1 mile
- B. 10 yards
- C. 12 inches
- D. 5 feet



Clé

- A. 5 feet
- B. 2 inches
- C. 6 inches
- D. 2 yards